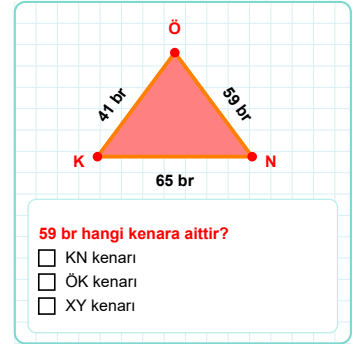
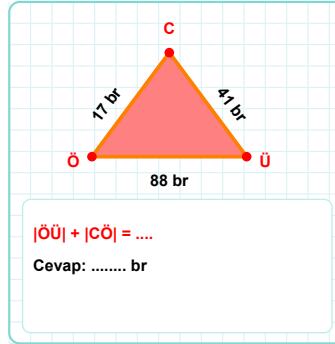
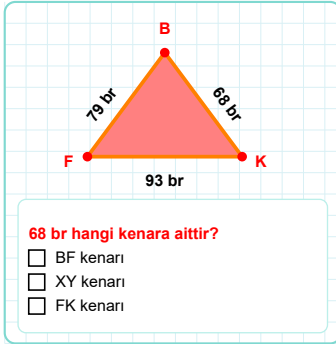
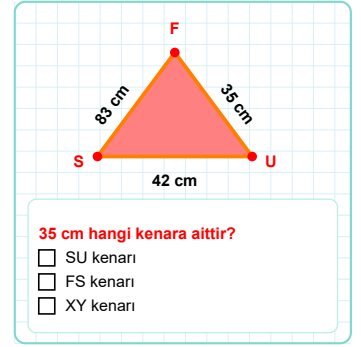
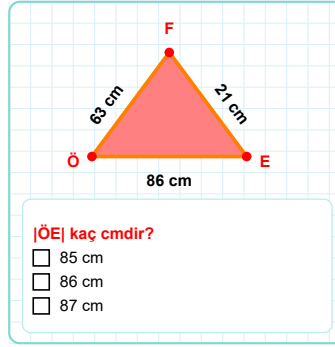
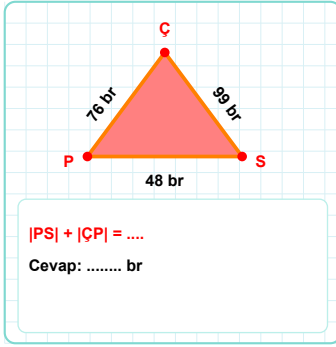
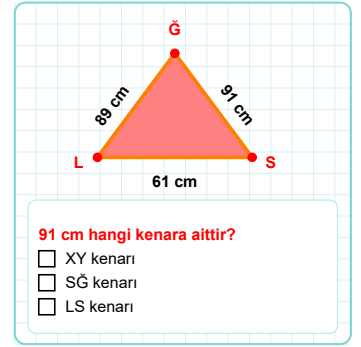
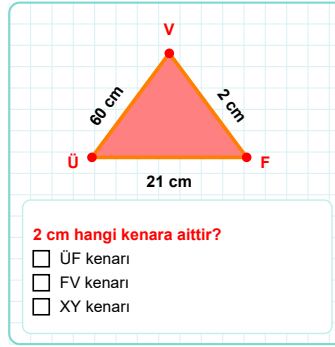
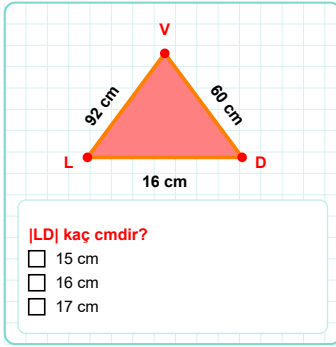
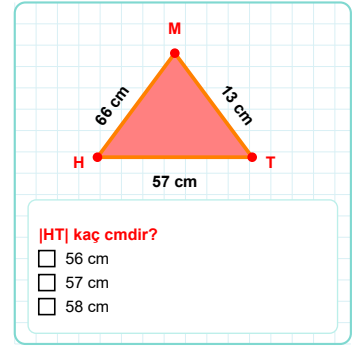
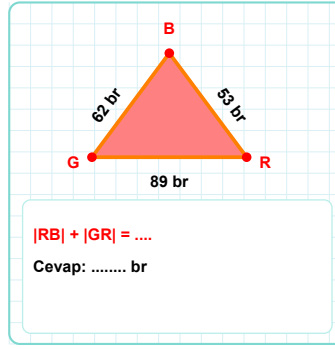
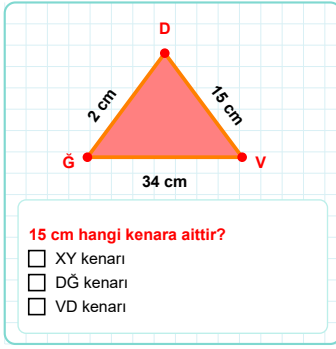
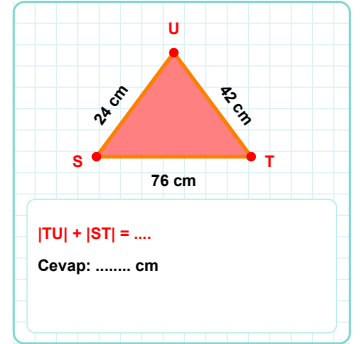
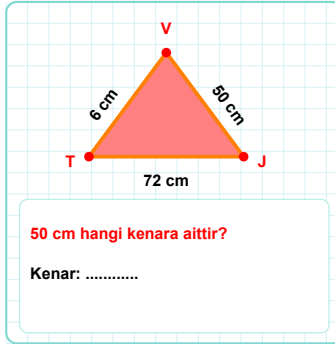
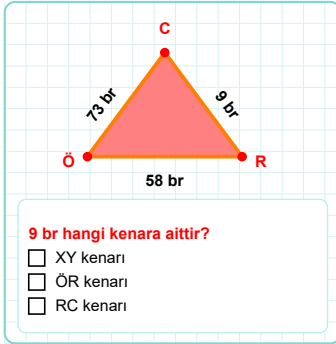
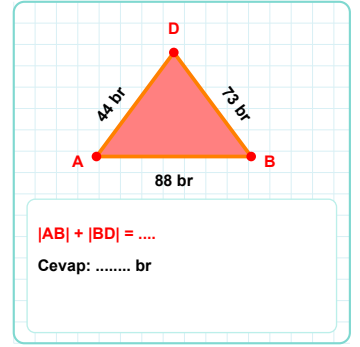
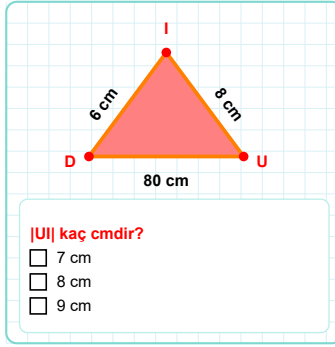
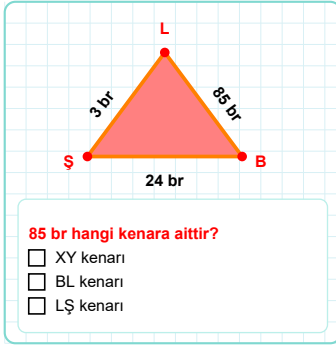
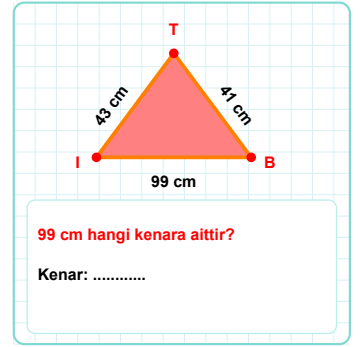
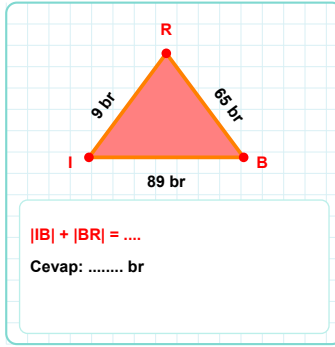
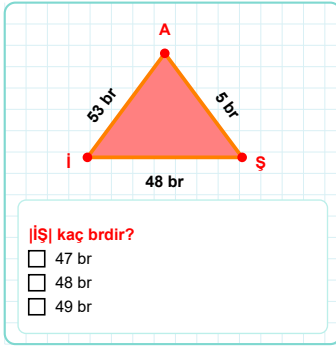
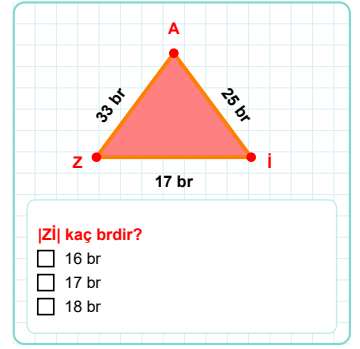
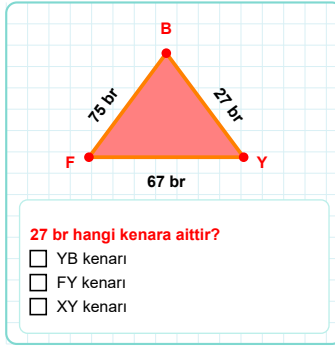
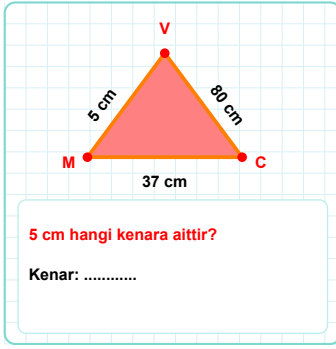
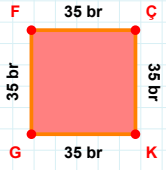


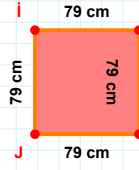
SORU: Aşağıdaki geometrik şekillerle ilgili soruları cevaplayınız.

SORU: Aşağıdaki geometrik şekillerle ilgili soruları cevaplayınız.

SORU: Aşağıdaki geometrik şekillerle ilgili soruları cevaplayınız.

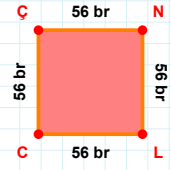
35 br hangi kenara aittir?

Kenar:



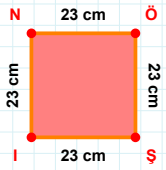
79 cm hangi kenara aittir?

Kenar:



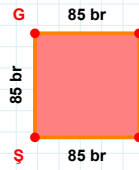
|ÇN| kaç brdir?

- ☐ 55 br
☐ 56 br
☐ 57 br



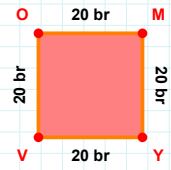
|NÖ| kaç cmdir?

- ☐ 22 cm
☐ 23 cm
☐ 24 cm



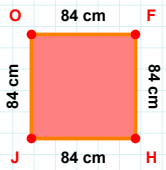
|ŞG| kaç brdir?

- ☐ 84 br
☐ 85 br
☐ 86 br



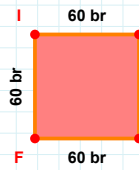
20 br hangi kenara aittir?

- ☐ VM kenarı
☐ VO kenarı
☐ OM kenarı



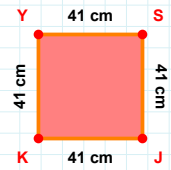
84 cm hangi kenara aittir?

Kenar:



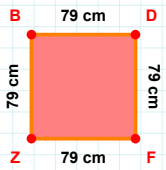
60 br hangi kenara aittir?

Kenar:



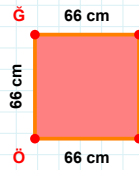
|JK| kaç cmdir?

- ☐ 40 cm
☐ 41 cm
☐ 42 cm



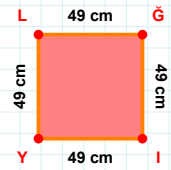
|DF| kaç cmdir?

- ☐ 78 cm
☐ 79 cm
☐ 80 cm



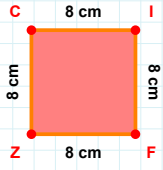
66 cm hangi kenara aittir?

Kenar:



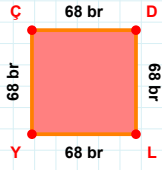
|LY| + |Ğİ| =

Cevap: cm

SORU: Aşağıdaki geometrik şekillerle ilgili soruları cevaplayınız.

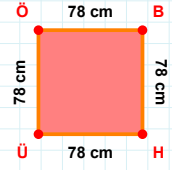
8 cm hangi kenara aittir?

- ☐ CF kenarı
☐ CI kenarı
☐ ZC kenarı



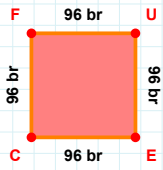
68 br hangi kenara aittir?

- ☐ LY kenarı
☐ DL kenarı
☐ YD kenarı

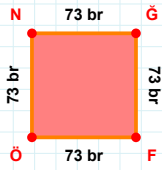


78 cm hangi kenara aittir?

- ☐ ÜÖ kenarı
☐ ÖB kenarı
☐ ÜB kenarı

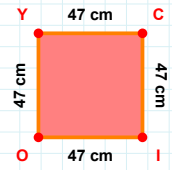
 $|UE| + |EC| = \dots$

Cevap: br

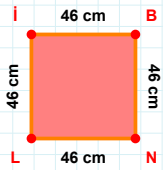


73 br hangi kenara aittir?

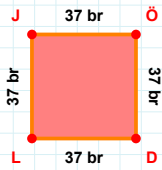
Kenar:

 $|YC|$ kaç cm'dir?

- ☐ 46 cm
☐ 47 cm
☐ 48 cm

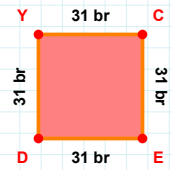
 $|NL| + |İB| = \dots$

Cevap: cm



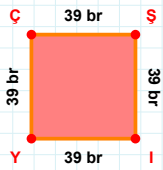
37 br hangi kenara aittir?

- ☐ ÖD kenarı
☐ JD kenarı
☐ DL kenarı

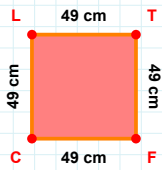


31 br hangi kenara aittir?

- ☐ YC kenarı
☐ ED kenarı
☐ YE kenarı

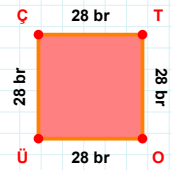
 $|ÇŞ| + |İY| = \dots$

Cevap: br

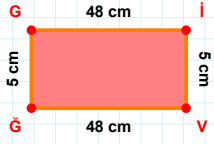


49 cm hangi kenara aittir?

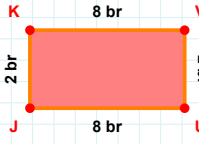
Kenar:

 $|ÜÇ|$ kaç br'dir?

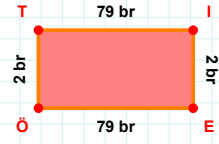
- ☐ 27 br
☐ 28 br
☐ 29 br

SORU: Aşağıdaki geometrik şekillerle ilgili soruları cevaplayınız.**5 cm hangi kenara aittir?**

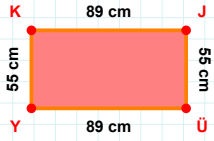
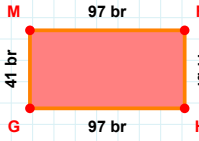
- ☐ Gİ kenarı
☐ Vİ kenarı
☐ KV kenarı

**2 br hangi kenara aittir?**

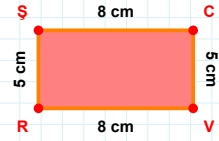
- ☐ KV kenarı
☐ UK kenarı
☐ VU kenarı

**2 br hangi kenara aittir?**

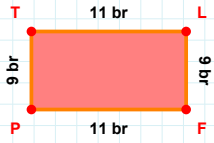
- ☐ İÖ kenarı
☐ TI kenarı
☐ IE kenarı

**|JÜ| + |ÜY| =****Cevap:** cm**41 br hangi kenara aittir?**

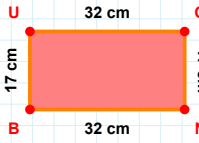
- ☐ HM kenarı
☐ HG kenarı
☐ GM kenarı

**5 cm hangi kenara aittir?**

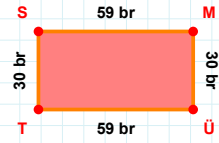
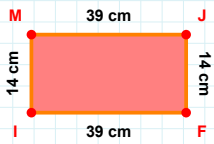
- ☐ ŞV kenarı
☐ RŞ kenarı
☐ CV kenarı

**9 br hangi kenara aittir?**

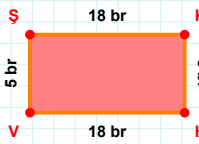
- ☐ LF kenarı
☐ FP kenarı
☐ TF kenarı

**17 cm hangi kenara aittir?**

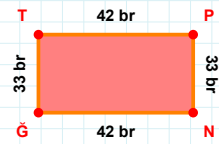
- ☐ NB kenarı
☐ NU kenarı
☐ ON kenarı

**|MÜ| + |ÜT| =****Cevap:** br**|IM| kaç cm'dir?**

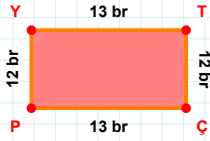
- ☐ 13 cm
☐ 14 cm
☐ 15 cm

**5 br hangi kenara aittir?**

- ☐ ŞK kenarı
☐ KH kenarı
☐ HŞ kenarı

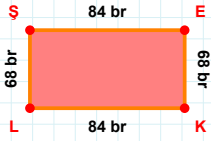
**33 br hangi kenara aittir?**

- ☐ Nİ kenarı
☐ İT kenarı
☐ İP kenarı

SORU: Aşağıdaki geometrik şekillerle ilgili soruları cevaplayınız.

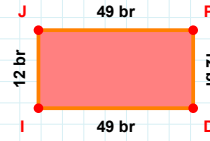
12 br hangi kenara aittir?

Kenar:



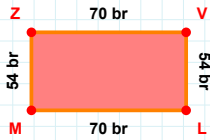
84 br hangi kenara aittir?

Kenar:

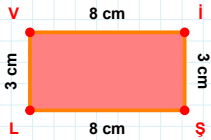


12 br hangi kenara aittir?

Kenar:

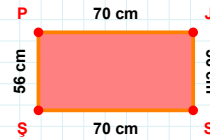
 $|MZ| + |ZV| = \dots$

Cevap: br

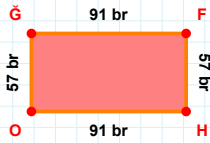


3 cm hangi kenara aittir?

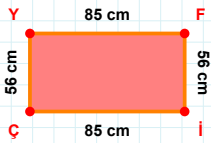
- ☐ Vİ kenarı
☐ LV kenarı
☐ İL kenarı

 $|ŞP| + |PJ| = \dots$

Cevap: cm

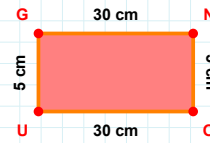
 $|ĞF| + |FH| = \dots$

Cevap: br



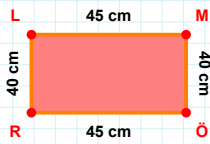
56 cm hangi kenara aittir?

- ☐ FÇ kenarı
☐ ÇY kenarı
☐ İÇ kenarı



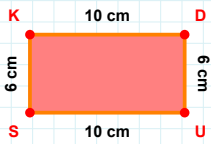
5 cm hangi kenara aittir?

- ☐ OG kenarı
☐ OU kenarı
☐ NO kenarı

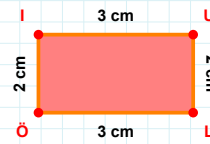


40 cm hangi kenara aittir?

Kenar:

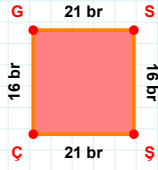
 $|KD|$ kaç cm'dir?

- ☐ 9 cm
☐ 10 cm
☐ 11 cm



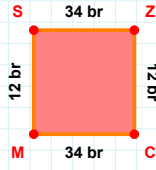
2 cm hangi kenara aittir?

Kenar:

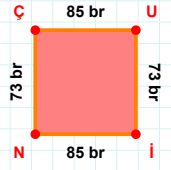
SORU: Aşağıdaki geometrik şekillerle ilgili soruları cevaplayınız.

16 br hangi kenara aittir?

- ☐ GŞ kenarı
☐ ÇG kenarı
☐ ŞÇ kenarı

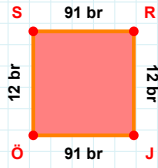
 $|CM| + |SZ| = \dots$

Cevap: br

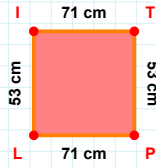


73 br hangi kenara aittir?

- ☐ İN kenarı
☐ İÇ kenarı
☐ NÇ kenarı

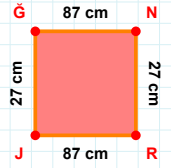
 $|SR| + |ÖS| = \dots$

Cevap: br



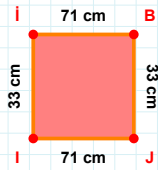
71 cm hangi kenara aittir?

Kenar:



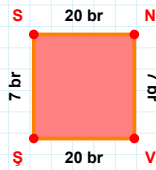
27 cm hangi kenara aittir?

- ☐ NR kenarı
☐ JĞ kenarı
☐ ĞR kenarı

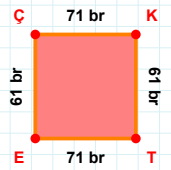


33 cm hangi kenara aittir?

Kenar:

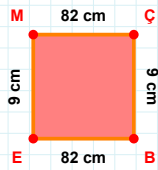
 $|VS|$ kaç brdir?

- ☐ 19 br
☐ 20 br
☐ 21 br

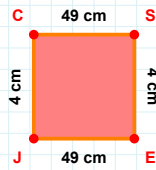


61 br hangi kenara aittir?

- ☐ KT kenarı
☐ EÇ kenarı
☐ KE kenarı

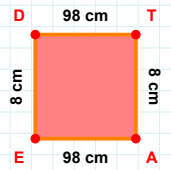
 $|BE|$ kaç cmdir?

- ☐ 81 cm
☐ 82 cm
☐ 83 cm



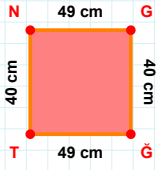
4 cm hangi kenara aittir?

- ☐ JC kenarı
☐ SE kenarı
☐ EC kenarı



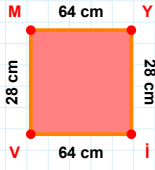
98 cm hangi kenara aittir?

Kenar:

SORU: Aşağıdaki geometrik şekillerle ilgili soruları cevaplayınız.

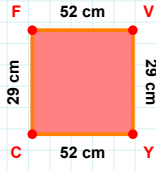
40 cm hangi kenara aittir?

- ☐ GT kenarı
☐ GN kenarı
☐ TN kenarı



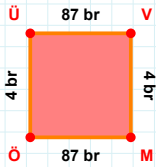
64 cm hangi kenara aittir?

Kenar:



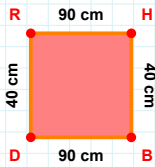
|CF| kaç cm'dir?

- ☐ 28 cm
☐ 29 cm
☐ 30 cm



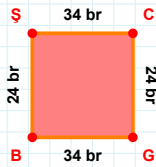
4 br hangi kenara aittir?

- ☐ ÜV kenarı
☐ MÖ kenarı
☐ VÖ kenarı



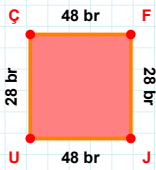
|DR| + |BD| =

Cevap: cm



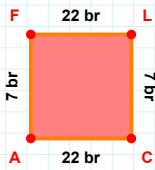
|BŞ| + |CG| =

Cevap: br



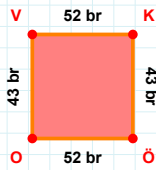
48 br hangi kenara aittir?

Kenar:



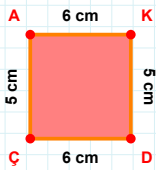
22 br hangi kenara aittir?

Kenar:



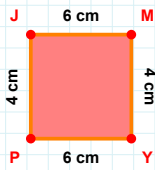
43 br hangi kenara aittir?

- ☐ OK kenarı
☐ KÖ kenarı
☐ ÖO kenarı



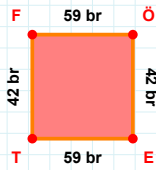
|KD| kaç cm'dir?

- ☐ 4 cm
☐ 5 cm
☐ 6 cm



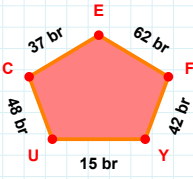
|YP| + |MY| =

Cevap: cm



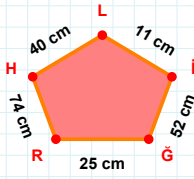
59 br hangi kenara aittir?

Kenar:

SORU: Aşağıdaki geometrik şekillerle ilgili soruları cevaplayınız.

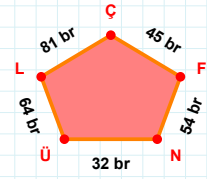
48 br hangi kenara aittir?

Kenar:



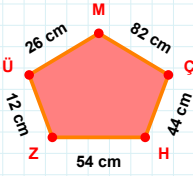
52 cm hangi kenara aittir?

Kenar:

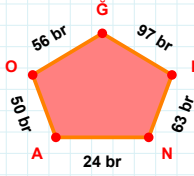


45 br hangi kenara aittir?

- ☐ NL kenarı
☐ LÜ kenarı
☐ NF kenarı

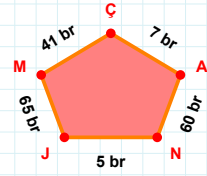
 $|ÜZ| + |HÇ| = \dots$

Cevap: cm

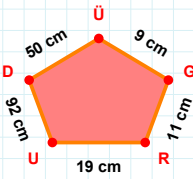


56 br hangi kenara aittir?

Kenar:

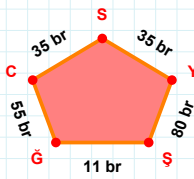
 $|ÇM| + |AÇ| = \dots$

Cevap: br

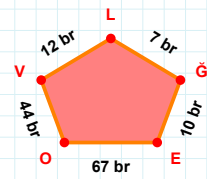


19 cm hangi kenara aittir?

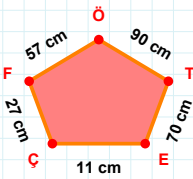
Kenar:

 $|SC| + |YS| = \dots$

Cevap: br

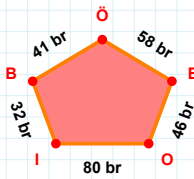
 $|OE| + |LV| = \dots$

Cevap: br

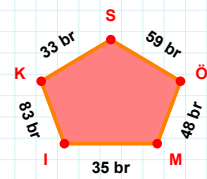


90 cm hangi kenara aittir?

- ☐ ÇE kenarı
☐ ÖE kenarı
☐ TÖ kenarı

 $|ÖB| + |BI| = \dots$

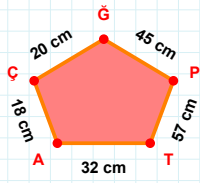
Cevap: br



35 br hangi kenara aittir?

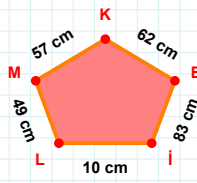
Kenar:

SORU: Aşağıdaki geometrik şekillerle ilgili soruları cevaplayınız.



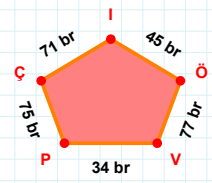
$|İÇ|$ kaç cm'dir?

- ☐ 19 cm
☐ 20 cm
☐ 21 cm



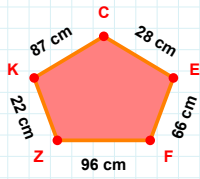
$|KM| + |İE| = \dots$

Cevap: cm



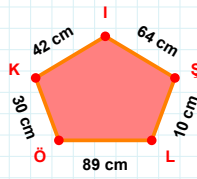
34 br hangi kenara aittir?

Kenar:



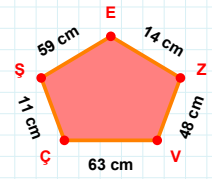
$|CK| + |İC| = \dots$

Cevap: cm



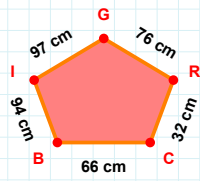
$|KÖ| + |ÖL| = \dots$

Cevap: cm



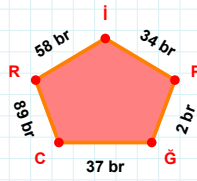
63 cm hangi kenara aittir?

Kenar:



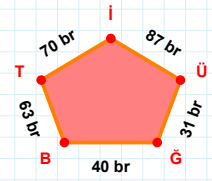
$|CR|$ kaç cm'dir?

- ☐ 31 cm
☐ 32 cm
☐ 33 cm



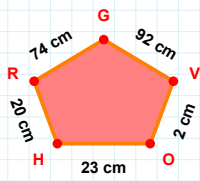
34 br hangi kenara aittir?

- ☐ Cİ kenarı
☐ Cİ kenarı
☐ RC kenarı



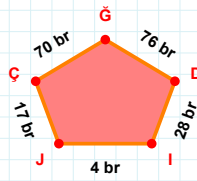
31 br hangi kenara aittir?

Kenar:



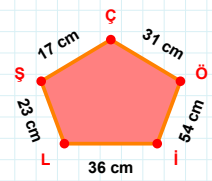
$|VG| + |GR| = \dots$

Cevap: cm



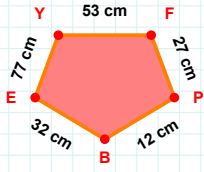
4 br hangi kenara aittir?

Kenar:



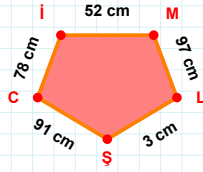
31 cm hangi kenara aittir?

Kenar:

SORU: Aşağıdaki geometrik şekillerle ilgili soruları cevaplayınız.

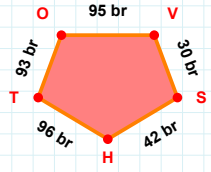
$|FP| + |PB| = \dots$

Cevap: cm



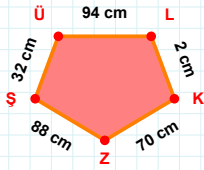
91 cm hangi kenara aittir?

Kenar:



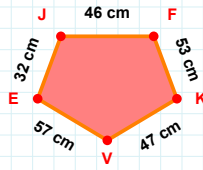
96 br hangi kenara aittir?

Kenar:



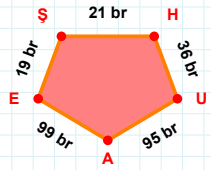
$|ZŞ| + |ŞÜ| = \dots$

Cevap: cm



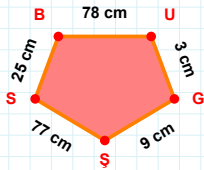
47 cm hangi kenara aittir?

Kenar:



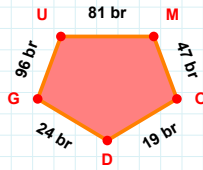
19 br hangi kenara aittir?

- ☐ HU kenarı
☐ EŞ kenarı
☐ UŞ kenarı



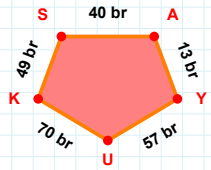
$|GŞ| + |UG| = \dots$

Cevap: cm



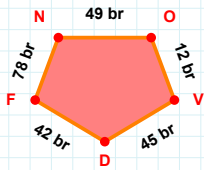
$|UM| + |MO| = \dots$

Cevap: br



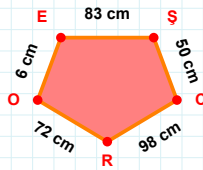
$|YU| + |AY| = \dots$

Cevap: br



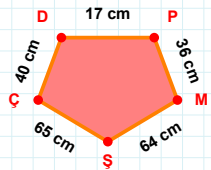
|DF| kaç brdir?

- ☐ 41 br
☐ 42 br
☐ 43 br



83 cm hangi kenara aittir?

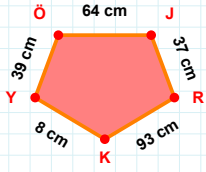
Kenar:



40 cm hangi kenara aittir?

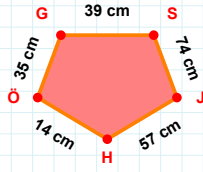
- ☐ DM kenarı
☐ ÇD kenarı
☐ MŞ kenarı

SORU: Aşağıdaki geometrik şekillerle ilgili soruları cevaplayınız.



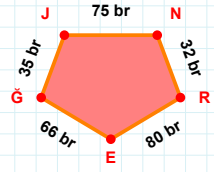
39 cm hangi kenara aittir?

- ☐ KY kenarı
☐ YJ kenarı
☐ YÖ kenarı



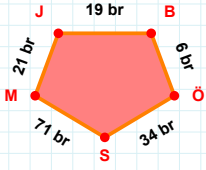
35 cm hangi kenara aittir?

Kenar:



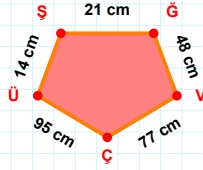
|EĞ| kaç brdir?

- ☐ 65 br
☐ 66 br
☐ 67 br



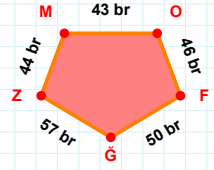
|JB| kaç brdir?

- ☐ 18 br
☐ 19 br
☐ 20 br



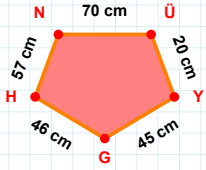
|ÜŞ| + |ÇÜ| =

Cevap: cm



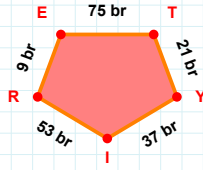
|MO| + |OF| =

Cevap: br



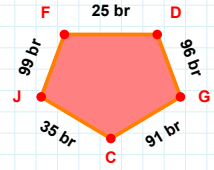
|ÜY| + |HN| =

Cevap: cm



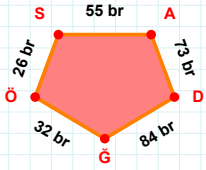
|RE| + |YI| =

Cevap: br



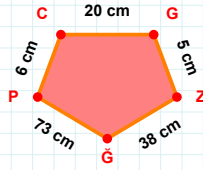
|CJ| kaç brdir?

- ☐ 34 br
☐ 35 br
☐ 36 br



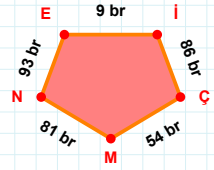
|SA| + |AD| =

Cevap: br



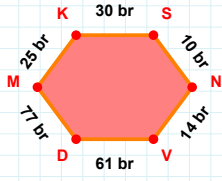
73 cm hangi kenara aittir?

Kenar:

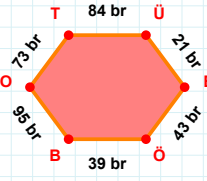


93 br hangi kenara aittir?

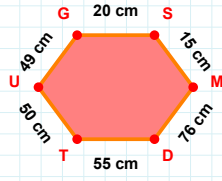
Kenar:

SORU: Aşağıdaki geometrik şekillerle ilgili soruları cevaplayınız.**|MK| kaç brdir?**

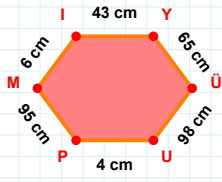
- ☐ 24 br
☐ 25 br
☐ 26 br

**|ÜE| kaç brdir?**

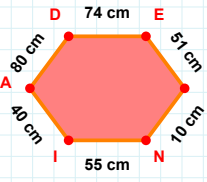
- ☐ 20 br
☐ 21 br
☐ 22 br

**49 cm hangi kenara aittir?**

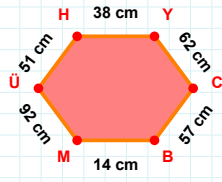
- ☐ GT kenarı
☐ UG kenarı
☐ SM kenarı

**65 cm hangi kenara aittir?**

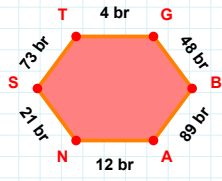
Kenar:

**74 cm hangi kenara aittir?**

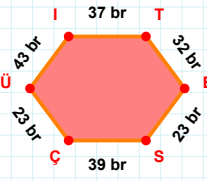
Kenar:

**51 cm hangi kenara aittir?**

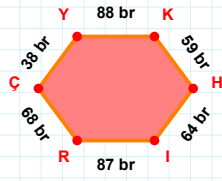
- ☐ ÜH kenarı
☐ MÜ kenarı
☐ YM kenarı

**|ST| + |NS| =**

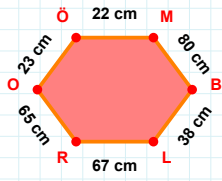
Cevap: br

**|IT| kaç brdir?**

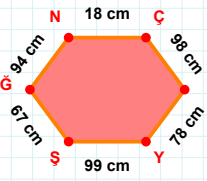
- ☐ 36 br
☐ 37 br
☐ 38 br

**88 br hangi kenara aittir?**

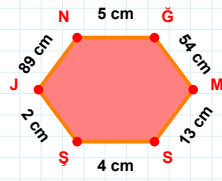
Kenar:

**38 cm hangi kenara aittir?**

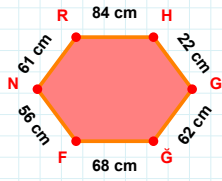
Kenar:

**|GN| kaç cmdir?**

- ☐ 93 cm
☐ 94 cm
☐ 95 cm

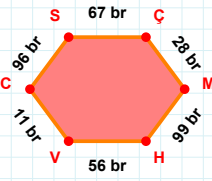
**13 cm hangi kenara aittir?**

Kenar:

SORU: Aşağıdaki geometrik şekillerle ilgili soruları cevaplayınız.

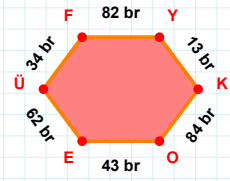
|NR| kaç cm'dir?

- ☐ 60 cm
☐ 61 cm
☐ 62 cm



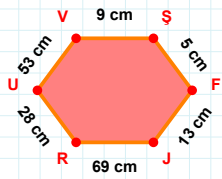
|SÇ| + |HV| =

Cevap: br



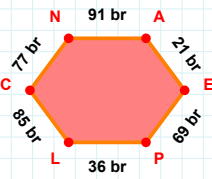
13 br hangi kenara aittir?

Kenar:



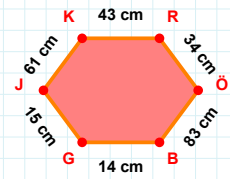
13 cm hangi kenara aittir?

Kenar:



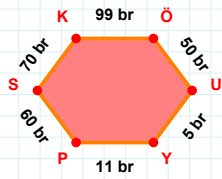
69 br hangi kenara aittir?

Kenar:



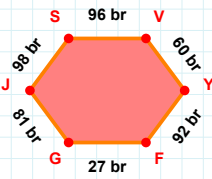
|GJ| kaç cm'dir?

- ☐ 14 cm
☐ 15 cm
☐ 16 cm



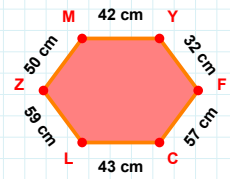
|YP| + |SK| =

Cevap: br



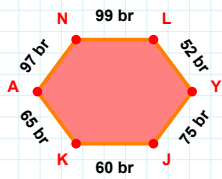
98 br hangi kenara aittir?

- ☐ YF kenarı
☐ YJ kenarı
☐ FG kenarı



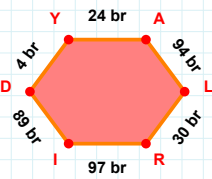
43 cm hangi kenara aittir?

Kenar:



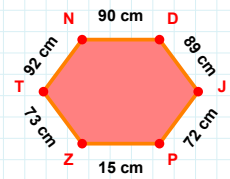
60 br hangi kenara aittir?

Kenar:



97 br hangi kenara aittir?

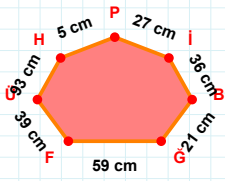
Kenar:



|DJ| + |ND| =

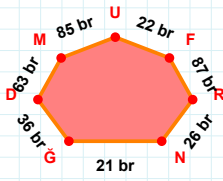
Cevap: cm

SORU: Aşağıdaki geometrik şekillerle ilgili soruları cevaplayınız.



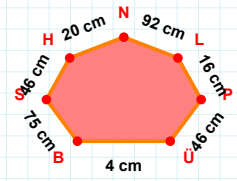
|HÜ| kaç cmdir?

- ☐ 92 cm
☐ 93 cm
☐ 94 cm



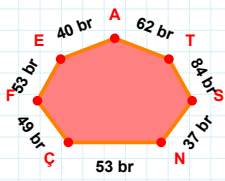
|GN| kaç brdir?

- ☐ 20 br
☐ 21 br
☐ 22 br



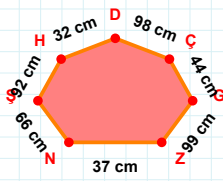
92 cm hangi kenara aittir?

- ☐ NS kenarı
☐ NH kenarı
☐ SB kenarı



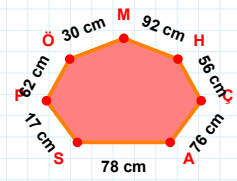
62 br hangi kenara aittir?

- ☐ FÇ kenarı
☐ NS kenarı
☐ EÇ kenarı



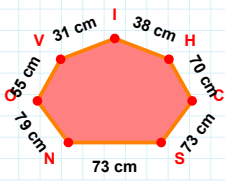
|SN| + |HS| =

Cevap: cm



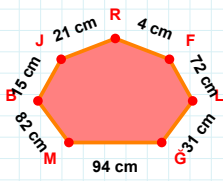
92 cm hangi kenara aittir?

- ☐ HM kenarı
☐ SÖ kenarı
☐ AÇ kenarı



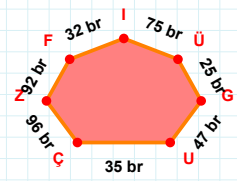
70 cm hangi kenara aittir?

Kenar:



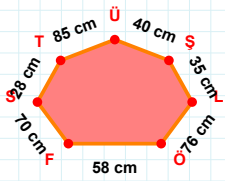
4 cm hangi kenara aittir?

- ☐ FG kenarı
☐ MÇ kenarı
☐ BM kenarı



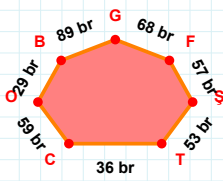
75 br hangi kenara aittir?

- ☐ IF kenarı
☐ UÜ kenarı
☐ ÜI kenarı



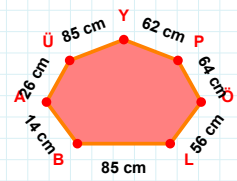
76 cm hangi kenara aittir?

Kenar:



|OC| + |GB| =

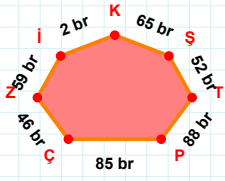
Cevap: br



|ÖP| + |AB| =

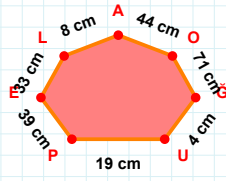
Cevap: cm

SORU: Aşağıdaki geometrik şekillerle ilgili soruları cevaplayınız.



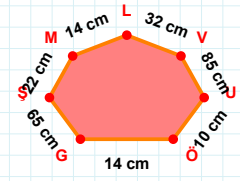
65 br hangi kenara aittir?

- ☐ KI kenarı
☐ İT kenarı
☐ TŞ kenarı



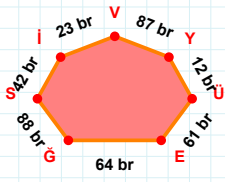
39 cm hangi kenara aittir?

Kenar:



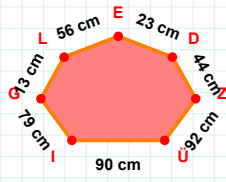
32 cm hangi kenara aittir?

- ☐ MŞ kenarı
☐ ÖU kenarı
☐ ÖM kenarı



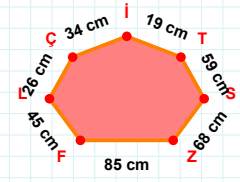
87 br hangi kenara aittir?

Kenar:



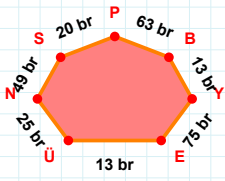
$|EL| + |DE| = \dots$

Cevap: cm



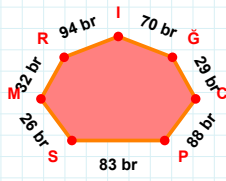
19 cm hangi kenara aittir?

- ☐ ZS kenarı
☐ FT kenarı
☐ FZ kenarı



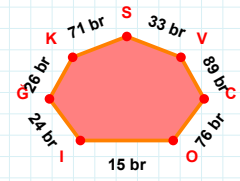
$|SN| + |NÜ| = \dots$

Cevap: br



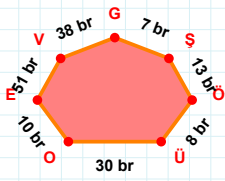
88 br hangi kenara aittir?

Kenar:



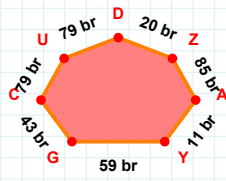
$|IO| + |GI| = \dots$

Cevap: br



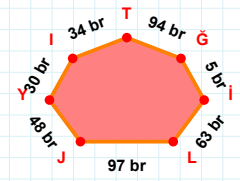
51 br hangi kenara aittir?

Kenar:



59 br hangi kenara aittir?

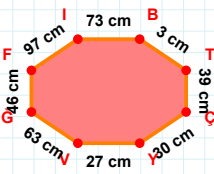
Kenar:



$|YJ| + |TI| = \dots$

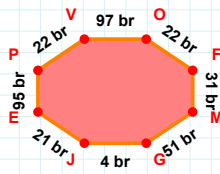
Cevap: br

SORU: Aşağıdaki geometrik şekillerle ilgili soruları cevaplayınız.



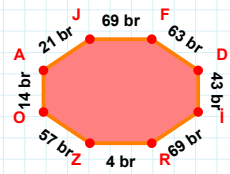
$$|İF| + |TÇ| = \dots$$

Cevap: cm



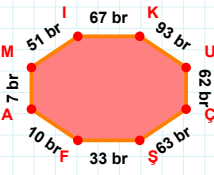
$$|FM| + |MG| = \dots$$

Cevap: br



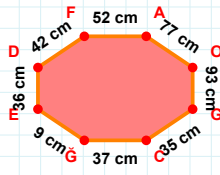
$$|ZO| + |JF| = \dots$$

Cevap: br



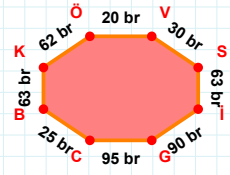
$$|MI| + |ÇŞ| = \dots$$

Cevap: br



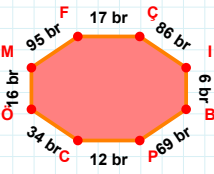
93 cm hangi kenara aittir?

Kenar:



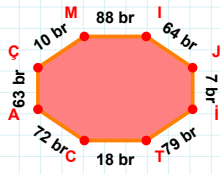
62 br hangi kenara aittir?

Kenar:



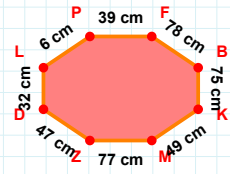
86 br hangi kenara aittir?

Kenar:



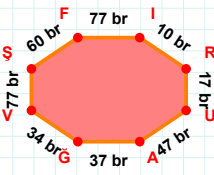
63 br hangi kenara aittir?

Kenar:



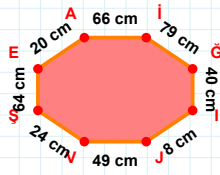
32 cm hangi kenara aittir?

Kenar:



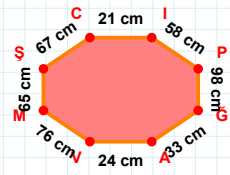
60 br hangi kenara aittir?

- ☐ İF kenarı
☐ VŞ kenarı
☐ FI kenarı



$$|SE| + |AI| = \dots$$

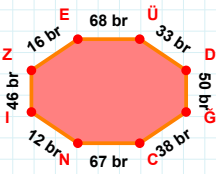
Cevap: cm



67 cm hangi kenara aittir?

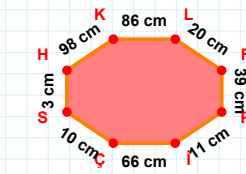
- ☐ İM kenarı
☐ İP kenarı
☐ AV kenarı

SORU: Aşağıdaki geometrik şekillerle ilgili soruları cevaplayınız.



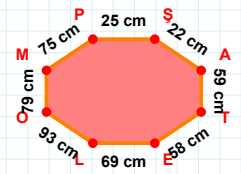
16 br hangi kenara aittir?

Kenar:



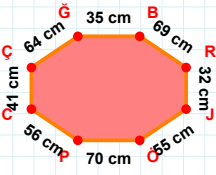
20 cm hangi kenara aittir?

Kenar:



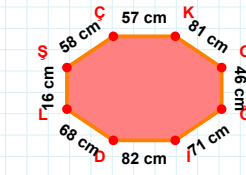
|PŞ| kaç cm'dir?

- ☐ 24 cm
☐ 25 cm
☐ 26 cm



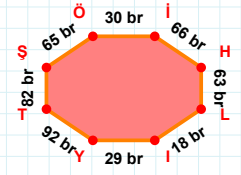
|JÖ| kaç cm'dir?

- ☐ 54 cm
☐ 55 cm
☐ 56 cm



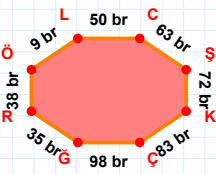
58 cm hangi kenara aittir?

- ☐ DL kenarı
☐ LÇ kenarı
☐ Çİ kenarı



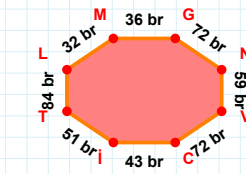
65 br hangi kenara aittir?

- ☐ ŞÖ kenarı
☐ HL kenarı
☐ HŞ kenarı



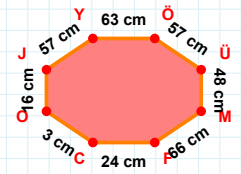
9 br hangi kenara aittir?

- ☐ ÖL kenarı
☐ CŞ kenarı
☐ KG kenarı



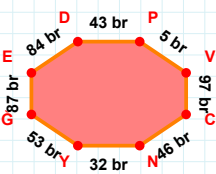
32 br hangi kenara aittir?

- ☐ VT kenarı
☐ GN kenarı
☐ MG kenarı



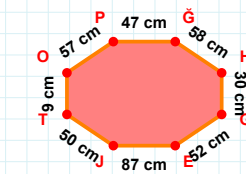
|FC| kaç cm'dir?

- ☐ 23 cm
☐ 24 cm
☐ 25 cm



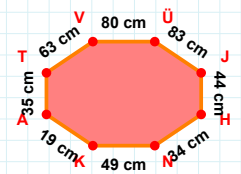
|PV| kaç br'dir?

- ☐ 4 br
☐ 5 br
☐ 6 br



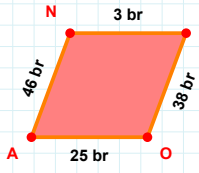
47 cm hangi kenara aittir?

Kenar:



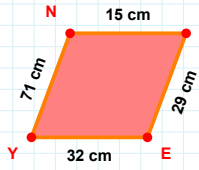
34 cm hangi kenara aittir?

Kenar:

SORU: Aşağıdaki geometrik şekillerle ilgili soruları cevaplayınız.

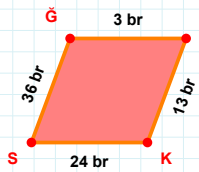
38 br hangi kenara aittir?

Kenar:



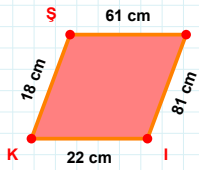
|YN| kaç cmdir?

- ☐ 70 cm
☐ 71 cm
☐ 72 cm



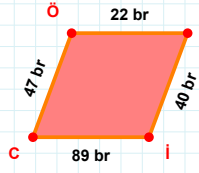
24 br hangi kenara aittir?

Kenar:



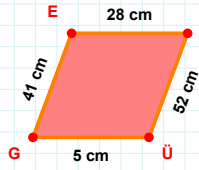
22 cm hangi kenara aittir?

Kenar:



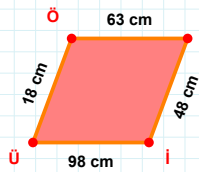
47 br hangi kenara aittir?

- ☐ ÖS kenarı
☐ CS kenarı
☐ Sİ kenarı



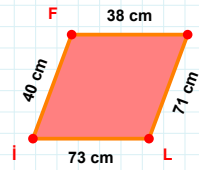
41 cm hangi kenara aittir?

- ☐ FÜ kenarı
☐ ÜE kenarı
☐ ÜG kenarı



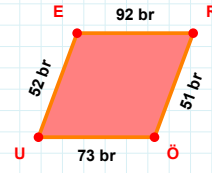
|ÜÖ| kaç cmdir?

- ☐ 17 cm
☐ 18 cm
☐ 19 cm



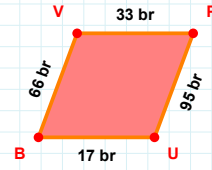
|FC| kaç cmdir?

- ☐ 37 cm
☐ 38 cm
☐ 39 cm



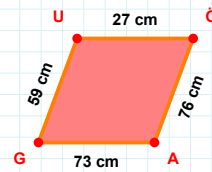
|UE| kaç brdir?

- ☐ 51 br
☐ 52 br
☐ 53 br



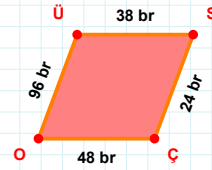
|UB| + |PU| =

Cevap: br



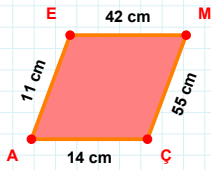
59 cm hangi kenara aittir?

- ☐ AG kenarı
☐ UÖ kenarı
☐ UA kenarı



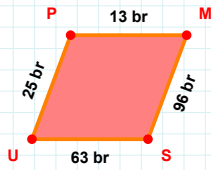
|SC| + |ÇO| =

Cevap: br

SORU: Aşağıdaki geometrik şekillerle ilgili soruları cevaplayınız.

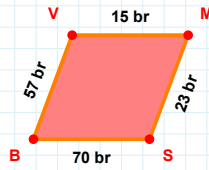
$|MC| + |CA| = \dots$

Cevap: cm



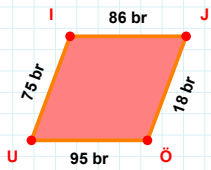
25 br hangi kenara aittir?

Kenar:



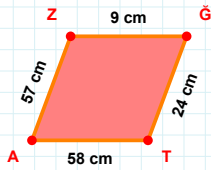
23 br hangi kenara aittir?

Kenar:



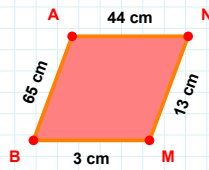
$|UI| + |ÖU| = \dots$

Cevap: br



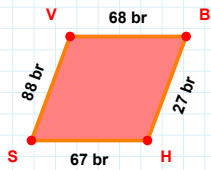
|GT| kaç cm'dir?

- ☐ 23 cm
☐ 24 cm
☐ 25 cm



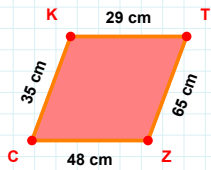
65 cm hangi kenara aittir?

- ☐ AN kenarı
☐ MB kenarı
☐ AM kenarı



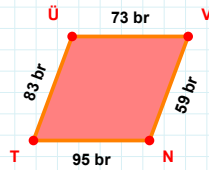
88 br hangi kenara aittir?

- ☐ SV kenarı
☐ BS kenarı
☐ BH kenarı



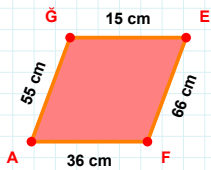
$|CK| + |TZ| = \dots$

Cevap: cm



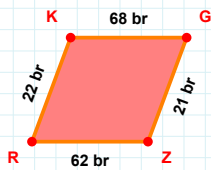
73 br hangi kenara aittir?

Kenar:



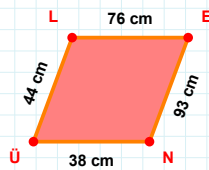
55 cm hangi kenara aittir?

- ☐ EA kenarı
☐ EF kenarı
☐ AG kenarı



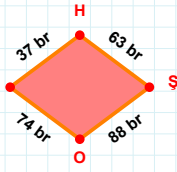
22 br hangi kenara aittir?

- ☐ GR kenarı
☐ KG kenarı
☐ ZR kenarı



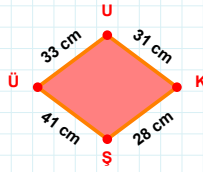
$|EN| + |NÜ| = \dots$

Cevap: cm

SORU: Aşağıdaki geometrik şekillerle ilgili soruları cevaplayınız.

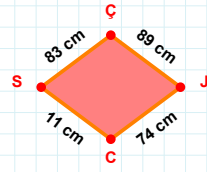
$$|HI| + |OI| = \dots$$

Cevap: br



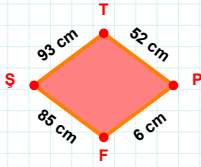
$$|KS| + |ŞÜ| = \dots$$

Cevap: cm



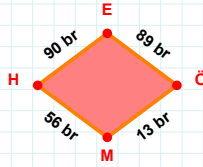
11 cm hangi kenara aittir?

Kenar:



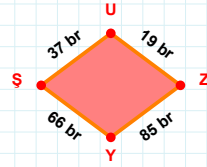
$$|TP| + |FS| = \dots$$

Cevap: cm

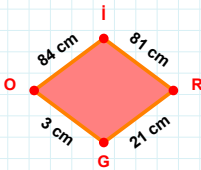


$$|MH| + |ÖM| = \dots$$

Cevap: br

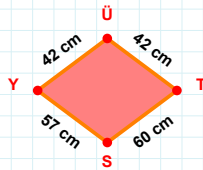


37 br hangi kenara aittir?

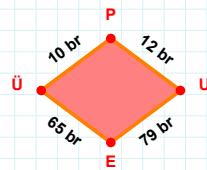
☐ YU kenarı☐ UZ kenarı☐ ZY kenarı

84 cm hangi kenara aittir?

Kenar:

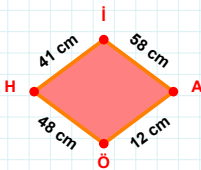


42 cm hangi kenara aittir?

☐ YÜ kenarı☐ YT kenarı☐ ÜT kenarı

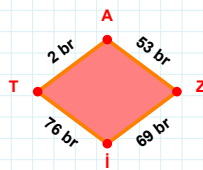
$$|ÜP| + |PU| = \dots$$

Cevap: br

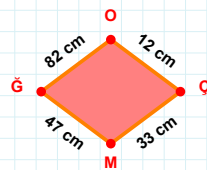


$$|İA| + |HI| = \dots$$

Cevap: cm



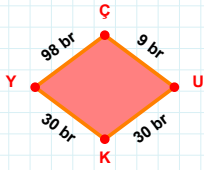
|Zİ| kaç brdir?

☐ 68 br☐ 69 br☐ 70 br

33 cm hangi kenara aittir?

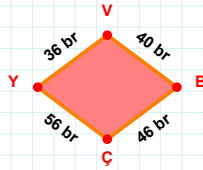
Kenar:

SORU: Aşağıdaki geometrik şekillerle ilgili soruları cevaplayınız.



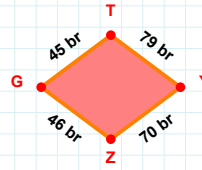
$$|UK| + |YÇ| = \dots$$

Cevap: br



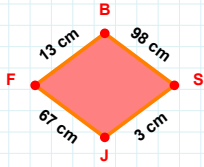
36 br hangi kenara aittir?

Kenar:



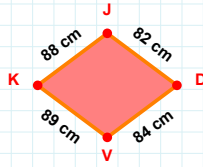
$$|TY| + |GT| = \dots$$

Cevap: br



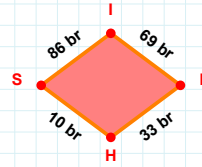
13 cm hangi kenara aittir?

- ☐ JF kenarı
☐ SF kenarı
☐ FB kenarı



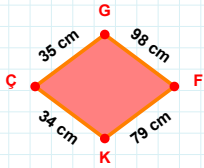
$$|KJ| + |JD| = \dots$$

Cevap: cm



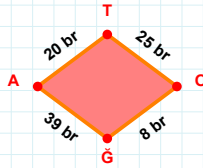
86 br hangi kenara aittir?

Kenar:



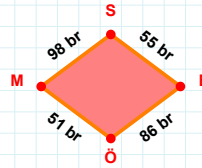
35 cm hangi kenara aittir?

Kenar:



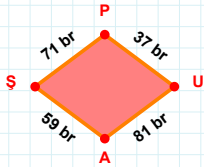
39 br hangi kenara aittir?

Kenar:



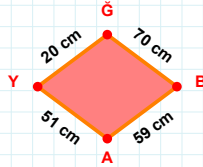
51 br hangi kenara aittir?

Kenar:



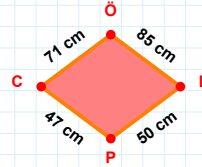
71 br hangi kenara aittir?

- ☐ AP kenarı
☐ AŞ kenarı
☐ PU kenarı



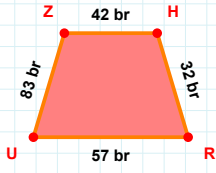
59 cm hangi kenara aittir?

Kenar:



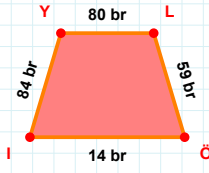
71 cm hangi kenara aittir?

- ☐ ÖP kenarı
☐ PC kenarı
☐ DP kenarı

SORU: Aşağıdaki geometrik şekillerle ilgili soruları cevaplayınız.

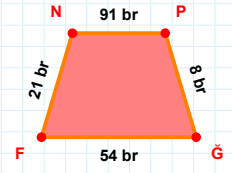
32 br hangi kenara aittir?

Kenar:

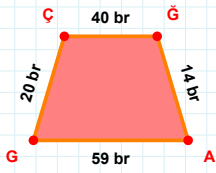


14 br hangi kenara aittir?

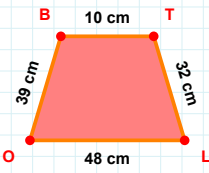
Kenar:

 $|FN| + |ĞF| = \dots$

Cevap: br

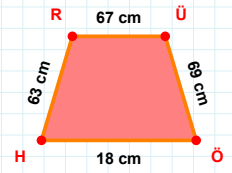
 $|GÇ| + |ÇĞ| = \dots$

Cevap: br



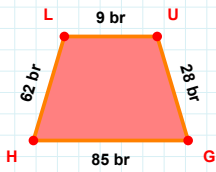
39 cm hangi kenara aittir?

- ☐ BL kenarı
☐ BT kenarı
☐ LO kenarı



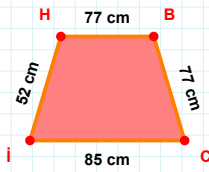
63 cm hangi kenara aittir?

Kenar:

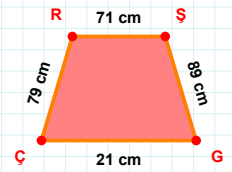


9 br hangi kenara aittir?

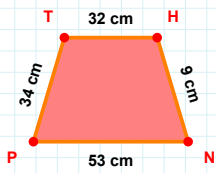
Kenar:

 $|İH| + |Cİ| = \dots$

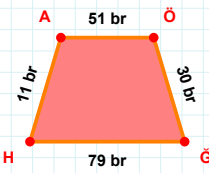
Cevap: cm

 $|ÇR|$ kaç cm'dir?

- ☐ 78 cm
☐ 79 cm
☐ 80 cm

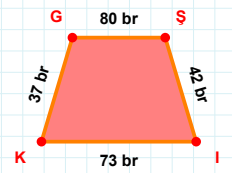
 $|NP| + |PT| = \dots$

Cevap: cm

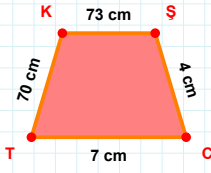


11 br hangi kenara aittir?

Kenar:

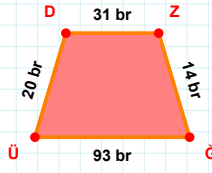
 $|Şİ| + |GŞ| = \dots$

Cevap: br

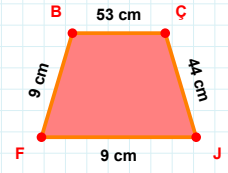
SORU: Aşağıdaki geometrik şekillerle ilgili soruları cevaplayınız.

73 cm hangi kenara aittir?

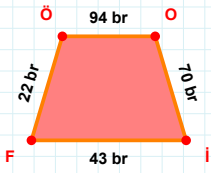
Kenar:

 $|ĞÜ| + |ZĞ| = \dots$

Cevap: br

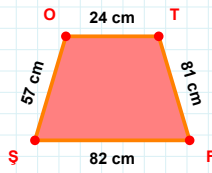
 $|ÇJ| + |BÇ| = \dots$

Cevap: cm



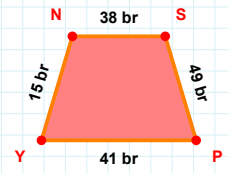
22 br hangi kenara aittir?

Kenar:



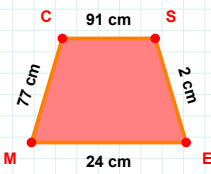
82 cm hangi kenara aittir?

Kenar:

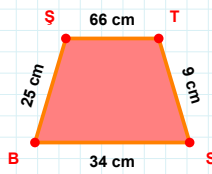


41 br hangi kenara aittir?

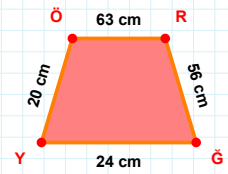
Kenar:

 $|MC| + |SE| = \dots$

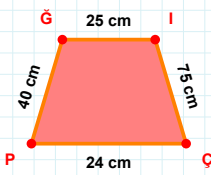
Cevap: cm

 $|BS|$ kaç cm'dir?

- ☐ 24 cm
☐ 25 cm
☐ 26 cm

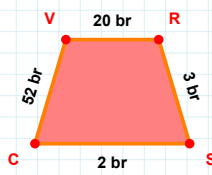
 $|YÖ| + |ĞY| = \dots$

Cevap: cm



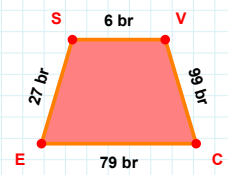
40 cm hangi kenara aittir?

- ☐ ĞÇ kenarı
☐ ÇP kenarı
☐ Ğİ kenarı

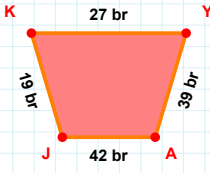


52 br hangi kenara aittir?

- ☐ SC kenarı
☐ VR kenarı
☐ SV kenarı

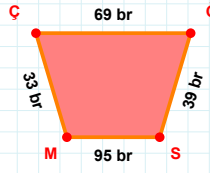
 $|CE|$ kaç br'dir?

- ☐ 78 br
☐ 79 br
☐ 80 br

SORU: Aşağıdaki geometrik şekillerle ilgili soruları cevaplayınız.

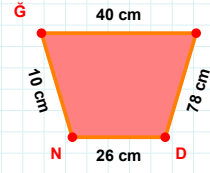
19 br hangi kenara aittir?

- ☐ JK kenarı
☐ KY kenarı
☐ AK kenarı



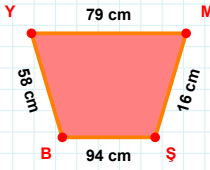
|MÇ| kaç brdir?

- ☐ 32 br
☐ 33 br
☐ 34 br



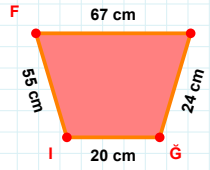
|NĞ| + |OD| =

Cevap: cm



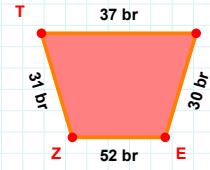
|YM| + |MS| =

Cevap: cm



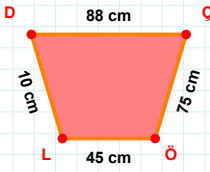
|İĞ| kaç cmdir?

- ☐ 23 cm
☐ 24 cm
☐ 25 cm



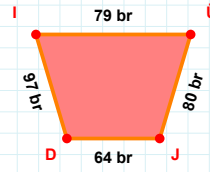
|HE| + |ZT| =

Cevap: br



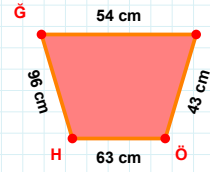
|ÖL| kaç cmdir?

- ☐ 44 cm
☐ 45 cm
☐ 46 cm



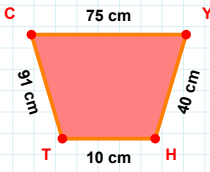
79 br hangi kenara aittir?

Kenar:



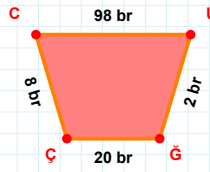
|HĞ| kaç cmdir?

- ☐ 95 cm
☐ 96 cm
☐ 97 cm



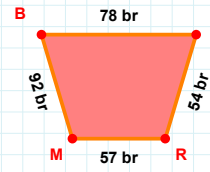
91 cm hangi kenara aittir?

- ☐ CY kenarı
☐ HC kenarı
☐ HT kenarı



8 br hangi kenara aittir?

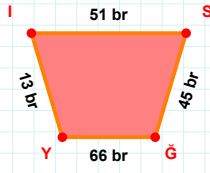
- ☐ CĞ kenarı
☐ ĞÇ kenarı
☐ ÇC kenarı



57 br hangi kenara aittir?

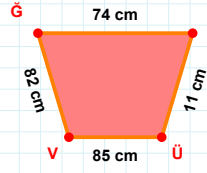
Kenar:

SORU: Aşağıdaki geometrik şekillerle ilgili soruları cevaplayınız.



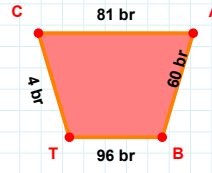
13 br hangi kenara aittir?

- ☐ İY kenarı
☐ IS kenarı
☐ SG kenarı



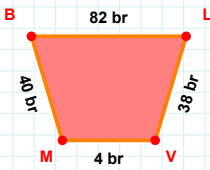
82 cm hangi kenara aittir?

- ☐ VŞ kenarı
☐ GS kenarı
☐ ÜV kenarı



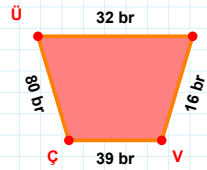
|CT| kaç brdir?

- ☐ 3 br
☐ 4 br
☐ 5 br



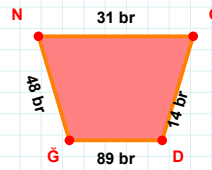
40 br hangi kenara aittir?

- ☐ BL kenarı
☐ LM kenarı
☐ MB kenarı



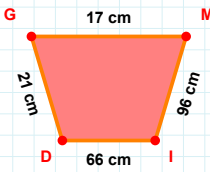
|ÜM| kaç brdir?

- ☐ 31 br
☐ 32 br
☐ 33 br



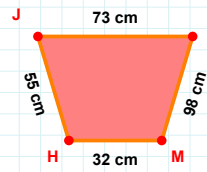
|CD| + |GN| =

Cevap: br



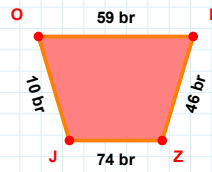
|ID| kaç cmdir?

- ☐ 65 cm
☐ 66 cm
☐ 67 cm



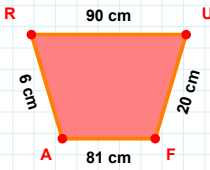
55 cm hangi kenara aittir?

- ☐ OM kenarı
☐ MJ kenarı
☐ JO kenarı



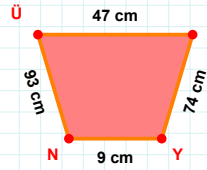
74 br hangi kenara aittir?

Kenar:



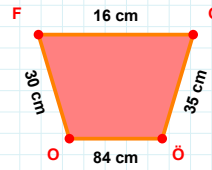
|UF| kaç cmdir?

- ☐ 19 cm
☐ 20 cm
☐ 21 cm



93 cm hangi kenara aittir?

- ☐ GN kenarı
☐ YN kenarı
☐ ÜG kenarı



|GÖ| + |OF| =

Cevap: cm

SÜREÇ ODAKLI DEĞERLENDİRME ÖLÇEĞİ

Geliştirilmeli (0-109)	İyi (110-187)	Çok İyi (188-265)	Mükemmel (266-312)
<input type="checkbox"/>	<input type="checkbox"/>	<input type="checkbox"/>	<input type="checkbox"/>

Hazırlayan:

Bu bölüme sınıfınızın ilgili kazanıma yönelik genel durumuna ilişkin gözlem ve izlenimlerinizi, öğrencilerinizin bu kazanımla ilgili öğrenme eksikliklerini ve bu eksikliklerin giderilmesi amacıyla yaptığınız/yapmayı planladığınız faaliyetleri not edebilirsiniz.

No	Adı - Soyadı	Toplam Puan	Değerlendirme
1			
2			
3			
4			
5			
6			
7			
8			
9			
10			
11			
12			
13			
14			
15			
16			
17			
18			
19			
20			
21			
22			
23			
24			
25			
26			
27			
28			
29			
30			
31			
32			
33			
34			
35			

Hazırlayan: