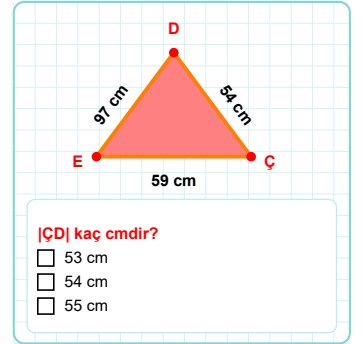
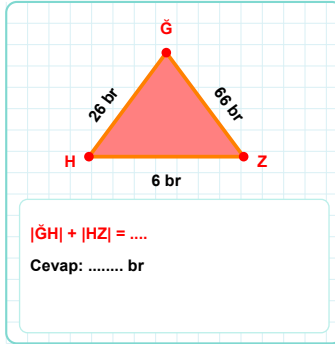
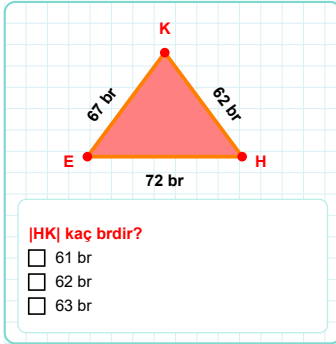
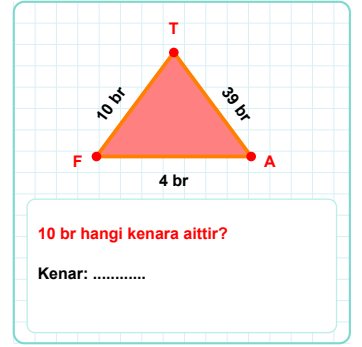
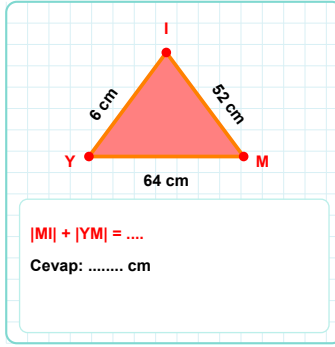
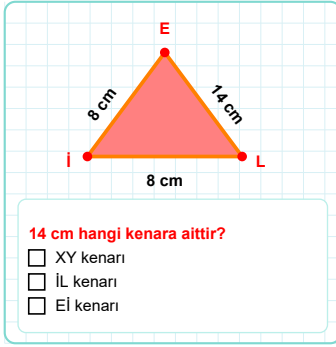
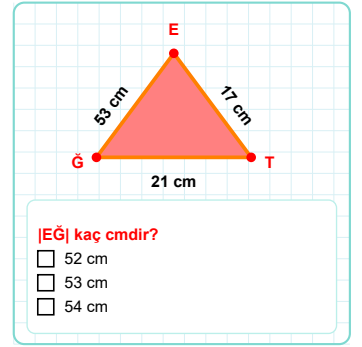
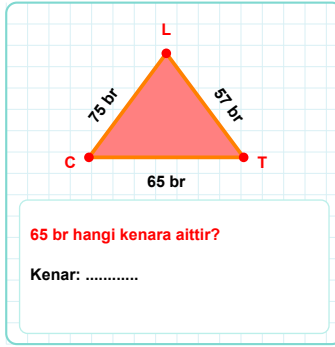
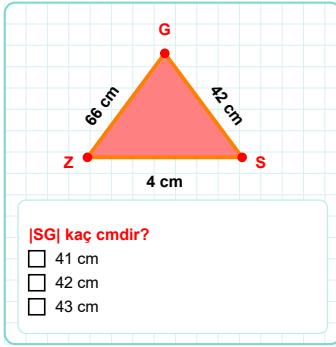
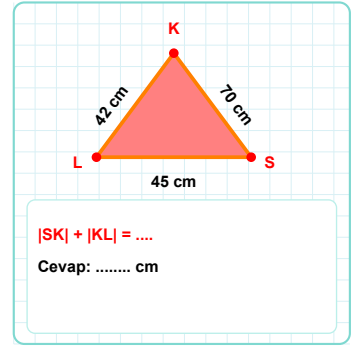
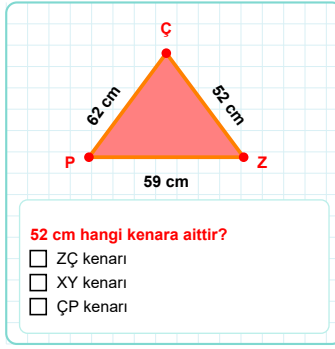
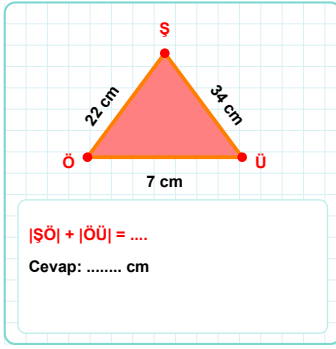
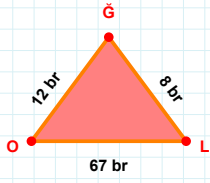
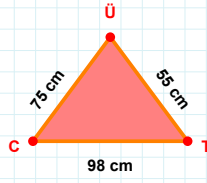


SORU: Aşağıdaki geometrik şekillerle ilgili soruları cevaplayınız.

SORU: Aşağıdaki geometrik şekillerle ilgili soruları cevaplayınız.

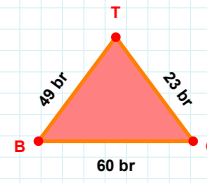
8 br hangi kenara aittir?

- ☐ LG kenarı
☐ XY kenarı
☐ OL kenarı



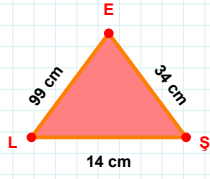
|TÜ| kaç cmdir?

- ☐ 54 cm
☐ 55 cm
☐ 56 cm



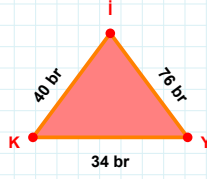
23 br hangi kenara aittir?

- ☐ TB kenarı
☐ XY kenarı
☐ GT kenarı



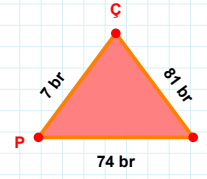
|EL| kaç cmdir?

- ☐ 98 cm
☐ 99 cm
☐ 100 cm



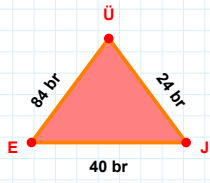
|KY| + |Yİ| =

Cevap: br



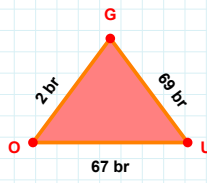
81 br hangi kenara aittir?

Kenar:



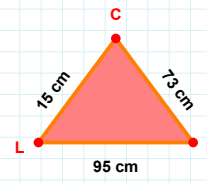
40 br hangi kenara aittir?

Kenar:



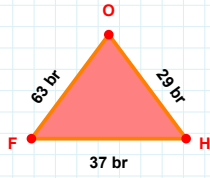
67 br hangi kenara aittir?

Kenar:



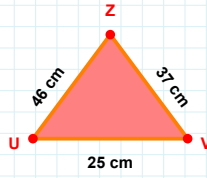
|NC| + |CL| =

Cevap: cm



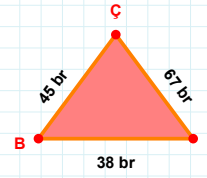
29 br hangi kenara aittir?

- ☐ XY kenarı
☐ HO kenarı
☐ FH kenarı



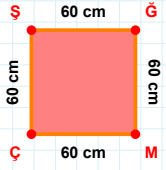
|VZ| kaç cmdir?

- ☐ 36 cm
☐ 37 cm
☐ 38 cm

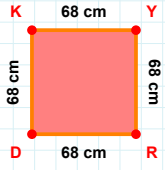


67 br hangi kenara aittir?

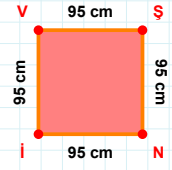
- ☐ BI kenarı
☐ ÇB kenarı
☐ XY kenarı

SORU: Aşağıdaki geometrik şekillerle ilgili soruları cevaplayınız.**|MÇ| kaç cm'dir?**

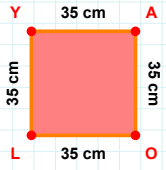
- ☐ 59 cm
☐ 60 cm
☐ 61 cm

**68 cm hangi kenara aittir?**

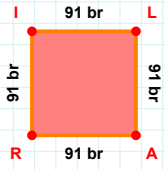
Kenar:

**95 cm hangi kenara aittir?**

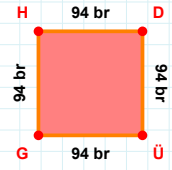
Kenar:

**35 cm hangi kenara aittir?**

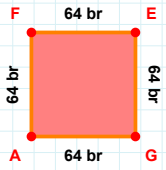
Kenar:

**|Rİ| + |LA| =**

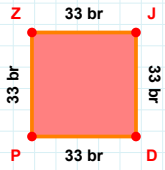
Cevap: br

**|DÜ| + |GH| =**

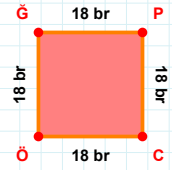
Cevap: br

**|GA| + |AF| =**

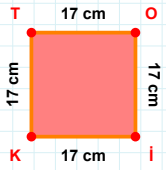
Cevap: br

**33 br hangi kenara aittir?**

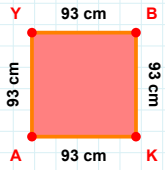
- ☐ PZ kenarı
☐ JD kenarı
☐ DZ kenarı

**|PC| + |ÖĞ| =**

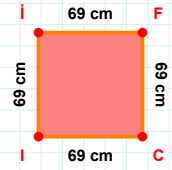
Cevap: br

**|TO| kaç cm'dir?**

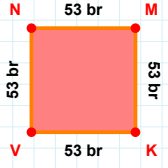
- ☐ 16 cm
☐ 17 cm
☐ 18 cm

**|BK| + |AY| =**

Cevap: cm

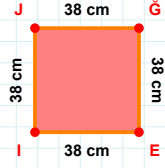
**69 cm hangi kenara aittir?**

Kenar:

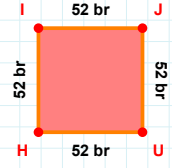
SORU: Aşağıdaki geometrik şekillerle ilgili soruları cevaplayınız.

53 br hangi kenara aittir?

Kenar:

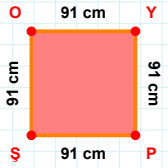
 $|GE| + |JG| = \dots$

Cevap: cm



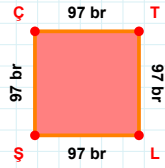
52 br hangi kenara aittir?

Kenar:



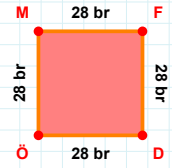
91 cm hangi kenara aittir?

Kenar:



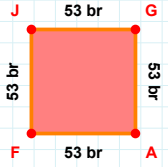
97 br hangi kenara aittir?

- ☐ LÇ kenarı
☐ ÇT kenarı
☐ LŞ kenarı



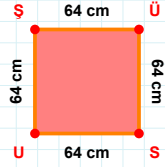
28 br hangi kenara aittir?

- ☐ DM kenarı
☐ ÖM kenarı
☐ MF kenarı



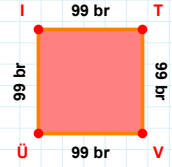
53 br hangi kenara aittir?

- ☐ JA kenarı
☐ JG kenarı
☐ GA kenarı

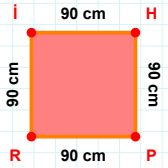


64 cm hangi kenara aittir?

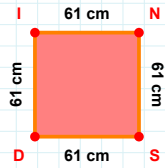
- ☐ ÜU kenarı
☐ UŞ kenarı
☐ ÜS kenarı

 $|TV|$ kaç brdir?

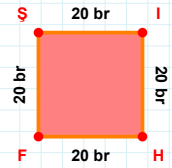
- ☐ 98 br
☐ 99 br
☐ 100 br

 $|IH| + |HP| = \dots$

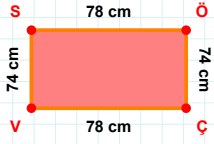
Cevap: cm

 $|NS| + |DI| = \dots$

Cevap: cm

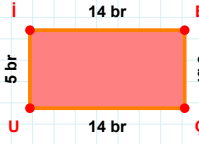
 $|FŞ|$ kaç brdir?

- ☐ 19 br
☐ 20 br
☐ 21 br

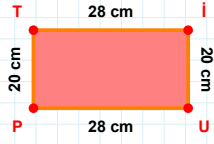
SORU: Aşağıdaki geometrik şekillerle ilgili soruları cevaplayınız.

74 cm hangi kenara aittir?

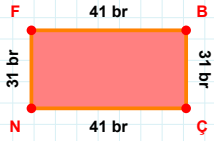
- ☐ VS kenarı
☐ ÇV kenarı
☐ VÖ kenarı

 $|UI| + |ÇU| = \dots$

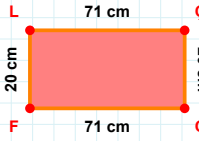
Cevap: br

 $|UP| + |İU| = \dots$

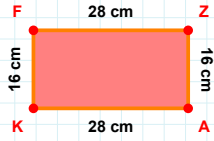
Cevap: cm

 $|FB| + |NF| = \dots$

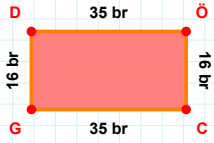
Cevap: br

 $|LC| + |CF| = \dots$

Cevap: cm

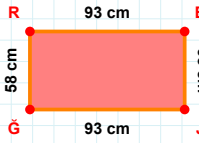
 $|FZ| + |AK| = \dots$

Cevap: cm

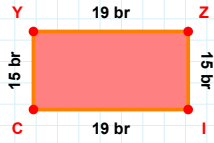


16 br hangi kenara aittir?

- ☐ ÖG kenarı
☐ GD kenarı
☐ CG kenarı

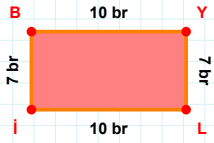
 $|JĞ|$ kaç cm'dir?

- ☐ 92 cm
☐ 93 cm
☐ 94 cm

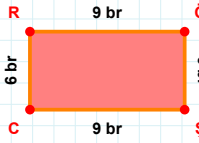


15 br hangi kenara aittir?

- ☐ CY kenarı
☐ Yİ kenarı
☐ IC kenarı

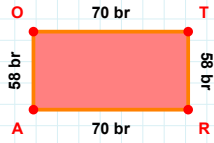
 $|İB| + |YL| = \dots$

Cevap: br

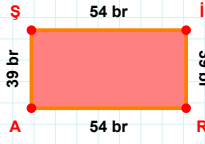


6 br hangi kenara aittir?

- ☐ CR kenarı
☐ CÖ kenarı
☐ ÖŞ kenarı

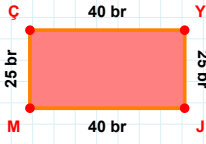
 $|OT| + |AO| = \dots$

Cevap: br

SORU: Aşağıdaki geometrik şekillerle ilgili soruları cevaplayınız.

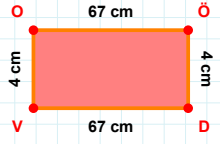
39 br hangi kenara aittir?

Kenar:



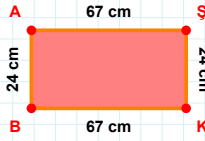
|YJ| kaç brdir?

- ☐ 24 br
☐ 25 br
☐ 26 br



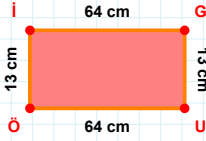
|DV| + |ÖD| =

Cevap: cm



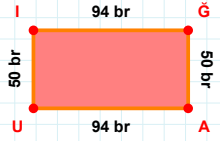
67 cm hangi kenara aittir?

Kenar:



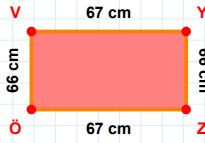
64 cm hangi kenara aittir?

Kenar:



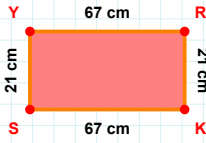
|UI| + |AU| =

Cevap: br



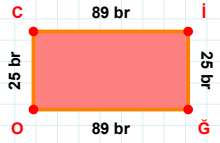
|YZ| kaç cmdir?

- ☐ 65 cm
☐ 66 cm
☐ 67 cm



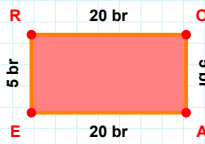
|YR| kaç cmdir?

- ☐ 66 cm
☐ 67 cm
☐ 68 cm



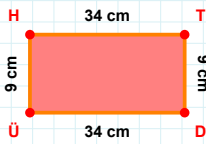
|OC| + |iG| =

Cevap: br



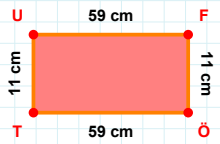
5 br hangi kenara aittir?

- ☐ RO kenarı
☐ AE kenarı
☐ EO kenarı



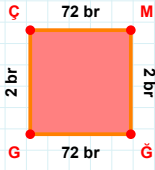
|TD| + |ÜH| =

Cevap: cm

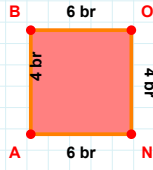


|TU| + |FÖ| =

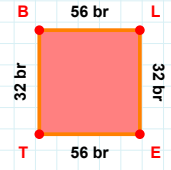
Cevap: cm

SORU: Aşağıdaki geometrik şekillerle ilgili soruları cevaplayınız.**2 br hangi kenara aittir?**

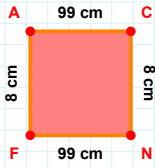
- ☐ ĞG kenarı
☐ GÇ kenarı
☐ GM kenarı

**4 br hangi kenara aittir?**

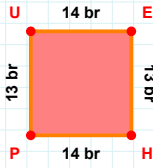
- ☐ NA kenarı
☐ BO kenarı
☐ OA kenarı

**32 br hangi kenara aittir?**

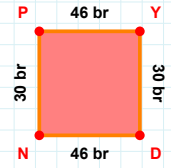
- ☐ BL kenarı
☐ TB kenarı
☐ EB kenarı

**8 cm hangi kenara aittir?**

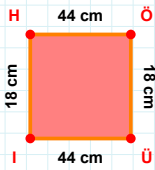
- ☐ CF kenarı
☐ FA kenarı
☐ AC kenarı

**14 br hangi kenara aittir?**

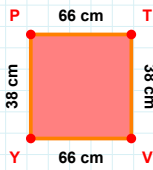
Kenar:

**30 br hangi kenara aittir?**

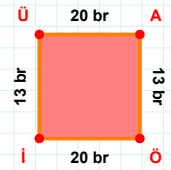
Kenar:

**44 cm hangi kenara aittir?**

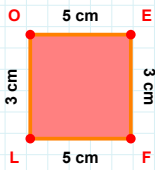
Kenar:

**|YP| kaç cm'dir?**

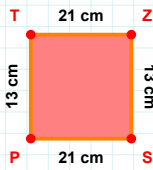
- ☐ 37 cm
☐ 38 cm
☐ 39 cm

**|AÖ| + |Öİ| =**

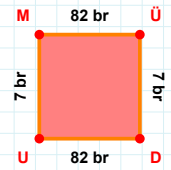
Cevap: br

**5 cm hangi kenara aittir?**

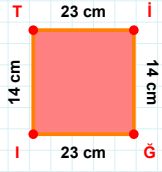
Kenar:

**|PT| + |ZS| =**

Cevap: cm

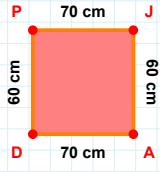
**|DU| + |ÜD| =**

Cevap: br

SORU: Aşağıdaki geometrik şekillerle ilgili soruları cevaplayınız.

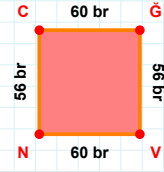
|İĞ| kaç cm'dir?

- ☐ 22 cm
☐ 23 cm
☐ 24 cm



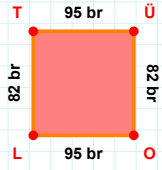
|DP| + |PJ| =

Cevap: cm



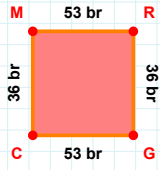
56 br hangi kenara aittir?

Kenar:



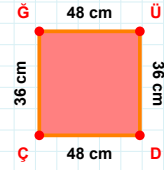
82 br hangi kenara aittir?

- ☐ TÜ kenarı
☐ OL kenarı
☐ LÜ kenarı



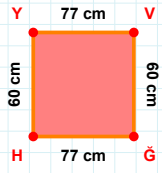
|CM| kaç br'dir?

- ☐ 35 br
☐ 36 br
☐ 37 br



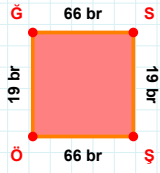
|ÜD| kaç cm'dir?

- ☐ 35 cm
☐ 36 cm
☐ 37 cm



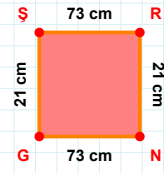
|VĞ| + |YV| =

Cevap: cm



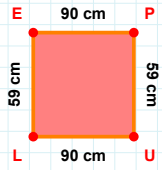
19 br hangi kenara aittir?

- ☐ SÖ kenarı
☐ SŞ kenarı
☐ ÖĞ kenarı



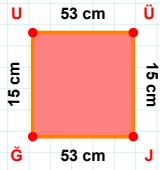
|GS| + |RN| =

Cevap: cm



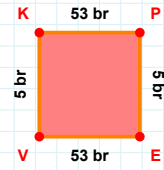
59 cm hangi kenara aittir?

- ☐ LE kenarı
☐ UL kenarı
☐ UE kenarı



|ĞÜ| + |UÜ| =

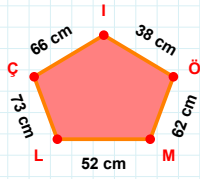
Cevap: cm



5 br hangi kenara aittir?

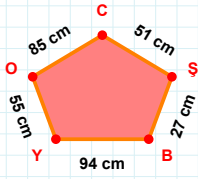
- ☐ PV kenarı
☐ KP kenarı
☐ VK kenarı

SORU: Aşağıdaki geometrik şekillerle ilgili soruları cevaplayınız.



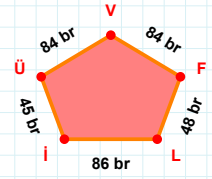
38 cm hangi kenara aittir?

Kenar:



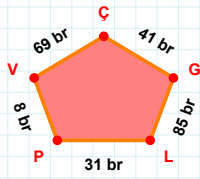
85 cm hangi kenara aittir?

Kenar:



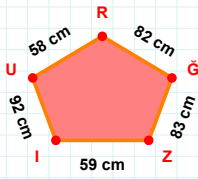
84 br hangi kenara aittir?

Kenar:



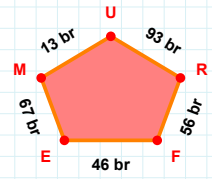
|LG| kaç brdir?

- ☐ 84 br
☐ 85 br
☐ 86 br



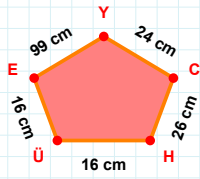
|ZG| kaç cmdir?

- ☐ 82 cm
☐ 83 cm
☐ 84 cm



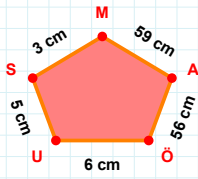
93 br hangi kenara aittir?

- ☐ UM kenarı
☐ EF kenarı
☐ ER kenarı



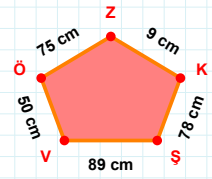
16 cm hangi kenara aittir?

Kenar:



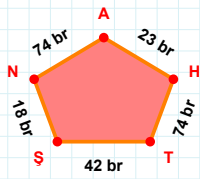
59 cm hangi kenara aittir?

- ☐ AM kenarı
☐ MU kenarı
☐ MS kenarı



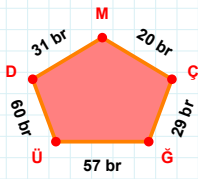
|ŞK| kaç cmdir?

- ☐ 77 cm
☐ 78 cm
☐ 79 cm



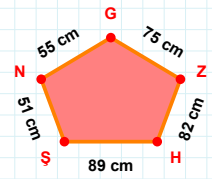
23 br hangi kenara aittir?

Kenar:



|ÇM| kaç brdir?

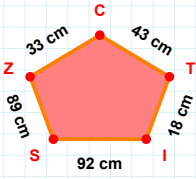
- ☐ 19 br
☐ 20 br
☐ 21 br



|NŞ| kaç cmdir?

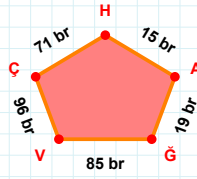
- ☐ 50 cm
☐ 51 cm
☐ 52 cm

SORU: Aşağıdaki geometrik şekillerle ilgili soruları cevaplayınız.



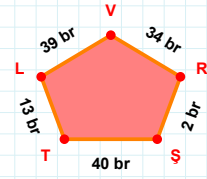
$$|IT| + |TC| = \dots$$

Cevap: cm



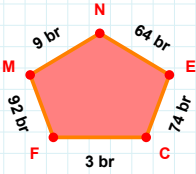
15 br hangi kenara aittir?

- ☐ ÇV kenarı
☐ AH kenarı
☐ AV kenarı



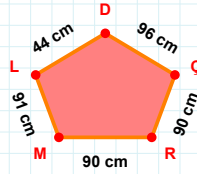
34 br hangi kenara aittir?

- ☐ LT kenarı
☐ ŞL kenarı
☐ VL kenarı



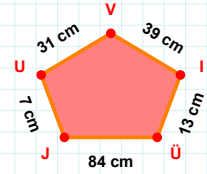
64 br hangi kenara aittir?

- ☐ NM kenarı
☐ EN kenarı
☐ ME kenarı



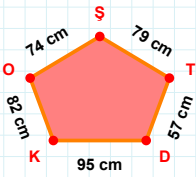
|RÇ| kaç cmdir?

- ☐ 89 cm
☐ 90 cm
☐ 91 cm



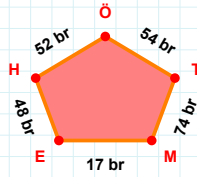
|JÜ| kaç cmdir?

- ☐ 83 cm
☐ 84 cm
☐ 85 cm



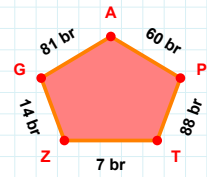
57 cm hangi kenara aittir?

Kenar:



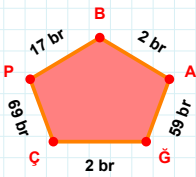
54 br hangi kenara aittir?

- ☐ TÖ kenarı
☐ HE kenarı
☐ ÖE kenarı



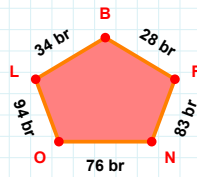
|PA| kaç brdir?

- ☐ 59 br
☐ 60 br
☐ 61 br



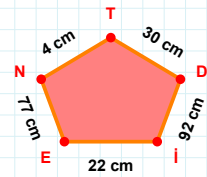
2 br hangi kenara aittir?

- ☐ BP kenarı
☐ AB kenarı
☐ BÇ kenarı



$$|LO| + |FB| = \dots$$

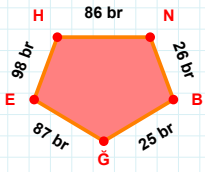
Cevap: br



30 cm hangi kenara aittir?

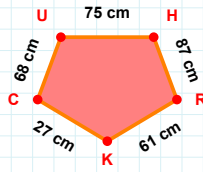
- ☐ TN kenarı
☐ EI kenarı
☐ TE kenarı

SORU: Aşağıdaki geometrik şekillerle ilgili soruları cevaplayınız.



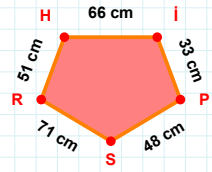
$$|EH| + |GE| = \dots$$

Cevap: br



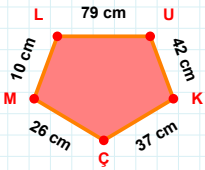
68 cm hangi kenara aittir?

- ☐ KH kenarı
☐ UH kenarı
☐ CU kenarı



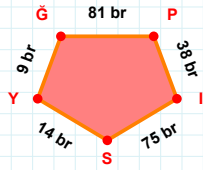
51 cm hangi kenara aittir?

- ☐ PS kenarı
☐ HI kenarı
☐ HS kenarı



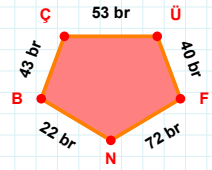
$$|LU| + |KÇ| = \dots$$

Cevap: cm



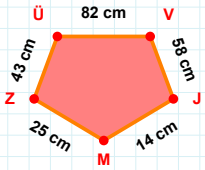
$$|GP| + |IS| = \dots$$

Cevap: br



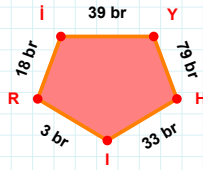
|BÇ| kaç brdir?

- ☐ 42 br
☐ 43 br
☐ 44 br



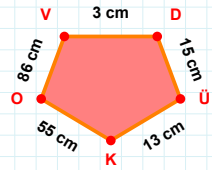
58 cm hangi kenara aittir?

Kenar:



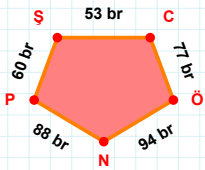
|RI| kaç brdir?

- ☐ 17 br
☐ 18 br
☐ 19 br



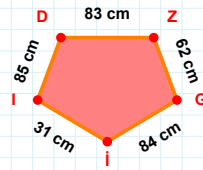
86 cm hangi kenara aittir?

- ☐ DÜ kenarı
☐ ÜO kenarı
☐ OV kenarı



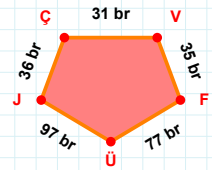
60 br hangi kenara aittir?

- ☐ ÖP kenarı
☐ ŞC kenarı
☐ ÖN kenarı



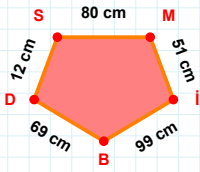
$$|DZ| + |ID| = \dots$$

Cevap: cm

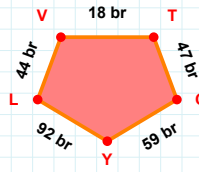


31 br hangi kenara aittir?

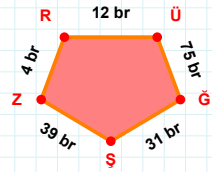
Kenar:

SORU: Aşağıdaki geometrik şekillerle ilgili soruları cevaplayınız. $|BD| + |DS| = \dots$

Cevap: cm

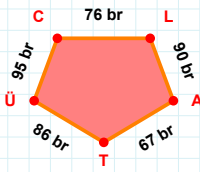
 $|TC|$ kaç brdir?

- ☐ 46 br
☐ 47 br
☐ 48 br



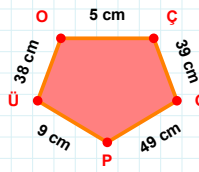
4 br hangi kenara aittir?

- ☐ ĞŞ kenarı
☐ ZR kenarı
☐ ĞR kenarı

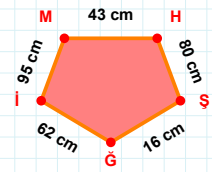


76 br hangi kenara aittir?

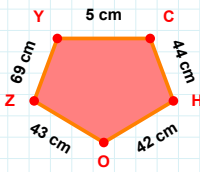
Kenar:

 $|ÜO| + |GP| = \dots$

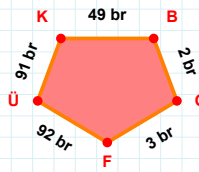
Cevap: cm

 $|MH|$ kaç cmdir?

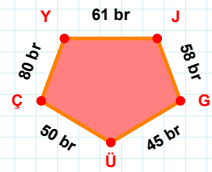
- ☐ 42 cm
☐ 43 cm
☐ 44 cm

 $|ZY| + |OZ| = \dots$

Cevap: cm

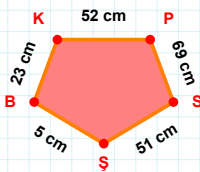
 $|KB|$ kaç brdir?

- ☐ 48 br
☐ 49 br
☐ 50 br

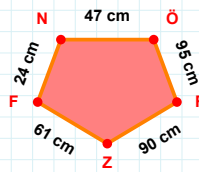


80 br hangi kenara aittir?

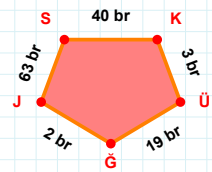
- ☐ GY kenarı
☐ ÇY kenarı
☐ JG kenarı

 $|BK|$ kaç cmdir?

- ☐ 22 cm
☐ 23 cm
☐ 24 cm

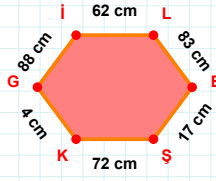
 $|ZF|$ kaç cmdir?

- ☐ 60 cm
☐ 61 cm
☐ 62 cm



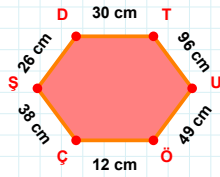
63 br hangi kenara aittir?

- ☐ JS kenarı
☐ ÜG kenarı
☐ KJ kenarı

SORU: Aşağıdaki geometrik şekillerle ilgili soruları cevaplayınız.

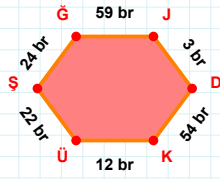
4 cm hangi kenara aittir?

Kenar:



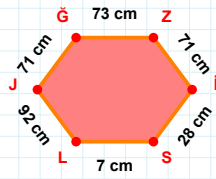
30 cm hangi kenara aittir?

Kenar:



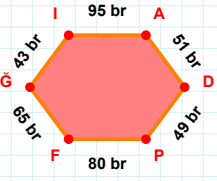
|ÜŞ| kaç brdir?

- ☐ 21 br
☐ 22 br
☐ 23 br

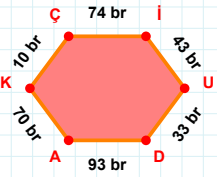


73 cm hangi kenara aittir?

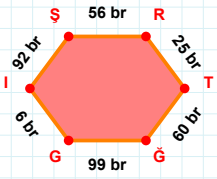
Kenar:

 $|PF| + |AD| = \dots$

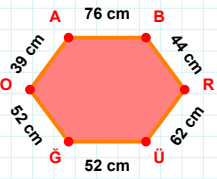
Cevap: br

 $|Çİ|$ kaç brdir?

- ☐ 73 br
☐ 74 br
☐ 75 br

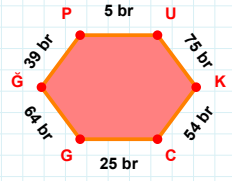
 $|ĞĞ| + |ŞR| = \dots$

Cevap: br



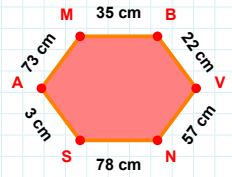
39 cm hangi kenara aittir?

- ☐ BR kenarı
☐ GO kenarı
☐ ÜA kenarı



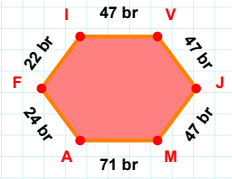
39 br hangi kenara aittir?

Kenar:

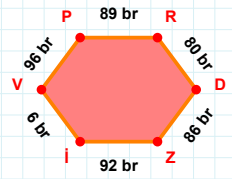


73 cm hangi kenara aittir?

- ☐ VN kenarı
☐ AM kenarı
☐ VM kenarı

 $|MA|$ kaç brdir?

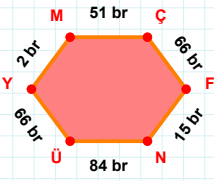
- ☐ 70 br
☐ 71 br
☐ 72 br



96 br hangi kenara aittir?

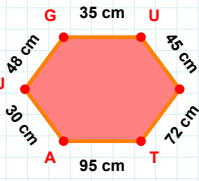
- ☐ VD kenarı
☐ PR kenarı
☐ RD kenarı

SORU: Aşağıdaki geometrik şekillerle ilgili soruları cevaplayınız.



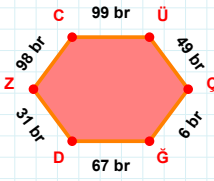
2 br hangi kenara aittir?

- ☐ ÇF kenarı
☐ ÜY kenarı
☐ FM kenarı



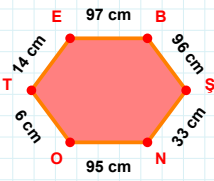
48 cm hangi kenara aittir?

- ☐ GA kenarı
☐ GU kenarı
☐ LT kenarı



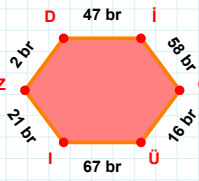
6 br hangi kenara aittir?

Kenar:



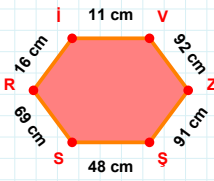
14 cm hangi kenara aittir?

- ☐ NO kenarı
☐ ŞO kenarı
☐ OT kenarı



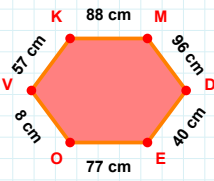
|Üİ| kaç brdir?

- ☐ 66 br
☐ 67 br
☐ 68 br



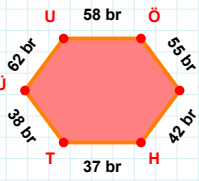
|ŞS| kaç cmdir?

- ☐ 47 cm
☐ 48 cm
☐ 49 cm



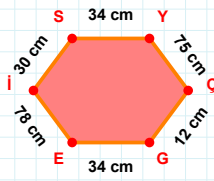
|EO| kaç cmdir?

- ☐ 76 cm
☐ 77 cm
☐ 78 cm



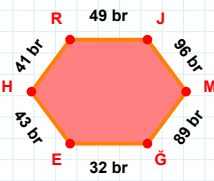
37 br hangi kenara aittir?

Kenar:



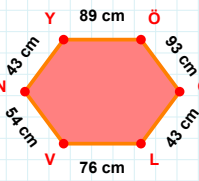
75 cm hangi kenara aittir?

Kenar:



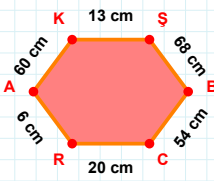
|ĞE| kaç brdir?

- ☐ 31 br
☐ 32 br
☐ 33 br



|ÖG| kaç cmdir?

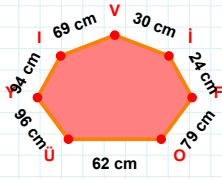
- ☐ 92 cm
☐ 93 cm
☐ 94 cm



|CR| kaç cmdir?

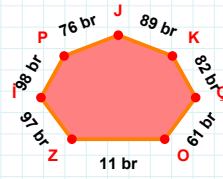
- ☐ 19 cm
☐ 20 cm
☐ 21 cm

SORU: Aşağıdaki geometrik şekillerle ilgili soruları cevaplayınız.



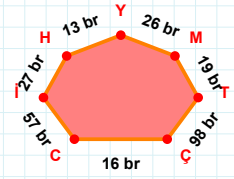
69 cm hangi kenara aittir?

Kenar:



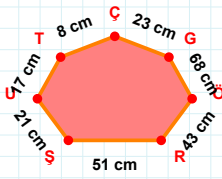
89 br hangi kenara aittir?

- ☐ ÇK kenarı
☐ KJ kenarı
☐ ZÇ kenarı



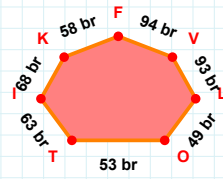
$|TM| + |HI| = \dots$

Cevap: br



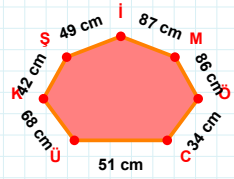
$|ÖG|$ kaç cmdir?

- ☐ 67 cm
☐ 68 cm
☐ 69 cm



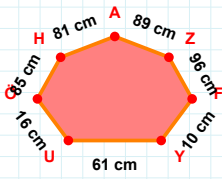
94 br hangi kenara aittir?

- ☐ TO kenarı
☐ IT kenarı
☐ OK kenarı



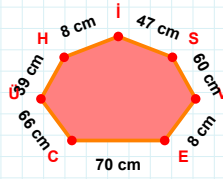
34 cm hangi kenara aittir?

Kenar:



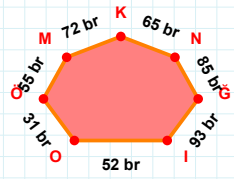
$|ÖU|$ kaç cmdir?

- ☐ 15 cm
☐ 16 cm
☐ 17 cm



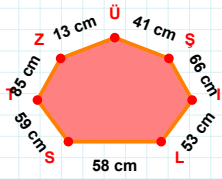
$|ÜC| + |VS| = \dots$

Cevap: cm



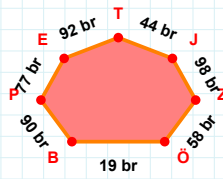
93 br hangi kenara aittir?

Kenar:



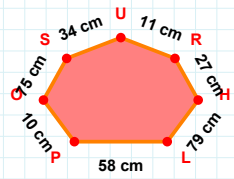
$|ÜZ|$ kaç cmdir?

- ☐ 12 cm
☐ 13 cm
☐ 14 cm



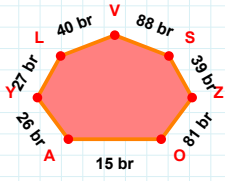
44 br hangi kenara aittir?

- ☐ PB kenarı
☐ EJ kenarı
☐ EP kenarı



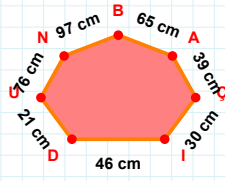
11 cm hangi kenara aittir?

Kenar:

SORU: Aşağıdaki geometrik şekillerle ilgili soruları cevaplayınız.

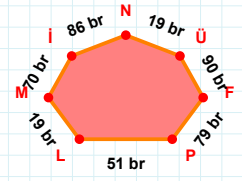
$|AO| + |OZ| = \dots$

Cevap: br



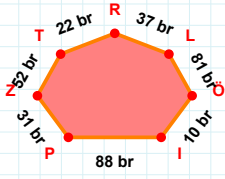
$|UD|$ kaç cm'dir?

- ☐ 20 cm
☐ 21 cm
☐ 22 cm



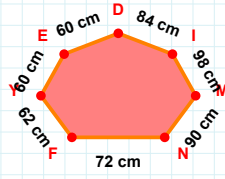
19 br hangi kenara aittir?

Kenar:



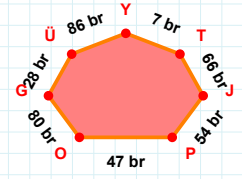
$|PI| + |RT| = \dots$

Cevap: br



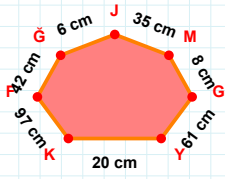
60 cm hangi kenara aittir?

Kenar:



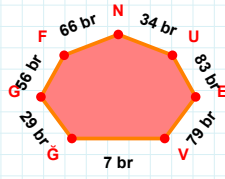
$|OP| + |PJ| = \dots$

Cevap: br



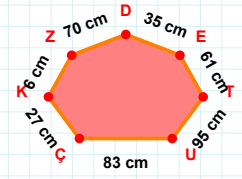
$|YG| + |FK| = \dots$

Cevap: cm



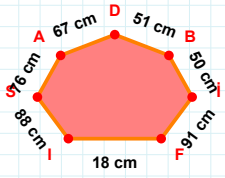
$|EU|$ kaç br'dir?

- ☐ 82 br
☐ 83 br
☐ 84 br



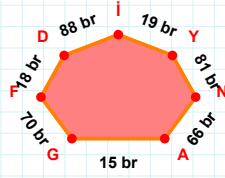
35 cm hangi kenara aittir?

- ☐ ED kenarı
☐ ZK kenarı
☐ DT kenarı



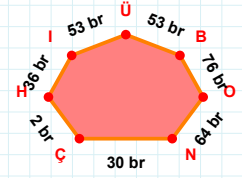
$|DA|$ kaç cm'dir?

- ☐ 66 cm
☐ 67 cm
☐ 68 cm



70 br hangi kenara aittir?

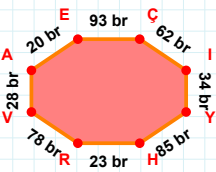
Kenar:



53 br hangi kenara aittir?

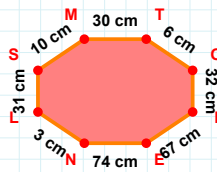
- ☐ ÇN kenarı
☐ ÜI kenarı
☐ NH kenarı

SORU: Aşağıdaki geometrik şekillerle ilgili soruları cevaplayınız.



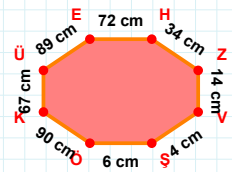
20 br hangi kenara aittir?

- ☐ AE kenarı
☐ RV kenarı
☐ VI kenarı



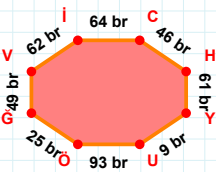
6 cm hangi kenara aittir?

Kenar:



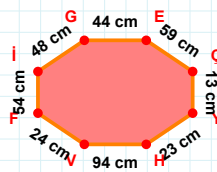
6 cm hangi kenara aittir?

Kenar:



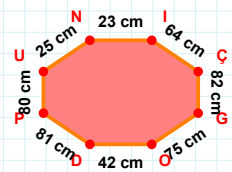
62 br hangi kenara aittir?

- ☐ İÜ kenarı
☐ YU kenarı
☐ ÖĞ kenarı



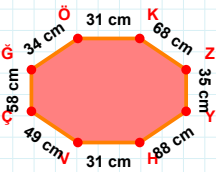
48 cm hangi kenara aittir?

- ☐ İG kenarı
☐ EV kenarı
☐ EÇ kenarı



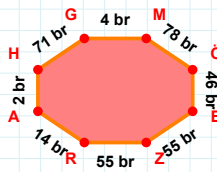
|GO| kaç cm'dir?

- ☐ 74 cm
☐ 75 cm
☐ 76 cm



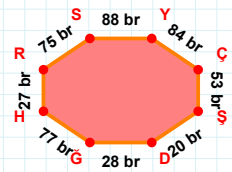
|ÖÖ| + |VÇ| =

Cevap: cm



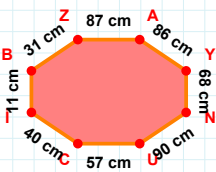
|ZR| kaç br'dir?

- ☐ 54 br
☐ 55 br
☐ 56 br



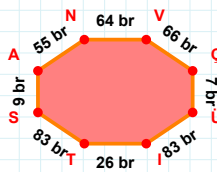
75 br hangi kenara aittir?

- ☐ YÇ kenarı
☐ HS kenarı
☐ ÇŞ kenarı



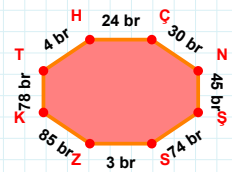
11 cm hangi kenara aittir?

Kenar:



|AN| kaç br'dir?

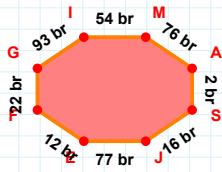
- ☐ 54 br
☐ 55 br
☐ 56 br



4 br hangi kenara aittir?

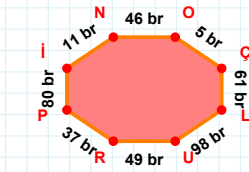
- ☐ KN kenarı
☐ ZK kenarı
☐ HÇ kenarı

SORU: Aşağıdaki geometrik şekillerle ilgili soruları cevaplayınız.

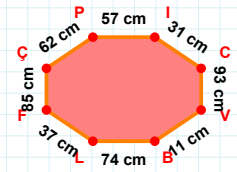


93 br hangi kenara aittir?

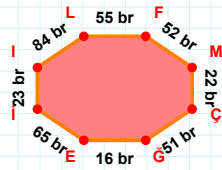
- ☐ AS kenarı
☐ SI kenarı
☐ SJ kenarı

 $|NO| + |IN| = \dots$

Cevap: br

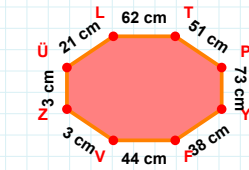
 $|CP| + |IC| = \dots$

Cevap: cm



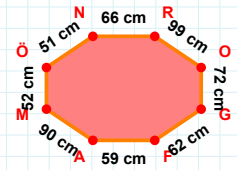
84 br hangi kenara aittir?

- ☐ EI kenarı
☐ FM kenarı
☐ EF kenarı

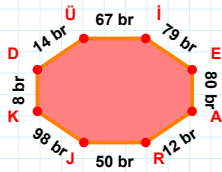


38 cm hangi kenara aittir?

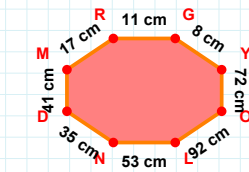
Kenar:

 $|FA|$ kaç cm'dir?

- ☐ 58 cm
☐ 59 cm
☐ 60 cm

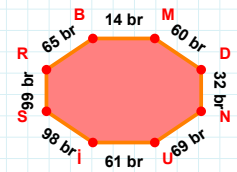
 $|IE| + |JK| = \dots$

Cevap: br

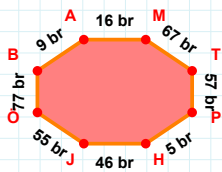


41 cm hangi kenara aittir?

Kenar:

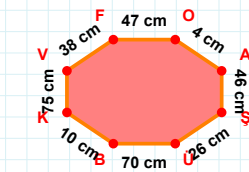
 $|DN|$ kaç br'dir?

- ☐ 31 br
☐ 32 br
☐ 33 br

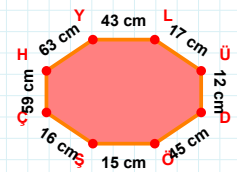


9 br hangi kenara aittir?

- ☐ JT kenarı
☐ JO kenarı
☐ PH kenarı

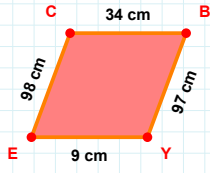
 $|ŞÜ| + |VF| = \dots$

Cevap: cm

 $|HY|$ kaç cm'dir?

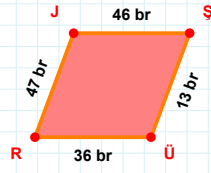
- ☐ 62 cm
☐ 63 cm
☐ 64 cm

SORU: Aşağıdaki geometrik şekillerle ilgili soruları cevaplayınız.



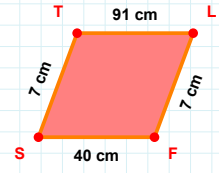
98 cm hangi kenara aittir?

- ☐ CB kenarı
☐ YE kenarı
☐ CY kenarı



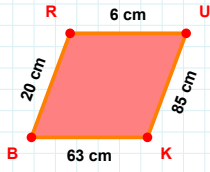
|ÜR| kaç brdir?

- ☐ 35 br
☐ 36 br
☐ 37 br



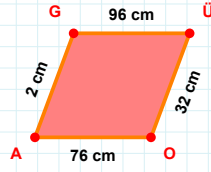
7 cm hangi kenara aittir?

- ☐ ST kenarı
☐ LS kenarı
☐ LF kenarı



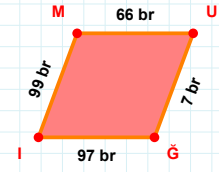
20 cm hangi kenara aittir?

- ☐ KB kenarı
☐ RK kenarı
☐ BR kenarı



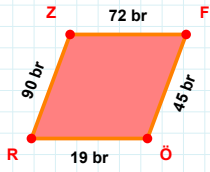
|ÜO| + |AG| =

Cevap: cm



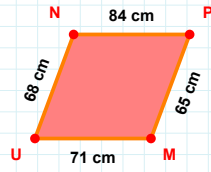
|MU| kaç brdir?

- ☐ 65 br
☐ 66 br
☐ 67 br



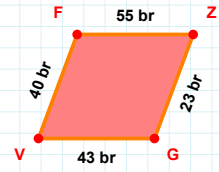
90 br hangi kenara aittir?

Kenar:



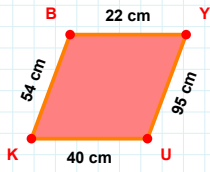
65 cm hangi kenara aittir?

Kenar:



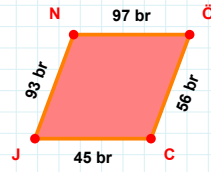
40 br hangi kenara aittir?

- ☐ ZG kenarı
☐ GF kenarı
☐ GV kenarı



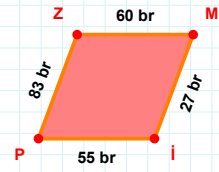
|UK| kaç cmdir?

- ☐ 39 cm
☐ 40 cm
☐ 41 cm



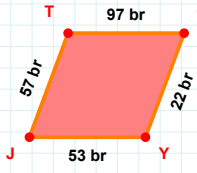
56 br hangi kenara aittir?

Kenar:



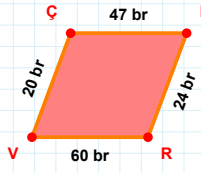
|ZM| kaç brdir?

- ☐ 59 br
☐ 60 br
☐ 61 br

SORU: Aşağıdaki geometrik şekillerle ilgili soruları cevaplayınız.

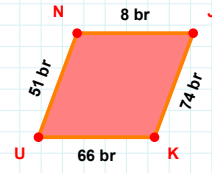
$$|GY| + |TG| = \dots$$

Cevap: br



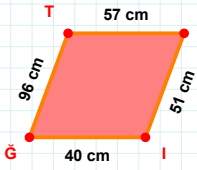
$$|ER| + |RV| = \dots$$

Cevap: br



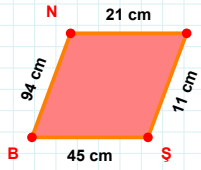
$$|KU| \text{ kaç brdir?}$$

- ☐ 65 br
☐ 66 br
☐ 67 br



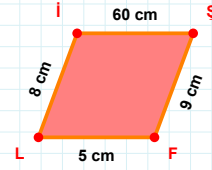
$$|SI| + |TS| = \dots$$

Cevap: cm



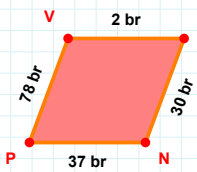
$$|NL| + |BN| = \dots$$

Cevap: cm



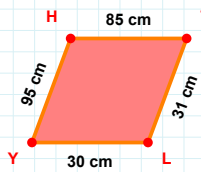
$$8 \text{ cm hangi kenara aittir?}$$

- ☐ FL kenarı
☐ SL kenarı
☐ SF kenarı



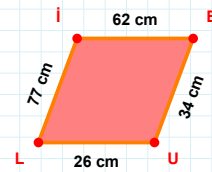
$$|PV| \text{ kaç brdir?}$$

- ☐ 77 br
☐ 78 br
☐ 79 br



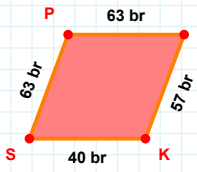
$$95 \text{ cm hangi kenara aittir?}$$

- ☐ TY kenarı
☐ YH kenarı
☐ LY kenarı



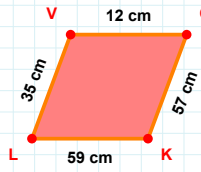
$$77 \text{ cm hangi kenara aittir?}$$

- ☐ UL kenarı
☐ EU kenarı
☐ İU kenarı



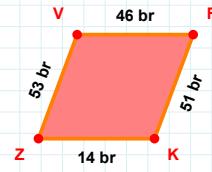
$$63 \text{ br hangi kenara aittir?}$$

Kenar:



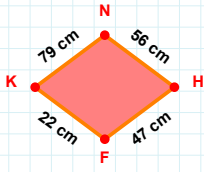
$$35 \text{ cm hangi kenara aittir?}$$

- ☐ ÇL kenarı
☐ LV kenarı
☐ VÇ kenarı



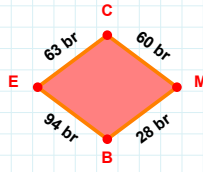
$$51 \text{ br hangi kenara aittir?}$$

Kenar:

SORU: Aşağıdaki geometrik şekillerle ilgili soruları cevaplayınız.

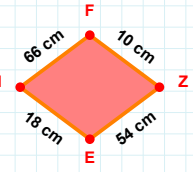
79 cm hangi kenara aittir?

- ☐ FN kenarı
☐ HF kenarı
☐ NH kenarı



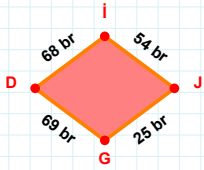
28 br hangi kenara aittir?

Kenar:



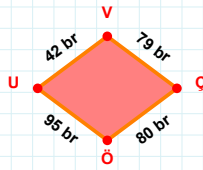
|HF| kaç cm'dir?

- ☐ 65 cm
☐ 66 cm
☐ 67 cm



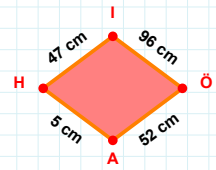
68 br hangi kenara aittir?

Kenar:



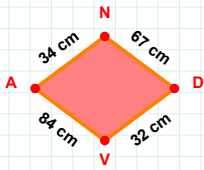
42 br hangi kenara aittir?

- ☐ VÇ kenarı
☐ ÖU kenarı
☐ ÖV kenarı



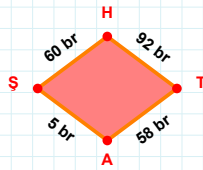
47 cm hangi kenara aittir?

Kenar:



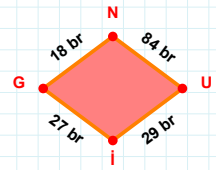
34 cm hangi kenara aittir?

- ☐ DV kenarı
☐ AN kenarı
☐ AD kenarı



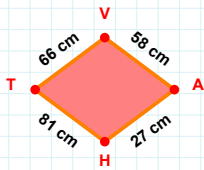
60 br hangi kenara aittir?

Kenar:



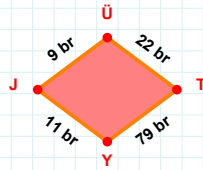
|UI| + |NU| =

Cevap: br



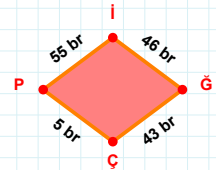
81 cm hangi kenara aittir?

Kenar:



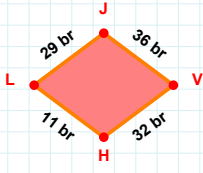
|ÜT| kaç br'dir?

- ☐ 21 br
☐ 22 br
☐ 23 br

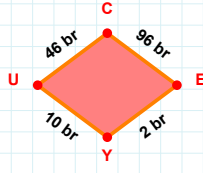
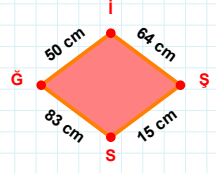
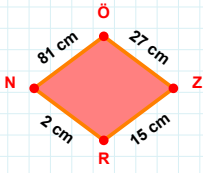


5 br hangi kenara aittir?

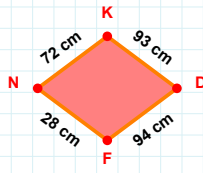
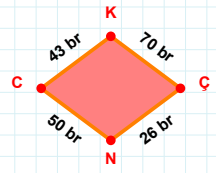
Kenar:

SORU: Aşağıdaki geometrik şekillerle ilgili soruları cevaplayınız.**|HL| kaç brdir?**

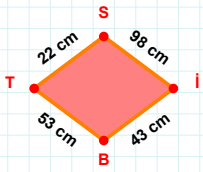
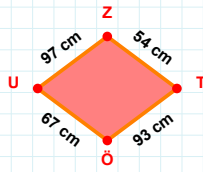
- ☐ 10 br
☐ 11 br
☐ 12 br

**|YU| + |UC| =****Cevap:** br**|Ğİ| + |ŞS| =****Cevap:** cm**|NÖ| kaç cmdir?**

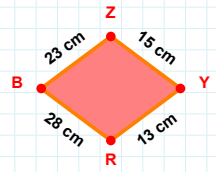
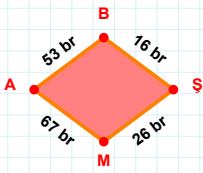
- ☐ 80 cm
☐ 81 cm
☐ 82 cm

**|NK| + |FN| =****Cevap:** cm**|ÇN| kaç brdir?**

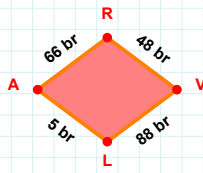
- ☐ 25 br
☐ 26 br
☐ 27 br

**53 cm hangi kenara aittir?****Kenar:****|TÖ| kaç cmdir?**

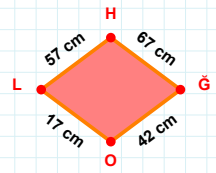
- ☐ 92 cm
☐ 93 cm
☐ 94 cm

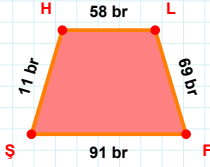
**|RB| + |YR| =****Cevap:** cm**53 br hangi kenara aittir?**

- ☐ AB kenarı
☐ ŞA kenarı
☐ BŞ kenarı

**|VL| kaç brdir?**

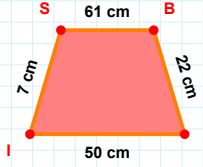
- ☐ 87 br
☐ 88 br
☐ 89 br

**|LH| + |ĞO| =****Cevap:** cm

SORU: Aşağıdaki geometrik şekillerle ilgili soruları cevaplayınız.

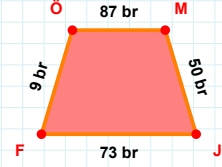
$|HL| + |LF| = \dots$

Cevap: br



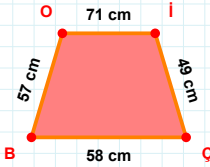
$|BI| + |IS| = \dots$

Cevap: cm



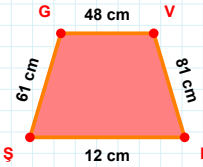
73 br hangi kenara aittir?

Kenar:



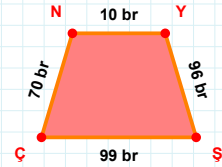
|İÇ| kaç cm'dir?

- ☐ 48 cm
☐ 49 cm
☐ 50 cm



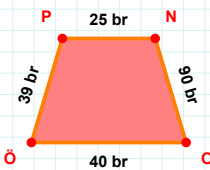
61 cm hangi kenara aittir?

- ☐ ŞV kenarı
☐ ŞG kenarı
☐ VN kenarı



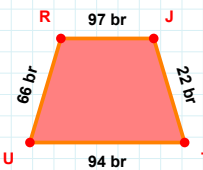
70 br hangi kenara aittir?

- ☐ NY kenarı
☐ YÇ kenarı
☐ ÇN kenarı



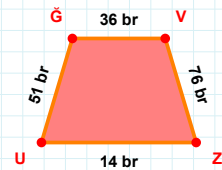
39 br hangi kenara aittir?

- ☐ OP kenarı
☐ PN kenarı
☐ NO kenarı



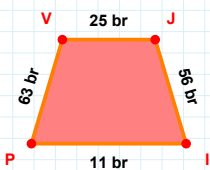
$|TU| + |JT| = \dots$

Cevap: br



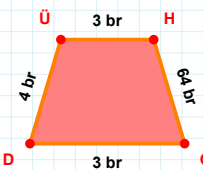
51 br hangi kenara aittir?

- ☐ GÜ kenarı
☐ VZ kenarı
☐ ZG kenarı



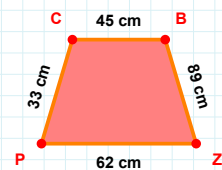
63 br hangi kenara aittir?

- ☐ VJ kenarı
☐ JI kenarı
☐ PJ kenarı



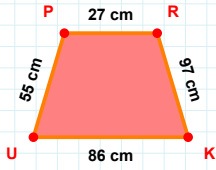
|GD| kaç br'dir?

- ☐ 2 br
☐ 3 br
☐ 4 br



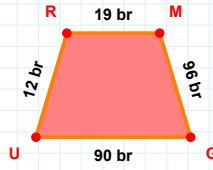
33 cm hangi kenara aittir?

- ☐ ZP kenarı
☐ PB kenarı
☐ BZ kenarı

SORU: Aşağıdaki geometrik şekillerle ilgili soruları cevaplayınız.

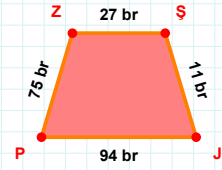
$$|UP| + |RK| = \dots$$

Cevap: cm



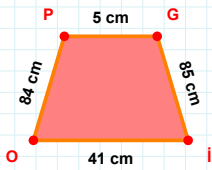
12 br hangi kenara aittir?

- ☐ RG kenarı
☐ MG kenarı
☐ RM kenarı



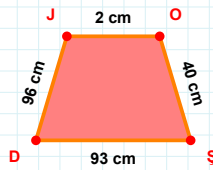
$$|SJ| + |PZ| = \dots$$

Cevap: br



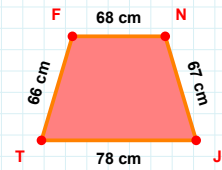
41 cm hangi kenara aittir?

Kenar:



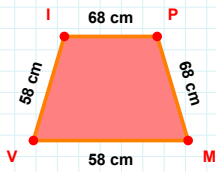
$$|OS| + |DJ| = \dots$$

Cevap: cm



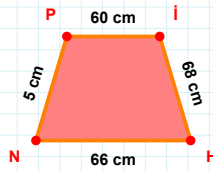
|NJ| kaç cmdir?

- ☐ 66 cm
☐ 67 cm
☐ 68 cm



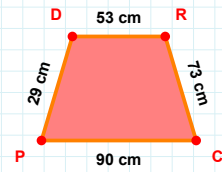
|IP| kaç cmdir?

- ☐ 67 cm
☐ 68 cm
☐ 69 cm



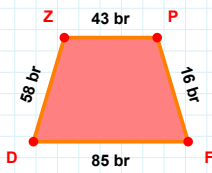
|NP| kaç cmdir?

- ☐ 4 cm
☐ 5 cm
☐ 6 cm



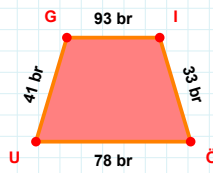
|CP| kaç cmdir?

- ☐ 89 cm
☐ 90 cm
☐ 91 cm



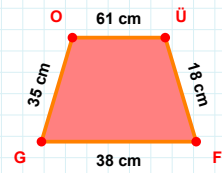
$$|DZ| + |FD| = \dots$$

Cevap: br



41 br hangi kenara aittir?

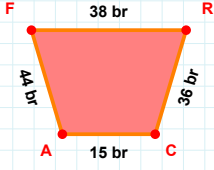
- ☐ UG kenarı
☐ UI kenarı
☐ GI kenarı



|FG| kaç cmdir?

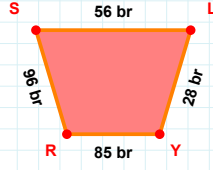
- ☐ 37 cm
☐ 38 cm
☐ 39 cm

SORU: Aşağıdaki geometrik şekillerle ilgili soruları cevaplayınız.



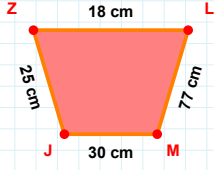
|CA| kaç brdir?

- ☐ 14 br
☐ 15 br
☐ 16 br



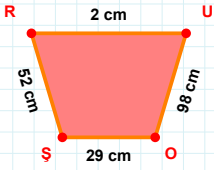
96 br hangi kenara aittir?

- ☐ LR kenarı
☐ SL kenarı
☐ RS kenarı



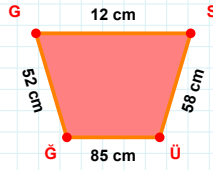
|JZ| kaç cmdir?

- ☐ 24 cm
☐ 25 cm
☐ 26 cm



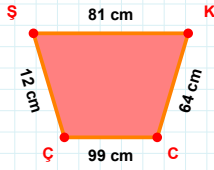
|ŞR| kaç cmdir?

- ☐ 51 cm
☐ 52 cm
☐ 53 cm



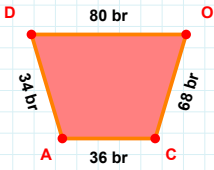
58 cm hangi kenara aittir?

Kenar:



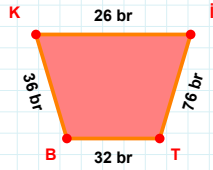
12 cm hangi kenara aittir?

- ☐ CŞ kenarı
☐ ŞK kenarı
☐ CÇ kenarı



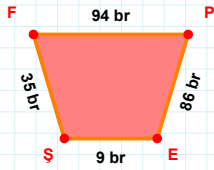
68 br hangi kenara aittir?

Kenar:



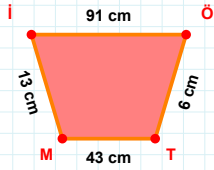
|İT| kaç brdir?

- ☐ 75 br
☐ 76 br
☐ 77 br



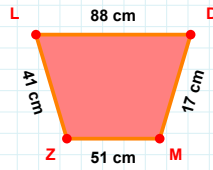
|FP| + |ŞF| =

Cevap: br



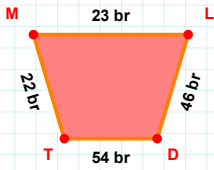
|İÖ| + |TM| =

Cevap: cm



51 cm hangi kenara aittir?

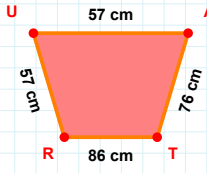
Kenar:



46 br hangi kenara aittir?

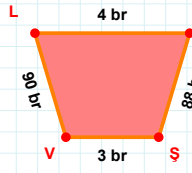
Kenar:

SORU: Aşağıdaki geometrik şekillerle ilgili soruları cevaplayınız.



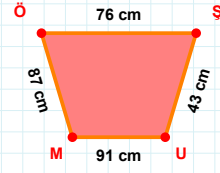
|UA| + |AT| =

Cevap: cm



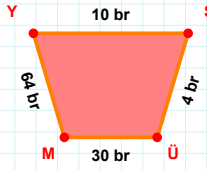
|LU| kaç brdir?

- ☐ 3 br
☐ 4 br
☐ 5 br



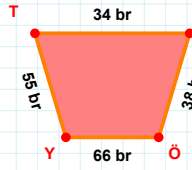
|ÖŞ| kaç cmdir?

- ☐ 75 cm
☐ 76 cm
☐ 77 cm



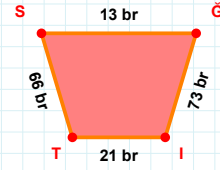
|SÜ| + |YS| =

Cevap: br



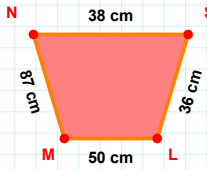
|YT| + |SÖ| =

Cevap: br



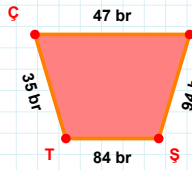
|Ğİ| + |TS| =

Cevap: br



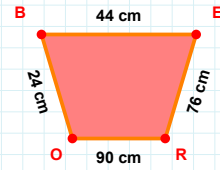
|LM| kaç cmdir?

- ☐ 49 cm
☐ 50 cm
☐ 51 cm



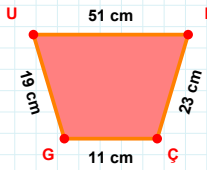
47 br hangi kenara aittir?

Kenar:



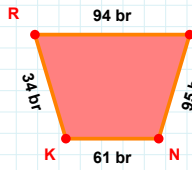
|OB| + |BE| =

Cevap: cm



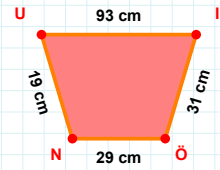
|LÇ| + |ÇG| =

Cevap: cm



|LN| kaç brdir?

- ☐ 94 br
☐ 95 br
☐ 96 br



19 cm hangi kenara aittir?

- ☐ UI kenarı
☐ ÖU kenarı
☐ NU kenarı

SÜREÇ ODAKLI DEĞERLENDİRME ÖLÇEĞİ

Geliştirilmeli (0-109)	İyi (110-187)	Çok İyi (188-265)	Mükemmel (266-312)
<input type="checkbox"/>	<input type="checkbox"/>	<input type="checkbox"/>	<input type="checkbox"/>

Hazırlayan:

Bu bölüme sınıfınızın ilgili kazanıma yönelik genel durumuna ilişkin gözlem ve izlenimlerinizi, öğrencilerinizin bu kazanımla ilgili öğrenme eksikliklerini ve bu eksikliklerin giderilmesi amacıyla yaptığınız/yapmayı planladığınız faaliyetleri not edebilirsiniz.

No	Adı - Soyadı	Toplam Puan	Değerlendirme
1			
2			
3			
4			
5			
6			
7			
8			
9			
10			
11			
12			
13			
14			
15			
16			
17			
18			
19			
20			
21			
22			
23			
24			
25			
26			
27			
28			
29			
30			
31			
32			
33			
34			
35			

Hazırlayan: