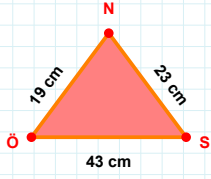
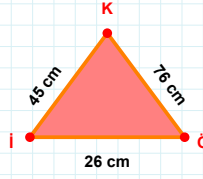
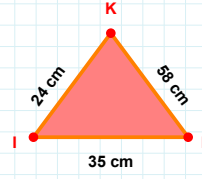


**SORU:** Aşağıdaki geometrik şekillerle ilgili soruları cevaplayınız.**|ÖS| kaç cmdir?**

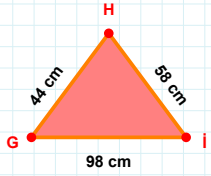
- ☐ 42 cm  
☐ 43 cm  
☐ 44 cm

**76 cm hangi kenara aittir?**

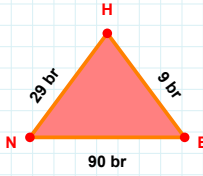
- ☐ İÖ kenarı  
☐ ÖK kenarı  
☐ XY kenarı

**|KI| kaç cmdir?**

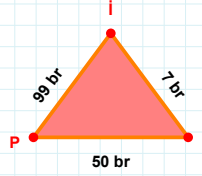
- ☐ 23 cm  
☐ 24 cm  
☐ 25 cm

**58 cm hangi kenara aittir?**

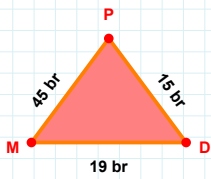
- ☐ XY kenarı  
☐ İH kenarı  
☐ HG kenarı

**29 br hangi kenara aittir?**

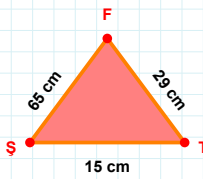
Kenar: .....

**|PF| + |FI| = ....**

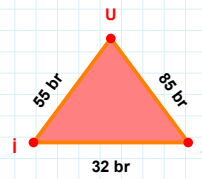
Cevap: ..... br

**|DP| + |MD| = ....**

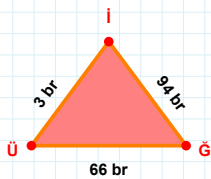
Cevap: ..... br

**|FS| kaç cmdir?**

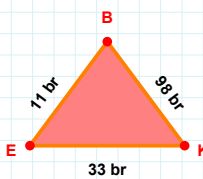
- ☐ 64 cm  
☐ 65 cm  
☐ 66 cm

**|ZU| + |IZ| = ....**

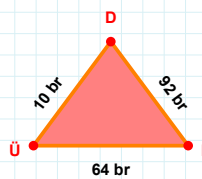
Cevap: ..... br

**3 br hangi kenara aittir?**

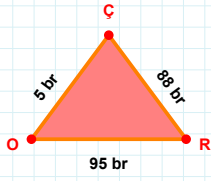
Kenar: .....

**|EK| kaç brdir?**

- ☐ 32 br  
☐ 33 br  
☐ 34 br

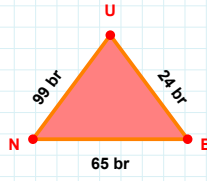
**|HD| + |DÜ| = ....**

Cevap: ..... br

**SORU:** Aşağıdaki geometrik şekillerle ilgili soruları cevaplayınız.

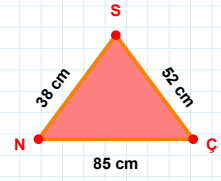
88 br hangi kenara aittir?

- ☐ ÇO kenarı  
☐ OR kenarı  
☐ XY kenarı

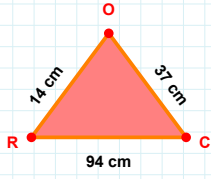


65 br hangi kenara aittir?

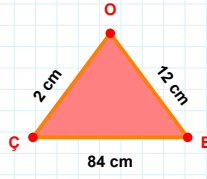
Kenar: .....

 $|NÇ| + |SN| = \dots$ 

Cevap: ..... cm

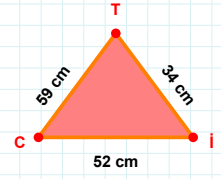
 $|OR| + |CO| = \dots$ 

Cevap: ..... cm



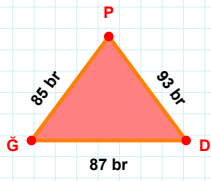
12 cm hangi kenara aittir?

- ☐ EO kenarı  
☐ XY kenarı  
☐ ÇE kenarı

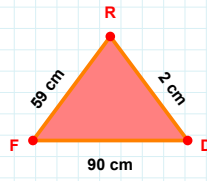


52 cm hangi kenara aittir?

Kenar: .....

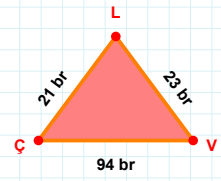
 $|PĞ| + |DP| = \dots$ 

Cevap: ..... br

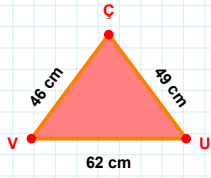


90 cm hangi kenara aittir?

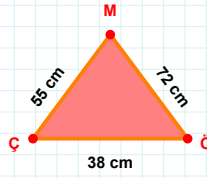
Kenar: .....

 $|VL|$  kaç brdir?

- ☐ 22 br  
☐ 23 br  
☐ 24 br

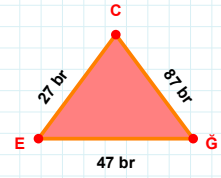
 $|ÇV| + |VU| = \dots$ 

Cevap: ..... cm

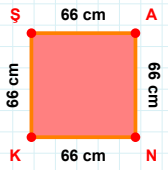


55 cm hangi kenara aittir?

Kenar: .....

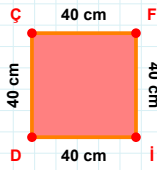
 $|ÇC| + |EG| = \dots$ 

Cevap: ..... br

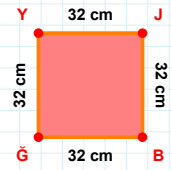
**SORU:** Aşağıdaki geometrik şekillerle ilgili soruları cevaplayınız.

66 cm hangi kenara aittir?

Kenar: .....

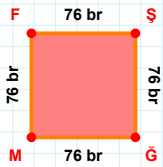
 $|ÇF| + |DÇ| = \dots$ 

Cevap: ..... cm

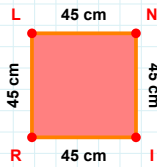


32 cm hangi kenara aittir?

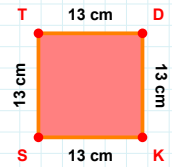
Kenar: .....

 $|FŞ| + |ŞM| = \dots$ 

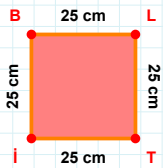
Cevap: ..... br

 $|LN| + |NI| = \dots$ 

Cevap: ..... cm

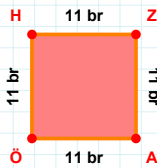
 $|ST| + |TD| = \dots$ 

Cevap: ..... cm



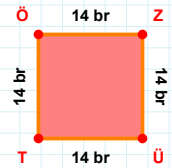
25 cm hangi kenara aittir?

Kenar: .....

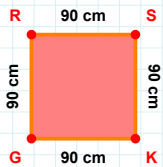


11 br hangi kenara aittir?

- ☐ ÖH kenarı  
☐ ÖZ kenarı  
☐ ZA kenarı

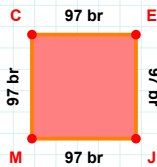
 $|TÖ|$  kaç brdir?

- ☐ 13 br  
☐ 14 br  
☐ 15 br



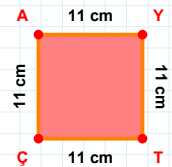
90 cm hangi kenara aittir?

- ☐ SK kenarı  
☐ SG kenarı  
☐ KG kenarı



97 br hangi kenara aittir?

- ☐ ME kenarı  
☐ MC kenarı  
☐ JM kenarı



11 cm hangi kenara aittir?

Kenar: .....

**SORU:** Aşağıdaki geometrik şekillerle ilgili soruları cevaplayınız.

Ç 72 br S  
72 br 72 br  
D 72 br Ğ

72 br hangi kenara aittir?

- ☐ ĞD kenarı  
☐ ĞÇ kenarı  
☐ ÇS kenarı

S 91 br M  
91 br 91 br  
Ü 91 br L

91 br hangi kenara aittir?

- ☐ SM kenarı  
☐ LÜ kenarı  
☐ MÜ kenarı

K 87 br L  
87 br 87 br  
Ş 87 br J

87 br hangi kenara aittir?

- ☐ ŞL kenarı  
☐ JŞ kenarı  
☐ LJ kenarı

C 67 br K  
67 br 67 br  
N 67 br T

 $|KT| + |TN| = \dots$ 

Cevap: ..... br

L 26 br C  
26 br 26 br  
K 26 br M

 $|MK| + |LC| = \dots$ 

Cevap: ..... br

F 52 cm O  
52 cm 52 cm  
S 52 cm G

52 cm hangi kenara aittir?

Kenar: .....

İ 21 br Ö  
21 br 21 br  
Y 21 br R

21 br hangi kenara aittir?

Kenar: .....

Ö 3 cm S  
3 cm 3 cm  
K 3 cm A

 $|ÖS| + |SA| = \dots$ 

Cevap: ..... cm

B 78 cm S  
78 cm 78 cm  
G 78 cm F

78 cm hangi kenara aittir?

Kenar: .....

Ş 2 cm A  
2 cm 2 cm  
Ö 2 cm P

2 cm hangi kenara aittir?

Kenar: .....

Ğ 55 br Ş  
55 br 55 br  
E 55 br S

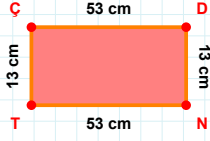
55 br hangi kenara aittir?

- ☐ SE kenarı  
☐ ŞS kenarı  
☐ EŞ kenarı

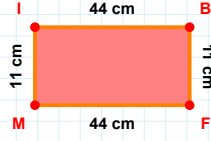
S 73 br R  
73 br 73 br  
O 73 br T

 $|SR|$  kaç brdir?

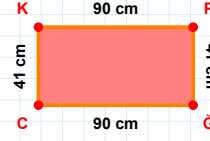
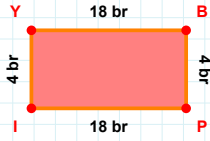
- ☐ 72 br  
☐ 73 br  
☐ 74 br

**SORU:** Aşağıdaki geometrik şekillerle ilgili soruları cevaplayınız.**13 cm hangi kenara aittir?**

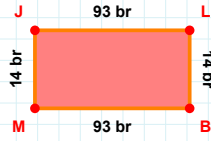
- ☐ NT kenarı  
☐ ÇD kenarı  
☐ TD kenarı

**11 cm hangi kenara aittir?**

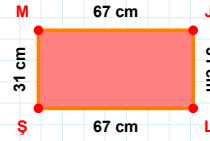
- ☐ FM kenarı  
☐ IF kenarı  
☐ BF kenarı

**|PĞ| + |ĞC| = ....****Cevap:** ..... cm**4 br hangi kenara aittir?**

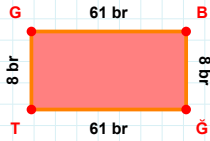
- ☐ PI kenarı  
☐ PY kenarı  
☐ IY kenarı

**|JL| kaç brdir?**

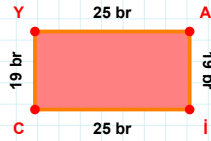
- ☐ 92 br  
☐ 93 br  
☐ 94 br

**31 cm hangi kenara aittir?**

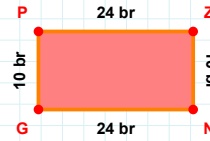
- ☐ LM kenarı  
☐ MJ kenarı  
☐ LŞ kenarı

**|GT| kaç brdir?**

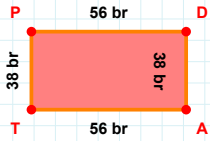
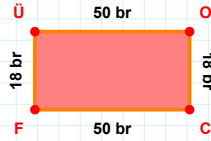
- ☐ 60 br  
☐ 61 br  
☐ 62 br

**19 br hangi kenara aittir?**

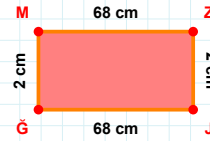
- ☐ AI kenarı  
☐ İC kenarı  
☐ YI kenarı

**10 br hangi kenara aittir?**

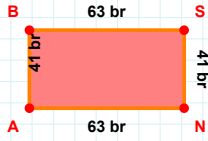
- ☐ PN kenarı  
☐ GP kenarı  
☐ PZ kenarı

**38 br hangi kenara aittir?****Kenar:** .....**|FÜ| kaç brdir?**

- ☐ 17 br  
☐ 18 br  
☐ 19 br

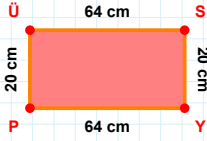
**2 cm hangi kenara aittir?**

- ☐ MZ kenarı  
☐ GZ kenarı  
☐ JĞ kenarı

**SORU:** Aşağıdaki geometrik şekillerle ilgili soruları cevaplayınız.

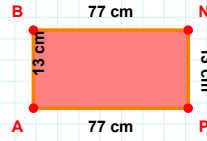
$|SN| + |BS| = \dots$

Cevap: ..... br



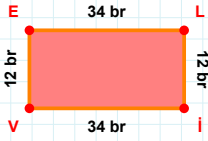
20 cm hangi kenara aittir?

- ☐ SY kenarı  
☐ SP kenarı  
☐ ÜS kenarı



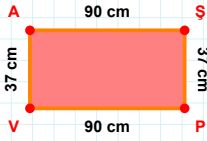
$|BN| + |PA| = \dots$

Cevap: ..... cm



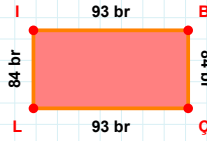
34 br hangi kenara aittir?

Kenar: .....



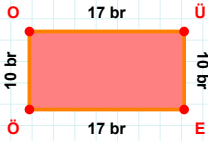
37 cm hangi kenara aittir?

- ☐ ŞP kenarı  
☐ PV kenarı  
☐ ŞV kenarı



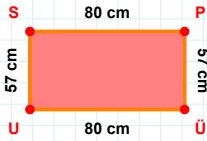
|İB| kaç brdir?

- ☐ 92 br  
☐ 93 br  
☐ 94 br



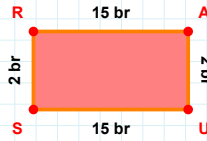
$|EÖ| + |ÖO| = \dots$

Cevap: ..... br



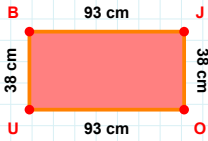
|US| kaç cmdir?

- ☐ 56 cm  
☐ 57 cm  
☐ 58 cm



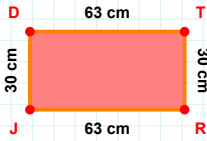
|SR| kaç brdir?

- ☐ 1 br  
☐ 2 br  
☐ 3 br



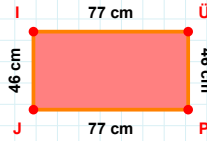
|JO| kaç cmdir?

- ☐ 37 cm  
☐ 38 cm  
☐ 39 cm



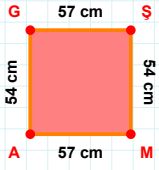
30 cm hangi kenara aittir?

- ☐ DT kenarı  
☐ RJ kenarı  
☐ RD kenarı



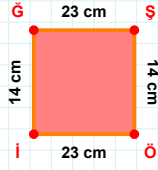
46 cm hangi kenara aittir?

Kenar: .....

**SORU:** Aşağıdaki geometrik şekillerle ilgili soruları cevaplayınız.

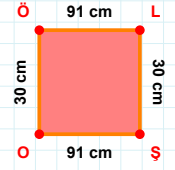
54 cm hangi kenara aittir?

- ☐ AG kenarı  
☐ GS kenarı  
☐ AS kenarı



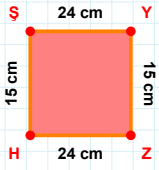
14 cm hangi kenara aittir?

- ☐ GS kenarı  
☐ ÖG kenarı  
☐ Öİ kenarı



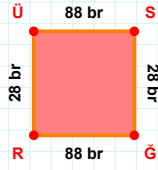
30 cm hangi kenara aittir?

Kenar: .....



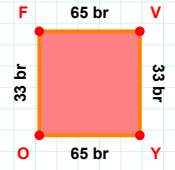
|ZH| kaç cm'dir?

- ☐ 23 cm  
☐ 24 cm  
☐ 25 cm



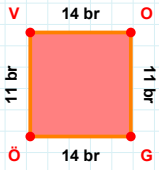
28 br hangi kenara aittir?

Kenar: .....



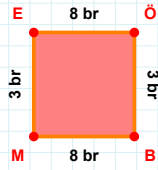
33 br hangi kenara aittir?

- ☐ YO kenarı  
☐ VY kenarı  
☐ OV kenarı



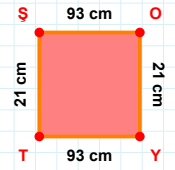
11 br hangi kenara aittir?

- ☐ ÖV kenarı  
☐ VO kenarı  
☐ GV kenarı



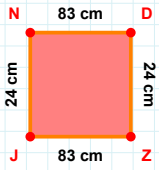
3 br hangi kenara aittir?

Kenar: .....



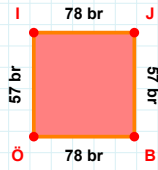
|YT| + |ŞO| = ....

Cevap: ..... cm



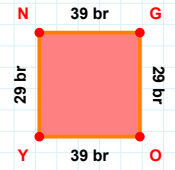
|ND| + |ZJ| = ....

Cevap: ..... cm



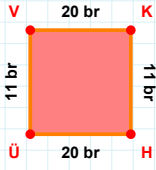
78 br hangi kenara aittir?

Kenar: .....



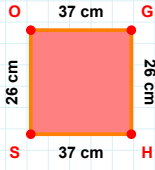
|GO| kaç br'dir?

- ☐ 28 br  
☐ 29 br  
☐ 30 br

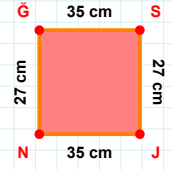
**SORU:** Aşağıdaki geometrik şekillerle ilgili soruları cevaplayınız.

11 br hangi kenara aittir?

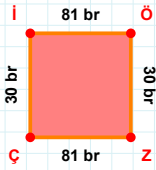
- ☐ VK kenarı  
☐ KÜ kenarı  
☐ ÜV kenarı

 $|GH| + |OG| = \dots$ 

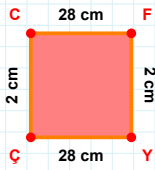
Cevap: ..... cm

 $|NĞ|$  kaç cm'dir?

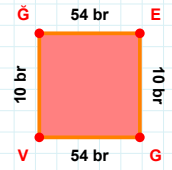
- ☐ 26 cm  
☐ 27 cm  
☐ 28 cm

 $|Çİ| + |ZÇ| = \dots$ 

Cevap: ..... br

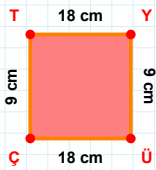
 $|ÇÇ| + |YÇ| = \dots$ 

Cevap: ..... cm



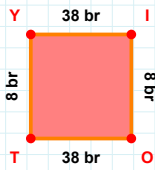
10 br hangi kenara aittir?

Kenar: .....



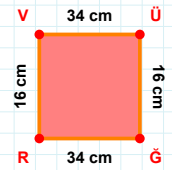
9 cm hangi kenara aittir?

- ☐ ÇY kenarı  
☐ ÇT kenarı  
☐ ÜÇ kenarı



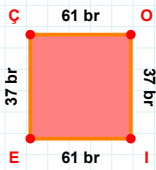
8 br hangi kenara aittir?

- ☐ TY kenarı  
☐ YO kenarı  
☐ OT kenarı

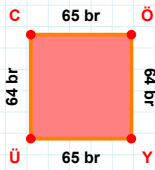


16 cm hangi kenara aittir?

Kenar: .....

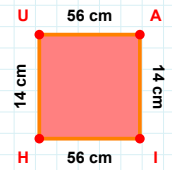
 $|İE|$  kaç br'dir?

- ☐ 60 br  
☐ 61 br  
☐ 62 br



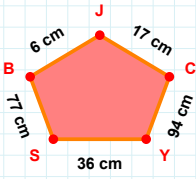
64 br hangi kenara aittir?

- ☐ ÜC kenarı  
☐ YÜ kenarı  
☐ ÖÜ kenarı

 $|HU|$  kaç cm'dir?

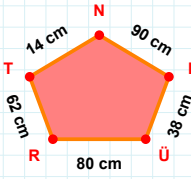
- ☐ 13 cm  
☐ 14 cm  
☐ 15 cm



**SORU:** Aşağıdaki geometrik şekillerle ilgili soruları cevaplayınız.

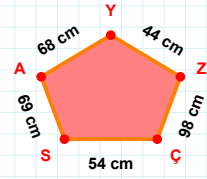
$$|JB| + |BS| = \dots$$

Cevap: ..... cm



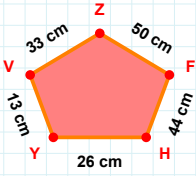
14 cm hangi kenara aittir?

Kenar: .....



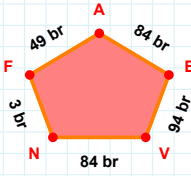
98 cm hangi kenara aittir?

Kenar: .....



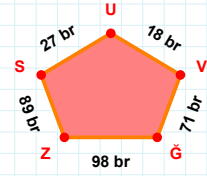
|YH| kaç cm'dir?

- ☐ 25 cm  
☐ 26 cm  
☐ 27 cm



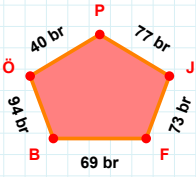
84 br hangi kenara aittir?

- ☐ VA kenarı  
☐ FN kenarı  
☐ VB kenarı



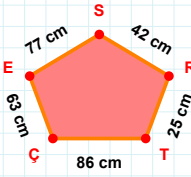
18 br hangi kenara aittir?

- ☐ VS kenarı  
☐ US kenarı  
☐ VU kenarı



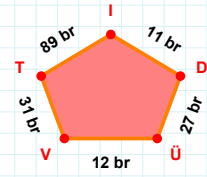
|PÖ| kaç br'dir?

- ☐ 39 br  
☐ 40 br  
☐ 41 br



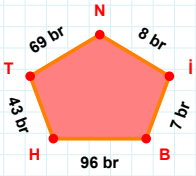
42 cm hangi kenara aittir?

Kenar: .....



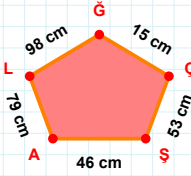
$$|DI| + |IT| = \dots$$

Cevap: ..... br



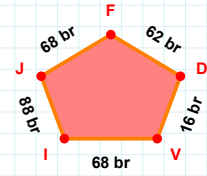
$$|TH| + |HB| = \dots$$

Cevap: ..... br



46 cm hangi kenara aittir?

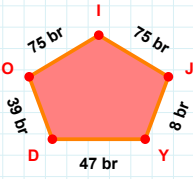
Kenar: .....



|IV| kaç br'dir?

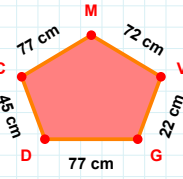
- ☐ 67 br  
☐ 68 br  
☐ 69 br

**SORU:** Aşağıdaki geometrik şekillerle ilgili soruları cevaplayınız.



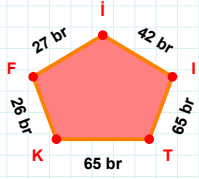
75 br hangi kenara aittir?

- ☐ JI kenarı  
☐ OJ kenarı  
☐ OD kenarı



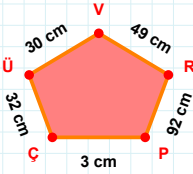
|DG| kaç cm'dir?

- ☐ 76 cm  
☐ 77 cm  
☐ 78 cm



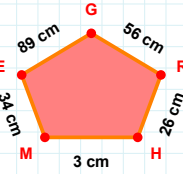
|FK| kaç br'dir?

- ☐ 25 br  
☐ 26 br  
☐ 27 br



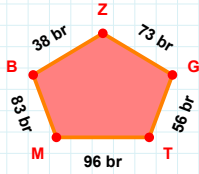
|ÇP| kaç cm'dir?

- ☐ 2 cm  
☐ 3 cm  
☐ 4 cm



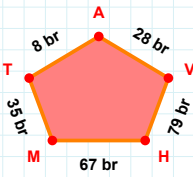
|MH| + |RG| = ....

Cevap: ..... cm



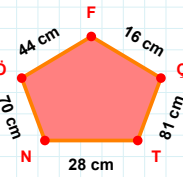
96 br hangi kenara aittir?

Kenar: .....



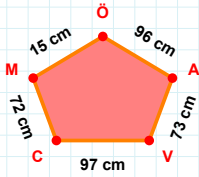
35 br hangi kenara aittir?

Kenar: .....



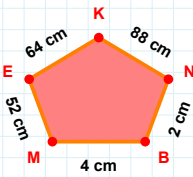
81 cm hangi kenara aittir?

Kenar: .....



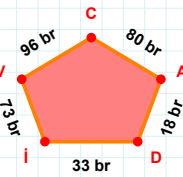
96 cm hangi kenara aittir?

Kenar: .....



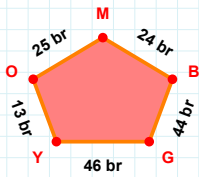
2 cm hangi kenara aittir?

Kenar: .....



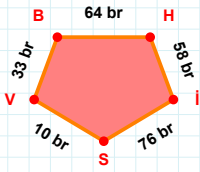
|AC| + |DA| = ....

Cevap: ..... br



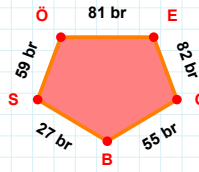
|MO| kaç br'dir?

- ☐ 24 br  
☐ 25 br  
☐ 26 br

**SORU:** Aşağıdaki geometrik şekillerle ilgili soruları cevaplayınız.

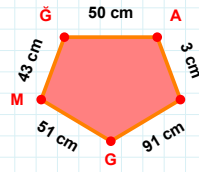
$$|HI| + |IS| = \dots$$

Cevap: ..... br



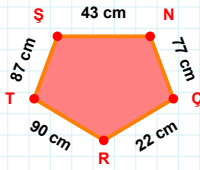
59 br hangi kenara aittir?

- ☐ SÖ kenarı  
☐ BE kenarı  
☐ EO kenarı



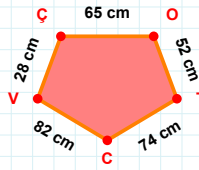
51 cm hangi kenara aittir?

Kenar: .....



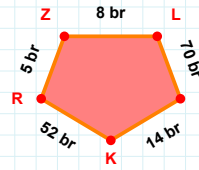
87 cm hangi kenara aittir?

- ☐ RN kenarı  
☐ NÇ kenarı  
☐ RT kenarı



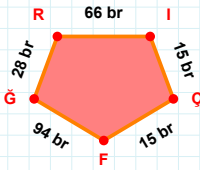
|ÇO| kaç cmdir?

- ☐ 64 cm  
☐ 65 cm  
☐ 66 cm



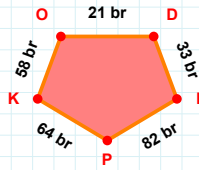
5 br hangi kenara aittir?

Kenar: .....



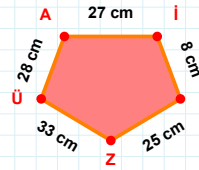
$$|GR| + |İÇ| = \dots$$

Cevap: ..... br



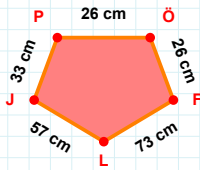
|DL| kaç brdir?

- ☐ 32 br  
☐ 33 br  
☐ 34 br



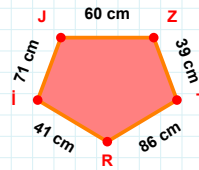
28 cm hangi kenara aittir?

- ☐ İZ kenarı  
☐ ZÜ kenarı  
☐ Üİ kenarı



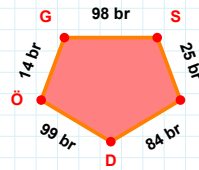
$$|JP| + |FL| = \dots$$

Cevap: ..... cm



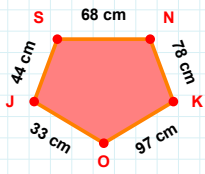
71 cm hangi kenara aittir?

- ☐ ZT kenarı  
☐ İZ kenarı  
☐ İJ kenarı



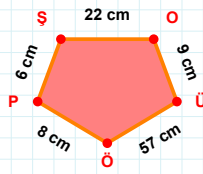
|DÖ| kaç brdir?

- ☐ 98 br  
☐ 99 br  
☐ 100 br

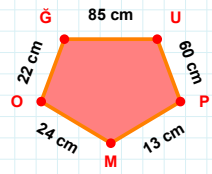
**SORU:** Aşağıdaki geometrik şekillerle ilgili soruları cevaplayınız.

78 cm hangi kenara aittir?

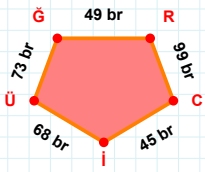
Kenar: .....

 $|ÖP| + |OÜ| = \dots$ 

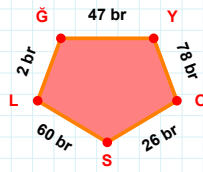
Cevap: ..... cm

 $|MO|$  kaç cm'dir?

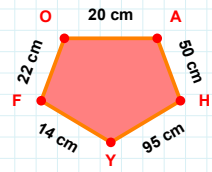
- ☐ 23 cm  
☐ 24 cm  
☐ 25 cm

 $|RC|$  kaç br'dir?

- ☐ 98 br  
☐ 99 br  
☐ 100 br

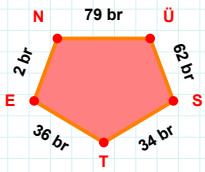
 $|ĞY|$  kaç br'dir?

- ☐ 46 br  
☐ 47 br  
☐ 48 br



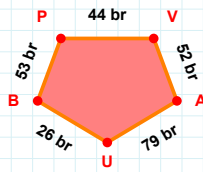
22 cm hangi kenara aittir?

- ☐ FO kenarı  
☐ YF kenarı  
☐ FH kenarı

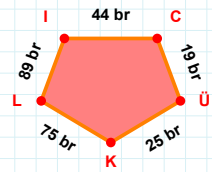


62 br hangi kenara aittir?

Kenar: .....

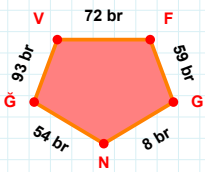
 $|UB| + |VA| = \dots$ 

Cevap: ..... br



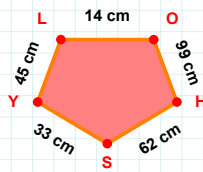
89 br hangi kenara aittir?

Kenar: .....



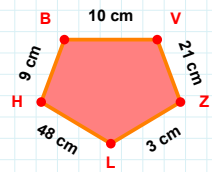
93 br hangi kenara aittir?

- ☐ ĞG kenarı  
☐ NĞ kenarı  
☐ VF kenarı



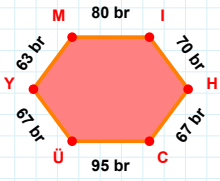
45 cm hangi kenara aittir?

- ☐ HS kenarı  
☐ LS kenarı  
☐ SY kenarı



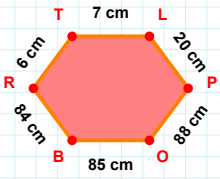
9 cm hangi kenara aittir?

Kenar: .....

**SORU:** Aşağıdaki geometrik şekillerle ilgili soruları cevaplayınız.

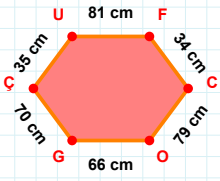
80 br hangi kenara aittir?

Kenar: .....

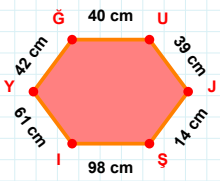


84 cm hangi kenara aittir?

Kenar: .....

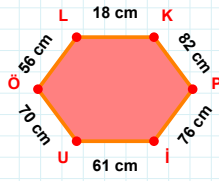
 $|GC| + |FC| = \dots$ 

Cevap: ..... cm



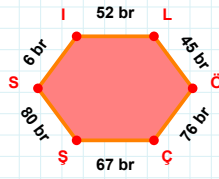
61 cm hangi kenara aittir?

Kenar: .....

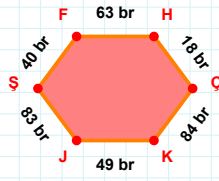


56 cm hangi kenara aittir?

- ☐ ÖL kenarı  
☐ KÖ kenarı  
☐ İU kenarı

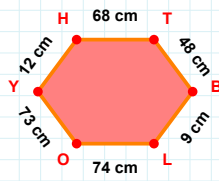
 $|ÖÇ|$  kaç brdir?

- ☐ 75 br  
☐ 76 br  
☐ 77 br

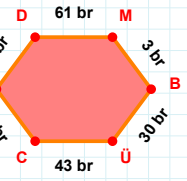


49 br hangi kenara aittir?

Kenar: .....

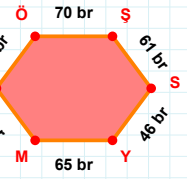
 $|LO| + |OY| = \dots$ 

Cevap: ..... cm



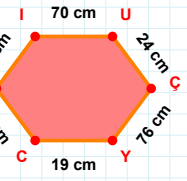
18 br hangi kenara aittir?

- ☐ FD kenarı  
☐ ÜC kenarı  
☐ DÜ kenarı

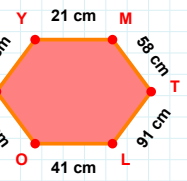


61 br hangi kenara aittir?

Kenar: .....

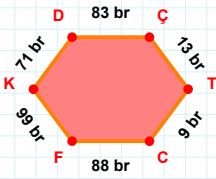
 $|VI| + |IU| = \dots$ 

Cevap: ..... cm

 $|SY|$  kaç cmdir?

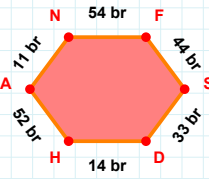
- ☐ 28 cm  
☐ 29 cm  
☐ 30 cm

**SORU:** Aşağıdaki geometrik şekillerle ilgili soruları cevaplayınız.



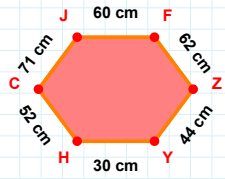
$$|KD| + |DÇ| = \dots$$

Cevap: ..... br



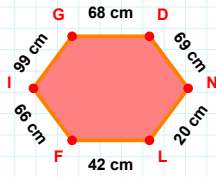
11 br hangi kenara aittir?

- ☐ AN kenarı  
☐ DF kenarı  
☐ FS kenarı



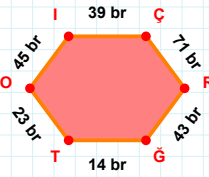
71 cm hangi kenara aittir?

- ☐ YC kenarı  
☐ YH kenarı  
☐ JF kenarı



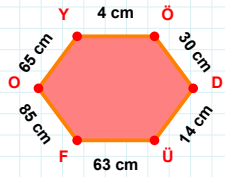
$$|DN| + |GD| = \dots$$

Cevap: ..... cm



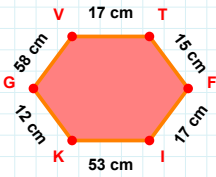
|İÇ| kaç brdir?

- ☐ 38 br  
☐ 39 br  
☐ 40 br



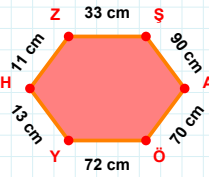
65 cm hangi kenara aittir?

Kenar: .....



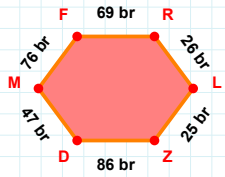
12 cm hangi kenara aittir?

Kenar: .....



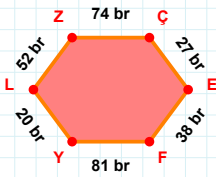
$$|ŞA| + |ZŞ| = \dots$$

Cevap: ..... cm



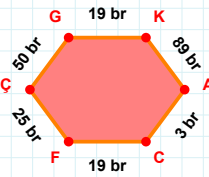
|DM| kaç brdir?

- ☐ 46 br  
☐ 47 br  
☐ 48 br



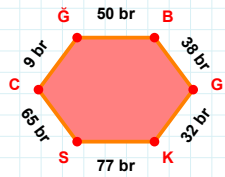
|ÇE| kaç brdir?

- ☐ 26 br  
☐ 27 br  
☐ 28 br



$$|AC| + |FÇ| = \dots$$

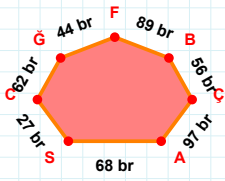
Cevap: ..... br



9 br hangi kenara aittir?

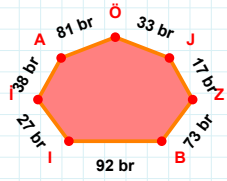
- ☐ ĞS kenarı  
☐ GK kenarı  
☐ ĞB kenarı

**SORU:** Aşağıdaki geometrik şekillerle ilgili soruları cevaplayınız.



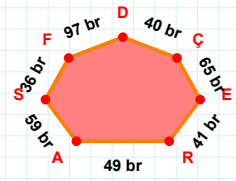
$$|ÇB| + |FĜ| = \dots$$

Cevap: ..... br



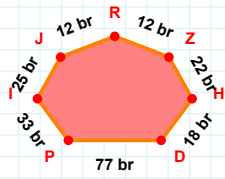
33 br hangi kenara aittir?

- ☐ IB kenarı  
☐ BA kenarı  
☐ ÖA kenarı



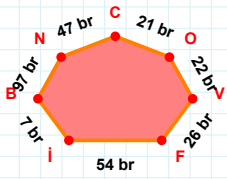
40 br hangi kenara aittir?

- ☐ DF kenarı  
☐ AR kenarı  
☐ SÇ kenarı



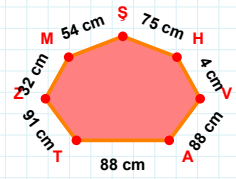
12 br hangi kenara aittir?

- ☐ JI kenarı  
☐ RJ kenarı  
☐ PZ kenarı



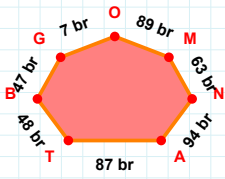
26 br hangi kenara aittir?

Kenar: .....



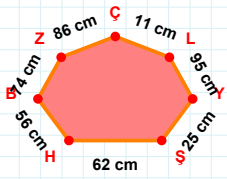
|MZ| kaç cm'dir?

- ☐ 31 cm  
☐ 32 cm  
☐ 33 cm



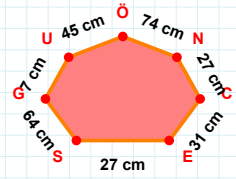
94 br hangi kenara aittir?

Kenar: .....



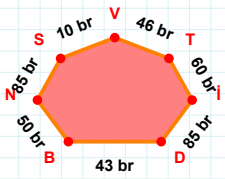
11 cm hangi kenara aittir?

Kenar: .....



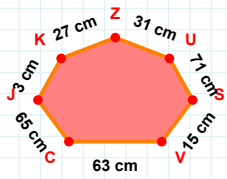
|EC| kaç cm'dir?

- ☐ 30 cm  
☐ 31 cm  
☐ 32 cm



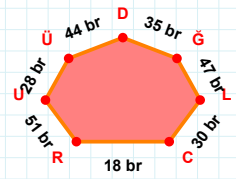
$$|NB| + |BD| = \dots$$

Cevap: ..... br



31 cm hangi kenara aittir?

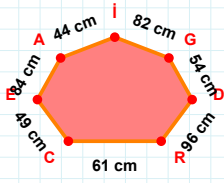
- ☐ SU kenarı  
☐ KJ kenarı  
☐ CS kenarı



|ĜD| kaç br'dir?

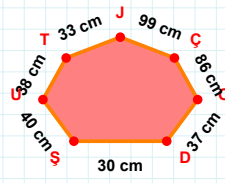
- ☐ 34 br  
☐ 35 br  
☐ 36 br

SORU: Aşağıdaki geometrik şekillerle ilgili soruları cevaplayınız.



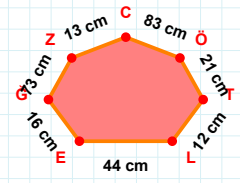
|RD| kaç cmdir?

- ☐ 95 cm  
☐ 96 cm  
☐ 97 cm



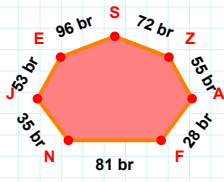
|SD| kaç cmdir?

- ☐ 29 cm  
☐ 30 cm  
☐ 31 cm



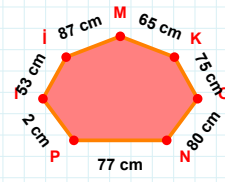
|LT| kaç cmdir?

- ☐ 11 cm  
☐ 12 cm  
☐ 13 cm



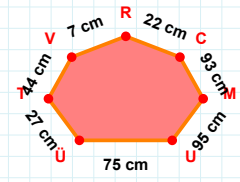
|SE| kaç brdir?

- ☐ 95 br  
☐ 96 br  
☐ 97 br



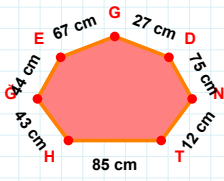
|OK| + |li| = ....

Cevap: ..... cm



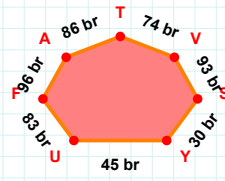
22 cm hangi kenara aittir?

Kenar: .....



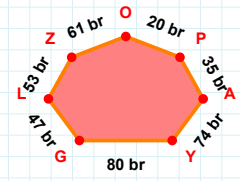
|ND| + |GH| = ....

Cevap: ..... cm



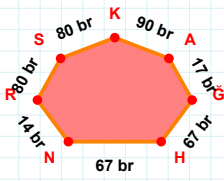
93 br hangi kenara aittir?

Kenar: .....



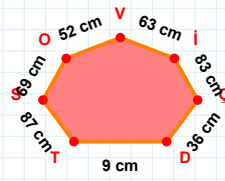
47 br hangi kenara aittir?

Kenar: .....



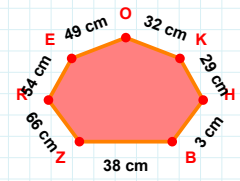
|NH| + |RN| = ....

Cevap: ..... br



63 cm hangi kenara aittir?

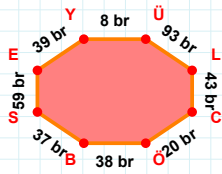
- ☐ VD kenarı  
☐ ÇI kenarı  
☐ OS kenarı



|RZ| + |KO| = ....

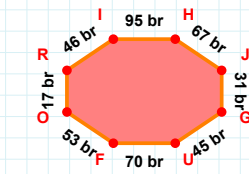
Cevap: ..... cm



**SORU:** Aşağıdaki geometrik şekillerle ilgili soruları cevaplayınız.

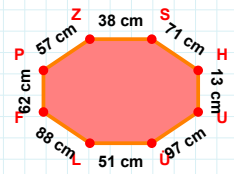
$|EY| + |BS| = \dots$

Cevap: ..... br



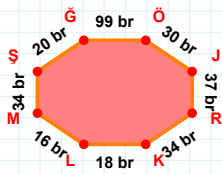
$|GU| + |JG| = \dots$

Cevap: ..... br



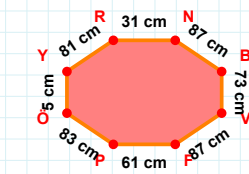
$|HU|$  kaç cm'dir?

- ☐ 12 cm  
☐ 13 cm  
☐ 14 cm



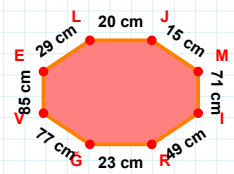
$|RK|$  kaç br'dir?

- ☐ 33 br  
☐ 34 br  
☐ 35 br



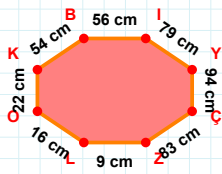
83 cm hangi kenara aittir?

Kenar: .....



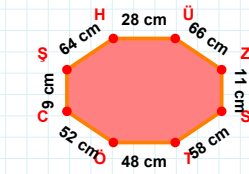
$|VE| + |RG| = \dots$

Cevap: ..... cm



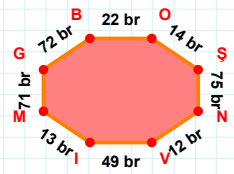
56 cm hangi kenara aittir?

Kenar: .....



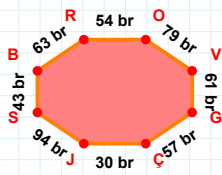
64 cm hangi kenara aittir?

- ☐ ÜS kenarı  
☐ ÜZ kenarı  
☐ CŞ kenarı



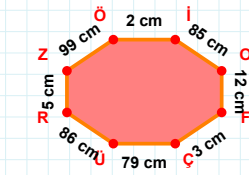
$|IM| + |MG| = \dots$

Cevap: ..... br



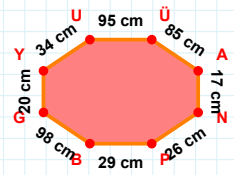
30 br hangi kenara aittir?

Kenar: .....



$|ZÖ|$  kaç cm'dir?

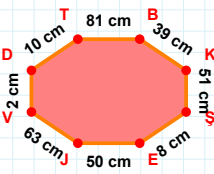
- ☐ 98 cm  
☐ 99 cm  
☐ 100 cm



34 cm hangi kenara aittir?

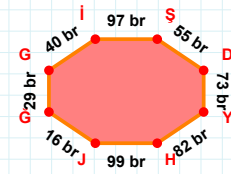
- ☐ BU kenarı  
☐ AN kenarı  
☐ PB kenarı

**SORU:** Aşağıdaki geometrik şekillerle ilgili soruları cevaplayınız.



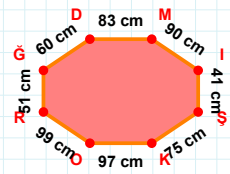
50 cm hangi kenara aittir?

Kenar: .....



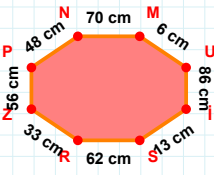
40 br hangi kenara aittir?

- ☐ ŞĞ kenarı  
☐ YH kenarı  
☐ ŞD kenarı



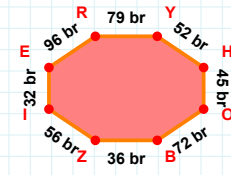
|MI| + |KO| = ....

Cevap: ..... cm



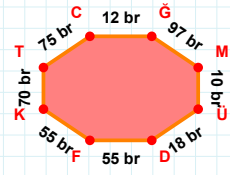
|SR| + |PN| = ....

Cevap: ..... cm



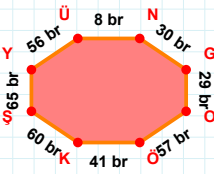
|IE| + |YH| = ....

Cevap: ..... br



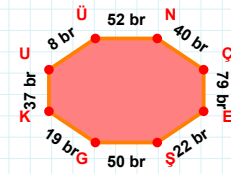
75 br hangi kenara aittir?

- ☐ DF kenarı  
☐ ÜĞ kenarı  
☐ KT kenarı



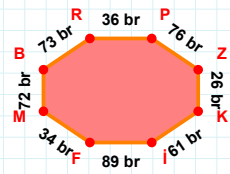
56 br hangi kenara aittir?

- ☐ ŞĞ kenarı  
☐ KŞ kenarı  
☐ YÜ kenarı



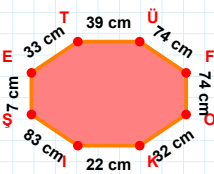
8 br hangi kenara aittir?

Kenar: .....



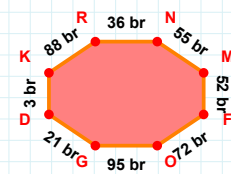
73 br hangi kenara aittir?

Kenar: .....



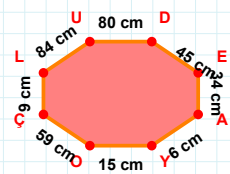
|FO| + |KI| = ....

Cevap: ..... cm



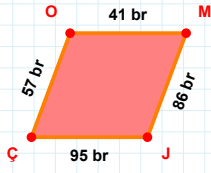
|DK| + |MF| = ....

Cevap: ..... br

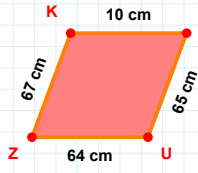


|ÇL| + |EA| = ....

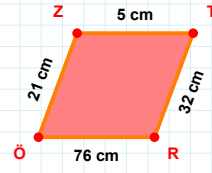
Cevap: ..... cm

**SORU:** Aşağıdaki geometrik şekillerle ilgili soruları cevaplayınız.**|ÇO| kaç brdir?**

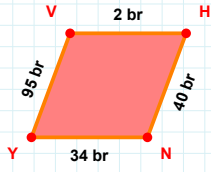
- ☐ 56 br  
☐ 57 br  
☐ 58 br

**67 cm hangi kenara aittir?**

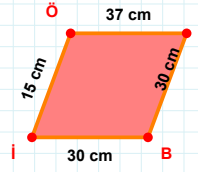
- ☐ YU kenarı  
☐ YZ kenarı  
☐ UZ kenarı

**21 cm hangi kenara aittir?**

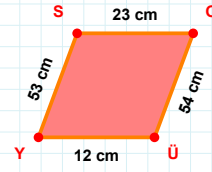
- ☐ TR kenarı  
☐ ÖZ kenarı  
☐ TÖ kenarı

**95 br hangi kenara aittir?**

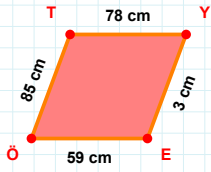
Kenar: .....

**15 cm hangi kenara aittir?**

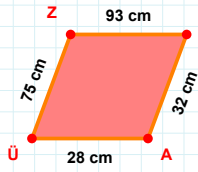
Kenar: .....

**53 cm hangi kenara aittir?**

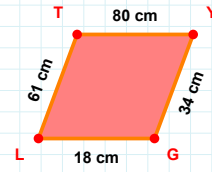
- ☐ YO kenarı  
☐ YS kenarı  
☐ SO kenarı

**|TY| + |EÖ| = ....**

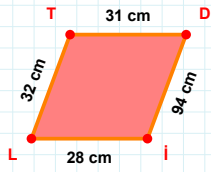
Cevap: ..... cm

**|AÜ| + |ZY| = ....**

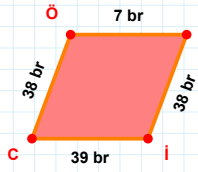
Cevap: ..... cm

**61 cm hangi kenara aittir?**

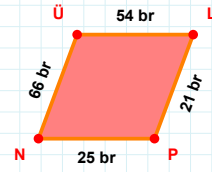
- ☐ TG kenarı  
☐ GL kenarı  
☐ YG kenarı

**32 cm hangi kenara aittir?**

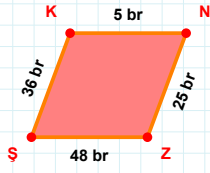
- ☐ İL kenarı  
☐ TD kenarı  
☐ İT kenarı

**|ÖY| kaç brdir?**

- ☐ 6 br  
☐ 7 br  
☐ 8 br

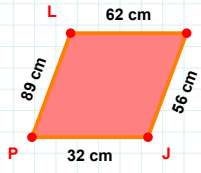
**66 br hangi kenara aittir?**

- ☐ NÜ kenarı  
☐ PN kenarı  
☐ ÜP kenarı

**SORU:** Aşağıdaki geometrik şekillerle ilgili soruları cevaplayınız.

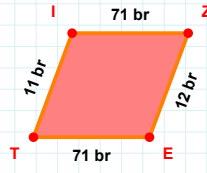
$|NZ| + |KN| = \dots$

Cevap: ..... br



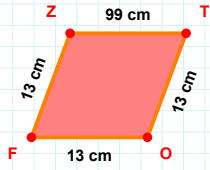
56 cm hangi kenara aittir?

Kenar: .....



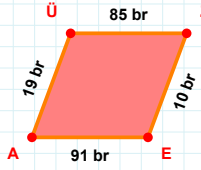
11 br hangi kenara aittir?

- ☐ ET kenarı  
☐ ZT kenarı  
☐ TI kenarı



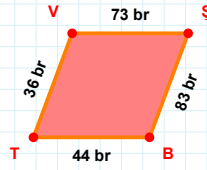
13 cm hangi kenara aittir?

Kenar: .....



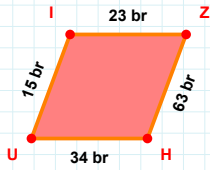
|AÜ| kaç brdir?

- ☐ 18 br  
☐ 19 br  
☐ 20 br



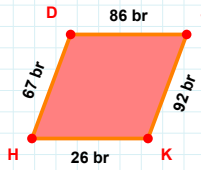
73 br hangi kenara aittir?

Kenar: .....



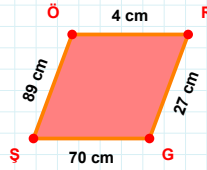
$|HU| + |IZ| = \dots$

Cevap: ..... br



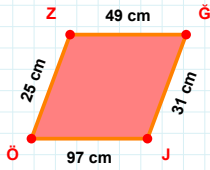
|JK| kaç brdir?

- ☐ 91 br  
☐ 92 br  
☐ 93 br



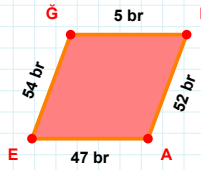
|GS| kaç cmdir?

- ☐ 69 cm  
☐ 70 cm  
☐ 71 cm



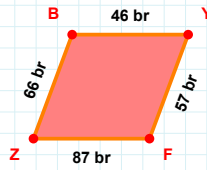
97 cm hangi kenara aittir?

Kenar: .....



$|GK| + |KA| = \dots$

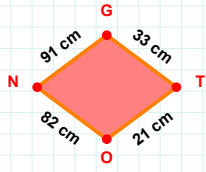
Cevap: ..... br



|BY| kaç brdir?

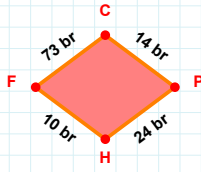
- ☐ 45 br  
☐ 46 br  
☐ 47 br

**SORU:** Aşağıdaki geometrik şekillerle ilgili soruları cevaplayınız.



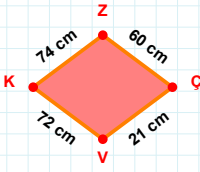
21 cm hangi kenara aittir?

Kenar: .....



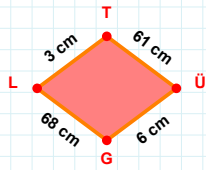
|CP| kaç brdir?

- ☐ 13 br  
☐ 14 br  
☐ 15 br



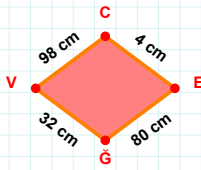
|KZ| + |ZÇ| = ....

Cevap: ..... cm



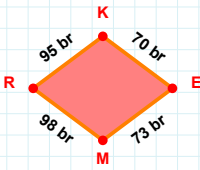
|ÜG| kaç cmdir?

- ☐ 5 cm  
☐ 6 cm  
☐ 7 cm



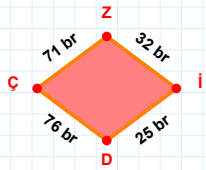
|EG| kaç cmdir?

- ☐ 79 cm  
☐ 80 cm  
☐ 81 cm



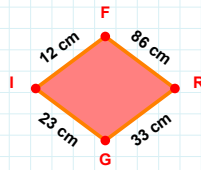
95 br hangi kenara aittir?

- ☐ RK kenarı  
☐ MR kenarı  
☐ MK kenarı



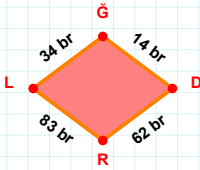
32 br hangi kenara aittir?

Kenar: .....



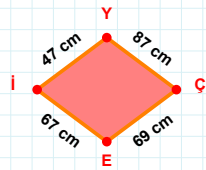
|RG| + |GI| = ....

Cevap: ..... cm



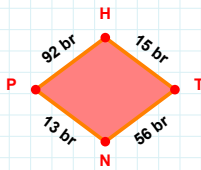
34 br hangi kenara aittir?

- ☐ LĞ kenarı  
☐ ĞR kenarı  
☐ DR kenarı



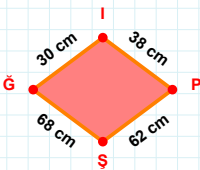
|İY| kaç cmdir?

- ☐ 46 cm  
☐ 47 cm  
☐ 48 cm



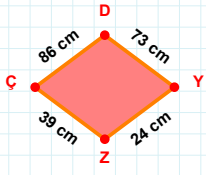
|NP| + |HT| = ....

Cevap: ..... br

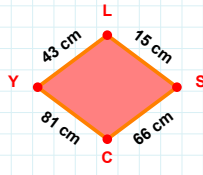


30 cm hangi kenara aittir?

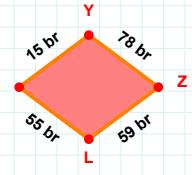
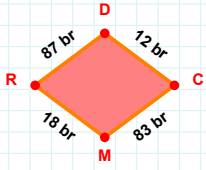
Kenar: .....

**SORU:** Aşağıdaki geometrik şekillerle ilgili soruları cevaplayınız.**|ZÇ| kaç cm'dir?**

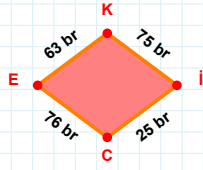
- ☐ 38 cm  
☐ 39 cm  
☐ 40 cm

**43 cm hangi kenara aittir?**

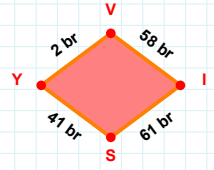
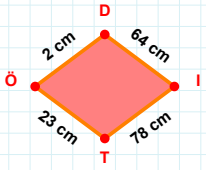
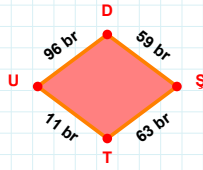
- ☐ SY kenarı  
☐ YL kenarı  
☐ CY kenarı

**|HY| + |YZ| = ....****Cevap: ..... br****87 br hangi kenara aittir?**

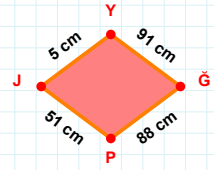
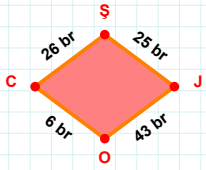
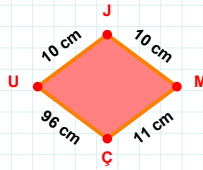
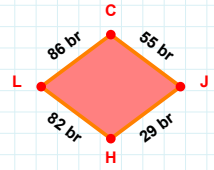
- ☐ DC kenarı  
☐ CR kenarı  
☐ CM kenarı

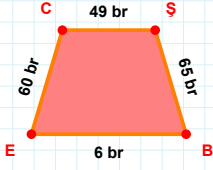
**63 br hangi kenara aittir?**

- ☐ İE kenarı  
☐ KI kenarı  
☐ EK kenarı

**|SY| + |VI| = ....****Cevap: ..... br****|ÖD| + |TÖ| = ....****Cevap: ..... cm****96 br hangi kenara aittir?**

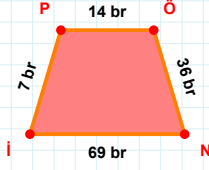
- ☐ UŞ kenarı  
☐ UD kenarı  
☐ DŞ kenarı

**|YĞ| + |JY| = ....****Cevap: ..... cm****|CŞ| + |OC| = ....****Cevap: ..... br****|MÇ| + |UJ| = ....****Cevap: ..... cm****|CJ| + |JH| = ....****Cevap: ..... br**

**SORU:** Aşağıdaki geometrik şekillerle ilgili soruları cevaplayınız.

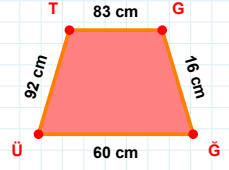
65 br hangi kenara aittir?

Kenar: .....



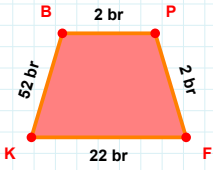
14 br hangi kenara aittir?

Kenar: .....



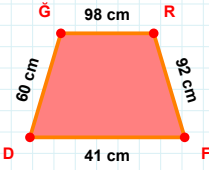
|GĞ| kaç cmdir?

- ☐ 15 cm  
☐ 16 cm  
☐ 17 cm



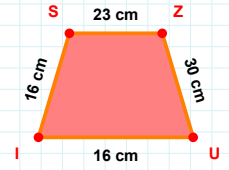
|FK| + |KB| = ....

Cevap: ..... br



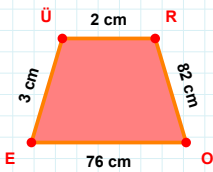
|ĞR| kaç cmdir?

- ☐ 97 cm  
☐ 98 cm  
☐ 99 cm



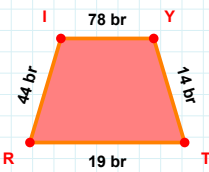
|UI| kaç cmdir?

- ☐ 15 cm  
☐ 16 cm  
☐ 17 cm



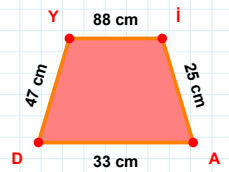
82 cm hangi kenara aittir?

Kenar: .....



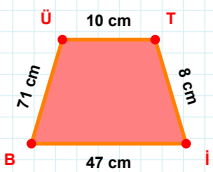
|YT| kaç brdir?

- ☐ 13 br  
☐ 14 br  
☐ 15 br



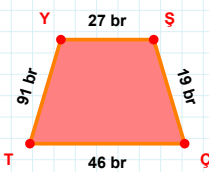
47 cm hangi kenara aittir?

- ☐ DI kenarı  
☐ AD kenarı  
☐ DY kenarı



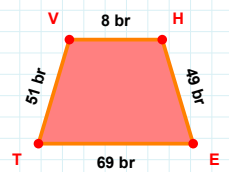
|BÜ| kaç cmdir?

- ☐ 70 cm  
☐ 71 cm  
☐ 72 cm



46 br hangi kenara aittir?

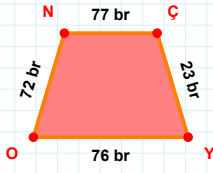
Kenar: .....



49 br hangi kenara aittir?

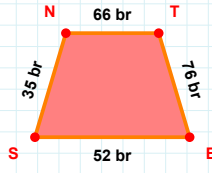
Kenar: .....

SORU: Aşağıdaki geometrik şekillerle ilgili soruları cevaplayınız.



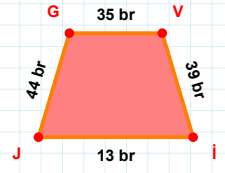
|ÇY| kaç brdir?

- ☐ 22 br  
☐ 23 br  
☐ 24 br



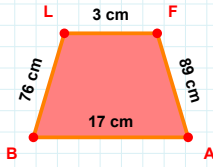
35 br hangi kenara aittir?

- ☐ NT kenarı  
☐ TS kenarı  
☐ SN kenarı



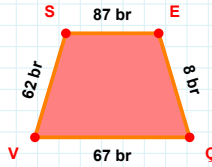
44 br hangi kenara aittir?

- ☐ JG kenarı  
☐ Vİ kenarı  
☐ Gİ kenarı



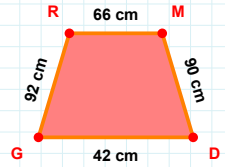
|FA| + |BL| = ....

Cevap: ..... cm



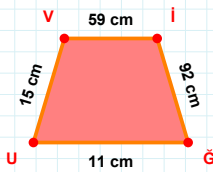
67 br hangi kenara aittir?

Kenar: .....



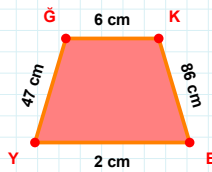
42 cm hangi kenara aittir?

Kenar: .....



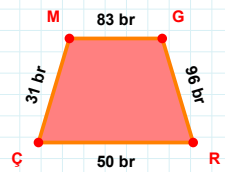
92 cm hangi kenara aittir?

Kenar: .....



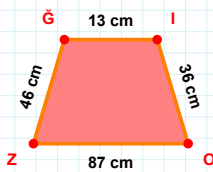
47 cm hangi kenara aittir?

- ☐ KE kenarı  
☐ YK kenarı  
☐ ĞK kenarı



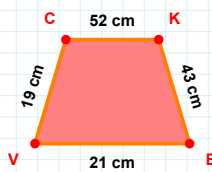
|MG| + |ÇM| = ....

Cevap: ..... br



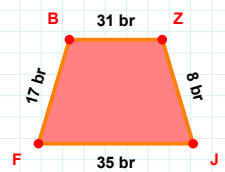
|ZĞ| kaç cmdir?

- ☐ 45 cm  
☐ 46 cm  
☐ 47 cm



19 cm hangi kenara aittir?

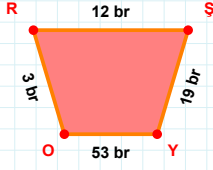
Kenar: .....



|JF| kaç brdir?

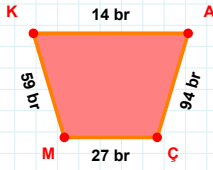
- ☐ 34 br  
☐ 35 br  
☐ 36 br



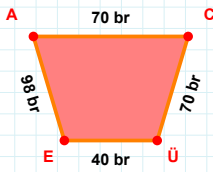
**SORU:** Aşağıdaki geometrik şekillerle ilgili soruları cevaplayınız.

53 br hangi kenara aittir?

Kenar: .....

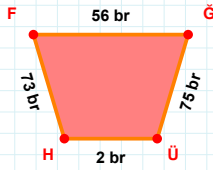
 $|ÇM| + |MK| = \dots$ 

Cevap: ..... br

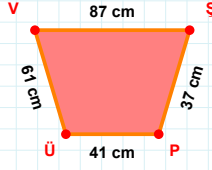


98 br hangi kenara aittir?

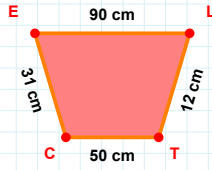
- ☐ CÜ kenarı  
☐ CE kenarı  
☐ ÜE kenarı

 $|ÜH|$  kaç brdir?

- ☐ 1 br  
☐ 2 br  
☐ 3 br

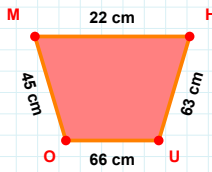
 $|ŞP| + |PÜ| = \dots$ 

Cevap: ..... cm

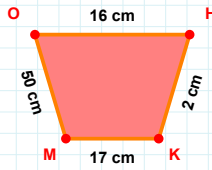


31 cm hangi kenara aittir?

- ☐ EL kenarı  
☐ CE kenarı  
☐ TE kenarı

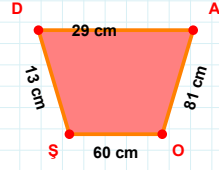
 $|HU|$  kaç cmdir?

- ☐ 62 cm  
☐ 63 cm  
☐ 64 cm

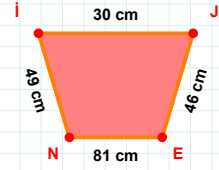


50 cm hangi kenara aittir?

- ☐ OH kenarı  
☐ KO kenarı  
☐ HK kenarı

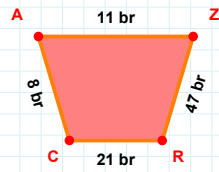
 $|DA|$  kaç cmdir?

- ☐ 28 cm  
☐ 29 cm  
☐ 30 cm



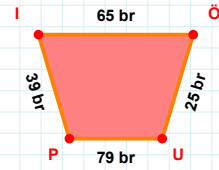
49 cm hangi kenara aittir?

- ☐ Eİ kenarı  
☐ Nİ kenarı  
☐ EN kenarı



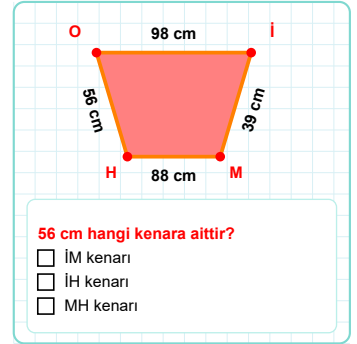
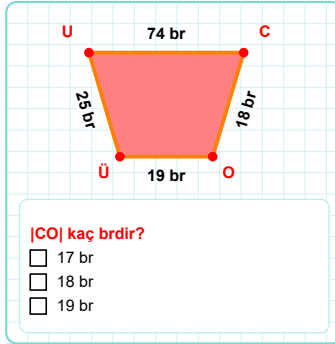
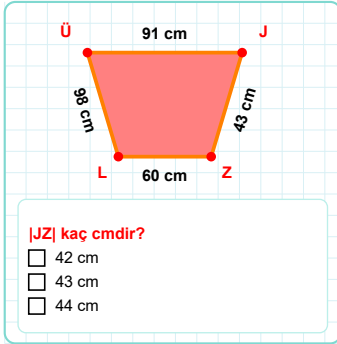
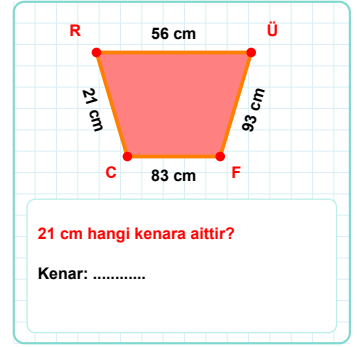
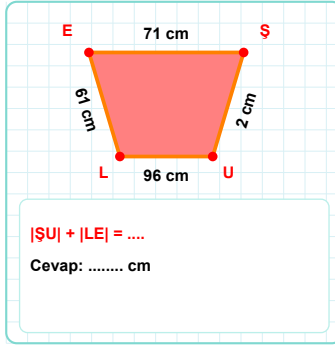
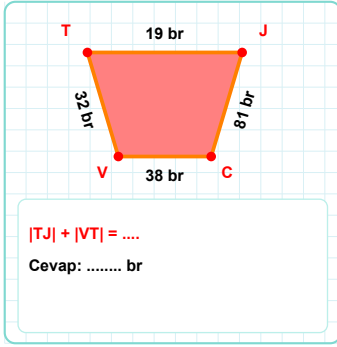
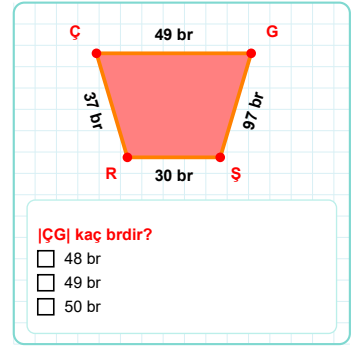
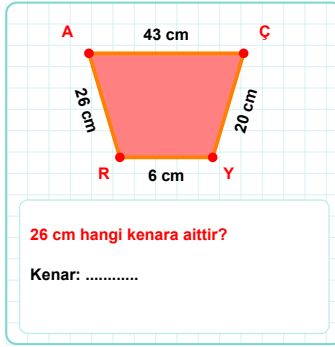
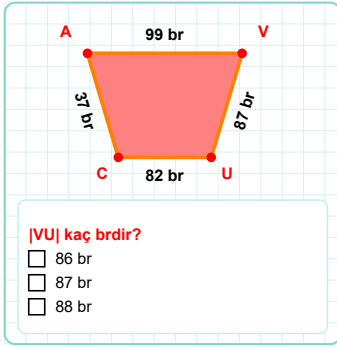
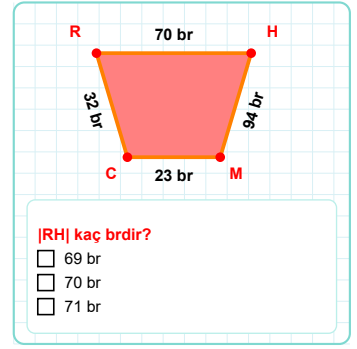
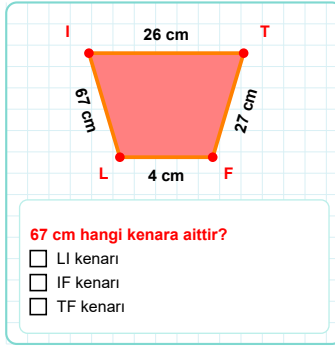
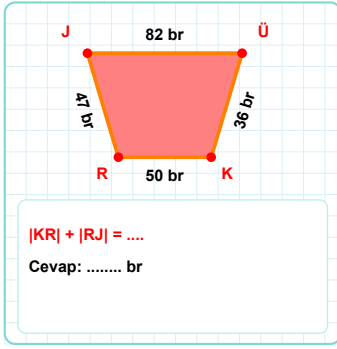
8 br hangi kenara aittir?

- ☐ ZC kenarı  
☐ AZ kenarı  
☐ ZR kenarı

 $|ÖU|$  kaç brdir?

- ☐ 24 br  
☐ 25 br  
☐ 26 br

**SORU:** Aşağıdaki geometrik şekillerle ilgili soruları cevaplayınız.



SÜREÇ ODAKLI DEĞERLENDİRME ÖLÇEĞİ			
Geliştirilmeli (0-109)	İyi (110-187)	Çok İyi (188-265)	Mükemmel (266-312)
<input type="checkbox"/>	<input type="checkbox"/>	<input type="checkbox"/>	<input type="checkbox"/>

Hazırlayan: .....

Bu bölüme sınıfınızın ilgili kazanıma yönelik genel durumuna ilişkin gözlem ve izlenimlerinizi, öğrencilerinizin bu kazanımla ilgili öğrenme eksikliklerini ve bu eksikliklerin giderilmesi amacıyla yaptığınız/yapmayı planladığınız faaliyetleri not edebilirsiniz.

No	Adı - Soyadı	Toplam Puan	Değerlendirme
1			
2			
3			
4			
5			
6			
7			
8			
9			
10			
11			
12			
13			
14			
15			
16			
17			
18			
19			
20			
21			
22			
23			
24			
25			
26			
27			
28			
29			
30			
31			
32			
33			
34			
35			

Hazırlayan: .....