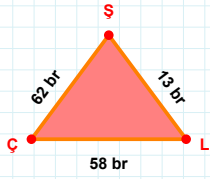
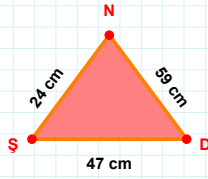


SORU: Aşağıdaki geometrik şekillerle ilgili soruları cevaplayınız.

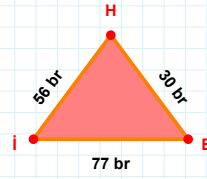
13 br hangi kenara aittir?

- ☐ ŞÇ kenarı
☐ XY kenarı
☐ LŞ kenarı



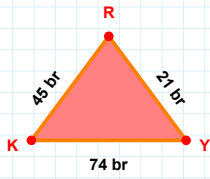
59 cm hangi kenara aittir?

Kenar:



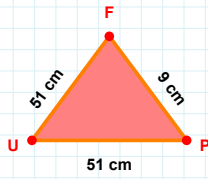
30 br hangi kenara aittir?

- ☐ XY kenarı
☐ EH kenarı
☐ İE kenarı

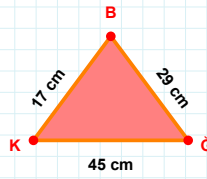


74 br hangi kenara aittir?

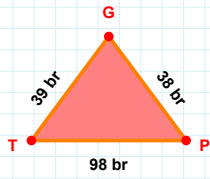
Kenar:

 $|UP| + |FU| = \dots$

Cevap: cm

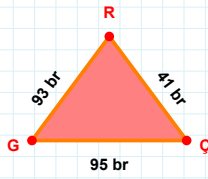
 $|BK| + |GB| = \dots$

Cevap: cm

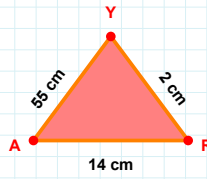


39 br hangi kenara aittir?

Kenar:

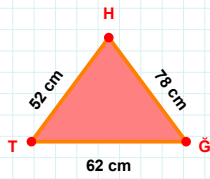
 $|GC|$ kaç brdir?

- ☐ 94 br
☐ 95 br
☐ 96 br

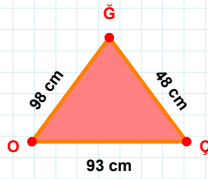


2 cm hangi kenara aittir?

Kenar:

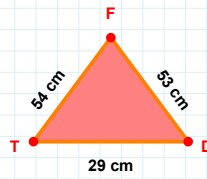
 $|HT| + |GH| = \dots$

Cevap: cm



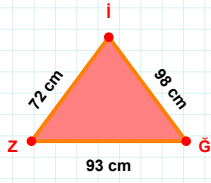
48 cm hangi kenara aittir?

- ☐ XY kenarı
☐ OÇ kenarı
☐ GO kenarı

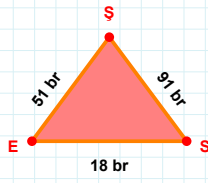


29 cm hangi kenara aittir?

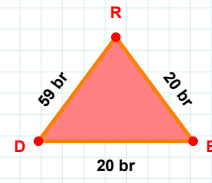
Kenar:

SORU: Aşağıdaki geometrik şekillerle ilgili soruları cevaplayınız.**|ZĞ| kaç cmdir?**

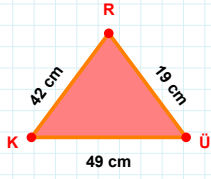
- ☐ 92 cm
☐ 93 cm
☐ 94 cm

**91 br hangi kenara aittir?**

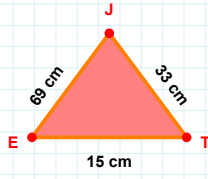
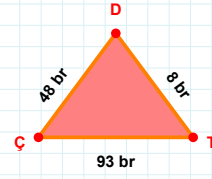
- ☐ SŞ kenarı
☐ ES kenarı
☐ XY kenarı

**20 br hangi kenara aittir?**

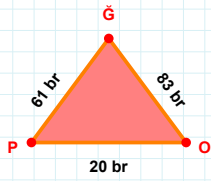
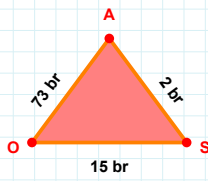
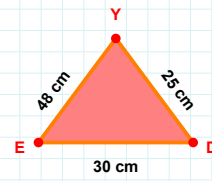
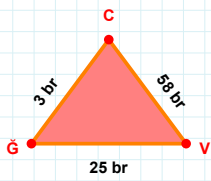
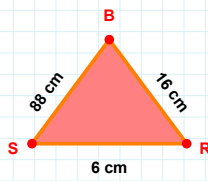
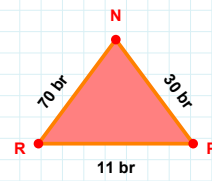
- ☐ XY kenarı
☐ DB kenarı
☐ BR kenarı

**|RK| kaç cmdir?**

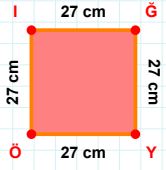
- ☐ 41 cm
☐ 42 cm
☐ 43 cm

**|JE| + |ET| =****Cevap: cm****8 br hangi kenara aittir?**

- ☐ ÇT kenarı
☐ TD kenarı
☐ XY kenarı

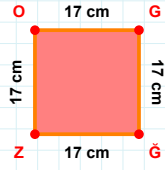
**83 br hangi kenara aittir?****Kenar:****|OS| + |SA| =****Cevap: br****|ED| + |YE| =****Cevap: cm****|ĞV| + |CĞ| =****Cevap: br****88 cm hangi kenara aittir?****Kenar:****30 br hangi kenara aittir?**

- ☐ PN kenarı
☐ NR kenarı
☐ XY kenarı

SORU: Aşağıdaki geometrik şekillerle ilgili soruları cevaplayınız.

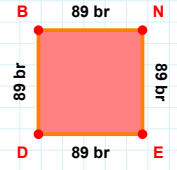
27 cm hangi kenara aittir?

Kenar:



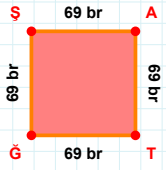
17 cm hangi kenara aittir?

Kenar:



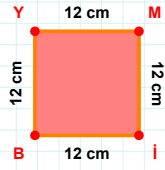
|NE| kaç brdir?

- ☐ 88 br
☐ 89 br
☐ 90 br



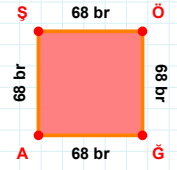
|ĞŞ| + |ŞA| =

Cevap: br



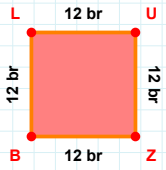
12 cm hangi kenara aittir?

Kenar:



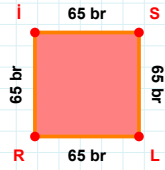
|ŞÖ| + |ĞA| =

Cevap: br



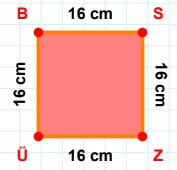
12 br hangi kenara aittir?

- ☐ BL kenarı
☐ ZL kenarı
☐ LU kenarı



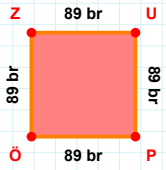
|LR| kaç brdir?

- ☐ 64 br
☐ 65 br
☐ 66 br



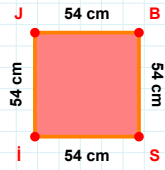
16 cm hangi kenara aittir?

Kenar:



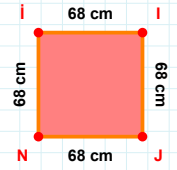
89 br hangi kenara aittir?

- ☐ ÖU kenarı
☐ ZU kenarı
☐ UP kenarı



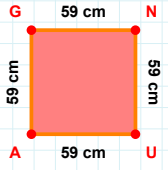
|İJ| kaç cmdir?

- ☐ 53 cm
☐ 54 cm
☐ 55 cm



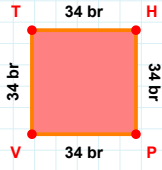
68 cm hangi kenara aittir?

- ☐ İN kenarı
☐ Nİ kenarı
☐ İİ kenarı

SORU: Aşağıdaki geometrik şekillerle ilgili soruları cevaplayınız.

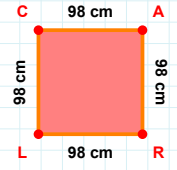
|GN| kaç cm'dir?

- ☐ 58 cm
☐ 59 cm
☐ 60 cm



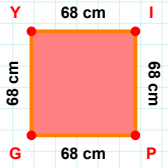
|VT| + |TH| =

Cevap: br



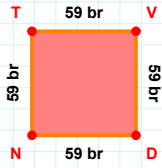
98 cm hangi kenara aittir?

- ☐ LA kenarı
☐ CA kenarı
☐ LC kenarı



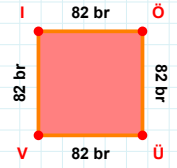
|IP| kaç cm'dir?

- ☐ 67 cm
☐ 68 cm
☐ 69 cm



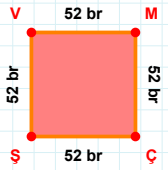
59 br hangi kenara aittir?

- ☐ NT kenarı
☐ DN kenarı
☐ NV kenarı



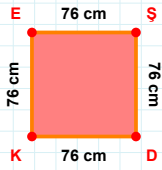
82 br hangi kenara aittir?

Kenar:



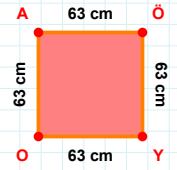
|ÇŞ| kaç br'dir?

- ☐ 51 br
☐ 52 br
☐ 53 br



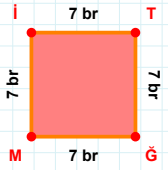
76 cm hangi kenara aittir?

Kenar:



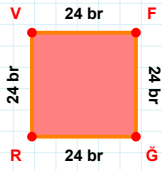
63 cm hangi kenara aittir?

- ☐ ÖY kenarı
☐ YO kenarı
☐ AY kenarı



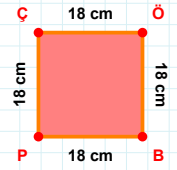
7 br hangi kenara aittir?

Kenar:



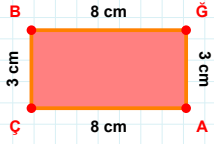
24 br hangi kenara aittir?

Kenar:



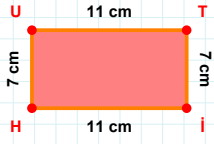
18 cm hangi kenara aittir?

Kenar:

SORU: Aşağıdaki geometrik şekillerle ilgili soruları cevaplayınız.

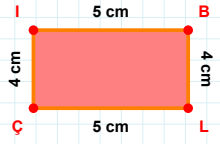
|ÇB| kaç cm'dir?

- ☐ 2 cm
☐ 3 cm
☐ 4 cm



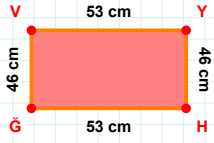
7 cm hangi kenara aittir?

Kenar:



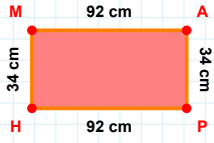
5 cm hangi kenara aittir?

Kenar:



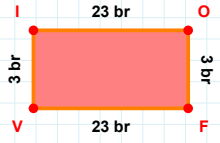
46 cm hangi kenara aittir?

- ☐ YH kenarı
☐ VY kenarı
☐ GY kenarı



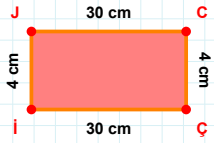
34 cm hangi kenara aittir?

- ☐ MP kenarı
☐ PH kenarı
☐ HM kenarı



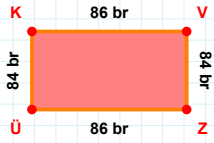
3 br hangi kenara aittir?

- ☐ XY kenarı
☐ OF kenarı
☐ VI kenarı



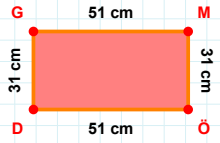
|JC| + |İJ| =

Cevap: cm



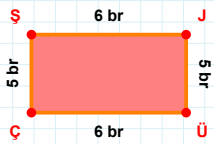
|KV| + |ZÜ| =

Cevap: br



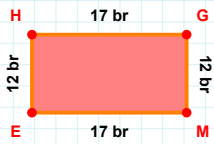
31 cm hangi kenara aittir?

- ☐ GM kenarı
☐ GÖ kenarı
☐ DG kenarı



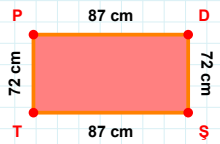
6 br hangi kenara aittir?

Kenar:



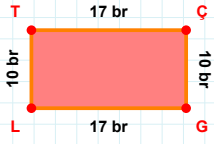
|HG| + |ME| =

Cevap: br

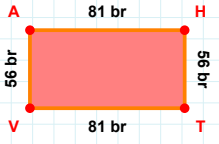
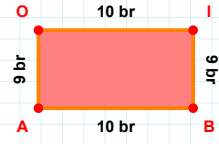


72 cm hangi kenara aittir?

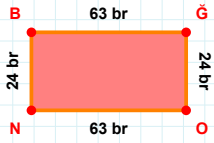
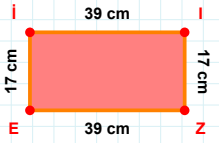
Kenar:

SORU: Aşağıdaki geometrik şekillerle ilgili soruları cevaplayınız.**|LT| kaç brdir?**

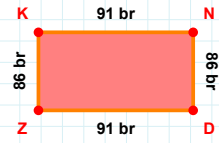
- ☐ 9 br
☐ 10 br
☐ 11 br

**|VA| + |AH| =****Cevap:** br**|OI| kaç brdir?**

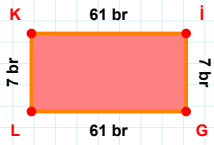
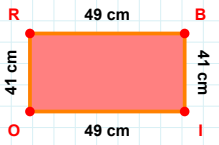
- ☐ 9 br
☐ 10 br
☐ 11 br

**24 br hangi kenara aittir?****Kenar:****17 cm hangi kenara aittir?**

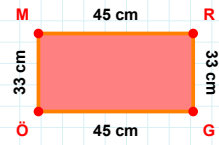
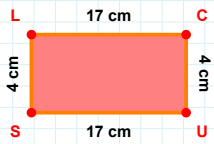
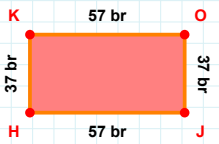
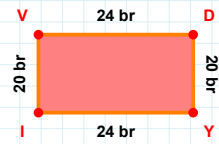
- ☐ Zİ kenarı
☐ İZ kenarı
☐ Eİ kenarı

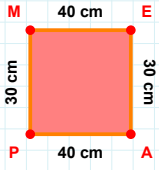
**86 br hangi kenara aittir?**

- ☐ DZ kenarı
☐ ZK kenarı
☐ ZN kenarı

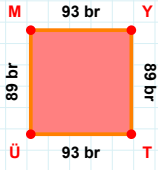
**|GL| + |LK| =****Cevap:** br**41 cm hangi kenara aittir?**

- ☐ IO kenarı
☐ Bİ kenarı
☐ BO kenarı

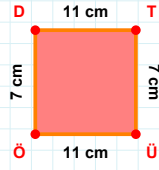
**45 cm hangi kenara aittir?****Kenar:****4 cm hangi kenara aittir?****Kenar:****57 br hangi kenara aittir?****Kenar:****24 br hangi kenara aittir?****Kenar:**

SORU: Aşağıdaki geometrik şekillerle ilgili soruları cevaplayınız.**|AP| kaç cm'dir?**

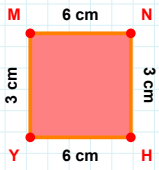
- ☐ 39 cm
☐ 40 cm
☐ 41 cm

**|YT| kaç br'dir?**

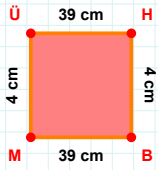
- ☐ 88 br
☐ 89 br
☐ 90 br

**11 cm hangi kenara aittir?**

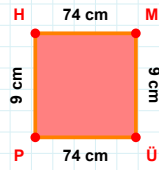
Kenar:

**|HY| + |MN| =**

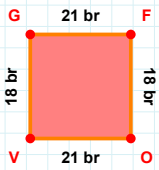
Cevap: cm

**4 cm hangi kenara aittir?**

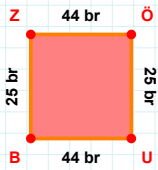
- ☐ ÜH kenarı
☐ MÜ kenarı
☐ ÜB kenarı

**|ÜP| kaç cm'dir?**

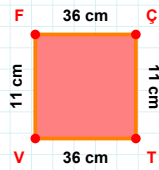
- ☐ 73 cm
☐ 74 cm
☐ 75 cm

**|FO| kaç br'dir?**

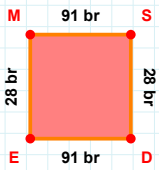
- ☐ 17 br
☐ 18 br
☐ 19 br

**25 br hangi kenara aittir?**

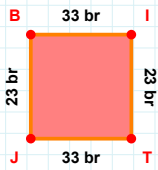
- ☐ UB kenarı
☐ BZ kenarı
☐ ZU kenarı

**11 cm hangi kenara aittir?**

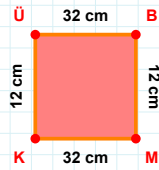
Kenar:

**91 br hangi kenara aittir?**

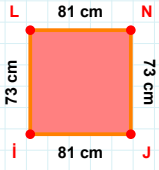
Kenar:

**|JB| kaç br'dir?**

- ☐ 22 br
☐ 23 br
☐ 24 br

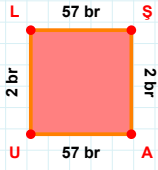
**|BM| + |MK| =**

Cevap: cm

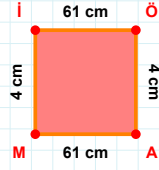
SORU: Aşağıdaki geometrik şekillerle ilgili soruları cevaplayınız.

81 cm hangi kenara aittir?

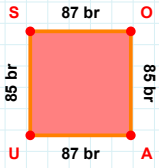
Kenar:

 $|UL| + |AU| = \dots$

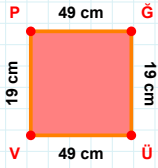
Cevap: br

 $|AM|$ kaç cm'dir?

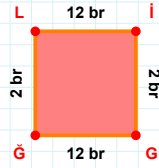
- ☐ 60 cm
☐ 61 cm
☐ 62 cm

 $|OA| + |SO| = \dots$

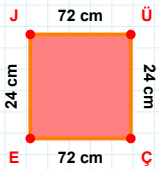
Cevap: br

 $|ÜV| + |VP| = \dots$

Cevap: cm

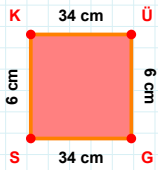
 $|İG|$ kaç br'dir?

- ☐ 1 br
☐ 2 br
☐ 3 br



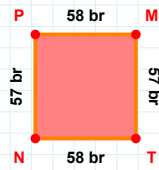
24 cm hangi kenara aittir?

- ☐ ÜÇ kenarı
☐ JÇ kenarı
☐ EJ kenarı



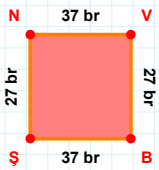
34 cm hangi kenara aittir?

Kenar:



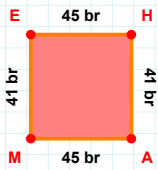
57 br hangi kenara aittir?

- ☐ PT kenarı
☐ TN kenarı
☐ MT kenarı

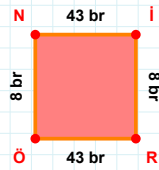


27 br hangi kenara aittir?

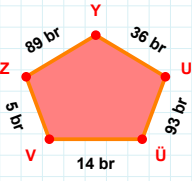
- ☐ ŞV kenarı
☐ BŞ kenarı
☐ ŞN kenarı

 $|ME|$ kaç br'dir?

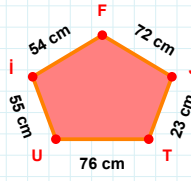
- ☐ 40 br
☐ 41 br
☐ 42 br

 $|RÖ| + |ÖN| = \dots$

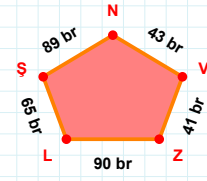
Cevap: br

SORU: Aşağıdaki geometrik şekillerle ilgili soruları cevaplayınız.**|UY| kaç brdir?**

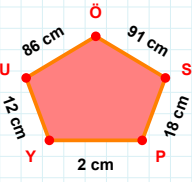
- ☐ 35 br
☐ 36 br
☐ 37 br

**23 cm hangi kenara aittir?**

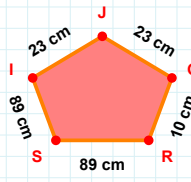
Kenar:

**89 br hangi kenara aittir?**

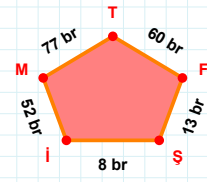
Kenar:

**|UY| kaç cmdir?**

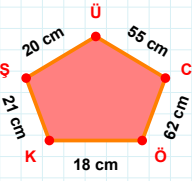
- ☐ 11 cm
☐ 12 cm
☐ 13 cm

**|IS| + |JI| =**

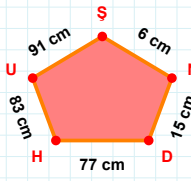
Cevap: cm

**|SF| + |İS| =**

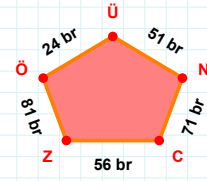
Cevap: br

**20 cm hangi kenara aittir?**

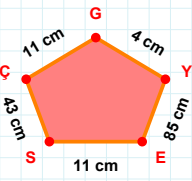
Kenar:

**|UH| + |HD| =**

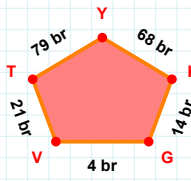
Cevap: cm

**|ÜÖ| + |CN| =**

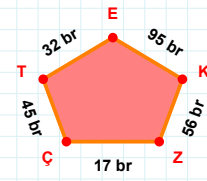
Cevap: br

**|SE| kaç cmdir?**

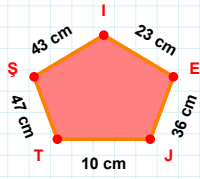
- ☐ 10 cm
☐ 11 cm
☐ 12 cm

**14 br hangi kenara aittir?**

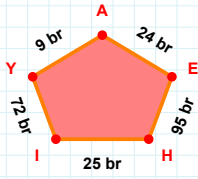
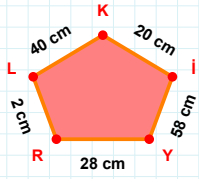
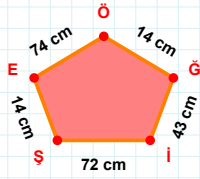
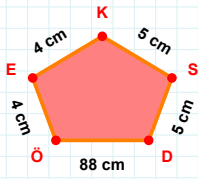
Kenar:

**95 br hangi kenara aittir?**

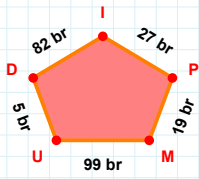
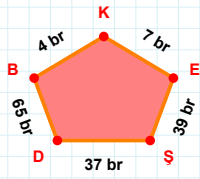
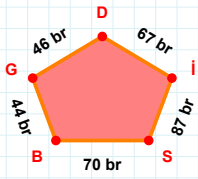
Kenar:

SORU: Aşağıdaki geometrik şekillerle ilgili soruları cevaplayınız.**|ITJ| kaç cmdir?**

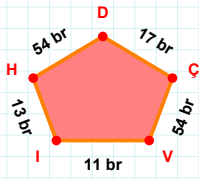
- ☐ 9 cm
☐ 10 cm
☐ 11 cm

**|IH| + |HE| =****Cevap:** br**20 cm hangi kenara aittir?****Kenar:****14 cm hangi kenara aittir?****Kenar:****|EÖ| kaç cmdir?**

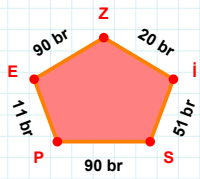
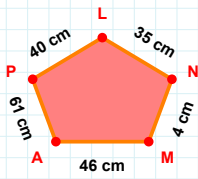
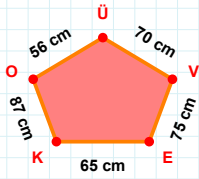
- ☐ 3 cm
☐ 4 cm
☐ 5 cm

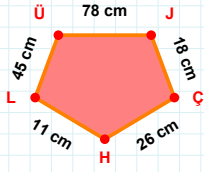
**|DU| + |ID| =****Cevap:** br**|DŞ| + |KB| =****Cevap:** br**|SI| kaç brdir?**

- ☐ 86 br
☐ 87 br
☐ 88 br

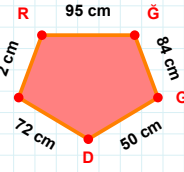
**17 br hangi kenara aittir?**

- ☐ DH kenarı
☐ ÇD kenarı
☐ DI kenarı

**90 br hangi kenara aittir?****Kenar:****46 cm hangi kenara aittir?****Kenar:****|KE| + |EV| =****Cevap:** cm

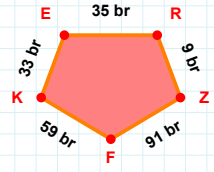
SORU: Aşağıdaki geometrik şekillerle ilgili soruları cevaplayınız. $|JÇ| + |ÇH| = \dots$

Cevap: cm

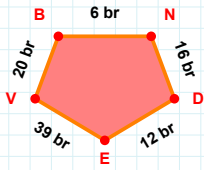


2 cm hangi kenara aittir?

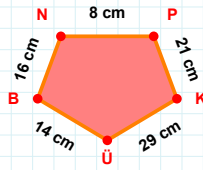
- ☐ İG kenarı
☐ Dİ kenarı
☐ RĞ kenarı

 $|FK|$ kaç brdir?

- ☐ 58 br
☐ 59 br
☐ 60 br

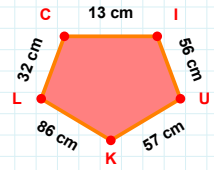
 $|ND|$ kaç brdir?

- ☐ 15 br
☐ 16 br
☐ 17 br



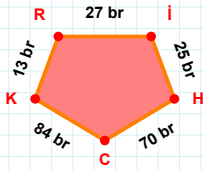
16 cm hangi kenara aittir?

- ☐ NP kenarı
☐ KN kenarı
☐ BN kenarı



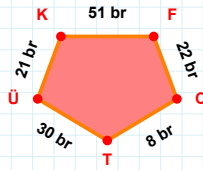
86 cm hangi kenara aittir?

Kenar:

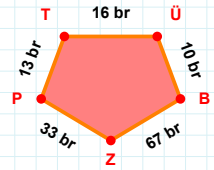


13 br hangi kenara aittir?

Kenar:

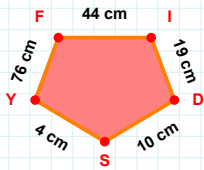
 $|ÜK| + |CT| = \dots$

Cevap: br



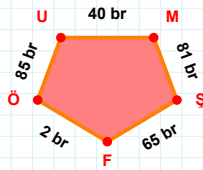
13 br hangi kenara aittir?

- ☐ PT kenarı
☐ ZT kenarı
☐ ÜB kenarı



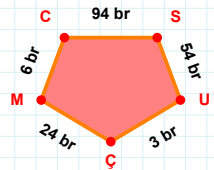
10 cm hangi kenara aittir?

Kenar:



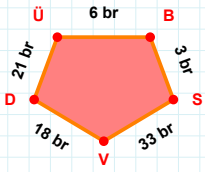
81 br hangi kenara aittir?

Kenar:

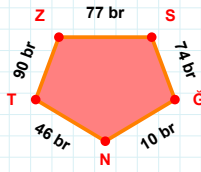


6 br hangi kenara aittir?

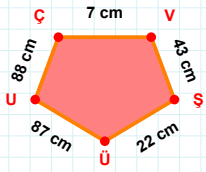
Kenar:

SORU: Aşağıdaki geometrik şekillerle ilgili soruları cevaplayınız.**|ÜB| kaç brdir?**

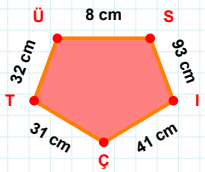
- ☐ 5 br
☐ 6 br
☐ 7 br

**|ZS| kaç brdir?**

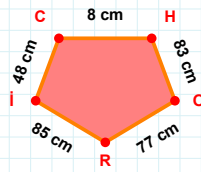
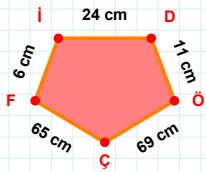
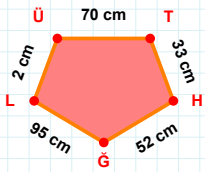
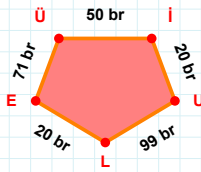
- ☐ 76 br
☐ 77 br
☐ 78 br

**88 cm hangi kenara aittir?**

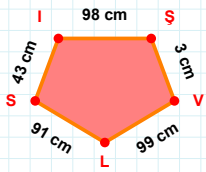
- ☐ ŞÜ kenarı
☐ VÜ kenarı
☐ UÇ kenarı

**32 cm hangi kenara aittir?**

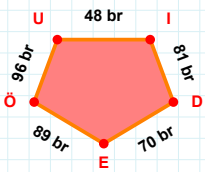
- ☐ ÇT kenarı
☐ TI kenarı
☐ IÇ kenarı

**|HO| + |OR| =****Cevap: cm****|ÖÇ| + |ÇF| =****Cevap: cm****|TH| + |HG| =****Cevap: cm****|Üİ| kaç brdir?**

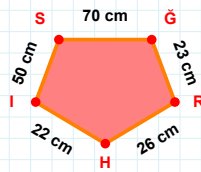
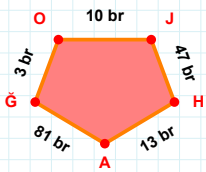
- ☐ 49 br
☐ 50 br
☐ 51 br

**|VL| kaç cmdir?**

- ☐ 98 cm
☐ 99 cm
☐ 100 cm

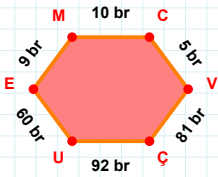
**96 br hangi kenara aittir?**

- ☐ UI kenarı
☐ ÖD kenarı
☐ EÖ kenarı

**70 cm hangi kenara aittir?****Kenar:****|HA| kaç brdir?**

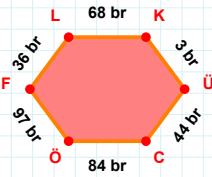
- ☐ 12 br
☐ 13 br
☐ 14 br

SORU: Aşağıdaki geometrik şekillerle ilgili soruları cevaplayınız.



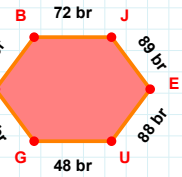
|UE| kaç brdir?

- ☐ 59 br
☐ 60 br
☐ 61 br



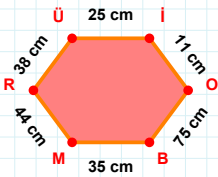
36 br hangi kenara aittir?

Kenar:



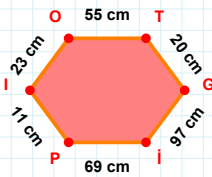
|BJ| kaç brdir?

- ☐ 71 br
☐ 72 br
☐ 73 br



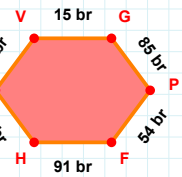
|MR| kaç cmdir?

- ☐ 43 cm
☐ 44 cm
☐ 45 cm



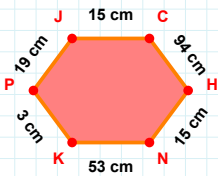
23 cm hangi kenara aittir?

- ☐ İP kenarı
☐ GI kenarı
☐ TI kenarı



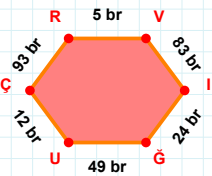
|PF| kaç brdir?

- ☐ 53 br
☐ 54 br
☐ 55 br



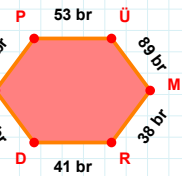
|CH| kaç cmdir?

- ☐ 93 cm
☐ 94 cm
☐ 95 cm



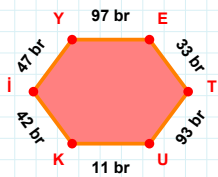
|UC| kaç brdir?

- ☐ 11 br
☐ 12 br
☐ 13 br



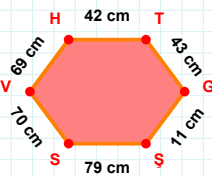
|ÜM| kaç brdir?

- ☐ 88 br
☐ 89 br
☐ 90 br



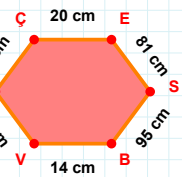
|KI| + |TU| =

Cevap: br



42 cm hangi kenara aittir?

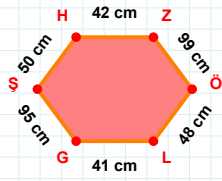
Kenar:



|İÇ| + |Vİ| =

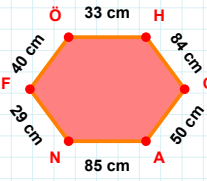
Cevap: cm

SORU: Aşağıdaki geometrik şekillerle ilgili soruları cevaplayınız.



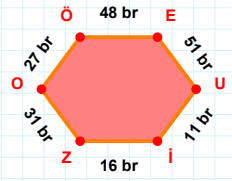
42 cm hangi kenara aittir?

Kenar:



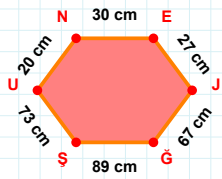
40 cm hangi kenara aittir?

- ☐ NF kenarı
☐ FC kenarı
☐ AN kenarı



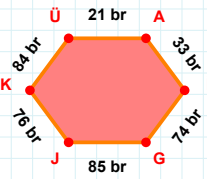
31 br hangi kenara aittir?

Kenar:



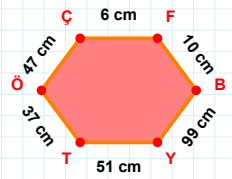
$|SU| + |JG| = \dots$

Cevap: cm



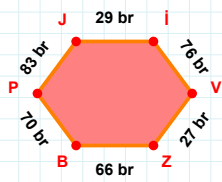
$|GJ| + |JK| = \dots$

Cevap: br



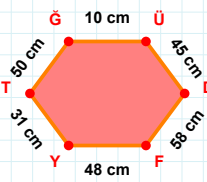
$|YT|$ kaç cmdir?

- ☐ 50 cm
☐ 51 cm
☐ 52 cm



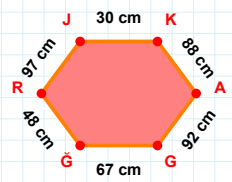
$|BP| + |Jİ| = \dots$

Cevap: br



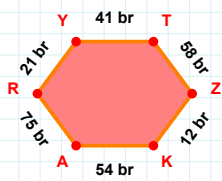
31 cm hangi kenara aittir?

Kenar:



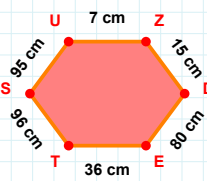
$|JK|$ kaç cmdir?

- ☐ 29 cm
☐ 30 cm
☐ 31 cm



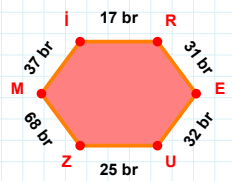
$|TZ| + |KA| = \dots$

Cevap: br



$|ET|$ kaç cmdir?

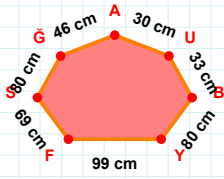
- ☐ 35 cm
☐ 36 cm
☐ 37 cm



68 br hangi kenara aittir?

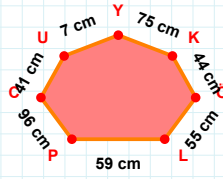
Kenar:

SORU: Aşağıdaki geometrik şekillerle ilgili soruları cevaplayınız.



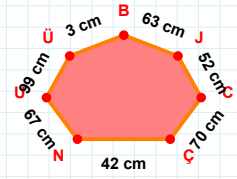
99 cm hangi kenara aittir?

Kenar:



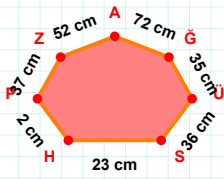
59 cm hangi kenara aittir?

Kenar:



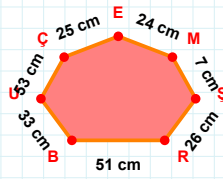
52 cm hangi kenara aittir?

Kenar:



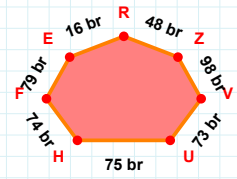
$|GA| + |SÜ| = \dots$

Cevap: cm



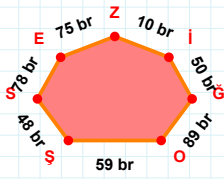
$|EÇ|$ kaç cm'dir?

- ☐ 24 cm
☐ 25 cm
☐ 26 cm



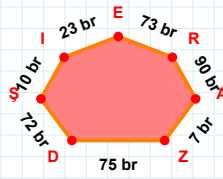
74 br hangi kenara aittir?

Kenar:



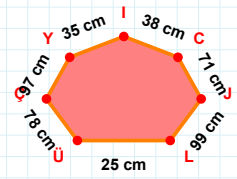
$|SS|$ kaç br'dir?

- ☐ 47 br
☐ 48 br
☐ 49 br



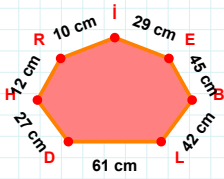
73 br hangi kenara aittir?

- ☐ DZ kenarı
☐ EI kenarı
☐ ŞA kenarı



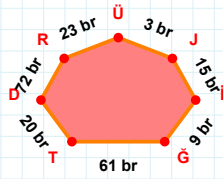
97 cm hangi kenara aittir?

Kenar:



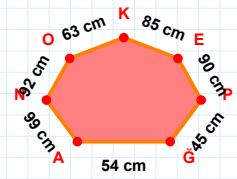
29 cm hangi kenara aittir?

Kenar:



3 br hangi kenara aittir?

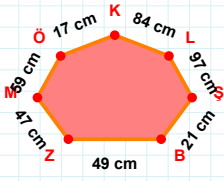
- ☐ DÜ kenarı
☐ RD kenarı
☐ DT kenarı



85 cm hangi kenara aittir?

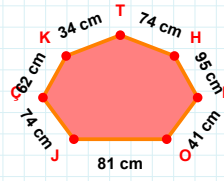
- ☐ KP kenarı
☐ GP kenarı
☐ PE kenarı

SORU: Aşağıdaki geometrik şekillerle ilgili soruları cevaplayınız.



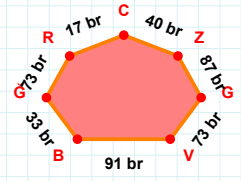
$|MZ| + |ÖM| = \dots$

Cevap: cm



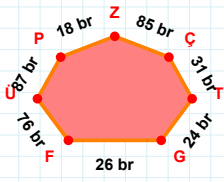
74 cm hangi kenara aittir?

- ☐ KH kenarı
☐ JO kenarı
☐ OI kenarı



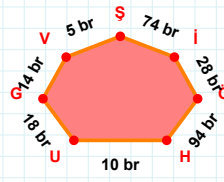
$|VG| + |RĞ| = \dots$

Cevap: br



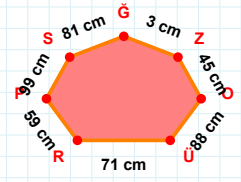
85 br hangi kenara aittir?

- ☐ ÜZ kenarı
☐ ÜF kenarı
☐ PÜ kenarı



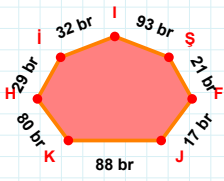
10 br hangi kenara aittir?

Kenar:



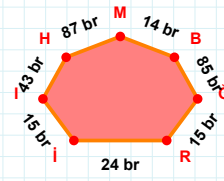
$|OZ| + |SP| = \dots$

Cevap: cm



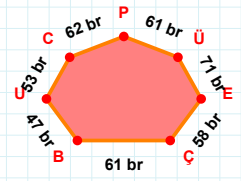
|KJ| kaç brdir?

- ☐ 87 br
☐ 88 br
☐ 89 br



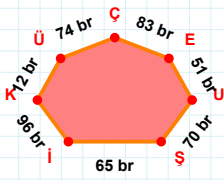
43 br hangi kenara aittir?

Kenar:



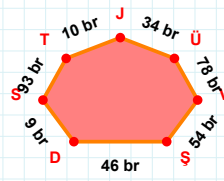
61 br hangi kenara aittir?

- ☐ ÜP kenarı
☐ UP kenarı
☐ UB kenarı



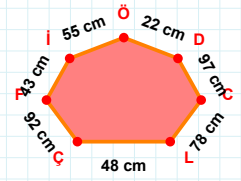
12 br hangi kenara aittir?

Kenar:



34 br hangi kenara aittir?

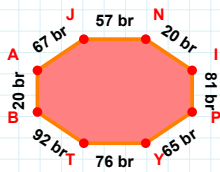
- ☐ ÜD kenarı
☐ VÜ kenarı
☐ JT kenarı



|İF| kaç cmdir?

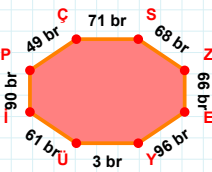
- ☐ 42 cm
☐ 43 cm
☐ 44 cm

SORU: Aşağıdaki geometrik şekillerle ilgili soruları cevaplayınız.



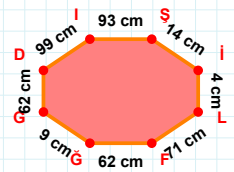
|NI| kaç brdir?

- ☐ 19 br
☐ 20 br
☐ 21 br



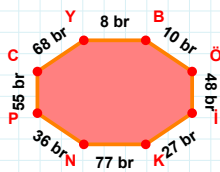
|SZ| + |YÜ| =

Cevap: br



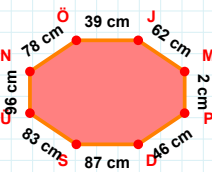
|LF| kaç cmdir?

- ☐ 70 cm
☐ 71 cm
☐ 72 cm



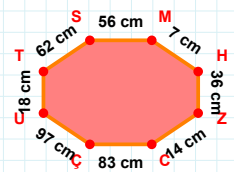
68 br hangi kenara aittir?

- ☐ İK kenarı
☐ ÖI kenarı
☐ Cİ kenarı



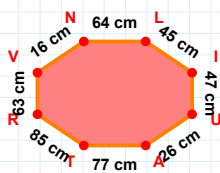
78 cm hangi kenara aittir?

- ☐ JÜ kenarı
☐ NÖ kenarı
☐ ÜN kenarı



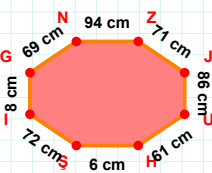
|ÇU| kaç cmdir?

- ☐ 96 cm
☐ 97 cm
☐ 98 cm



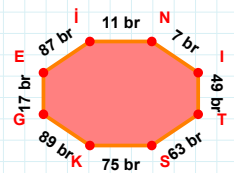
|VN| kaç cmdir?

- ☐ 15 cm
☐ 16 cm
☐ 17 cm



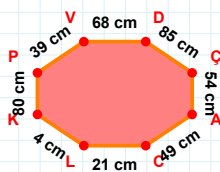
61 cm hangi kenara aittir?

Kenar:



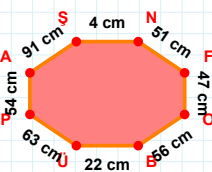
49 br hangi kenara aittir?

Kenar:



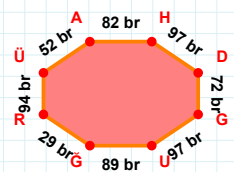
|ÇA| + |DÇ| =

Cevap: cm



|NF| + |ÜP| =

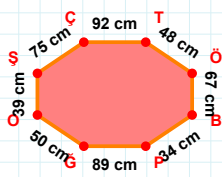
Cevap: cm



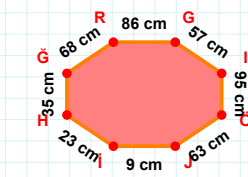
82 br hangi kenara aittir?

Kenar:

SORU: Aşağıdaki geometrik şekillerle ilgili soruları cevaplayınız.

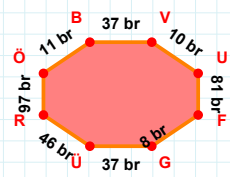
 $|ÖB| + |ÇT| = \dots$

Cevap: cm

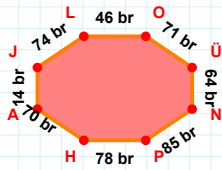


63 cm hangi kenara aittir?

Kenar:

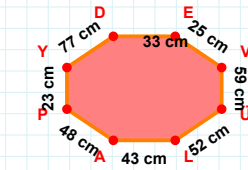
 $|ÜR|$ kaç brdir?

- ☐ 45 br
☐ 46 br
☐ 47 br

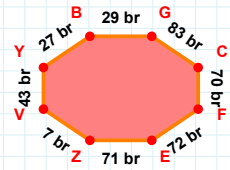


74 br hangi kenara aittir?

- ☐ LO kenarı
☐ NP kenarı
☐ OP kenarı

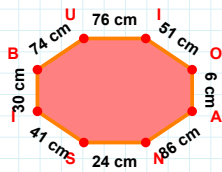
 $|VÜ| + |AP| = \dots$

Cevap: cm

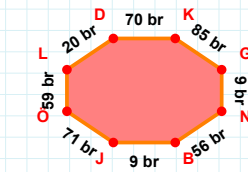


27 br hangi kenara aittir?

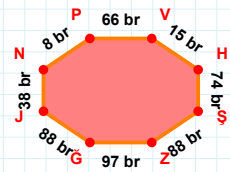
- ☐ GV kenarı
☐ ZV kenarı
☐ BG kenarı

 $|İB| + |AN| = \dots$

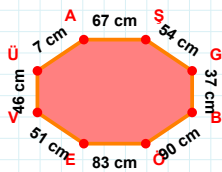
Cevap: cm

 $|LD|$ kaç brdir?

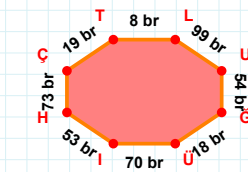
- ☐ 19 br
☐ 20 br
☐ 21 br

 $|VH|$ kaç brdir?

- ☐ 14 br
☐ 15 br
☐ 16 br

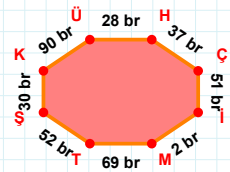
 $|ÜA| + |VÜ| = \dots$

Cevap: cm



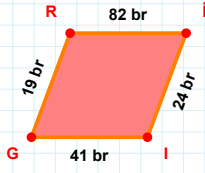
53 br hangi kenara aittir?

Kenar:



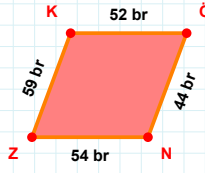
90 br hangi kenara aittir?

- ☐ ŞK kenarı
☐ ŞÇ kenarı
☐ TŞ kenarı

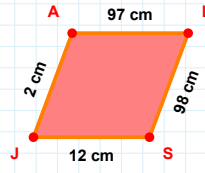
SORU: Aşağıdaki geometrik şekillerle ilgili soruları cevaplayınız.

19 br hangi kenara aittir?

Kenar:

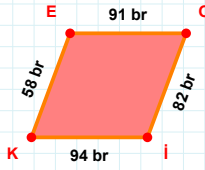
 $|ZK| + |NZ| = \dots$

Cevap: br

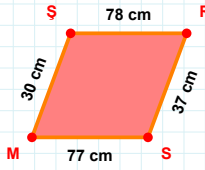


2 cm hangi kenara aittir?

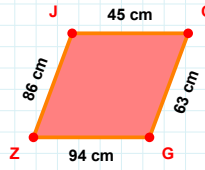
- ☐ AS kenarı
☐ JA kenarı
☐ AL kenarı

 $|OI|$ kaç brdir?

- ☐ 81 br
☐ 82 br
☐ 83 br

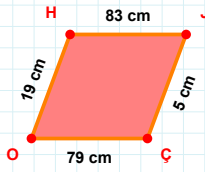
 $|RS|$ kaç cmdir?

- ☐ 36 cm
☐ 37 cm
☐ 38 cm



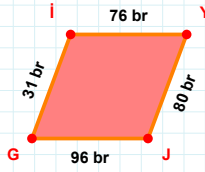
86 cm hangi kenara aittir?

- ☐ ZJ kenarı
☐ JC kenarı
☐ CZ kenarı



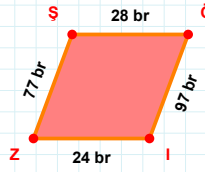
19 cm hangi kenara aittir?

- ☐ HJ kenarı
☐ ÇH kenarı
☐ OH kenarı

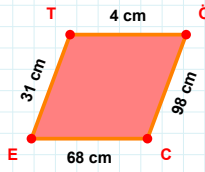


31 br hangi kenara aittir?

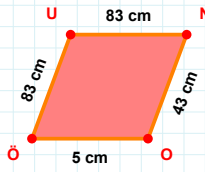
Kenar:

 $|IZ| + |Öİ| = \dots$

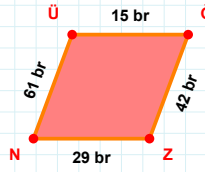
Cevap: br

 $|TÖ|$ kaç cmdir?

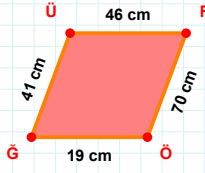
- ☐ 3 cm
☐ 4 cm
☐ 5 cm

 $|NO|$ kaç cmdir?

- ☐ 42 cm
☐ 43 cm
☐ 44 cm

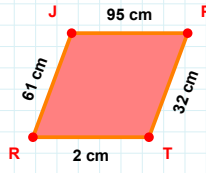
 $|ĞZ|$ kaç brdir?

- ☐ 41 br
☐ 42 br
☐ 43 br

SORU: Aşağıdaki geometrik şekillerle ilgili soruları cevaplayınız.

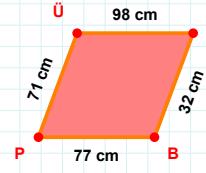
41 cm hangi kenara aittir?

- ☐ ÜÖ kenarı
☐ ÖĞ kenarı
☐ GÜ kenarı



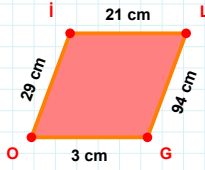
|JP| kaç cm'dir?

- ☐ 94 cm
☐ 95 cm
☐ 96 cm



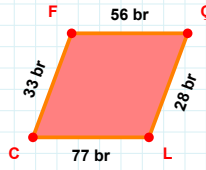
|SB| kaç cm'dir?

- ☐ 31 cm
☐ 32 cm
☐ 33 cm



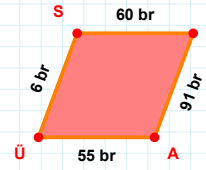
29 cm hangi kenara aittir?

- ☐ İL kenarı
☐ Oİ kenarı
☐ OL kenarı



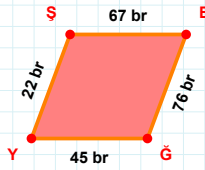
|FC| + |ÇL| =

Cevap: br



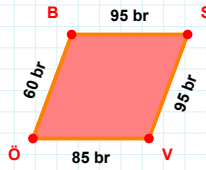
|LA| + |SL| =

Cevap: br



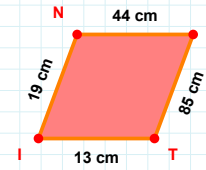
|ŞB| + |BĞ| =

Cevap: br



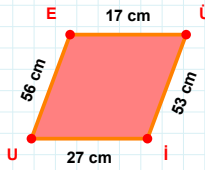
60 br hangi kenara aittir?

- ☐ VÖ kenarı
☐ ÖS kenarı
☐ ÖB kenarı



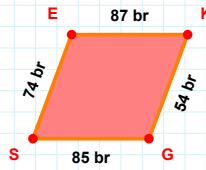
44 cm hangi kenara aittir?

Kenar:



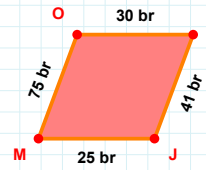
27 cm hangi kenara aittir?

Kenar:



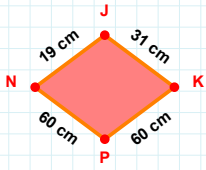
87 br hangi kenara aittir?

Kenar:

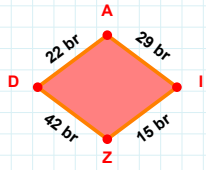


|PJ| + |OP| =

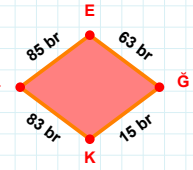
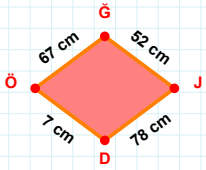
Cevap: br

SORU: Aşağıdaki geometrik şekillerle ilgili soruları cevaplayınız.**|NJ| kaç cmdir?**

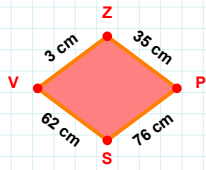
- ☐ 18 cm
☐ 19 cm
☐ 20 cm

**22 br hangi kenara aittir?**

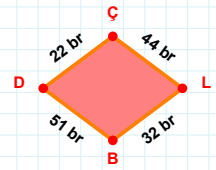
- ☐ ZD kenarı
☐ ID kenarı
☐ AI kenarı

**|LE| + |KL| =****Cevap: br****|DÖ| kaç cmdir?**

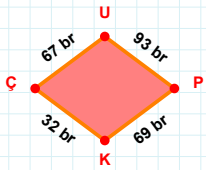
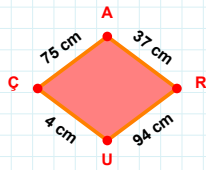
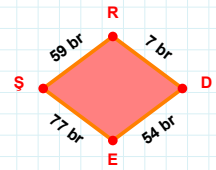
- ☐ 6 cm
☐ 7 cm
☐ 8 cm

**|SV| kaç cmdir?**

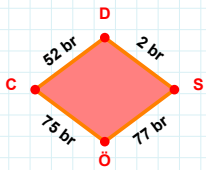
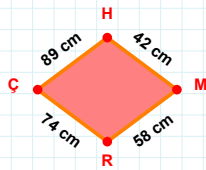
- ☐ 61 cm
☐ 62 cm
☐ 63 cm

**|DÇ| kaç brdir?**

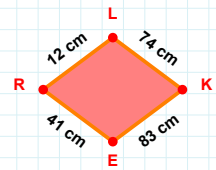
- ☐ 21 br
☐ 22 br
☐ 23 br

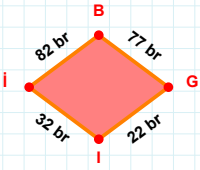
**|UP| + |PK| =****Cevap: br****|UC| + |RU| =****Cevap: cm****|ES| kaç brdir?**

- ☐ 76 br
☐ 77 br
☐ 78 br

**|SÖ| + |ÖC| =****Cevap: br****89 cm hangi kenara aittir?**

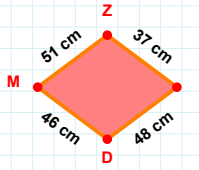
- ☐ HM kenarı
☐ ÇM kenarı
☐ MR kenarı

**12 cm hangi kenara aittir?****Kenar:**

SORU: Aşağıdaki geometrik şekillerle ilgili soruları cevaplayınız.

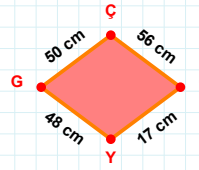
|BG| kaç brdir?

- ☐ 76 br
☐ 77 br
☐ 78 br



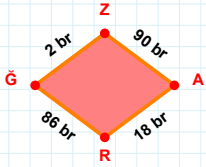
51 cm hangi kenara aittir?

- ☐ İD kenarı
☐ Zİ kenarı
☐ İM kenarı



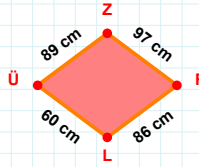
56 cm hangi kenara aittir?

Kenar:



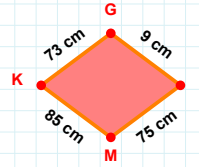
90 br hangi kenara aittir?

Kenar:



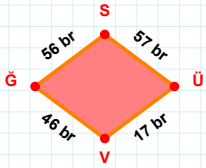
|ÜZ| + |RL| =

Cevap: cm



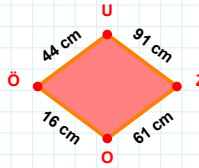
|GN| + |NM| =

Cevap: cm



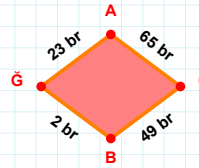
56 br hangi kenara aittir?

Kenar:



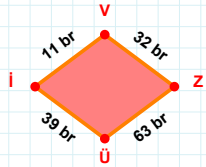
61 cm hangi kenara aittir?

Kenar:



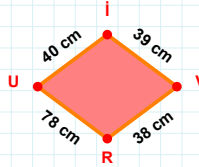
65 br hangi kenara aittir?

Kenar:



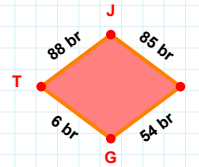
|Üİ| + |İV| =

Cevap: br



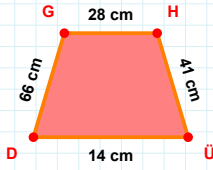
40 cm hangi kenara aittir?

Kenar:



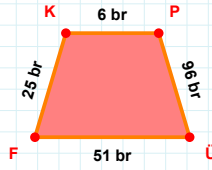
88 br hangi kenara aittir?

- ☐ GT kenarı
☐ İT kenarı
☐ Jİ kenarı

SORU: Aşağıdaki geometrik şekillerle ilgili soruları cevaplayınız.

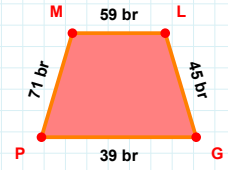
66 cm hangi kenara aittir?

- ☐ ÜG kenarı
☐ ÜD kenarı
☐ GH kenarı



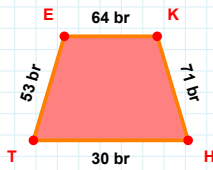
|ÜF| kaç brdir?

- ☐ 50 br
☐ 51 br
☐ 52 br



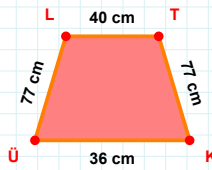
|GP| kaç brdir?

- ☐ 38 br
☐ 39 br
☐ 40 br



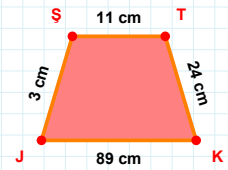
53 br hangi kenara aittir?

- ☐ EK kenarı
☐ TK kenarı
☐ TE kenarı



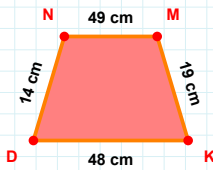
77 cm hangi kenara aittir?

Kenar:



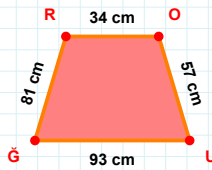
11 cm hangi kenara aittir?

Kenar:



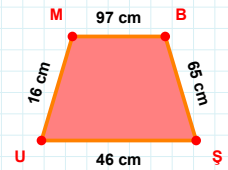
14 cm hangi kenara aittir?

- ☐ MK kenarı
☐ DM kenarı
☐ DN kenarı



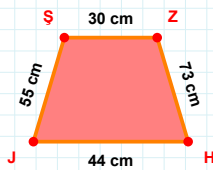
|OU| kaç cmdir?

- ☐ 56 cm
☐ 57 cm
☐ 58 cm



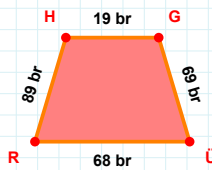
97 cm hangi kenara aittir?

Kenar:



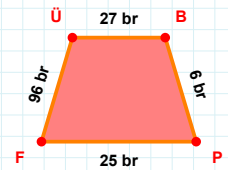
|ZH| + |HJ| =

Cevap: cm



|RH| + |HG| =

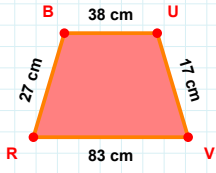
Cevap: br



96 br hangi kenara aittir?

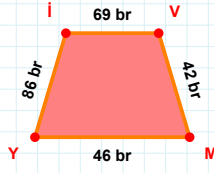
Kenar:

SORU: Aşağıdaki geometrik şekillerle ilgili soruları cevaplayınız.



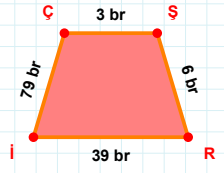
|VR| kaç cm'dir?

- ☐ 82 cm
☐ 83 cm
☐ 84 cm



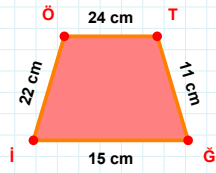
|MY| kaç br'dir?

- ☐ 45 br
☐ 46 br
☐ 47 br



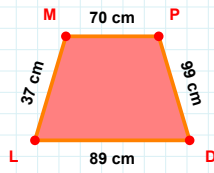
|Çİ| + |SR| =

Cevap: br



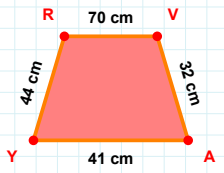
24 cm hangi kenara aittir?

Kenar:



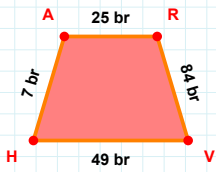
37 cm hangi kenara aittir?

- ☐ MP kenarı
☐ LP kenarı
☐ DL kenarı



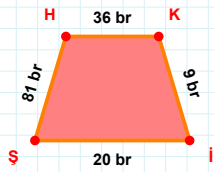
32 cm hangi kenara aittir?

Kenar:



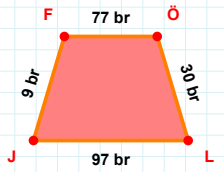
|RV| + |VH| =

Cevap: br



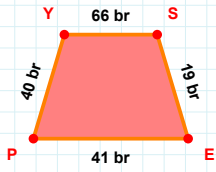
20 br hangi kenara aittir?

Kenar:



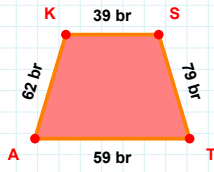
|ÖL| kaç br'dir?

- ☐ 29 br
☐ 30 br
☐ 31 br



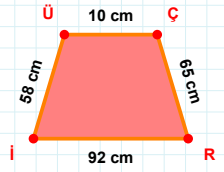
40 br hangi kenara aittir?

- ☐ PS kenarı
☐ YS kenarı
☐ EP kenarı



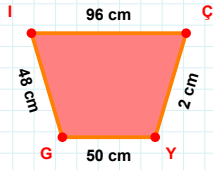
62 br hangi kenara aittir?

- ☐ KS kenarı
☐ ST kenarı
☐ KT kenarı



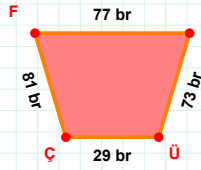
58 cm hangi kenara aittir?

- ☐ RÜ kenarı
☐ Rİ kenarı
☐ ÇR kenarı

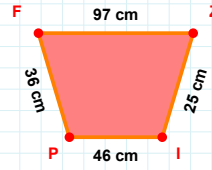
SORU: Aşağıdaki geometrik şekillerle ilgili soruları cevaplayınız.

2 cm hangi kenara aittir?

Kenar:

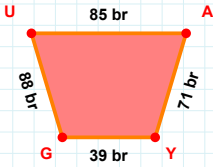
 $|ÜÇ| + |ÇF| = \dots$

Cevap: br

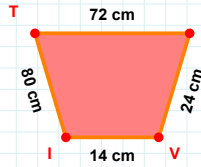


36 cm hangi kenara aittir?

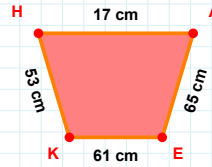
- ☐ FZ kenarı
☐ IF kenarı
☐ PF kenarı

 $|GU|$ kaç brdir?

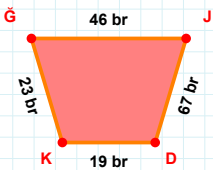
- ☐ 87 br
☐ 88 br
☐ 89 br

 $|VI| + |MV| = \dots$

Cevap: cm

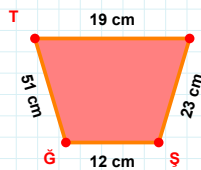
 $|HA|$ kaç cmdir?

- ☐ 16 cm
☐ 17 cm
☐ 18 cm



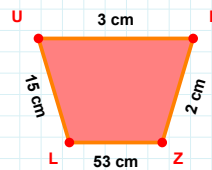
23 br hangi kenara aittir?

- ☐ DK kenarı
☐ ĞJ kenarı
☐ JK kenarı



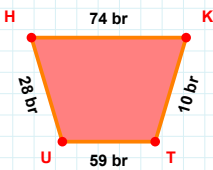
51 cm hangi kenara aittir?

Kenar:



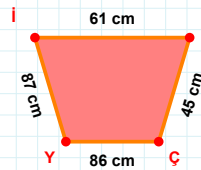
15 cm hangi kenara aittir?

- ☐ LU kenarı
☐ LE kenarı
☐ EZ kenarı



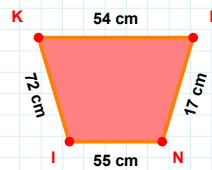
10 br hangi kenara aittir?

Kenar:



87 cm hangi kenara aittir?

- ☐ ÇY kenarı
☐ KY kenarı
☐ Yİ kenarı

 $|IK| + |NI| = \dots$

Cevap: cm

SORU: Aşağıdaki geometrik şekillerle ilgili soruları cevaplayınız.

64 br hangi kenara aittir?

☐ JE kenarı
☐ ED kenarı
☐ CD kenarı

$|ÖT| + |ZV| = \dots$

Cevap: br

66 cm hangi kenara aittir?

☐ IA kenarı
☐ HA kenarı
☐ EI kenarı

27 br hangi kenara aittir?

☐ CD kenarı
☐ DR kenarı
☐ CK kenarı

$|MG| + |ŞÜ| = \dots$

Cevap: cm

$|İB|$ kaç brdir?

☐ 74 br
☐ 75 br
☐ 76 br

$|HÖ| + |İH| = \dots$

Cevap: cm

63 br hangi kenara aittir?

☐ SÖ kenarı
☐ AÖ kenarı
☐ ÖG kenarı

17 br hangi kenara aittir?

☐ ÖF kenarı
☐ VÖ kenarı
☐ NF kenarı

72 br hangi kenara aittir?

☐ Tİ kenarı
☐ LT kenarı
☐ İL kenarı

$|LĞ|$ kaç cmdir?

☐ 20 cm
☐ 21 cm
☐ 22 cm

98 br hangi kenara aittir?

☐ Üİ kenarı
☐ JÜ kenarı
☐ LÜ kenarı

SÜREÇ ODAKLI DEĞERLENDİRME ÖLÇEĞİ			
Geliştirilmeli (0-109)	İyi (110-187)	Çok İyi (188-265)	Mükemmel (266-312)
<input type="checkbox"/>	<input type="checkbox"/>	<input type="checkbox"/>	<input type="checkbox"/>

Hazırlayan:

Bu bölüme sınıfınızın ilgili kazanıma yönelik genel durumuna ilişkin gözlem ve izlenimlerinizi, öğrencilerinizin bu kazanımla ilgili öğrenme eksikliklerini ve bu eksikliklerin giderilmesi amacıyla yaptığınız/yapmayı planladığınız faaliyetleri not edebilirsiniz.

No	Adı - Soyadı	Toplam Puan	Değerlendirme
1			
2			
3			
4			
5			
6			
7			
8			
9			
10			
11			
12			
13			
14			
15			
16			
17			
18			
19			
20			
21			
22			
23			
24			
25			
26			
27			
28			
29			
30			
31			
32			
33			
34			
35			

Hazırlayan: