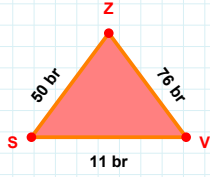
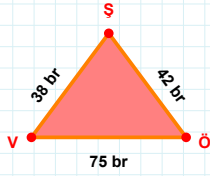


SORU: Aşağıdaki geometrik şekillerle ilgili soruları cevaplayınız.

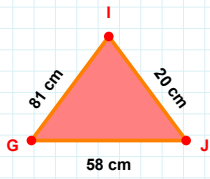
50 br hangi kenara aittir?

Kenar:

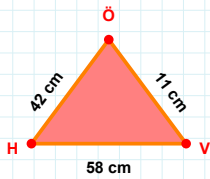


38 br hangi kenara aittir?

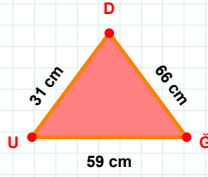
Kenar:

 $|IG| + |GJ| = \dots$

Cevap: cm

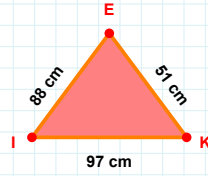
 $|HV|$ kaç cm'dir?

- ☐ 57 cm
☐ 58 cm
☐ 59 cm

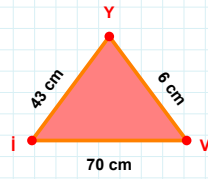


66 cm hangi kenara aittir?

- ☐ XY kenarı
☐ DU kenarı
☐ UĞ kenarı

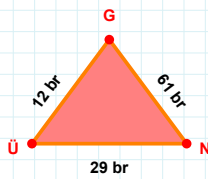
 $|EI|$ kaç cm'dir?

- ☐ 87 cm
☐ 88 cm
☐ 89 cm



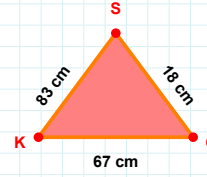
6 cm hangi kenara aittir?

- ☐ XY kenarı
☐ YI kenarı
☐ VY kenarı



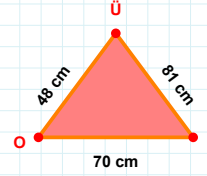
12 br hangi kenara aittir?

Kenar:

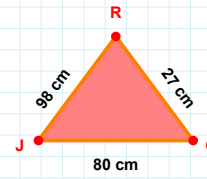


67 cm hangi kenara aittir?

Kenar:

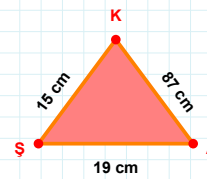
 $|ÜO| + |ÜO| = \dots$

Cevap: cm



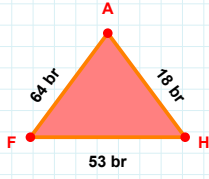
27 cm hangi kenara aittir?

- ☐ RJ kenarı
☐ ÖR kenarı
☐ XY kenarı



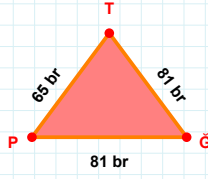
87 cm hangi kenara aittir?

- ☐ ŞA kenarı
☐ AK kenarı
☐ XY kenarı

SORU: Aşağıdaki geometrik şekillerle ilgili soruları cevaplayınız.

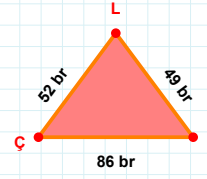
$$|FH| + |HA| = \dots$$

Cevap: br



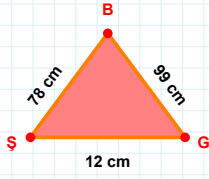
65 br hangi kenara aittir?

Kenar:



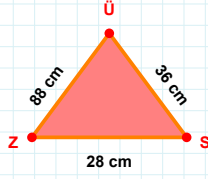
49 br hangi kenara aittir?

Kenar:



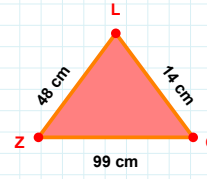
78 cm hangi kenara aittir?

Kenar:



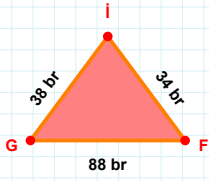
88 cm hangi kenara aittir?

Kenar:



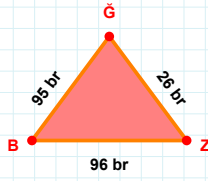
48 cm hangi kenara aittir?

Kenar:



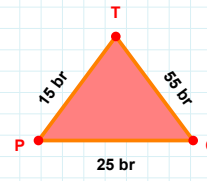
$$|İG| + |GF| = \dots$$

Cevap: br



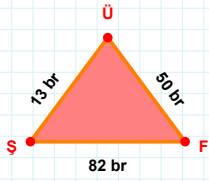
|ZĞ| kaç brdir?

- ☐ 25 br
☐ 26 br
☐ 27 br



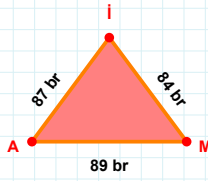
55 br hangi kenara aittir?

- ☐ ÖT kenarı
☐ PÖ kenarı
☐ XY kenarı



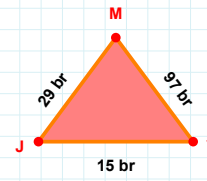
$$|ÜŞ| + |FÜ| = \dots$$

Cevap: br



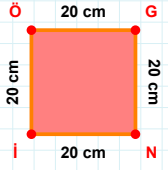
|Mİ| kaç brdir?

- ☐ 83 br
☐ 84 br
☐ 85 br

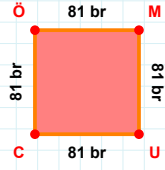


97 br hangi kenara aittir?

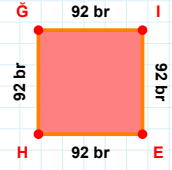
- ☐ XY kenarı
☐ MJ kenarı
☐ YM kenarı

SORU: Aşağıdaki geometrik şekillerle ilgili soruları cevaplayınız.**20 cm hangi kenara aittir?**

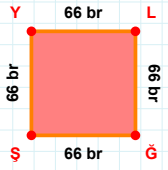
- ☐ GN kenarı
☐ NÖ kenarı
☐ İÖ kenarı

**|CÖ| kaç brdir?**

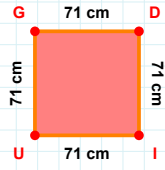
- ☐ 80 br
☐ 81 br
☐ 82 br

**92 br hangi kenara aittir?**

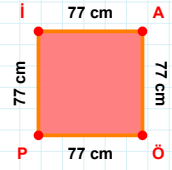
- ☐ GE kenarı
☐ GI kenarı
☐ Hİ kenarı

**|YL| kaç brdir?**

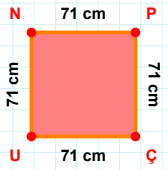
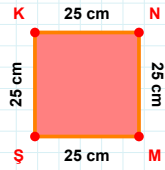
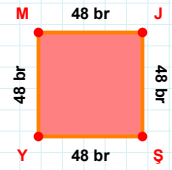
- ☐ 65 br
☐ 66 br
☐ 67 br

**|UG| kaç cmdir?**

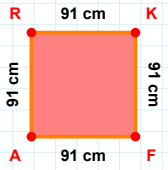
- ☐ 70 cm
☐ 71 cm
☐ 72 cm

**|PI| kaç cmdir?**

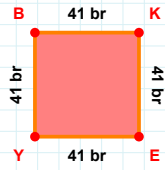
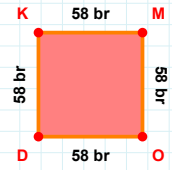
- ☐ 76 cm
☐ 77 cm
☐ 78 cm

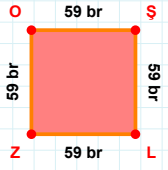
**|NP| + |ÇU| =****Cevap: cm****|ŞK| + |KN| =****Cevap: cm****|MJ| kaç brdir?**

- ☐ 47 br
☐ 48 br
☐ 49 br

**91 cm hangi kenara aittir?**

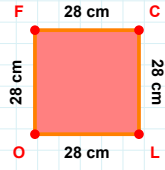
- ☐ RF kenarı
☐ FA kenarı
☐ RK kenarı

**|YB| + |EY| =****Cevap: br****58 br hangi kenara aittir?****Kenar:**

SORU: Aşağıdaki geometrik şekillerle ilgili soruları cevaplayınız.

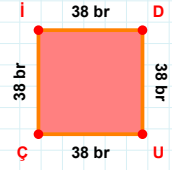
59 br hangi kenara aittir?

- ☐ ŞL kenarı
☐ ZO kenarı
☐ ŞZ kenarı



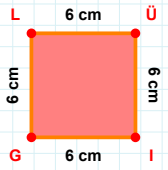
28 cm hangi kenara aittir?

Kenar:



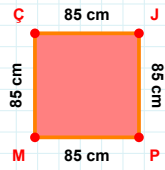
İD kaç brdir?

- ☐ 37 br
☐ 38 br
☐ 39 br



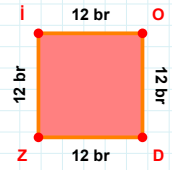
|İG| + |Üİ| =

Cevap: cm



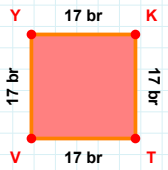
|JP| + |ÇJ| =

Cevap: cm



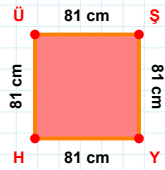
12 br hangi kenara aittir?

- ☐ OD kenarı
☐ DZ kenarı
☐ OZ kenarı



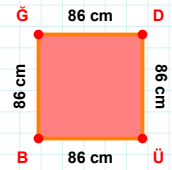
|KT| + |YK| =

Cevap: br



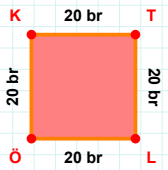
81 cm hangi kenara aittir?

Kenar:



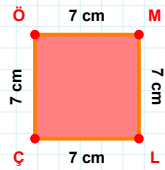
|BĞ| kaç cmdir?

- ☐ 85 cm
☐ 86 cm
☐ 87 cm



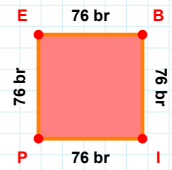
|LÖ| + |KT| =

Cevap: br



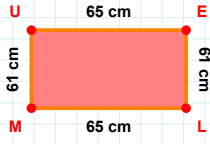
|LÇ| + |ÇÖ| =

Cevap: cm



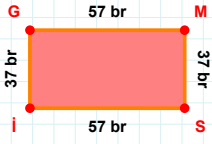
|PE| + |İP| =

Cevap: br

SORU: Aşağıdaki geometrik şekillerle ilgili soruları cevaplayınız.

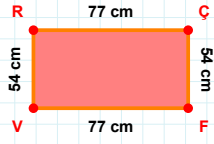
|MU| kaç cm'dir?

- ☐ 60 cm
☐ 61 cm
☐ 62 cm



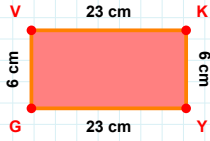
|MS| kaç br'dir?

- ☐ 36 br
☐ 37 br
☐ 38 br



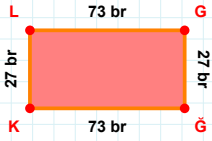
|ÇF| + |FV| =

Cevap: cm



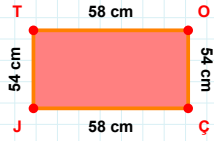
|VK| + |KY| =

Cevap: cm



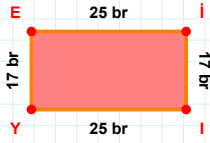
73 br hangi kenara aittir?

Kenar:



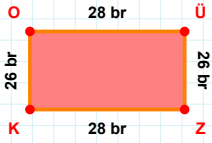
|OC| + |JT| =

Cevap: cm



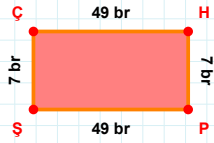
17 br hangi kenara aittir?

- ☐ İY kenarı
☐ EI kenarı
☐ İİ kenarı



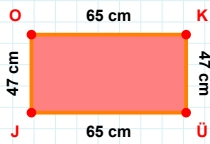
|OÜ| + |KO| =

Cevap: br



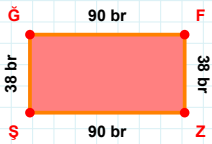
|ŞÇ| + |HP| =

Cevap: br



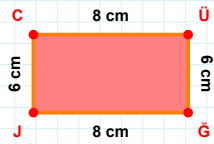
47 cm hangi kenara aittir?

Kenar:



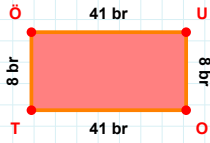
|FZ| + |ĞF| =

Cevap: br



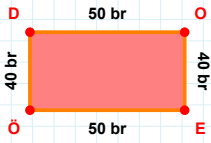
6 cm hangi kenara aittir?

- ☐ CÜ kenarı
☐ JC kenarı
☐ ĞC kenarı

SORU: Aşağıdaki geometrik şekillerle ilgili soruları cevaplayınız.

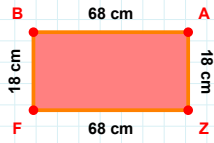
8 br hangi kenara aittir?

- ☐ OT kenarı
☐ UO kenarı
☐ ÖO kenarı



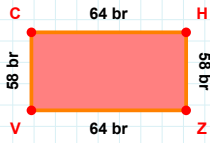
|ÖD| kaç brdir?

- ☐ 39 br
☐ 40 br
☐ 41 br



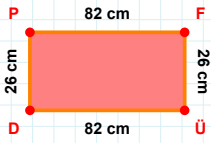
18 cm hangi kenara aittir?

- ☐ ZB kenarı
☐ BA kenarı
☐ FB kenarı



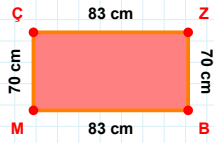
|VC| kaç brdir?

- ☐ 57 br
☐ 58 br
☐ 59 br



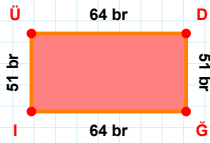
26 cm hangi kenara aittir?

- ☐ PF kenarı
☐ DF kenarı
☐ DP kenarı



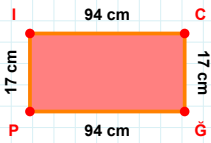
70 cm hangi kenara aittir?

- ☐ ZB kenarı
☐ ÇZ kenarı
☐ ÇB kenarı



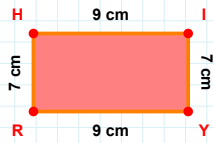
64 br hangi kenara aittir?

Kenar:



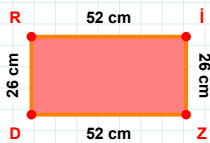
|PI| + |IC| =

Cevap: cm



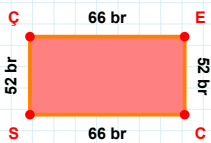
7 cm hangi kenara aittir?

- ☐ HI kenarı
☐ HY kenarı
☐ YR kenarı



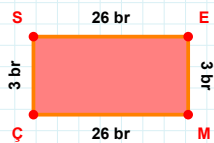
|İZ| + |RI| =

Cevap: cm



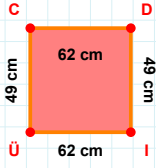
|CS| kaç brdir?

- ☐ 65 br
☐ 66 br
☐ 67 br

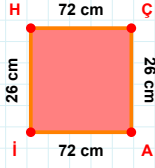


|EM| kaç brdir?

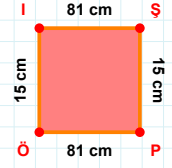
- ☐ 2 br
☐ 3 br
☐ 4 br

SORU: Aşağıdaki geometrik şekillerle ilgili soruları cevaplayınız.**|CD| kaç cm'dir?**

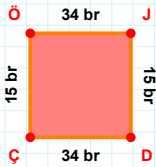
- ☐ 61 cm
☐ 62 cm
☐ 63 cm

**26 cm hangi kenara aittir?**

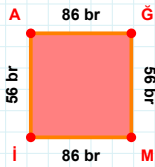
Kenar:

**|PÖ| kaç cm'dir?**

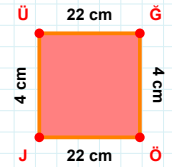
- ☐ 80 cm
☐ 81 cm
☐ 82 cm

**15 br hangi kenara aittir?**

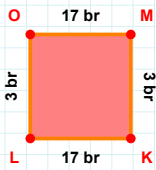
- ☐ ÇJ kenarı
☐ ÖJ kenarı
☐ JD kenarı

**|İA| kaç br'dir?**

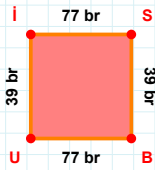
- ☐ 55 br
☐ 56 br
☐ 57 br

**|ĞÖ| kaç cm'dir?**

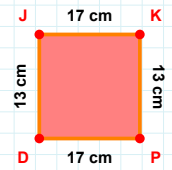
- ☐ 3 cm
☐ 4 cm
☐ 5 cm

**|OM| kaç br'dir?**

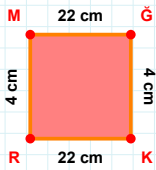
- ☐ 16 br
☐ 17 br
☐ 18 br

**|BU| kaç br'dir?**

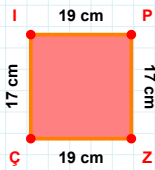
- ☐ 76 br
☐ 77 br
☐ 78 br

**17 cm hangi kenara aittir?**

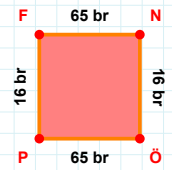
Kenar:

**|MĞ| kaç cm'dir?**

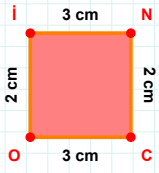
- ☐ 21 cm
☐ 22 cm
☐ 23 cm

**17 cm hangi kenara aittir?**

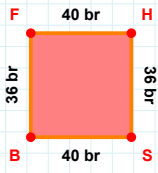
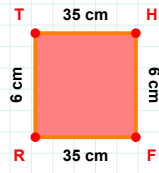
- ☐ ZÇ kenarı
☐ İP kenarı
☐ Zİ kenarı

**16 br hangi kenara aittir?**

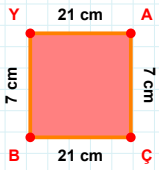
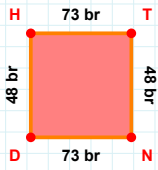
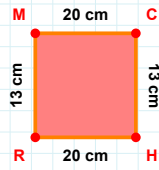
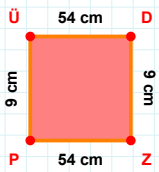
Kenar:

SORU: Aşağıdaki geometrik şekillerle ilgili soruları cevaplayınız.**|CO| kaç cm'dir?**

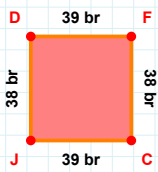
- ☐ 2 cm
☐ 3 cm
☐ 4 cm

**|SB| + |HS| =****Cevap:** br**6 cm hangi kenara aittir?**

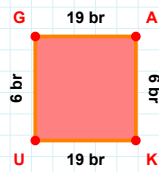
- ☐ TH kenarı
☐ FR kenarı
☐ TF kenarı

**7 cm hangi kenara aittir?****Kenar:****|TN| + |HT| =****Cevap:** br**13 cm hangi kenara aittir?****Kenar:****9 cm hangi kenara aittir?**

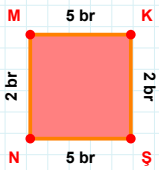
- ☐ ÜD kenarı
☐ DZ kenarı
☐ PD kenarı

**38 br hangi kenara aittir?**

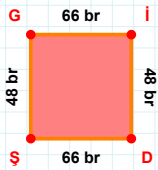
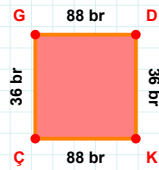
- ☐ JD kenarı
☐ CJ kenarı
☐ JF kenarı

**|KU| kaç br'dir?**

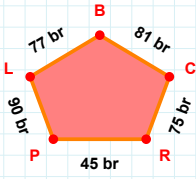
- ☐ 18 br
☐ 19 br
☐ 20 br

**|KS| kaç br'dir?**

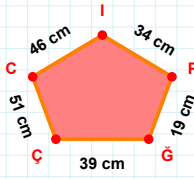
- ☐ 1 br
☐ 2 br
☐ 3 br

**66 br hangi kenara aittir?****Kenar:****36 br hangi kenara aittir?**

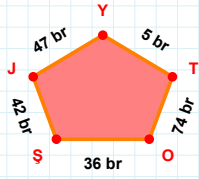
- ☐ KÇ kenarı
☐ KG kenarı
☐ DK kenarı

SORU: Aşağıdaki geometrik şekillerle ilgili soruları cevaplayınız.**|RC| kaç brdir?**

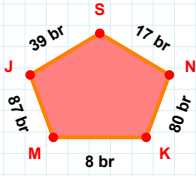
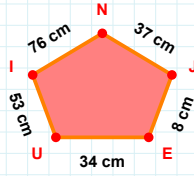
- ☐ 74 br
☐ 75 br
☐ 76 br

**|İP| kaç cmdir?**

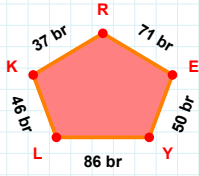
- ☐ 18 cm
☐ 19 cm
☐ 20 cm

**5 br hangi kenara aittir?**

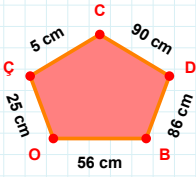
- ☐ ŞO kenarı
☐ ŞY kenarı
☐ OT kenarı

**|NS| + |MK| =****Cevap: br****37 cm hangi kenara aittir?**

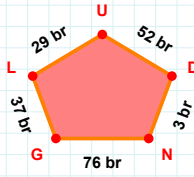
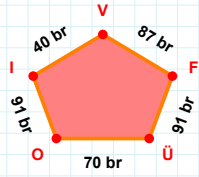
- ☐ UE kenarı
☐ NI kenarı
☐ NE kenarı

**71 br hangi kenara aittir?**

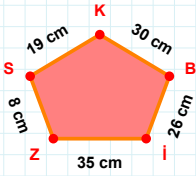
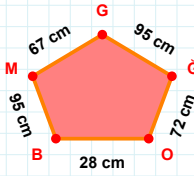
- ☐ KL kenarı
☐ KE kenarı
☐ YE kenarı

**90 cm hangi kenara aittir?**

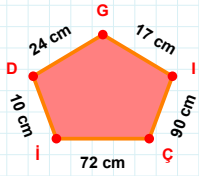
- ☐ BÇ kenarı
☐ ÇO kenarı
☐ BD kenarı

**|UL| + |ND| =****Cevap: br****|IO| kaç brdir?**

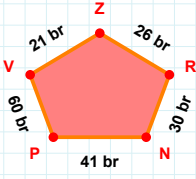
- ☐ 90 br
☐ 91 br
☐ 92 br

**8 cm hangi kenara aittir?****Kenar:****|Oİ| kaç cmdir?**

- ☐ 71 cm
☐ 72 cm
☐ 73 cm

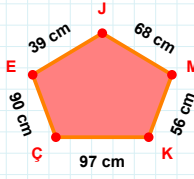
**17 cm hangi kenara aittir?**

- ☐ Çİ kenarı
☐ İİ kenarı
☐ GD kenarı

SORU: Aşağıdaki geometrik şekillerle ilgili soruları cevaplayınız.

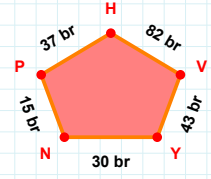
30 br hangi kenara aittir?

Kenar:



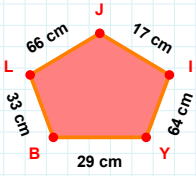
|ÇK| kaç cm'dir?

- ☐ 96 cm
☐ 97 cm
☐ 98 cm



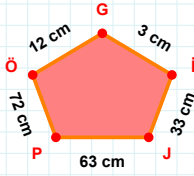
|NY| + |VH| =

Cevap: br



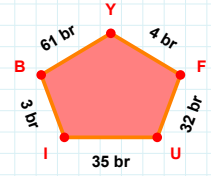
66 cm hangi kenara aittir?

Kenar:



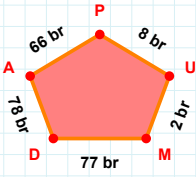
|GÖ| + |ÖP| =

Cevap: cm



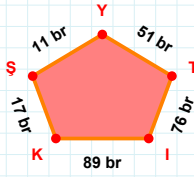
|FY| + |YB| =

Cevap: br



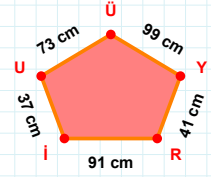
78 br hangi kenara aittir?

Kenar:



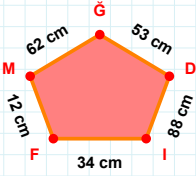
11 br hangi kenara aittir?

Kenar:



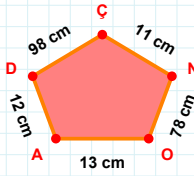
37 cm hangi kenara aittir?

Kenar:



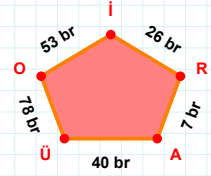
53 cm hangi kenara aittir?

- ☐ MF kenarı
☐ GM kenarı
☐ IM kenarı



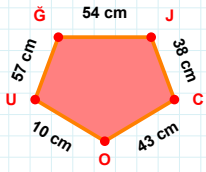
78 cm hangi kenara aittir?

Kenar:



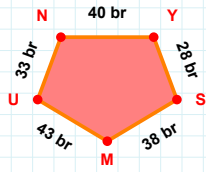
|OÜ| + |AR| =

Cevap: br

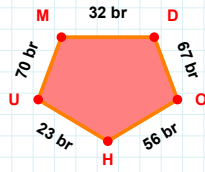
SORU: Aşağıdaki geometrik şekillerle ilgili soruları cevaplayınız.

54 cm hangi kenara aittir?

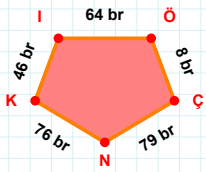
Kenar:

 $|YS| + |NY| = \dots$

Cevap: br

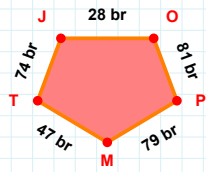
 $|UM|$ kaç brdir?

- ☐ 69 br
☐ 70 br
☐ 71 br

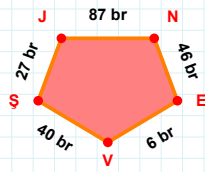


46 br hangi kenara aittir?

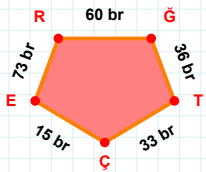
- ☐ IN kenarı
☐ NK kenarı
☐ ÇN kenarı

 $|TJ| + |PM| = \dots$

Cevap: br

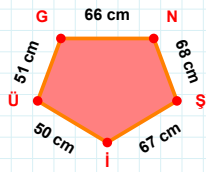
 $|JN|$ kaç brdir?

- ☐ 86 br
☐ 87 br
☐ 88 br



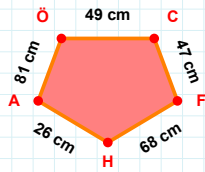
15 br hangi kenara aittir?

Kenar:



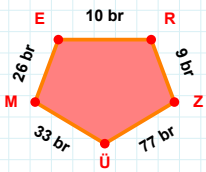
51 cm hangi kenara aittir?

- ☐ ÜG kenarı
☐ GN kenarı
☐ ÜŞ kenarı

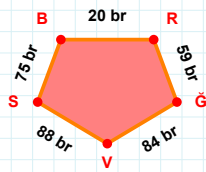


81 cm hangi kenara aittir?

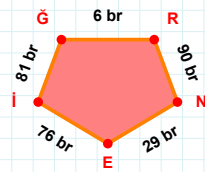
- ☐ FA kenarı
☐ FH kenarı
☐ HA kenarı

 $|ER|$ kaç brdir?

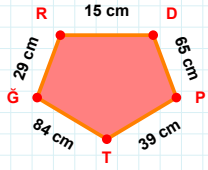
- ☐ 9 br
☐ 10 br
☐ 11 br

 $|BR| + |ĞV| = \dots$

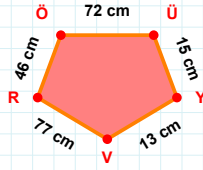
Cevap: br

 $|EI|$ kaç brdir?

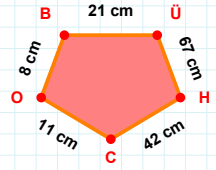
- ☐ 75 br
☐ 76 br
☐ 77 br

SORU: Aşağıdaki geometrik şekillerle ilgili soruları cevaplayınız.**29 cm hangi kenara aittir?**

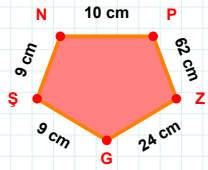
- ☐ GR kenarı
☐ PT kenarı
☐ GP kenarı

**|RÖ| kaç cm'dir?**

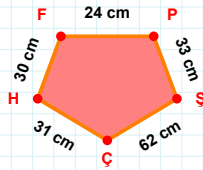
- ☐ 45 cm
☐ 46 cm
☐ 47 cm

**67 cm hangi kenara aittir?**

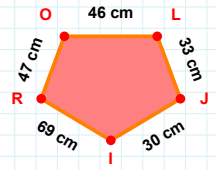
Kenar:

**9 cm hangi kenara aittir?**

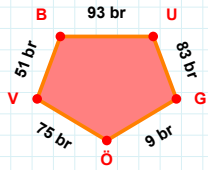
- ☐ PŞ kenarı
☐ NP kenarı
☐ PZ kenarı

**|PŞ| kaç cm'dir?**

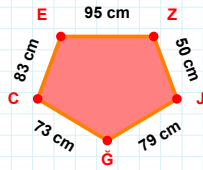
- ☐ 32 cm
☐ 33 cm
☐ 34 cm

**30 cm hangi kenara aittir?**

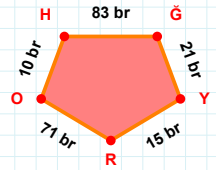
Kenar:

**93 br hangi kenara aittir?**

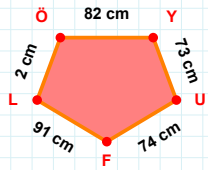
Kenar:

**|JG| kaç cm'dir?**

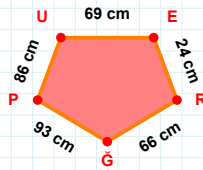
- ☐ 78 cm
☐ 79 cm
☐ 80 cm

**10 br hangi kenara aittir?**

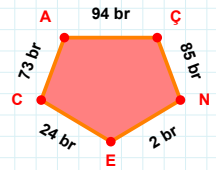
- ☐ OH kenarı
☐ GR kenarı
☐ YR kenarı

**|YU| + |LÖ| =**

Cevap: cm

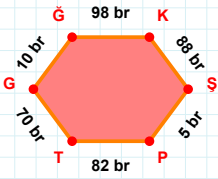
**|RG| kaç cm'dir?**

- ☐ 65 cm
☐ 66 cm
☐ 67 cm

**73 br hangi kenara aittir?**

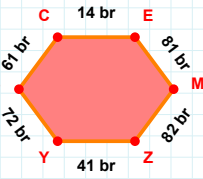
- ☐ EC kenarı
☐ CÇ kenarı
☐ ÇN kenarı

SORU: Aşağıdaki geometrik şekillerle ilgili soruları cevaplayınız.



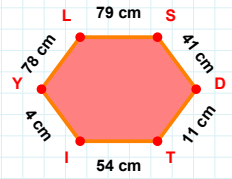
10 br hangi kenara aittir?

- ☐ GK kenarı
☐ SP kenarı
☐ GT kenarı



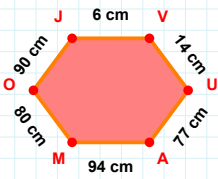
|EM| kaç brdir?

- ☐ 80 br
☐ 81 br
☐ 82 br



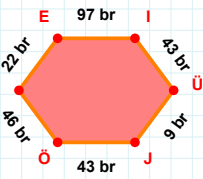
|LS| + |IY| =

Cevap: cm



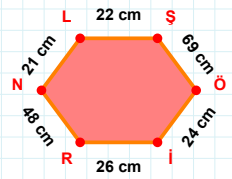
|JV| kaç cmdir?

- ☐ 5 cm
☐ 6 cm
☐ 7 cm



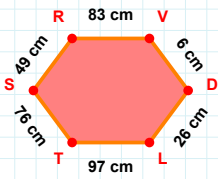
22 br hangi kenara aittir?

- ☐ ÜJ kenarı
☐ IÜ kenarı
☐ NJ kenarı



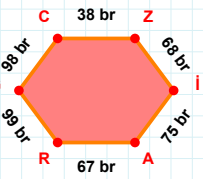
|Öİ| kaç cmdir?

- ☐ 23 cm
☐ 24 cm
☐ 25 cm



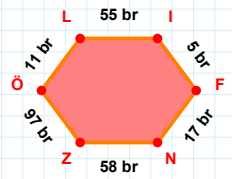
97 cm hangi kenara aittir?

Kenar:



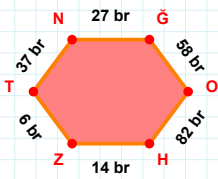
99 br hangi kenara aittir?

Kenar:



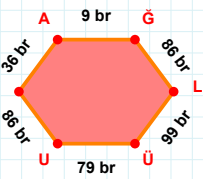
5 br hangi kenara aittir?

Kenar:



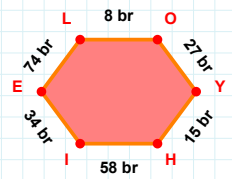
37 br hangi kenara aittir?

- ☐ GO kenarı
☐ OH kenarı
☐ ZG kenarı



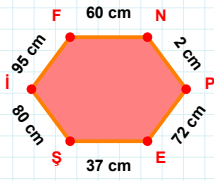
|AĞ| + |LÜ| =

Cevap: br



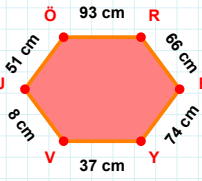
|EL| + |İE| =

Cevap: br

SORU: Aşağıdaki geometrik şekillerle ilgili soruları cevaplayınız.

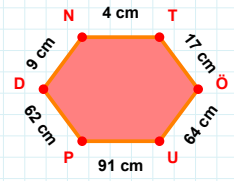
95 cm hangi kenara aittir?

- ☐ Şİ kenarı
☐ NP kenarı
☐ NE kenarı



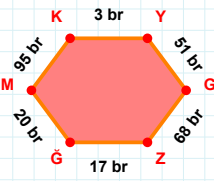
51 cm hangi kenara aittir?

- ☐ VJ kenarı
☐ FV kenarı
☐ ÖR kenarı



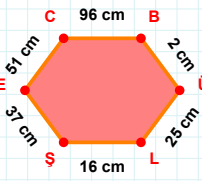
64 cm hangi kenara aittir?

Kenar:



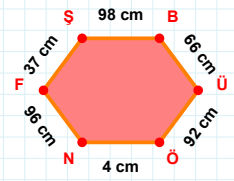
|KY| kaç brdir?

- ☐ 2 br
☐ 3 br
☐ 4 br



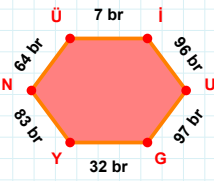
51 cm hangi kenara aittir?

- ☐ CÜ kenarı
☐ ÜL kenarı
☐ EC kenarı



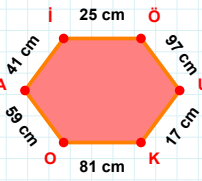
|ÜÖ| + |FŞ| =

Cevap: cm



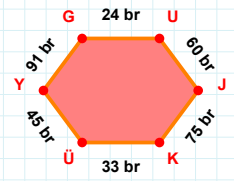
64 br hangi kenara aittir?

- ☐ GY kenarı
☐ UG kenarı
☐ NG kenarı



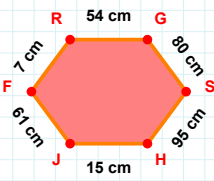
41 cm hangi kenara aittir?

Kenar:



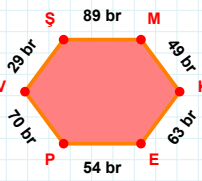
|KÜ| + |JK| =

Cevap: br



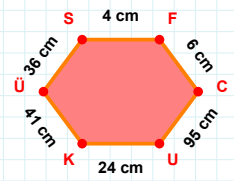
54 cm hangi kenara aittir?

Kenar:



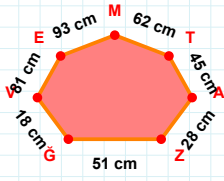
|KE| + |VŞ| =

Cevap: br



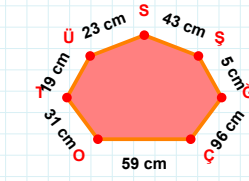
|CU| kaç cmdir?

- ☐ 94 cm
☐ 95 cm
☐ 96 cm

SORU: Aşağıdaki geometrik şekillerle ilgili soruları cevaplayınız.

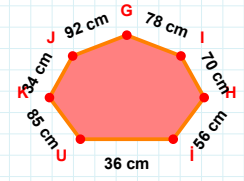
$|ZA| + |AT| = \dots$

Cevap: cm



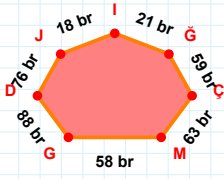
23 cm hangi kenara aittir?

Kenar:



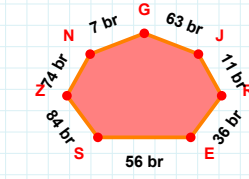
|JK| kaç cm'dir?

- ☐ 33 cm
☐ 34 cm
☐ 35 cm



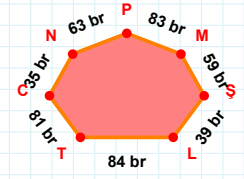
$|DG| + |ÇĞ| = \dots$

Cevap: br



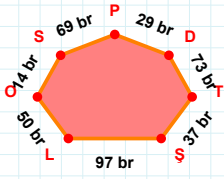
$|NZ| + |GN| = \dots$

Cevap: br



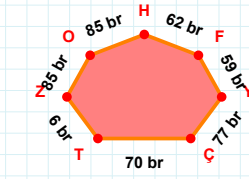
83 br hangi kenara aittir?

- ☐ MP kenarı
☐ NM kenarı
☐ CT kenarı



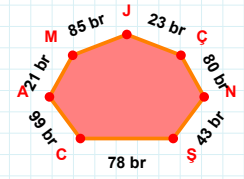
$|LS| + |PS| = \dots$

Cevap: br



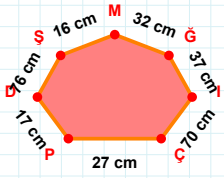
62 br hangi kenara aittir?

- ☐ ÇY kenarı
☐ ZÇ kenarı
☐ ZT kenarı



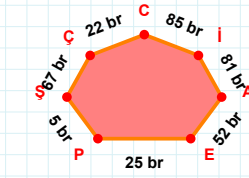
80 br hangi kenara aittir?

Kenar:



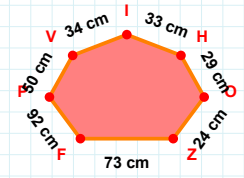
70 cm hangi kenara aittir?

Kenar:



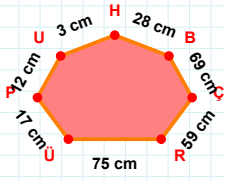
85 br hangi kenara aittir?

Kenar:

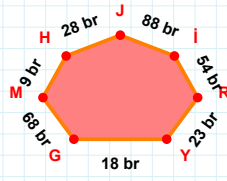


34 cm hangi kenara aittir?

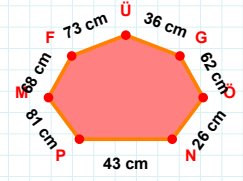
Kenar:

SORU: Aşağıdaki geometrik şekillerle ilgili soruları cevaplayınız.**28 cm hangi kenara aittir?**

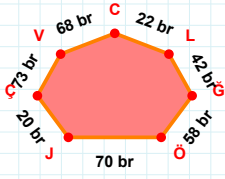
- ☐ UÜ kenarı
☐ BH kenarı
☐ ÇB kenarı

**88 br hangi kenara aittir?**

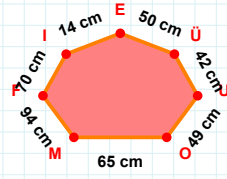
Kenar:

**36 cm hangi kenara aittir?**

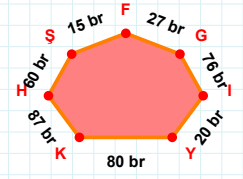
- ☐ MP kenarı
☐ PG kenarı
☐ PN kenarı

**|JÖ| kaç brdir?**

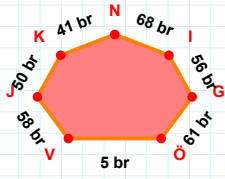
- ☐ 69 br
☐ 70 br
☐ 71 br

**|İF| + |UÜ| =**

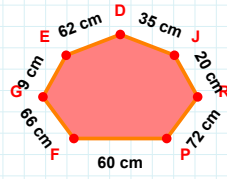
Cevap: cm

**|KY| kaç brdir?**

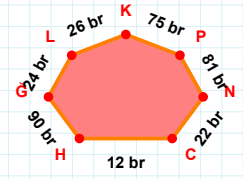
- ☐ 79 br
☐ 80 br
☐ 81 br

**68 br hangi kenara aittir?**

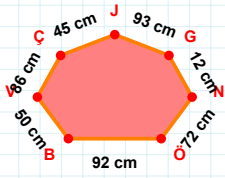
- ☐ ÖG kenarı
☐ KV kenarı
☐ JV kenarı

**|PR| kaç cmdir?**

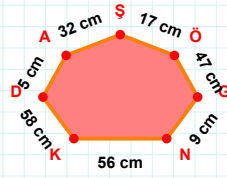
- ☐ 71 cm
☐ 72 cm
☐ 73 cm

**|GH| kaç brdir?**

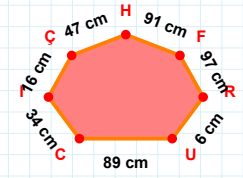
- ☐ 89 br
☐ 90 br
☐ 91 br

**|VB| kaç cmdir?**

- ☐ 49 cm
☐ 50 cm
☐ 51 cm

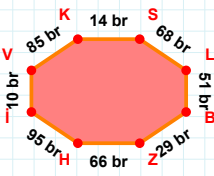
**47 cm hangi kenara aittir?**

Kenar:

**91 cm hangi kenara aittir?**

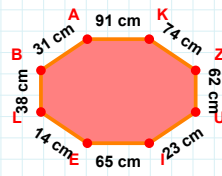
- ☐ Çİ kenarı
☐ FH kenarı
☐ FC kenarı

SORU: Aşağıdaki geometrik şekillerle ilgili soruları cevaplayınız.



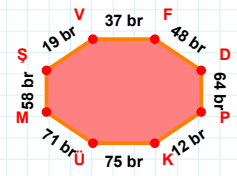
51 br hangi kenara aittir?

Kenar:



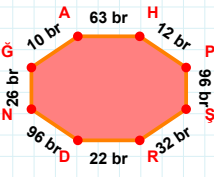
$|AK| + |KZ| = \dots$

Cevap: cm



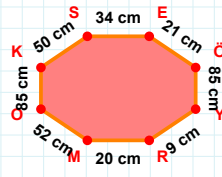
$|MS| + |VF| = \dots$

Cevap: br



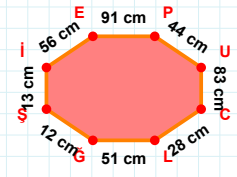
$|PS|$ kaç brdir?

- ☐ 95 br
☐ 96 br
☐ 97 br



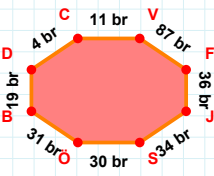
50 cm hangi kenara aittir?

- ☐ KS kenarı
☐ ÖO kenarı
☐ YR kenarı



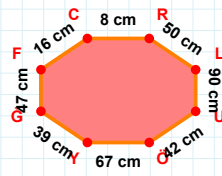
$|Ş| + |PU| = \dots$

Cevap: cm



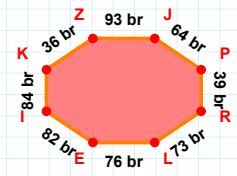
4 br hangi kenara aittir?

- ☐ VF kenarı
☐ CV kenarı
☐ VJ kenarı



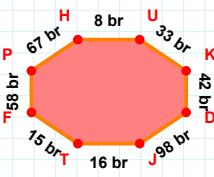
16 cm hangi kenara aittir?

- ☐ LY kenarı
☐ RL kenarı
☐ YG kenarı



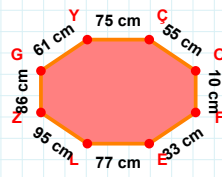
84 br hangi kenara aittir?

Kenar:



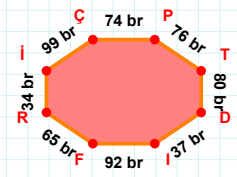
67 br hangi kenara aittir?

- ☐ DJ kenarı
☐ JT kenarı
☐ FH kenarı



$|FE|$ kaç cmdir?

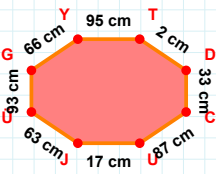
- ☐ 32 cm
☐ 33 cm
☐ 34 cm



99 br hangi kenara aittir?

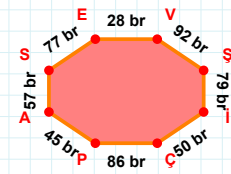
- ☐ ÇP kenarı
☐ FR kenarı
☐ Fİ kenarı

SORU: Aşağıdaki geometrik şekillerle ilgili soruları cevaplayınız.



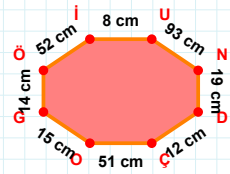
2 cm hangi kenara aittir?

Kenar:



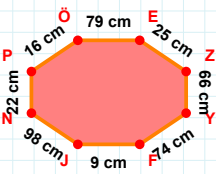
77 br hangi kenara aittir?

- ☐ SE kenarı
☐ EV kenarı
☐ VS kenarı
☐ SC kenarı



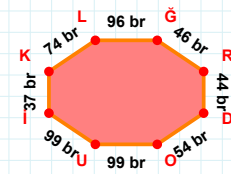
52 cm hangi kenara aittir?

- ☐ İU kenarı
☐ GU kenarı
☐ Öİ kenarı



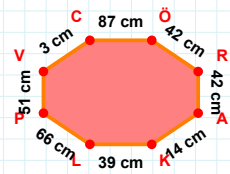
|NP| kaç cm'dir?

- ☐ 21 cm
☐ 22 cm
☐ 23 cm



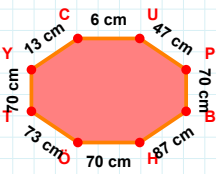
|LG| + |RD| =

Cevap: br



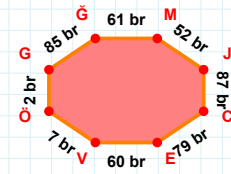
3 cm hangi kenara aittir?

- ☐ RA kenarı
☐ KL kenarı
☐ AV kenarı



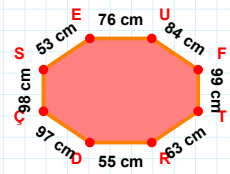
|PB| + |TY| =

Cevap: cm



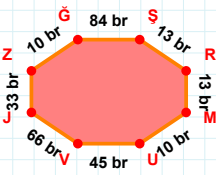
61 br hangi kenara aittir?

Kenar:



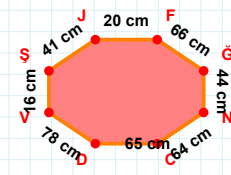
53 cm hangi kenara aittir?

- ☐ ÇT kenarı
☐ TR kenarı
☐ ÇS kenarı



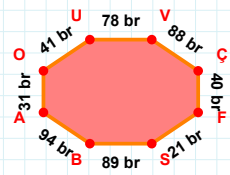
|RM| kaç br'dir?

- ☐ 12 br
☐ 13 br
☐ 14 br



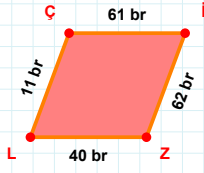
|FG| + |GN| =

Cevap: cm



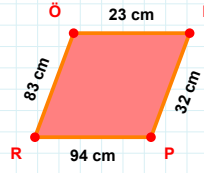
41 br hangi kenara aittir?

- ☐ SB kenarı
☐ ÇA kenarı
☐ UV kenarı

SORU: Aşağıdaki geometrik şekillerle ilgili soruları cevaplayınız.

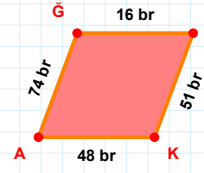
$$|LZ| + |CI| = \dots$$

Cevap: br



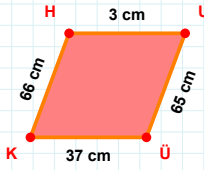
32 cm hangi kenara aittir?

Kenar:



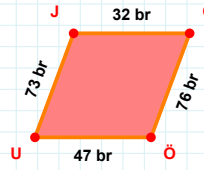
74 br hangi kenara aittir?

- ☐ RK kenarı
☐ KA kenarı
☐ GK kenarı



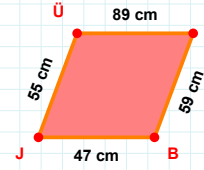
$$|HU| + |ÜÜ| = \dots$$

Cevap: cm



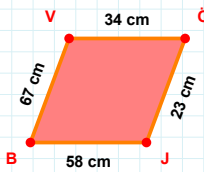
73 br hangi kenara aittir?

- ☐ ÇU kenarı
☐ ÖU kenarı
☐ JÇ kenarı



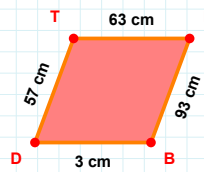
|JU| kaç cm'dir?

- ☐ 54 cm
☐ 55 cm
☐ 56 cm



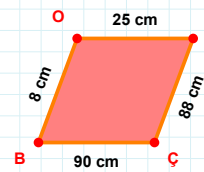
$$|BV| + |JB| = \dots$$

Cevap: cm



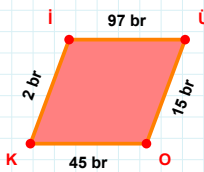
|DT| kaç cm'dir?

- ☐ 56 cm
☐ 57 cm
☐ 58 cm



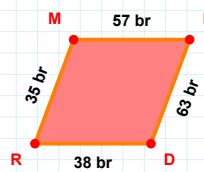
8 cm hangi kenara aittir?

- ☐ OÇ kenarı
☐ BO kenarı
☐ OH kenarı



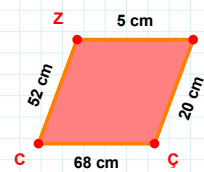
45 br hangi kenara aittir?

Kenar:



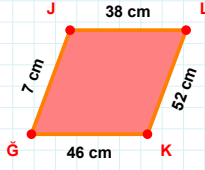
|DR| kaç br'dir?

- ☐ 37 br
☐ 38 br
☐ 39 br



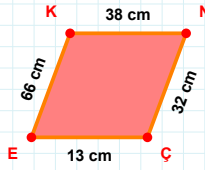
52 cm hangi kenara aittir?

- ☐ ZŞ kenarı
☐ ŞÇ kenarı
☐ ZÇ kenarı

SORU: Aşağıdaki geometrik şekillerle ilgili soruları cevaplayınız.

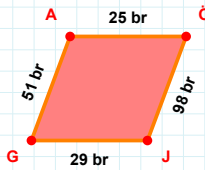
46 cm hangi kenara aittir?

Kenar:



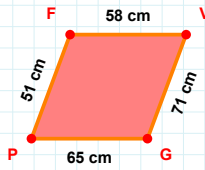
66 cm hangi kenara aittir?

Kenar:

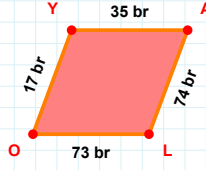


51 br hangi kenara aittir?

- ☐ AJ kenarı
☐ JG kenarı
☐ ÖJ kenarı

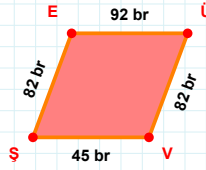
 $|GP| + |VG| = \dots$

Cevap: cm



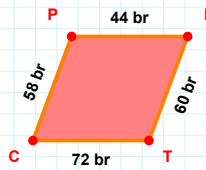
|YA| kaç brdir?

- ☐ 34 br
☐ 35 br
☐ 36 br



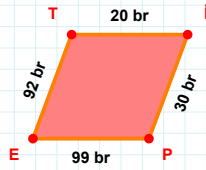
82 br hangi kenara aittir?

- ☐ ŞE kenarı
☐ ÜŞ kenarı
☐ ÜV kenarı



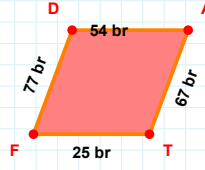
|CP| kaç brdir?

- ☐ 57 br
☐ 58 br
☐ 59 br



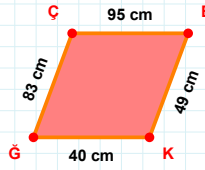
99 br hangi kenara aittir?

Kenar:



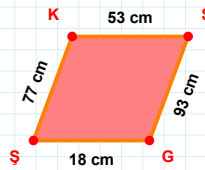
54 br hangi kenara aittir?

Kenar:



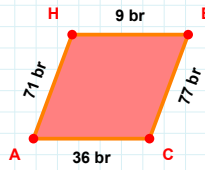
83 cm hangi kenara aittir?

Kenar:



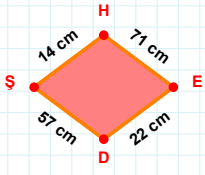
93 cm hangi kenara aittir?

Kenar:



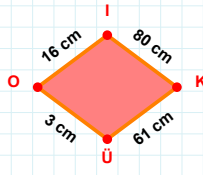
|BC| kaç brdir?

- ☐ 76 br
☐ 77 br
☐ 78 br

SORU: Aşağıdaki geometrik şekillerle ilgili soruları cevaplayınız.

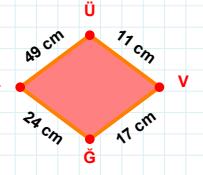
|HE| kaç cmdir?

- ☐ 70 cm
☐ 71 cm
☐ 72 cm



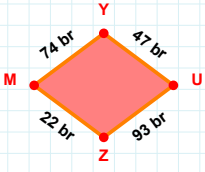
|OI| kaç cmdir?

- ☐ 15 cm
☐ 16 cm
☐ 17 cm



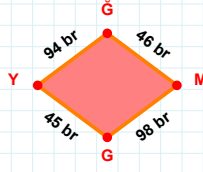
|GL| kaç cmdir?

- ☐ 23 cm
☐ 24 cm
☐ 25 cm



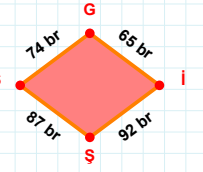
74 br hangi kenara aittir?

- ☐ MU kenarı
☐ ZM kenarı
☐ YU kenarı



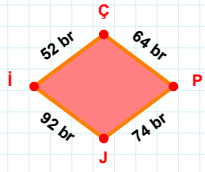
94 br hangi kenara aittir?

- ☐ YG kenarı
☐ GM kenarı
☐ MY kenarı



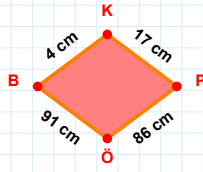
|SG| kaç brdir?

- ☐ 73 br
☐ 74 br
☐ 75 br



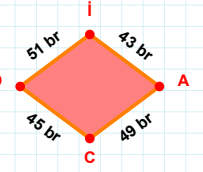
|ÇP| kaç brdir?

- ☐ 63 br
☐ 64 br
☐ 65 br



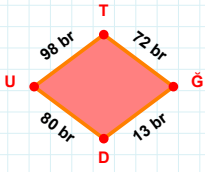
|KP| kaç cmdir?

- ☐ 16 cm
☐ 17 cm
☐ 18 cm



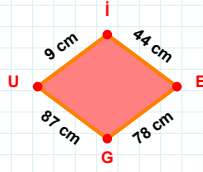
|İA| + |OI| =

Cevap: br



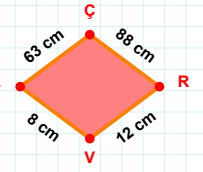
98 br hangi kenara aittir?

- ☐ TD kenarı
☐ GD kenarı
☐ TĞ kenarı



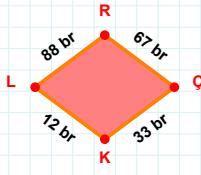
|İE| + |EG| =

Cevap: cm

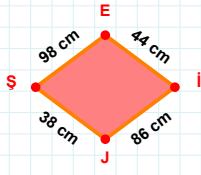


8 cm hangi kenara aittir?

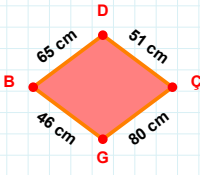
Kenar:

SORU: Aşağıdaki geometrik şekillerle ilgili soruları cevaplayınız.**|LR| kaç brdir?**

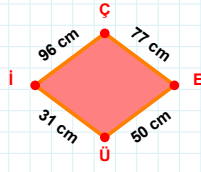
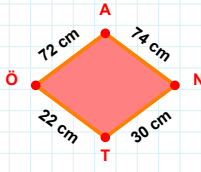
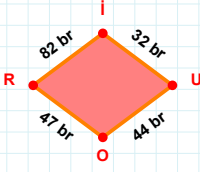
- ☐ 87 br
☐ 88 br
☐ 89 br

**|EI| kaç cmdir?**

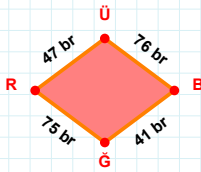
- ☐ 43 cm
☐ 44 cm
☐ 45 cm

**65 cm hangi kenara aittir?**

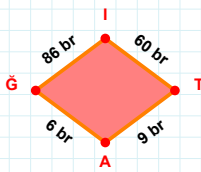
- ☐ BÇ kenarı
☐ ÇG kenarı
☐ GB kenarı

**|ÇE| + |Üİ| =****Cevap: cm****|NT| + |TÖ| =****Cevap: cm****|UO| kaç brdir?**

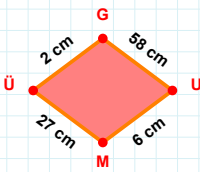
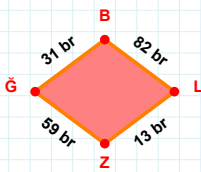
- ☐ 43 br
☐ 44 br
☐ 45 br

**|ÜB| kaç brdir?**

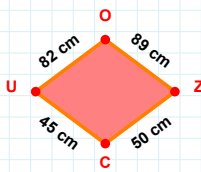
- ☐ 75 br
☐ 76 br
☐ 77 br

**86 br hangi kenara aittir?**

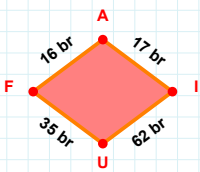
- ☐ AĞ kenarı
☐ TĞ kenarı
☐ TA kenarı

**6 cm hangi kenara aittir?****Kenar:****31 br hangi kenara aittir?**

- ☐ ĞB kenarı
☐ ZB kenarı
☐ BL kenarı

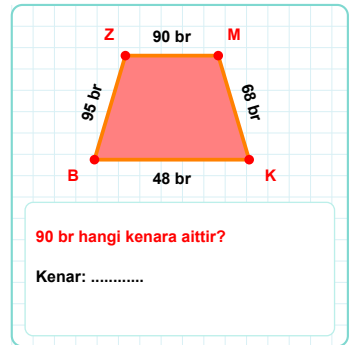
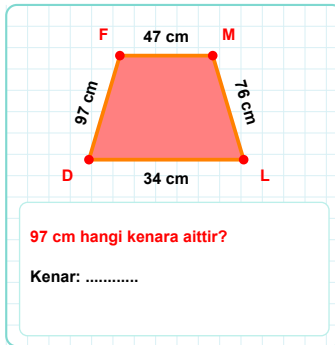
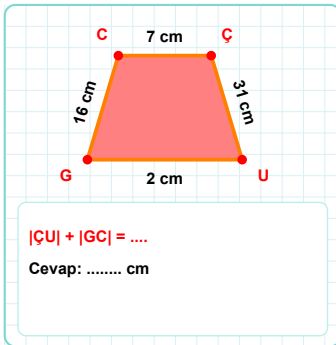
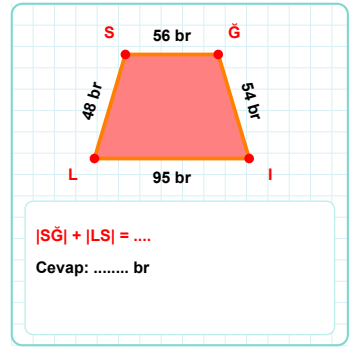
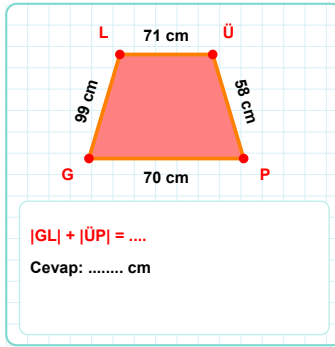
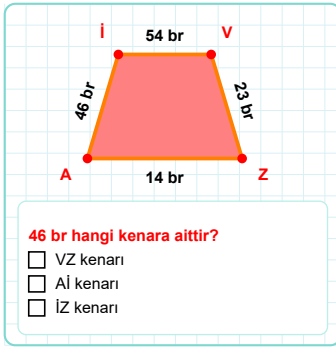
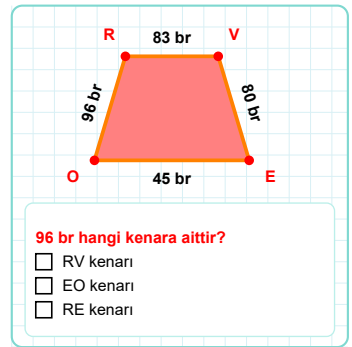
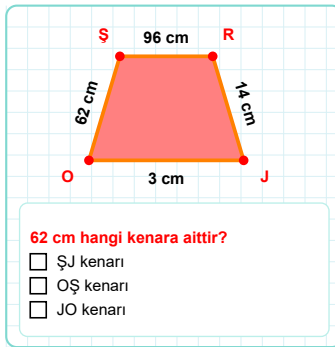
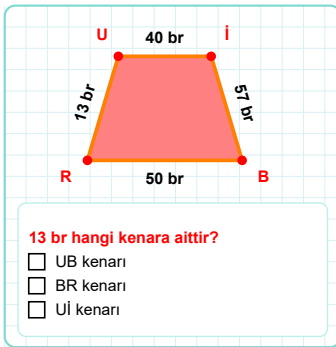
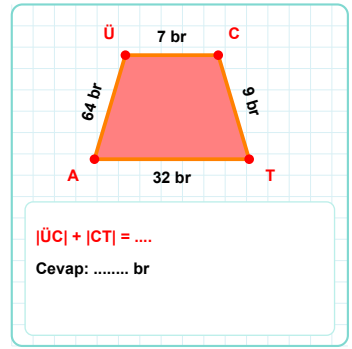
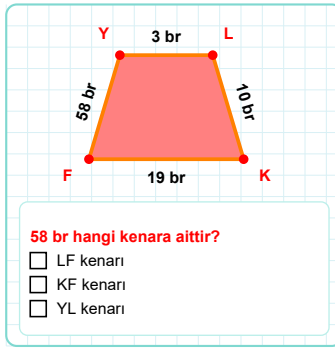
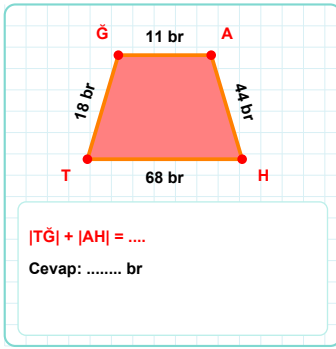
**82 cm hangi kenara aittir?**

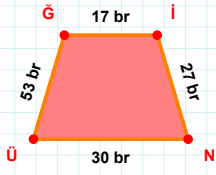
- ☐ UZ kenarı
☐ UO kenarı
☐ CU kenarı

**16 br hangi kenara aittir?**

- ☐ AI kenarı
☐ IU kenarı
☐ UA kenarı

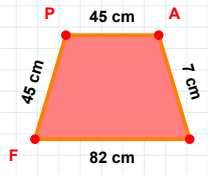
SORU: Aşağıdaki geometrik şekillerle ilgili soruları cevaplayınız.



SORU: Aşağıdaki geometrik şekillerle ilgili soruları cevaplayınız.

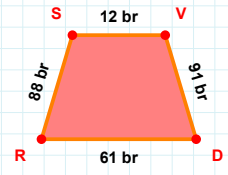
$|NÜ| + |İN| = \dots$

Cevap: br



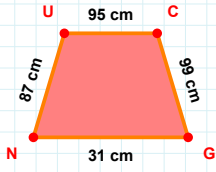
45 cm hangi kenara aittir?

- ☐ FA kenarı
☐ FP kenarı
☐ PA kenarı



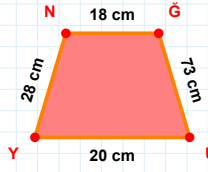
|SV| kaç brdir?

- ☐ 11 br
☐ 12 br
☐ 13 br



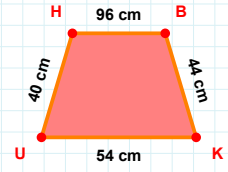
87 cm hangi kenara aittir?

- ☐ NU kenarı
☐ GN kenarı
☐ CN kenarı



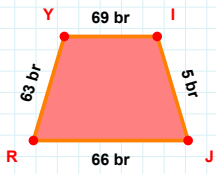
18 cm hangi kenara aittir?

Kenar:



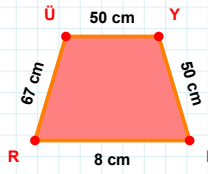
$|BK| + |UH| = \dots$

Cevap: cm



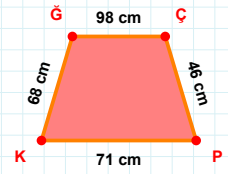
$|RY| + |İJ| = \dots$

Cevap: br



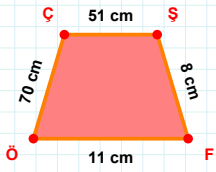
$|YF| + |RÜ| = \dots$

Cevap: cm



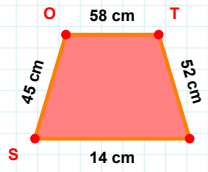
68 cm hangi kenara aittir?

- ☐ ÇK kenarı
☐ PK kenarı
☐ GÇ kenarı



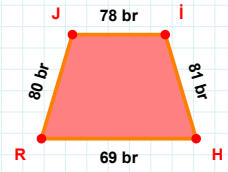
$|ÖÇ| + |ŞF| = \dots$

Cevap: cm



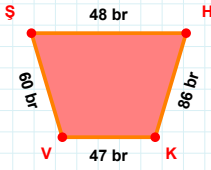
$|OT| + |İS| = \dots$

Cevap: cm



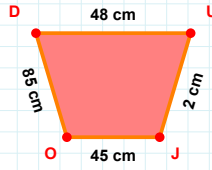
80 br hangi kenara aittir?

- ☐ RJ kenarı
☐ JH kenarı
☐ İH kenarı

SORU: Aşağıdaki geometrik şekillerle ilgili soruları cevaplayınız.

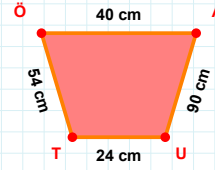
$$|KV| + |HK| = \dots$$

Cevap: br



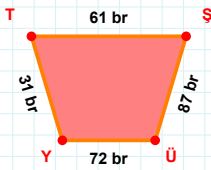
$$|JO| + |UJ| = \dots$$

Cevap: cm



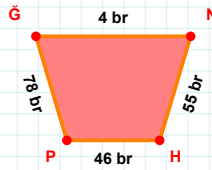
24 cm hangi kenara aittir?

Kenar:



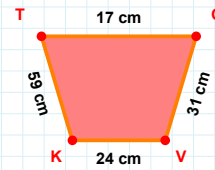
|TŞ| kaç brdir?

- ☐ 60 br
☐ 61 br
☐ 62 br



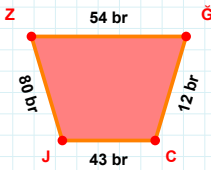
$$|PĞ| + |ĞN| = \dots$$

Cevap: br



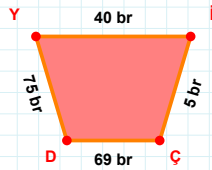
59 cm hangi kenara aittir?

- ☐ TG kenarı
☐ VT kenarı
☐ KT kenarı



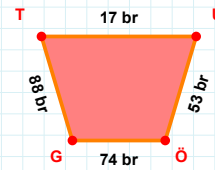
80 br hangi kenara aittir?

- ☐ ĞC kenarı
☐ CJ kenarı
☐ CZ kenarı



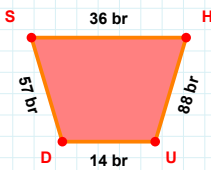
75 br hangi kenara aittir?

- ☐ İÇ kenarı
☐ Yİ kenarı
☐ İD kenarı



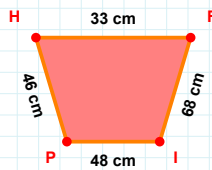
|TU| kaç brdir?

- ☐ 16 br
☐ 17 br
☐ 18 br



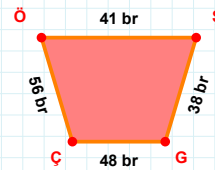
57 br hangi kenara aittir?

- ☐ DS kenarı
☐ SU kenarı
☐ UD kenarı



33 cm hangi kenara aittir?

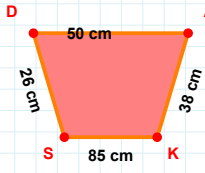
Kenar:



|ÇÖ| kaç brdir?

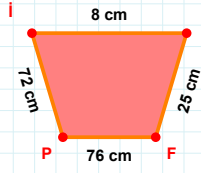
- ☐ 55 br
☐ 56 br
☐ 57 br

SORU: Aşağıdaki geometrik şekillerle ilgili soruları cevaplayınız.



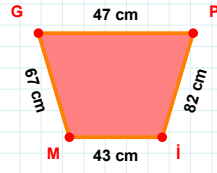
38 cm hangi kenara aittir?

Kenar:



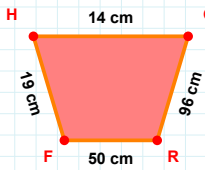
72 cm hangi kenara aittir?

- ☐ PR kenarı
☐ İR kenarı
☐ RF kenarı

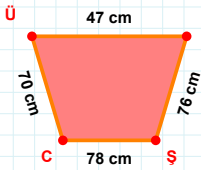


67 cm hangi kenara aittir?

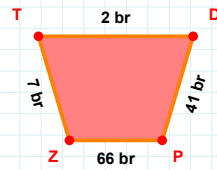
Kenar:

 $|GR| + |FH| = \dots$

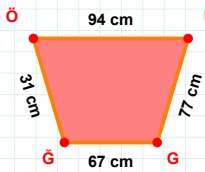
Cevap: cm

 $|ÜE|$ kaç cmdir?

- ☐ 46 cm
☐ 47 cm
☐ 48 cm

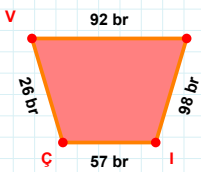
 $|DP|$ kaç brdir?

- ☐ 40 br
☐ 41 br
☐ 42 br



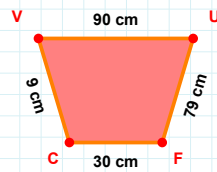
77 cm hangi kenara aittir?

Kenar:

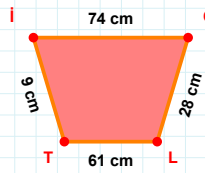


57 br hangi kenara aittir?

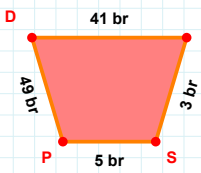
Kenar:

 $|VU|$ kaç cmdir?

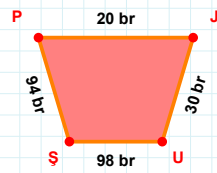
- ☐ 89 cm
☐ 90 cm
☐ 91 cm

 $|LT| + |OL| = \dots$

Cevap: cm

 $|SP| + |DÜ| = \dots$

Cevap: br

 $|UŞ| + |PJ| = \dots$

Cevap: br

SÜREÇ ODAKLI DEĞERLENDİRME ÖLÇEĞİ

Geliştirilmeli (0-109)	İyi (110-187)	Çok İyi (188-265)	Mükemmel (266-312)
<input type="checkbox"/>	<input type="checkbox"/>	<input type="checkbox"/>	<input type="checkbox"/>

Hazırlayan:

Bu bölüme sınıfınızın ilgili kazanıma yönelik genel durumuna ilişkin gözlem ve izlenimlerinizi, öğrencilerinizin bu kazanımla ilgili öğrenme eksikliklerini ve bu eksikliklerin giderilmesi amacıyla yaptığınız/yapmayı planladığınız faaliyetleri not edebilirsiniz.

No	Adı - Soyadı	Toplam Puan	Değerlendirme
1			
2			
3			
4			
5			
6			
7			
8			
9			
10			
11			
12			
13			
14			
15			
16			
17			
18			
19			
20			
21			
22			
23			
24			
25			
26			
27			
28			
29			
30			
31			
32			
33			
34			
35			

Hazırlayan: