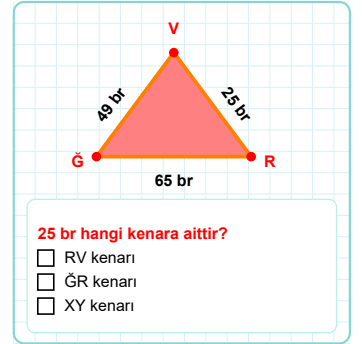
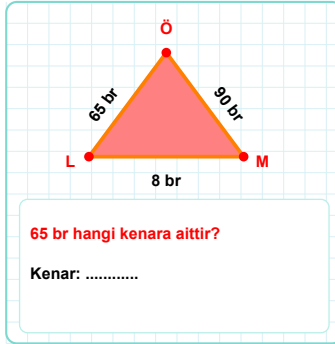
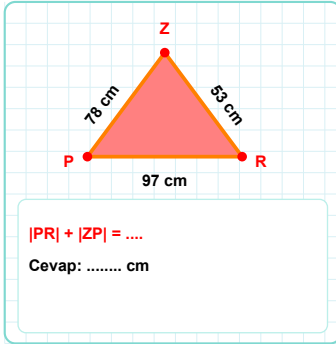
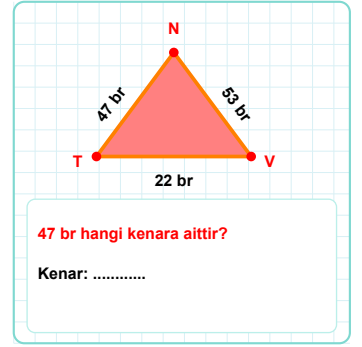
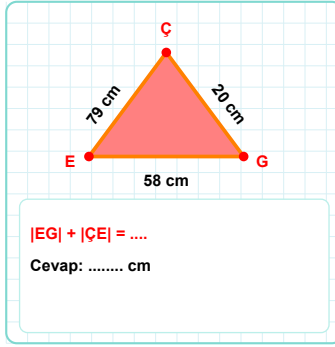
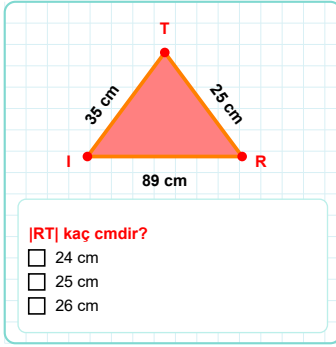
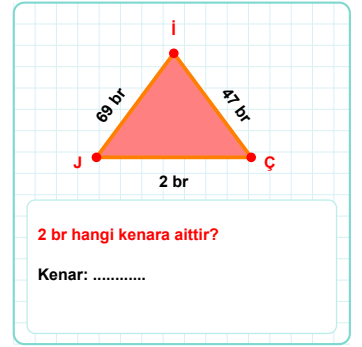
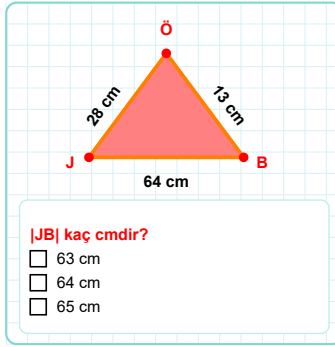
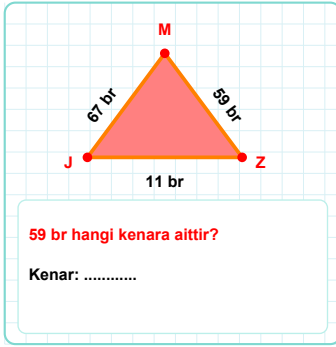
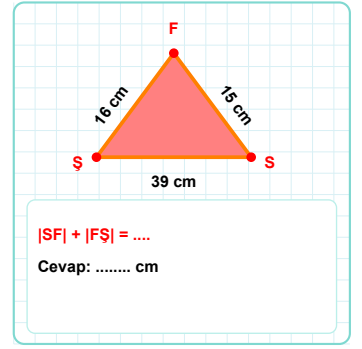
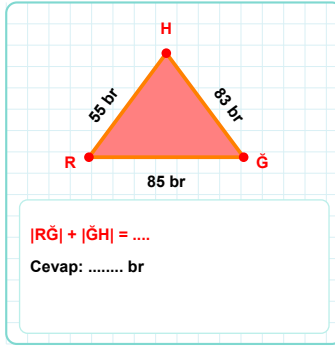
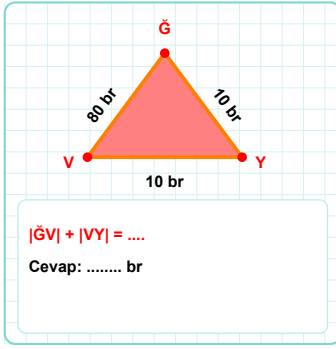
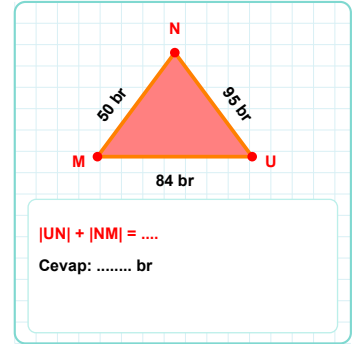
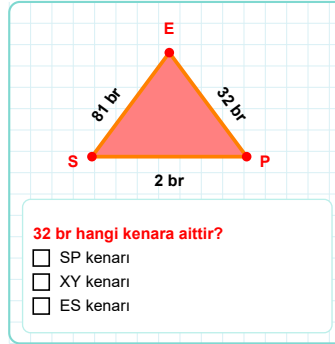
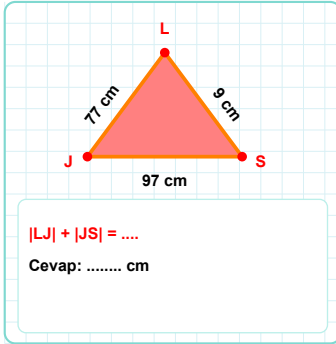
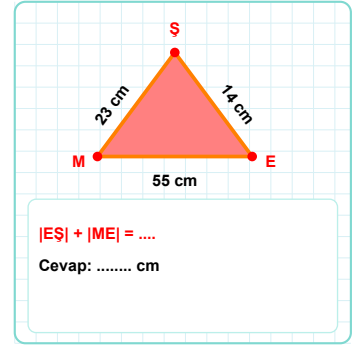
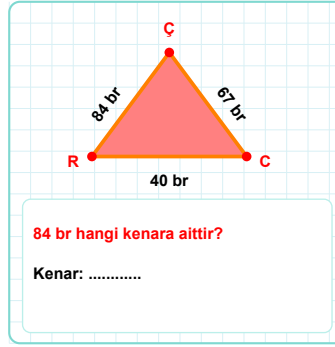
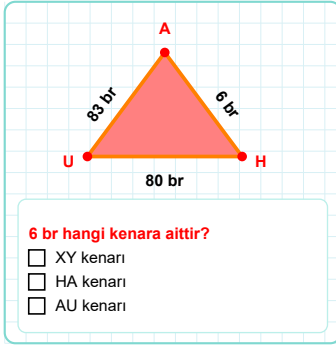
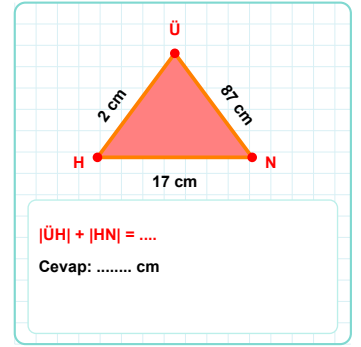
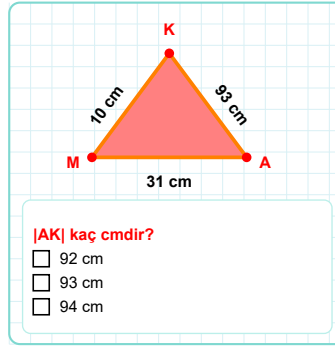
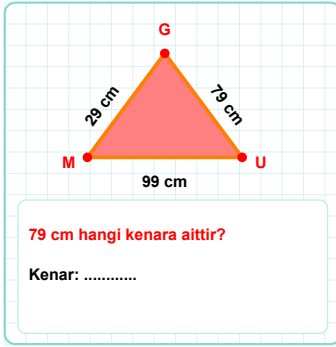
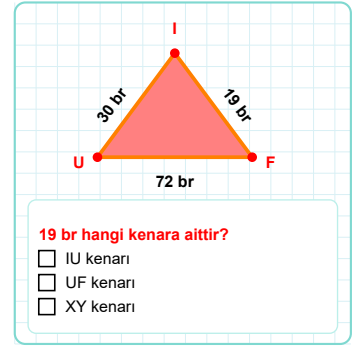
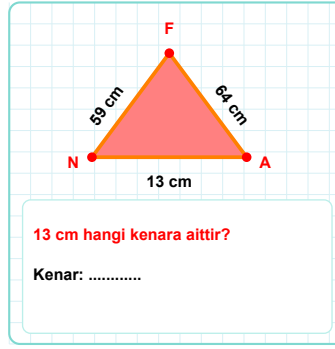
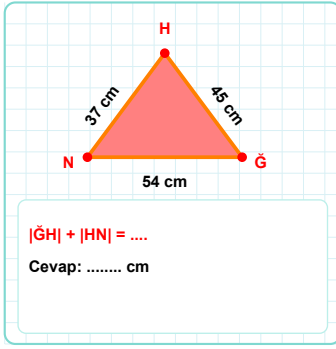
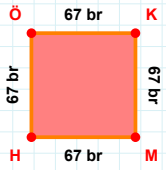


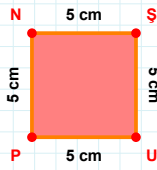
SORU: Aşağıdaki geometrik şekillerle ilgili soruları cevaplayınız.

SORU: Aşağıdaki geometrik şekillerle ilgili soruları cevaplayınız.

SORU: Aşağıdaki geometrik şekillerle ilgili soruları cevaplayınız.

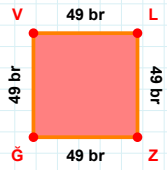
67 br hangi kenara aittir?

- ☐ KM kenarı
☐ ÖK kenarı
☐ ÖM kenarı



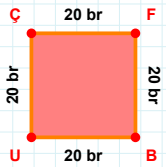
5 cm hangi kenara aittir?

Kenar:



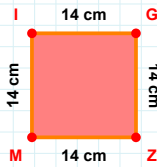
49 br hangi kenara aittir?

- ☐ VL kenarı
☐ ZV kenarı
☐ ZG kenarı



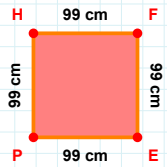
|UÇ| kaç brdir?

- ☐ 19 br
☐ 20 br
☐ 21 br



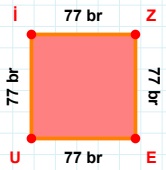
14 cm hangi kenara aittir?

Kenar:



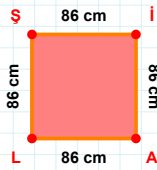
99 cm hangi kenara aittir?

- ☐ PF kenarı
☐ FE kenarı
☐ HF kenarı



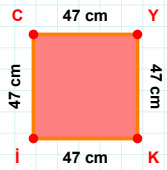
|UI| + |EU| =

Cevap: br



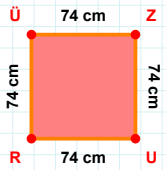
86 cm hangi kenara aittir?

- ☐ LŞ kenarı
☐ AŞ kenarı
☐ İA kenarı



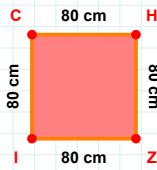
47 cm hangi kenara aittir?

Kenar:



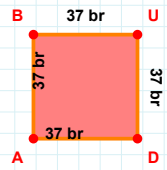
74 cm hangi kenara aittir?

- ☐ ÜZ kenarı
☐ RZ kenarı
☐ UR kenarı



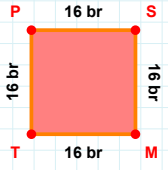
80 cm hangi kenara aittir?

Kenar:



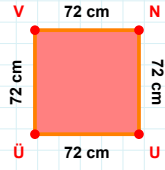
37 br hangi kenara aittir?

Kenar:

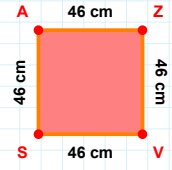
SORU: Aşağıdaki geometrik şekillerle ilgili soruları cevaplayınız.

16 br hangi kenara aittir?

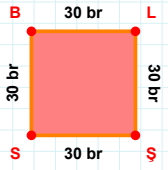
- ☐ ST kenarı
☐ SM kenarı
☐ PS kenarı

 $|ÜV| + |NU| = \dots$

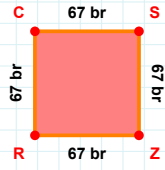
Cevap: cm

 $|AZ| + |ZV| = \dots$

Cevap: cm

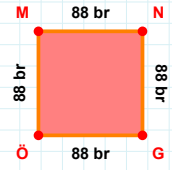
 $|BL|$ kaç brdir?

- ☐ 29 br
☐ 30 br
☐ 31 br



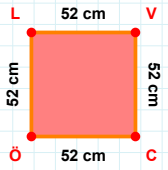
67 br hangi kenara aittir?

Kenar:



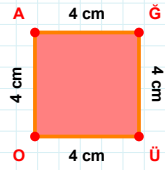
88 br hangi kenara aittir?

Kenar:

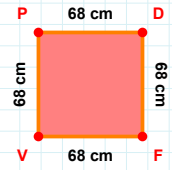


52 cm hangi kenara aittir?

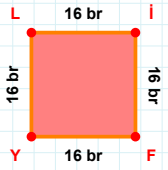
- ☐ VC kenarı
☐ ÖV kenarı
☐ LV kenarı

 $|GÜ|$ kaç cmdir?

- ☐ 3 cm
☐ 4 cm
☐ 5 cm

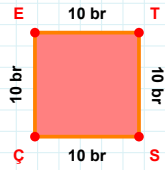
 $|DF|$ kaç cmdir?

- ☐ 67 cm
☐ 68 cm
☐ 69 cm

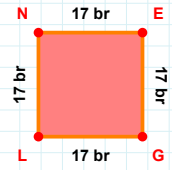


16 br hangi kenara aittir?

- ☐ LI kenarı
☐ Yİ kenarı
☐ FY kenarı

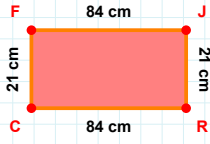
 $|SÇ|$ kaç brdir?

- ☐ 9 br
☐ 10 br
☐ 11 br



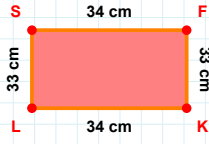
17 br hangi kenara aittir?

Kenar:

SORU: Aşağıdaki geometrik şekillerle ilgili soruları cevaplayınız.

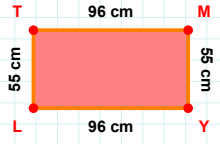
21 cm hangi kenara aittir?

Kenar:

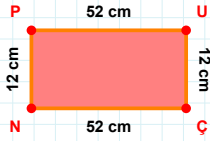


33 cm hangi kenara aittir?

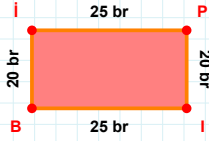
- ☐ FK kenarı
☐ LF kenarı
☐ KL kenarı

 $|TM| + |YL| = \dots$

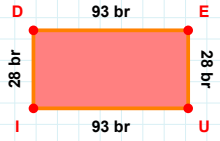
Cevap: cm

 $|NP|$ kaç cm'dir?

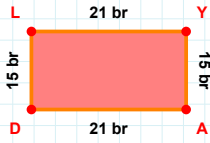
- ☐ 11 cm
☐ 12 cm
☐ 13 cm

 $|BI|$ kaç br'dir?

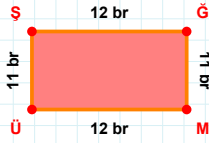
- ☐ 19 br
☐ 20 br
☐ 21 br

 $|ID| + |DE| = \dots$

Cevap: br

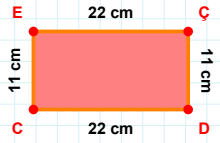
 $|DL| + |LY| = \dots$

Cevap: br

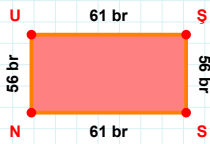


11 br hangi kenara aittir?

- ☐ MÜ kenarı
☐ ĞM kenarı
☐ ÜĞ kenarı

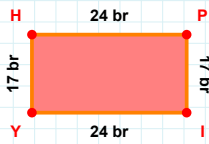
 $|EC|$ kaç cm'dir?

- ☐ 21 cm
☐ 22 cm
☐ 23 cm

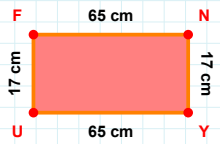


61 br hangi kenara aittir?

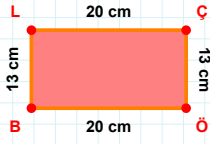
Kenar:

 $|IY| + |PI| = \dots$

Cevap: br

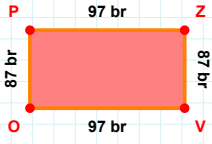
 $|YU| + |NY| = \dots$

Cevap: cm

SORU: Aşağıdaki geometrik şekillerle ilgili soruları cevaplayınız.

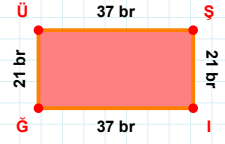
20 cm hangi kenara aittir?

Kenar:

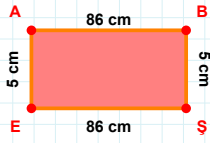


97 br hangi kenara aittir?

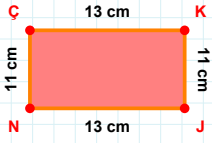
Kenar:

 $|ÜŞ| + |ÜŞ| = \dots$

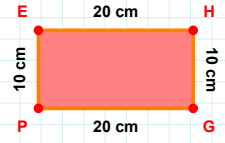
Cevap: br

 $|BS| + |SE| = \dots$

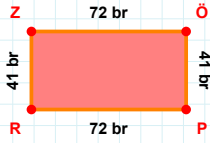
Cevap: cm

 $|JN| + |KJ| = \dots$

Cevap: cm

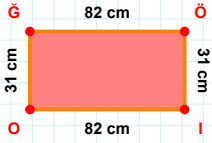
 $|HG| + |EH| = \dots$

Cevap: cm

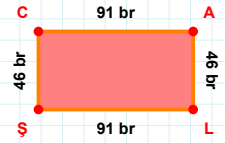


72 br hangi kenara aittir?

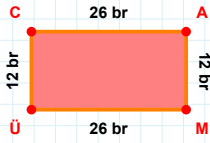
Kenar:

 $|IO|$ kaç cm'dir?

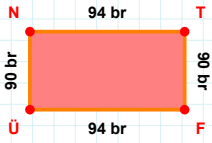
- ☐ 81 cm
☐ 82 cm
☐ 83 cm

 $|AL|$ kaç br'dir?

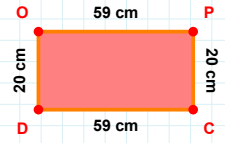
- ☐ 45 br
☐ 46 br
☐ 47 br

 $|AM| + |MÜ| = \dots$

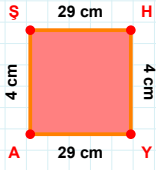
Cevap: br

 $|ÜN| + |FÜ| = \dots$

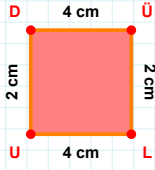
Cevap: br

 $|DO|$ kaç cm'dir?

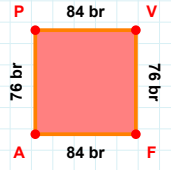
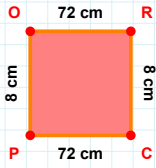
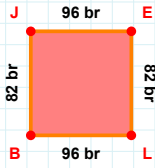
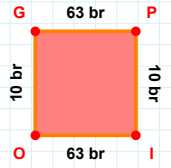
- ☐ 19 cm
☐ 20 cm
☐ 21 cm

SORU: Aşağıdaki geometrik şekillerle ilgili soruları cevaplayınız.**|AS| kaç cm'dir?**

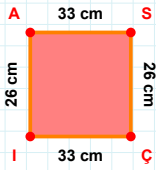
- ☐ 3 cm
☐ 4 cm
☐ 5 cm

**2 cm hangi kenara aittir?**

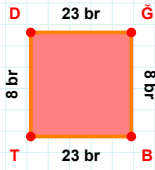
- ☐ UÜ kenarı
☐ LU kenarı
☐ UD kenarı

**|AP| + |VF| =****Cevap: br****|PO| + |RC| =****Cevap: cm****|EL| + |LB| =****Cevap: br****|IO| kaç br'dir?**

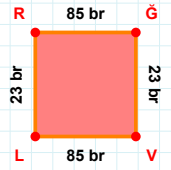
- ☐ 62 br
☐ 63 br
☐ 64 br

**26 cm hangi kenara aittir?**

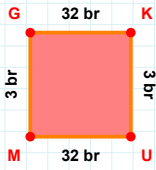
- ☐ SÇ kenarı
☐ Çİ kenarı
☐ SI kenarı

**|BT| kaç br'dir?**

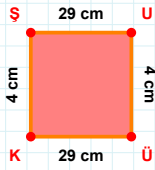
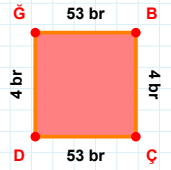
- ☐ 22 br
☐ 23 br
☐ 24 br

**23 br hangi kenara aittir?**

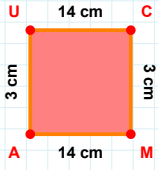
- ☐ ĞV kenarı
☐ LĞ kenarı
☐ LR kenarı

**|UM| kaç br'dir?**

- ☐ 31 br
☐ 32 br
☐ 33 br

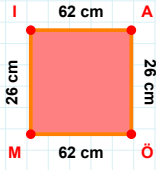
**|ÜK| + |UÜ| =****Cevap: cm****|DĞ| kaç br'dir?**

- ☐ 3 br
☐ 4 br
☐ 5 br

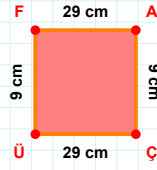
SORU: Aşağıdaki geometrik şekillerle ilgili soruları cevaplayınız.

3 cm hangi kenara aittir?

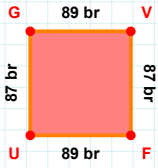
- ☐ CA kenarı
☐ MA kenarı
☐ AU kenarı

 $|AÖ|$ kaç cm'dir?

- ☐ 25 cm
☐ 26 cm
☐ 27 cm

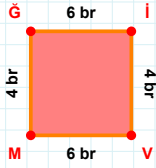
 $|ÜF| + |ÇÜ| = \dots$

Cevap: cm

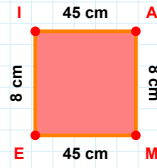


87 br hangi kenara aittir?

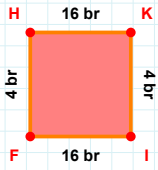
Kenar:

 $|MĞ| + |VM| = \dots$

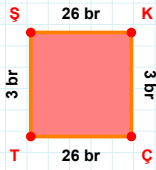
Cevap: br

 $|AM| + |IA| = \dots$

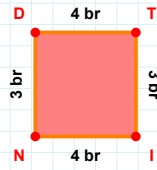
Cevap: cm

 $|FH|$ kaç br'dir?

- ☐ 3 br
☐ 4 br
☐ 5 br

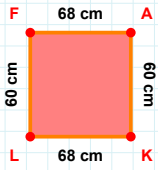
 $|TS| + |ÇT| = \dots$

Cevap: br

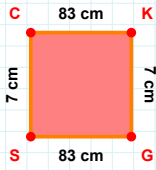


4 br hangi kenara aittir?

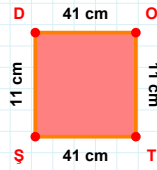
Kenar:

 $|LF|$ kaç cm'dir?

- ☐ 59 cm
☐ 60 cm
☐ 61 cm

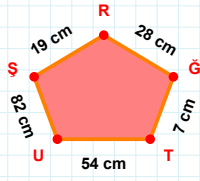
 $|KG|$ kaç cm'dir?

- ☐ 6 cm
☐ 7 cm
☐ 8 cm



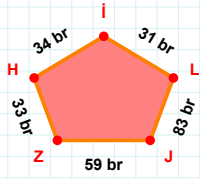
11 cm hangi kenara aittir?

Kenar:

SORU: Aşağıdaki geometrik şekillerle ilgili soruları cevaplayınız.

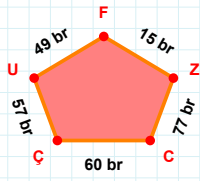
28 cm hangi kenara aittir?

Kenar:



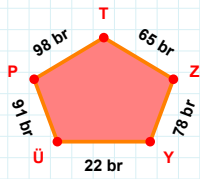
31 br hangi kenara aittir?

- ☐ ZJ kenarı
☐ LZ kenarı
☐ LI kenarı



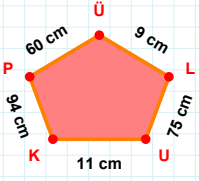
60 br hangi kenara aittir?

Kenar:



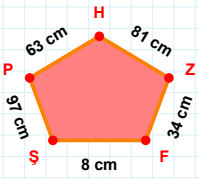
|PÜ| kaç brdir?

- ☐ 90 br
☐ 91 br
☐ 92 br



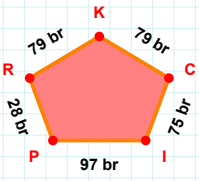
94 cm hangi kenara aittir?

Kenar:



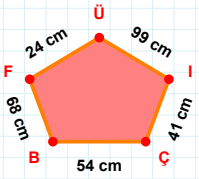
63 cm hangi kenara aittir?

Kenar:



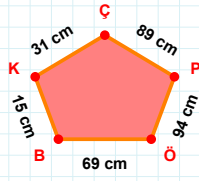
|IC| kaç brdir?

- ☐ 74 br
☐ 75 br
☐ 76 br



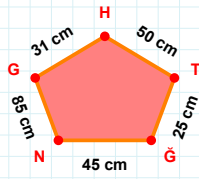
99 cm hangi kenara aittir?

- ☐ ÜF kenarı
☐ IF kenarı
☐ ÇI kenarı



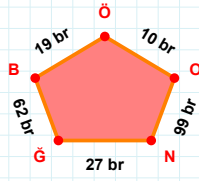
31 cm hangi kenara aittir?

Kenar:



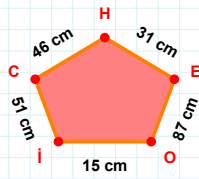
|ŞT| kaç cmdir?

- ☐ 24 cm
☐ 25 cm
☐ 26 cm



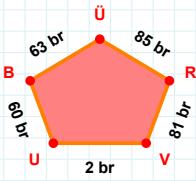
|BG| kaç brdir?

- ☐ 61 br
☐ 62 br
☐ 63 br



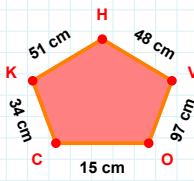
46 cm hangi kenara aittir?

Kenar:

SORU: Aşağıdaki geometrik şekillerle ilgili soruları cevaplayınız.

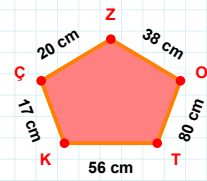
$|ÜB| + |UV| = \dots$

Cevap: br



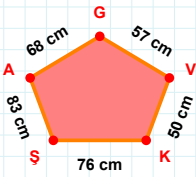
$|KC| + |OV| = \dots$

Cevap: cm



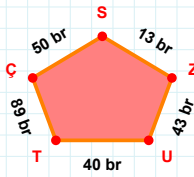
80 cm hangi kenara aittir?

Kenar:



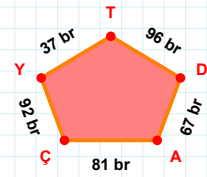
$|AŞ| + |GA| = \dots$

Cevap: cm



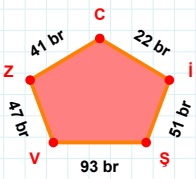
$|SÇ| + |ÇT| = \dots$

Cevap: br



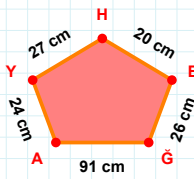
$|TY| + |DT| = \dots$

Cevap: br



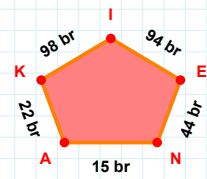
41 br hangi kenara aittir?

Kenar:



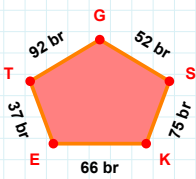
$|AĞ| + |ĞE| = \dots$

Cevap: cm



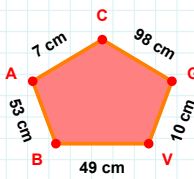
|NE| kaç brdir?

- ☐ 43 br
☐ 44 br
☐ 45 br



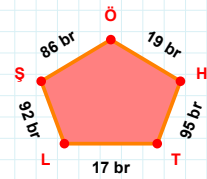
37 br hangi kenara aittir?

Kenar:



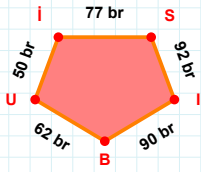
$|AB|$ kaç cm'dir?

- ☐ 52 cm
☐ 53 cm
☐ 54 cm



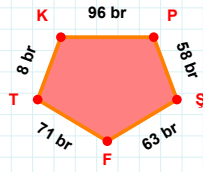
$|ÖŞ| + |TH| = \dots$

Cevap: br

SORU: Aşağıdaki geometrik şekillerle ilgili soruları cevaplayınız.

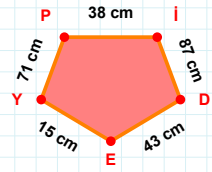
$|BU| + |IS| = \dots$

Cevap: br



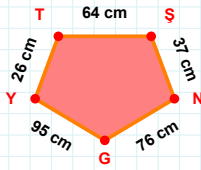
8 br hangi kenara aittir?

- ☐ FT kenarı
☐ FP kenarı
☐ PŞ kenarı



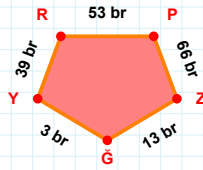
71 cm hangi kenara aittir?

Kenar:



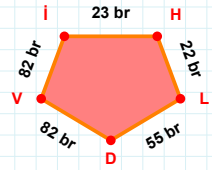
|GY| kaç cm'dir?

- ☐ 94 cm
☐ 95 cm
☐ 96 cm



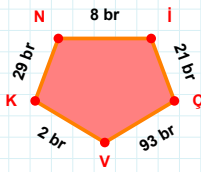
3 br hangi kenara aittir?

Kenar:



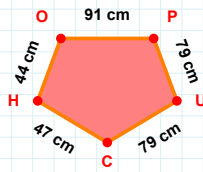
$|DV| + |LD| = \dots$

Cevap: br



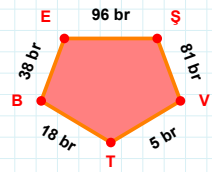
21 br hangi kenara aittir?

Kenar:



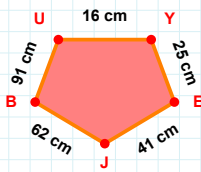
44 cm hangi kenara aittir?

- ☐ HO kenarı
☐ UH kenarı
☐ UC kenarı



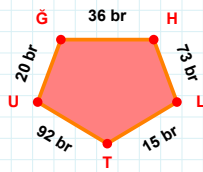
|TB| kaç br'dir?

- ☐ 17 br
☐ 18 br
☐ 19 br



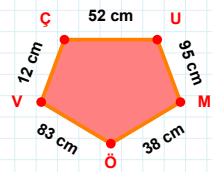
|UY| kaç cm'dir?

- ☐ 15 cm
☐ 16 cm
☐ 17 cm



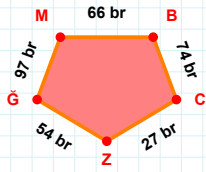
20 br hangi kenara aittir?

- ☐ TU kenarı
☐ UH kenarı
☐ UĞ kenarı

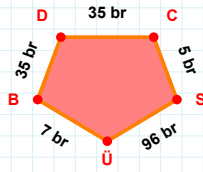


$|MÖ| + |UM| = \dots$

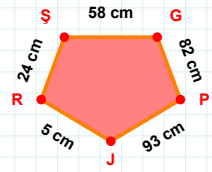
Cevap: cm

SORU: Aşağıdaki geometrik şekillerle ilgili soruları cevaplayınız.**|GM| kaç brdir?**

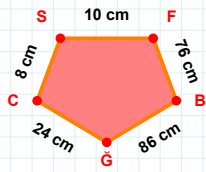
- ☐ 96 br
☐ 97 br
☐ 98 br

**5 br hangi kenara aittir?**

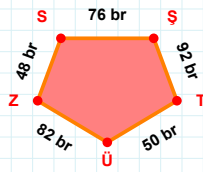
Kenar:

**|GP| kaç cmdir?**

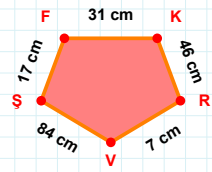
- ☐ 81 cm
☐ 82 cm
☐ 83 cm

**76 cm hangi kenara aittir?**

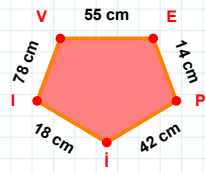
Kenar:

**|ŞT| + |SS| =**

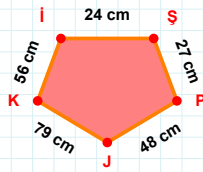
Cevap: br

**17 cm hangi kenara aittir?**

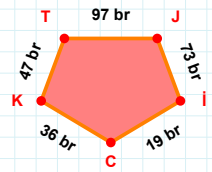
- ☐ FV kenarı
☐ ŞF kenarı
☐ VŞ kenarı

**78 cm hangi kenara aittir?**

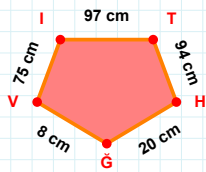
- ☐ Pİ kenarı
☐ ŞF kenarı
☐ IV kenarı

**56 cm hangi kenara aittir?**

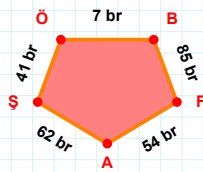
- ☐ İŞ kenarı
☐ Pİ kenarı
☐ JK kenarı

**47 br hangi kenara aittir?**

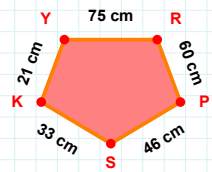
- ☐ TC kenarı
☐ CK kenarı
☐ İC kenarı

**20 cm hangi kenara aittir?**

Kenar:

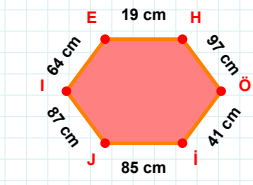
**|ÖB| + |BF| =**

Cevap: br

**46 cm hangi kenara aittir?**

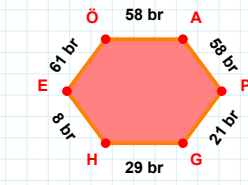
Kenar:

SORU: Aşağıdaki geometrik şekillerle ilgili soruları cevaplayınız.



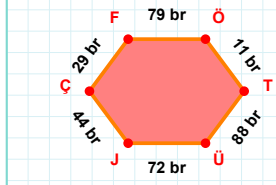
$$|HÖ| + |İJ| = \dots$$

Cevap: cm



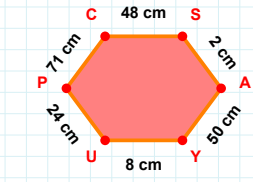
$$|HÖ| \text{ kaç brdir?}$$

- ☐ 7 br
☐ 8 br
☐ 9 br



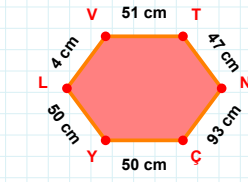
$$|TÜ| \text{ kaç brdir?}$$

- ☐ 87 br
☐ 88 br
☐ 89 br



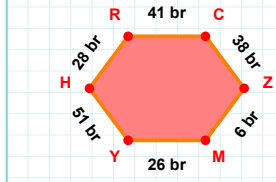
$$|PC| \text{ kaç cmdir?}$$

- ☐ 70 cm
☐ 71 cm
☐ 72 cm



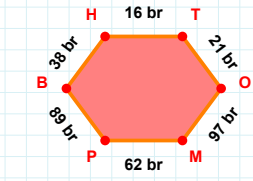
$$|ÇY| + |YL| = \dots$$

Cevap: cm



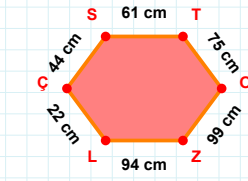
$$28 \text{ br hangi kenara aittir?}$$

- ☐ YH kenarı
☐ RC kenarı
☐ MH kenarı



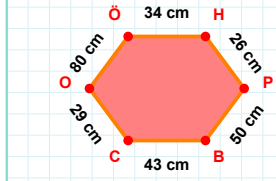
$$|BH| + |TO| = \dots$$

Cevap: br



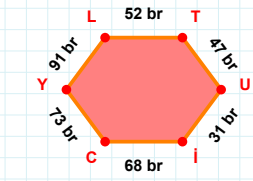
$$99 \text{ cm hangi kenara aittir?}$$

Kenar:



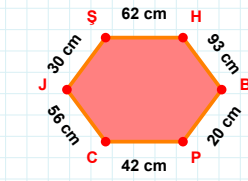
$$|ÖH| + |PB| = \dots$$

Cevap: cm



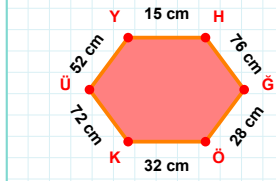
$$|UI| \text{ kaç brdir?}$$

- ☐ 30 br
☐ 31 br
☐ 32 br



$$|CJ| \text{ kaç cmdir?}$$

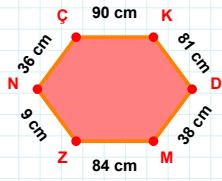
- ☐ 55 cm
☐ 56 cm
☐ 57 cm



$$|ÜY| + |YH| = \dots$$

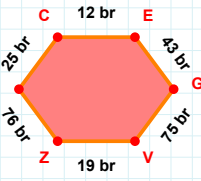
Cevap: cm

SORU: Aşağıdaki geometrik şekillerle ilgili soruları cevaplayınız.



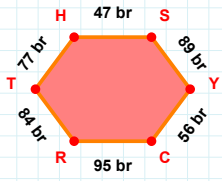
$$|NC| + |KD| = \dots$$

Cevap: cm



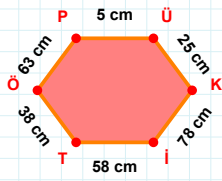
$$|VZ| \text{ kaç br'dir?}$$

- ☐ 18 br
☐ 19 br
☐ 20 br



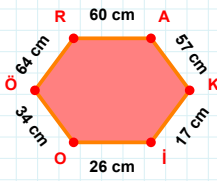
$$95 \text{ br hangi kenara aittir?}$$

Kenar:



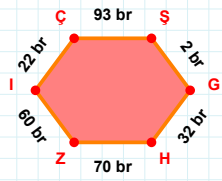
$$63 \text{ cm hangi kenara aittir?}$$

- ☐ TP kenarı
☐ KI kenarı
☐ ÖP kenarı



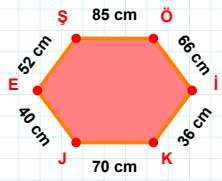
$$17 \text{ cm hangi kenara aittir?}$$

Kenar:



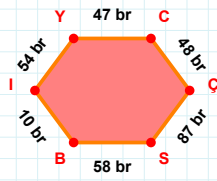
$$32 \text{ br hangi kenara aittir?}$$

Kenar:



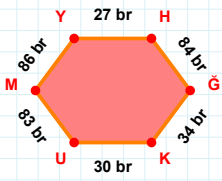
$$52 \text{ cm hangi kenara aittir?}$$

- ☐ JE kenarı
☐ EÖ kenarı
☐ İK kenarı



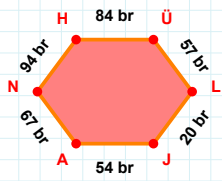
$$|ÇS| + |YC| = \dots$$

Cevap: br



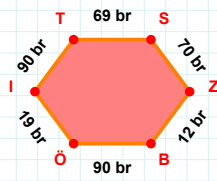
$$|ÇK| + |HÇ| = \dots$$

Cevap: br



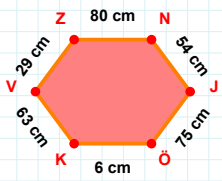
$$|NH| + |JA| = \dots$$

Cevap: br



$$|Öİ| \text{ kaç br'dir?}$$

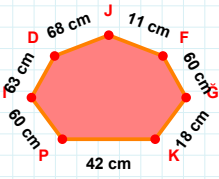
- ☐ 18 br
☐ 19 br
☐ 20 br



$$|ÖK| + |KV| = \dots$$

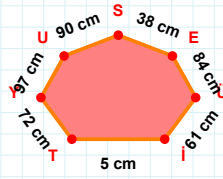
Cevap: cm

SORU: Aşağıdaki geometrik şekillerle ilgili soruları cevaplayınız.



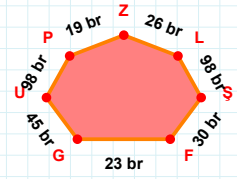
68 cm hangi kenara aittir?

Kenar:



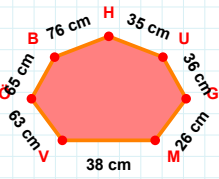
5 cm hangi kenara aittir?

Kenar:



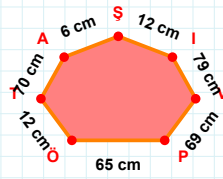
$|GF| + |SL| = \dots$

Cevap: br



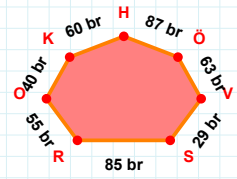
76 cm hangi kenara aittir?

Kenar:



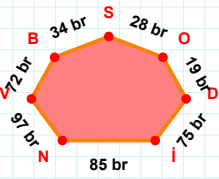
$|PV|$ kaç cm'dir?

- ☐ 68 cm
☐ 69 cm
☐ 70 cm



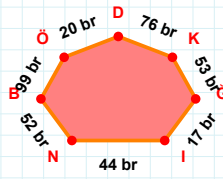
$|KO|$ kaç br'dir?

- ☐ 39 br
☐ 40 br
☐ 41 br



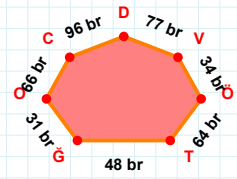
28 br hangi kenara aittir?

- ☐ VI kenarı
☐ DO kenarı
☐ SB kenarı



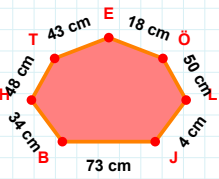
$|DÖ| + |İĞ| = \dots$

Cevap: br



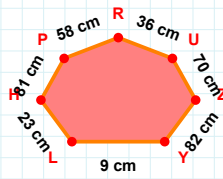
31 br hangi kenara aittir?

Kenar:



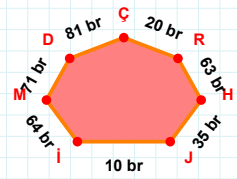
4 cm hangi kenara aittir?

Kenar:



$|ZU|$ kaç cm'dir?

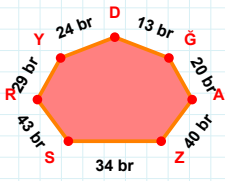
- ☐ 69 cm
☐ 70 cm
☐ 71 cm



63 br hangi kenara aittir?

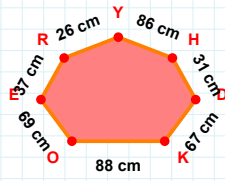
Kenar:

SORU: Aşağıdaki geometrik şekillerle ilgili soruları cevaplayınız.



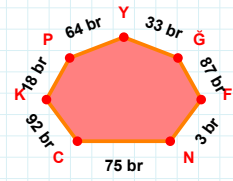
13 br hangi kenara aittir?

- ☐ YA kenarı
☐ GD kenarı
☐ YR kenarı



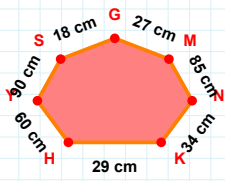
$|DH| + |RE| = \dots$

Cevap: cm



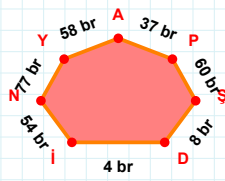
33 br hangi kenara aittir?

- ☐ NF kenarı
☐ GN kenarı
☐ CN kenarı



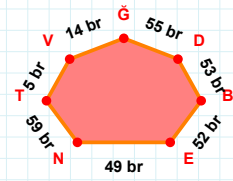
27 cm hangi kenara aittir?

Kenar:



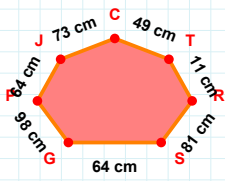
37 br hangi kenara aittir?

- ☐ YN kenarı
☐ PA kenarı
☐ DP kenarı



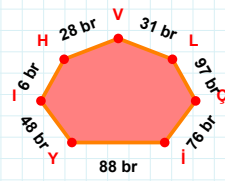
55 br hangi kenara aittir?

- ☐ BD kenarı
☐ TN kenarı
☐ TD kenarı



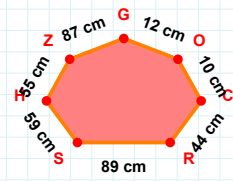
49 cm hangi kenara aittir?

- ☐ TC kenarı
☐ PG kenarı
☐ RP kenarı



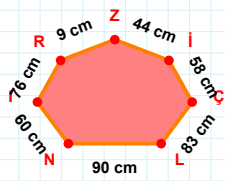
31 br hangi kenara aittir?

- ☐ Çİ kenarı
☐ HI kenarı
☐ LV kenarı



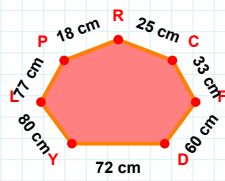
59 cm hangi kenara aittir?

Kenar:



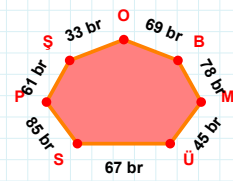
$|ZR| + |IZ| = \dots$

Cevap: cm



$|FC|$ kaç cm'dir?

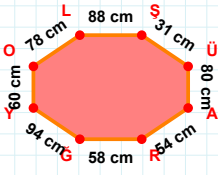
- ☐ 32 cm
☐ 33 cm
☐ 34 cm



45 br hangi kenara aittir?

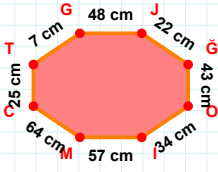
Kenar:

SORU: Aşağıdaki geometrik şekillerle ilgili soruları cevaplayınız.



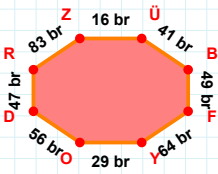
31 cm hangi kenara aittir?

Kenar:



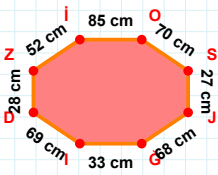
7 cm hangi kenara aittir?

- ☐ JÇ kenarı
☐ CT kenarı
☐ OT kenarı



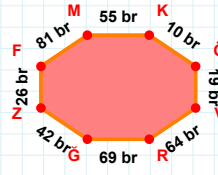
|ÜB| kaç brdir?

- ☐ 40 br
☐ 41 br
☐ 42 br



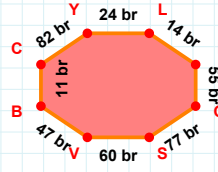
68 cm hangi kenara aittir?

Kenar:



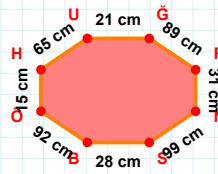
|MK| kaç brdir?

- ☐ 54 br
☐ 55 br
☐ 56 br



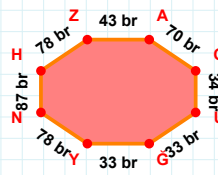
|BC| + |Li| =

Cevap: br



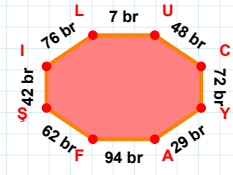
|ÜÇ| kaç cmdir?

- ☐ 20 cm
☐ 21 cm
☐ 22 cm



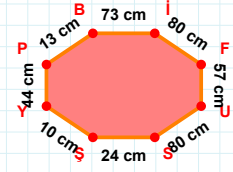
|OU| kaç brdir?

- ☐ 33 br
☐ 34 br
☐ 35 br



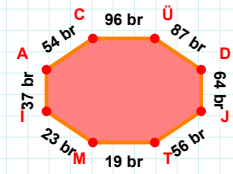
62 br hangi kenara aittir?

Kenar:



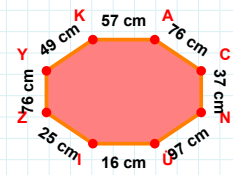
13 cm hangi kenara aittir?

- ☐ YP kenarı
☐ YB kenarı
☐ FU kenarı



54 br hangi kenara aittir?

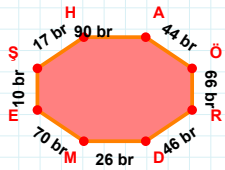
- ☐ CÜ kenarı
☐ AC kenarı
☐ Tİ kenarı



49 cm hangi kenara aittir?

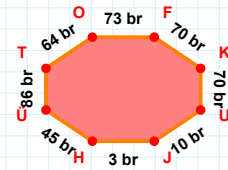
- ☐ KA kenarı
☐ NÜ kenarı
☐ ÜC kenarı

SORU: Aşağıdaki geometrik şekillerle ilgili soruları cevaplayınız.



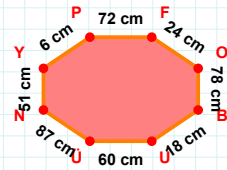
|AÖ| kaç brdir?

- ☐ 43 br
☐ 44 br
☐ 45 br



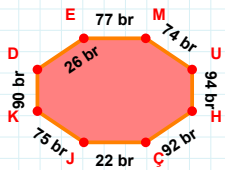
|TO| kaç brdir?

- ☐ 63 br
☐ 64 br
☐ 65 br



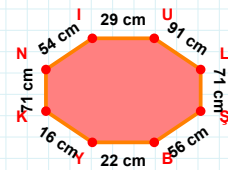
|PF| kaç cmdir?

- ☐ 71 cm
☐ 72 cm
☐ 73 cm



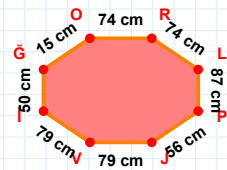
|KD| + |ÇJ| =

Cevap: br



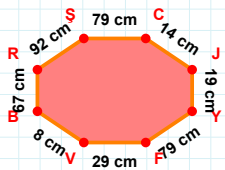
|SB| + |LÇ| =

Cevap: cm



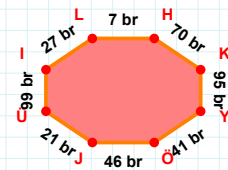
15 cm hangi kenara aittir?

- ☐ OR kenarı
☐ PJ kenarı
☐ OP kenarı



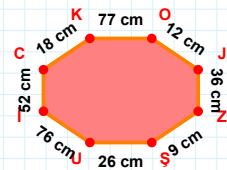
|VB| kaç cmdir?

- ☐ 7 cm
☐ 8 cm
☐ 9 cm



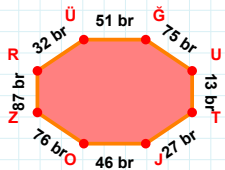
27 br hangi kenara aittir?

- ☐ LÜ kenarı
☐ KY kenarı
☐ Üİ kenarı



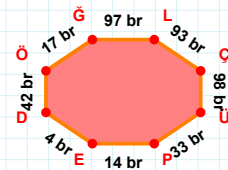
76 cm hangi kenara aittir?

Kenar:



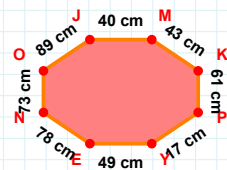
32 br hangi kenara aittir?

- ☐ ZR kenarı
☐ RÜ kenarı
☐ ÜO kenarı



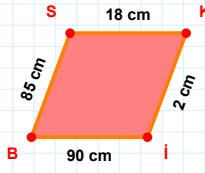
|ED| kaç brdir?

- ☐ 3 br
☐ 4 br
☐ 5 br



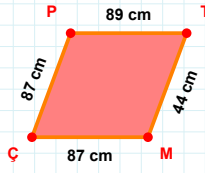
49 cm hangi kenara aittir?

Kenar:

SORU: Aşağıdaki geometrik şekillerle ilgili soruları cevaplayınız.

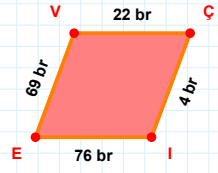
$|KI| + |BI| = \dots$

Cevap: cm



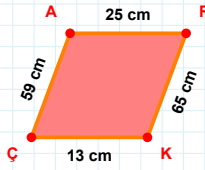
87 cm hangi kenara aittir?

Kenar:



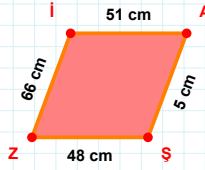
69 br hangi kenara aittir?

- ☐ VÇ kenarı
☐ ÇI kenarı
☐ VI kenarı



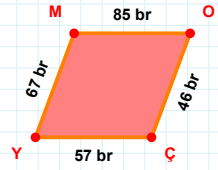
59 cm hangi kenara aittir?

- ☐ RK kenarı
☐ AK kenarı
☐ AR kenarı



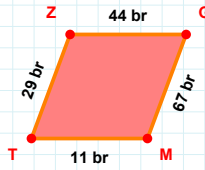
$|ŞZ| + |ZI| = \dots$

Cevap: cm



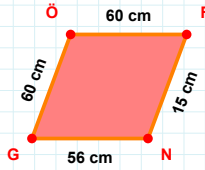
57 br hangi kenara aittir?

Kenar:



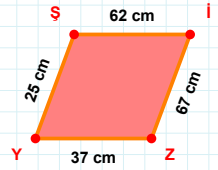
29 br hangi kenara aittir?

- ☐ ZG kenarı
☐ GT kenarı
☐ TZ kenarı



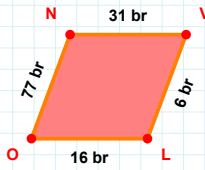
15 cm hangi kenara aittir?

Kenar:



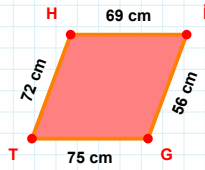
|YŞ| kaç cm'dir?

- ☐ 24 cm
☐ 25 cm
☐ 26 cm



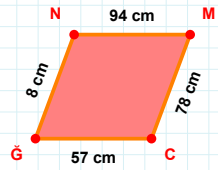
|ON| kaç br'dir?

- ☐ 76 br
☐ 77 br
☐ 78 br



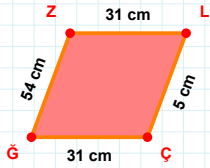
$|İG| + |HI| = \dots$

Cevap: cm



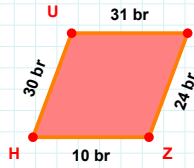
|NM| kaç cm'dir?

- ☐ 93 cm
☐ 94 cm
☐ 95 cm

SORU: Aşağıdaki geometrik şekillerle ilgili soruları cevaplayınız.

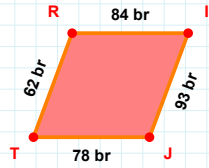
$$|ZL| + |ÇĞ| = \dots$$

Cevap: cm



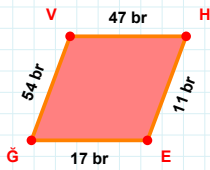
30 br hangi kenara aittir?

Kenar:



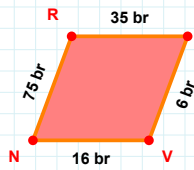
$$|TR| + |RI| = \dots$$

Cevap: br



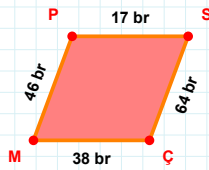
|EG| kaç brdir?

- ☐ 16 br
☐ 17 br
☐ 18 br



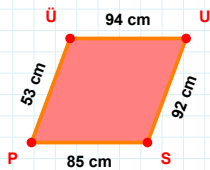
|RC| kaç brdir?

- ☐ 34 br
☐ 35 br
☐ 36 br



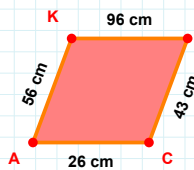
|MP| kaç brdir?

- ☐ 45 br
☐ 46 br
☐ 47 br



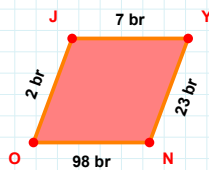
|US| kaç cmdir?

- ☐ 91 cm
☐ 92 cm
☐ 93 cm



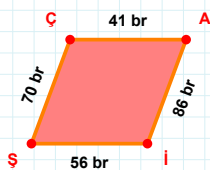
43 cm hangi kenara aittir?

Kenar:



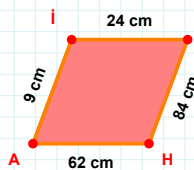
|YN| kaç brdir?

- ☐ 22 br
☐ 23 br
☐ 24 br



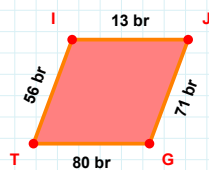
$$|ŞÇ| + |ÇA| = \dots$$

Cevap: br



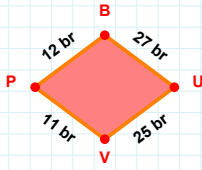
84 cm hangi kenara aittir?

Kenar:



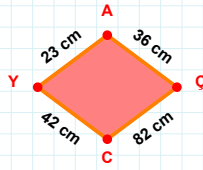
56 br hangi kenara aittir?

- ☐ IG kenarı
☐ JG kenarı
☐ TI kenarı

SORU: Aşağıdaki geometrik şekillerle ilgili soruları cevaplayınız.

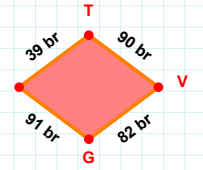
$$|UV| + |VP| = \dots$$

Cevap: br



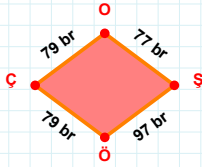
42 cm hangi kenara aittir?

Kenar:



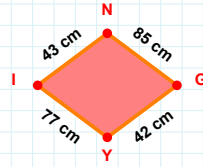
$$|VG| + |TV| = \dots$$

Cevap: br



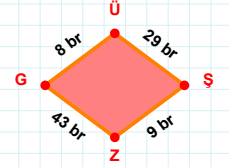
79 br hangi kenara aittir?

- ☐ OŞ kenarı
☐ ŞÇ kenarı
☐ ŞÖ kenarı



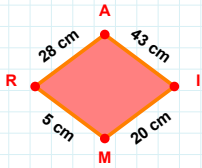
42 cm hangi kenara aittir?

Kenar:



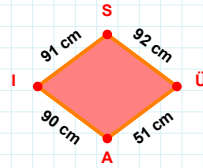
|ŞZ| kaç brdir?

- ☐ 8 br
☐ 9 br
☐ 10 br



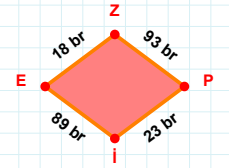
28 cm hangi kenara aittir?

Kenar:



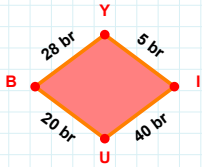
51 cm hangi kenara aittir?

Kenar:



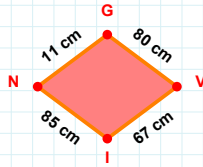
|ZP| kaç brdir?

- ☐ 92 br
☐ 93 br
☐ 94 br



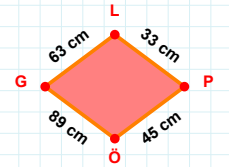
|BY| kaç brdir?

- ☐ 27 br
☐ 28 br
☐ 29 br



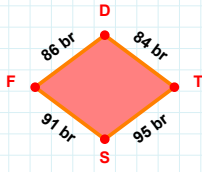
|GV| kaç cmdir?

- ☐ 79 cm
☐ 80 cm
☐ 81 cm



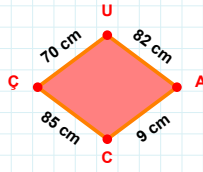
$$|GL| + |PÖ| = \dots$$

Cevap: cm

SORU: Aşağıdaki geometrik şekillerle ilgili soruları cevaplayınız.

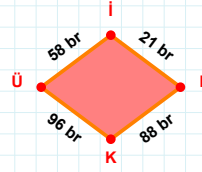
$$|FD| + |TS| = \dots$$

Cevap: br



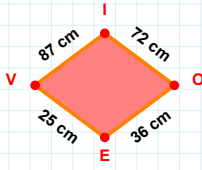
$$|ÇU| + |ÇÇ| = \dots$$

Cevap: cm



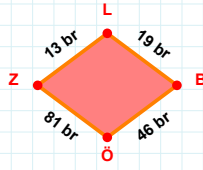
58 br hangi kenara aittir?

- ☐ İÜ kenarı
☐ KÜ kenarı
☐ LÜ kenarı



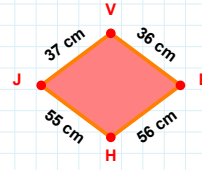
87 cm hangi kenara aittir?

- ☐ EV kenarı
☐ IE kenarı
☐ IO kenarı



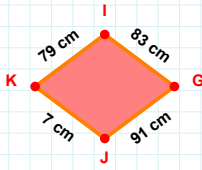
$$|ZL| + |LB| = \dots$$

Cevap: br



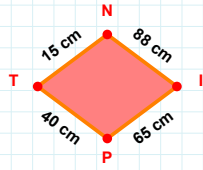
37 cm hangi kenara aittir?

- ☐ BH kenarı
☐ JB kenarı
☐ VB kenarı



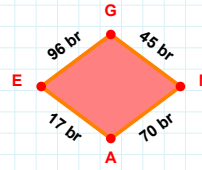
|GJ| kaç cm'dir?

- ☐ 90 cm
☐ 91 cm
☐ 92 cm



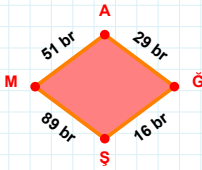
15 cm hangi kenara aittir?

- ☐ PN kenarı
☐ PT kenarı
☐ İP kenarı



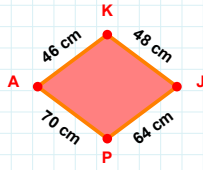
|GN| kaç br'dir?

- ☐ 44 br
☐ 45 br
☐ 46 br



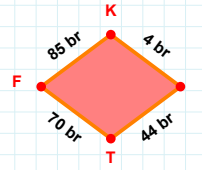
|AĞ| kaç br'dir?

- ☐ 28 br
☐ 29 br
☐ 30 br



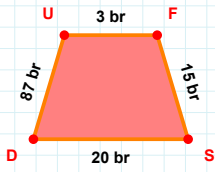
64 cm hangi kenara aittir?

Kenar:



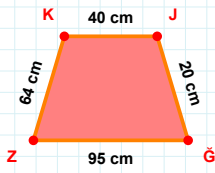
$$|FK| + |KI| = \dots$$

Cevap: br

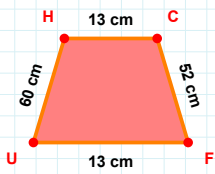
SORU: Aşağıdaki geometrik şekillerle ilgili soruları cevaplayınız.

3 br hangi kenara aittir?

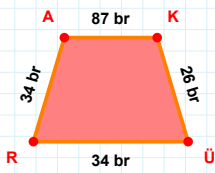
Kenar:

 $|J\hat{G}| + |G\hat{Z}| = \dots$

Cevap: cm

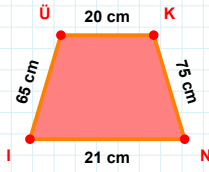
 $|CF|$ kaç cmdir?

- ☐ 51 cm
☐ 52 cm
☐ 53 cm



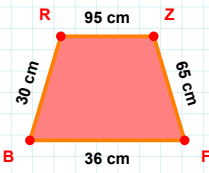
34 br hangi kenara aittir?

Kenar:

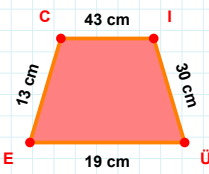


65 cm hangi kenara aittir?

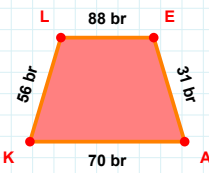
- ☐ KN kenarı
☐ ÜK kenarı
☐ ÜN kenarı

 $|FB|$ kaç cmdir?

- ☐ 35 cm
☐ 36 cm
☐ 37 cm

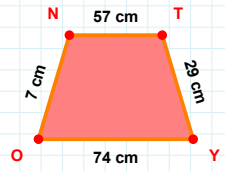
 $|ÜE|$ kaç cmdir?

- ☐ 18 cm
☐ 19 cm
☐ 20 cm



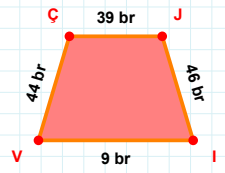
56 br hangi kenara aittir?

- ☐ LE kenarı
☐ KL kenarı
☐ LA kenarı



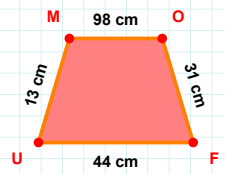
57 cm hangi kenara aittir?

Kenar:



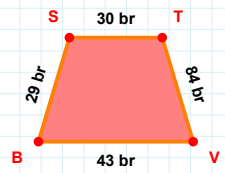
9 br hangi kenara aittir?

Kenar:



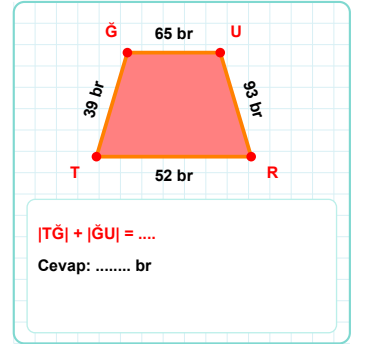
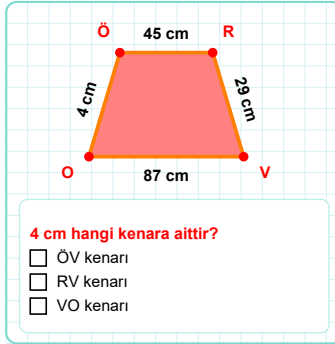
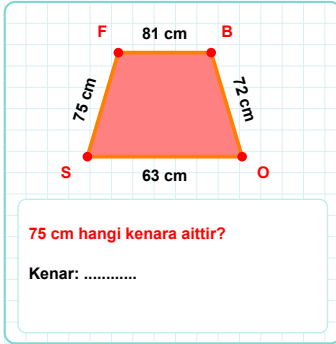
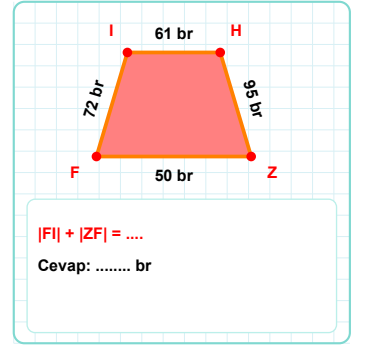
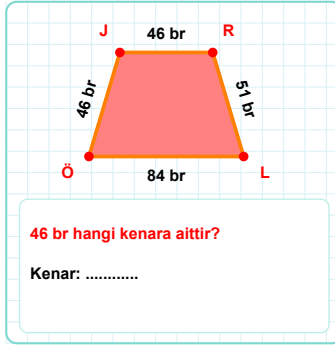
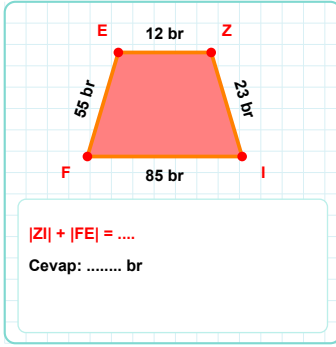
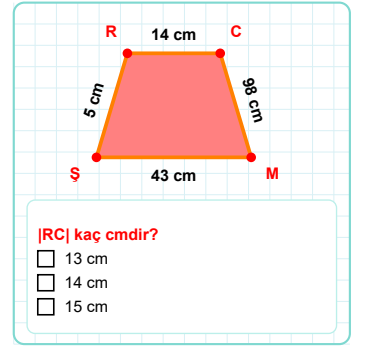
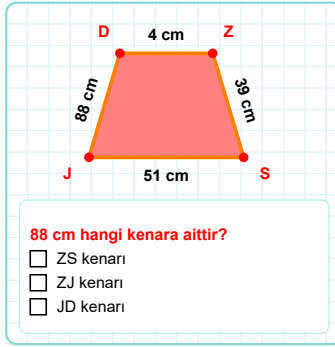
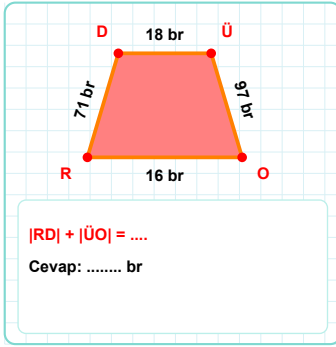
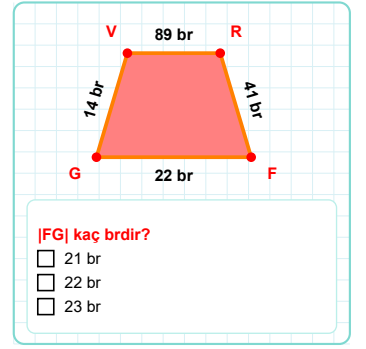
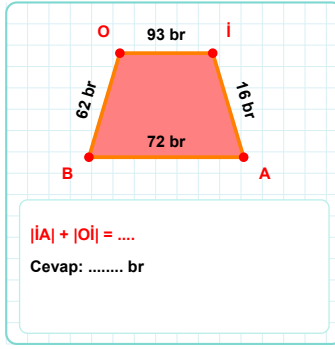
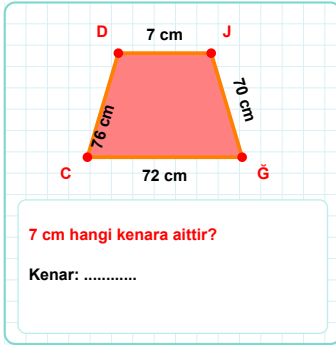
13 cm hangi kenara aittir?

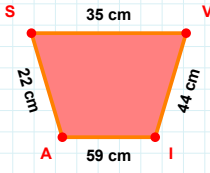
- ☐ MO kenarı
☐ UO kenarı
☐ UM kenarı

 $|BS|$ kaç brdir?

- ☐ 28 br
☐ 29 br
☐ 30 br

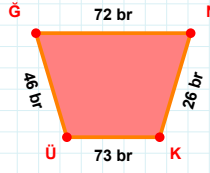
SORU: Aşağıdaki geometrik şekillerle ilgili soruları cevaplayınız.



SORU: Aşağıdaki geometrik şekillerle ilgili soruları cevaplayınız.

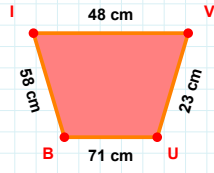
$|IA| + |SV| = \dots$

Cevap: cm



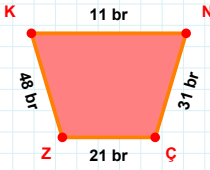
$|ÜG| + |NK| = \dots$

Cevap: br



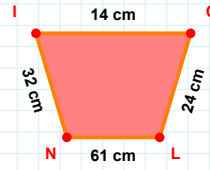
58 cm hangi kenara aittir?

Kenar:



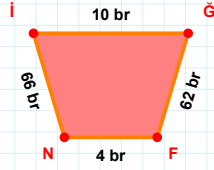
21 br hangi kenara aittir?

Kenar:



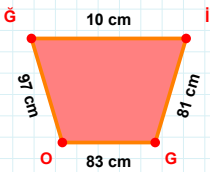
|NI| kaç cmdir?

- ☐ 31 cm
☐ 32 cm
☐ 33 cm



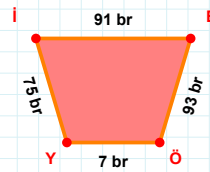
$|İĞ| + |ĞF| = \dots$

Cevap: br



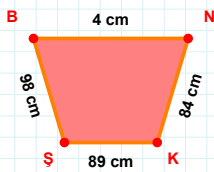
|Ğİ| kaç cmdir?

- ☐ 9 cm
☐ 10 cm
☐ 11 cm



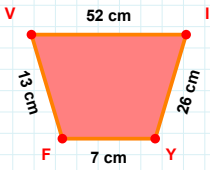
|Yİ| kaç brdir?

- ☐ 74 br
☐ 75 br
☐ 76 br



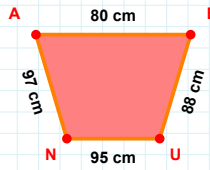
98 cm hangi kenara aittir?

Kenar:



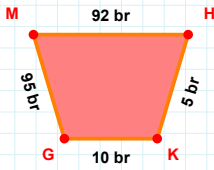
7 cm hangi kenara aittir?

Kenar:



|EU| kaç cmdir?

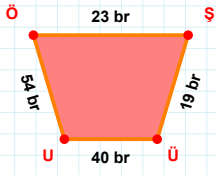
- ☐ 87 cm
☐ 88 cm
☐ 89 cm



95 br hangi kenara aittir?

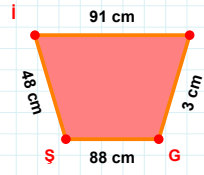
- ☐ KM kenarı
☐ GM kenarı
☐ HK kenarı

SORU: Aşağıdaki geometrik şekillerle ilgili soruları cevaplayınız.



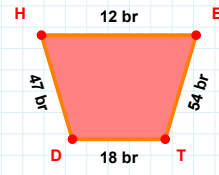
$$|ŞÜ| + |UÖ| = \dots$$

Cevap: br



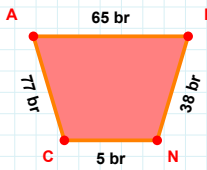
$$|JG| + |İJ| = \dots$$

Cevap: cm



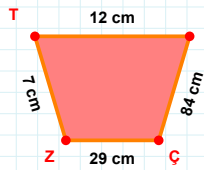
54 br hangi kenara aittir?

Kenar:



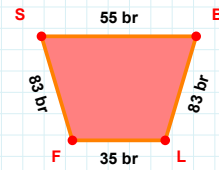
|PN| kaç brdir?

- ☐ 37 br
☐ 38 br
☐ 39 br



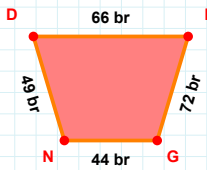
29 cm hangi kenara aittir?

Kenar:



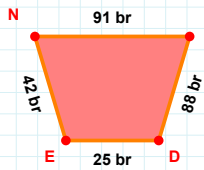
$$|BL| + |FS| = \dots$$

Cevap: br



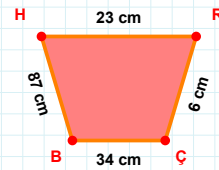
$$|DF| + |FG| = \dots$$

Cevap: br



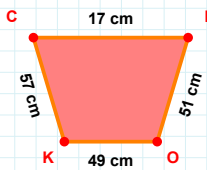
91 br hangi kenara aittir?

Kenar:



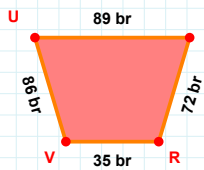
87 cm hangi kenara aittir?

- ☐ HÇ kenarı
☐ HR kenarı
☐ ÇB kenarı



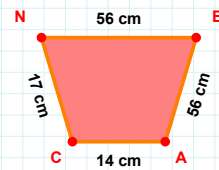
|CL| kaç cmdir?

- ☐ 16 cm
☐ 17 cm
☐ 18 cm



86 br hangi kenara aittir?

- ☐ MV kenarı
☐ RV kenarı
☐ MR kenarı



|EA| kaç cmdir?

- ☐ 55 cm
☐ 56 cm
☐ 57 cm

SÜREÇ ODAKLI DEĞERLENDİRME ÖLÇEĞİ

Geliştirilmeli (0-109)	İyi (110-187)	Çok İyi (188-265)	Mükemmel (266-312)
<input type="checkbox"/>	<input type="checkbox"/>	<input type="checkbox"/>	<input type="checkbox"/>

Hazırlayan:

Bu bölüme sınıfınızın ilgili kazanıma yönelik genel durumuna ilişkin gözlem ve izlenimlerinizi, öğrencilerinizin bu kazanımla ilgili öğrenme eksikliklerini ve bu eksikliklerin giderilmesi amacıyla yaptığınız/yapmayı planladığınız faaliyetleri not edebilirsiniz.

No	Adı - Soyadı	Toplam Puan	Değerlendirme
1			
2			
3			
4			
5			
6			
7			
8			
9			
10			
11			
12			
13			
14			
15			
16			
17			
18			
19			
20			
21			
22			
23			
24			
25			
26			
27			
28			
29			
30			
31			
32			
33			
34			
35			

Hazırlayan: