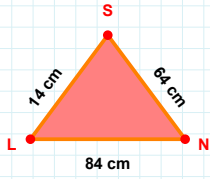
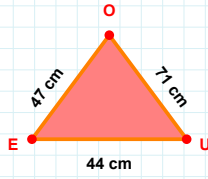
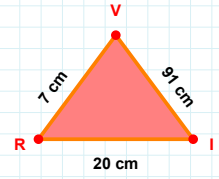


**SORU:** Aşağıdaki geometrik şekillerle ilgili soruları cevaplayınız.**|SL| kaç cmdir?**

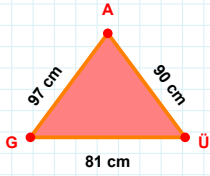
- ☐ 13 cm  
☐ 14 cm  
☐ 15 cm

**|OE| kaç cmdir?**

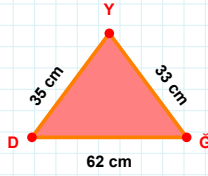
- ☐ 46 cm  
☐ 47 cm  
☐ 48 cm

**91 cm hangi kenara aittir?**

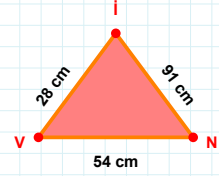
- ☐ VR kenarı  
☐ IV kenarı  
☐ XY kenarı

**97 cm hangi kenara aittir?**

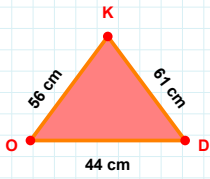
Kenar: .....

**33 cm hangi kenara aittir?**

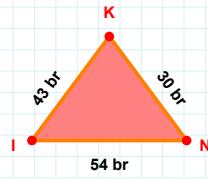
- ☐ XY kenarı  
☐ DĞ kenarı  
☐ YD kenarı

**|İV| kaç cmdir?**

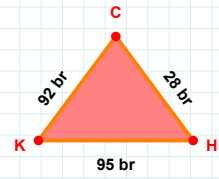
- ☐ 27 cm  
☐ 28 cm  
☐ 29 cm

**|KO| kaç cmdir?**

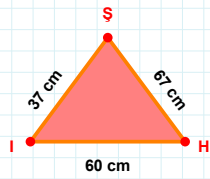
- ☐ 55 cm  
☐ 56 cm  
☐ 57 cm

**|KI| + |IN| = ....**

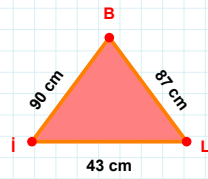
Cevap: ..... br

**|CK| kaç brdir?**

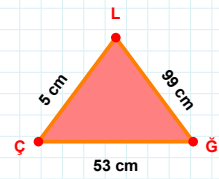
- ☐ 91 br  
☐ 92 br  
☐ 93 br

**60 cm hangi kenara aittir?**

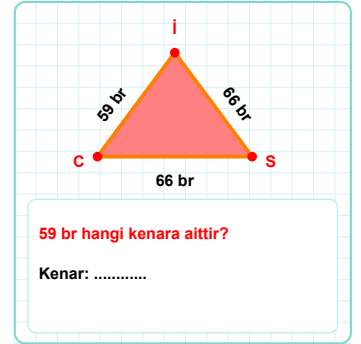
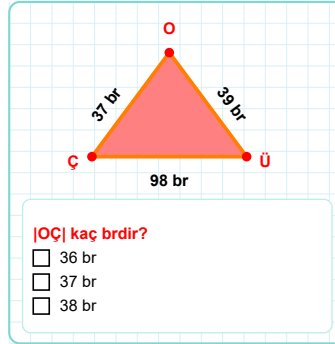
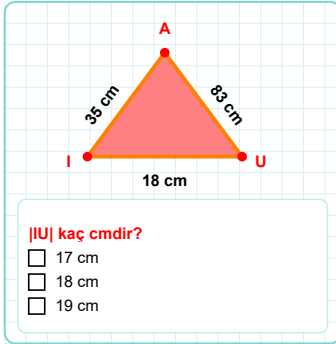
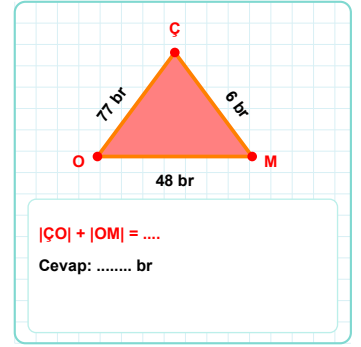
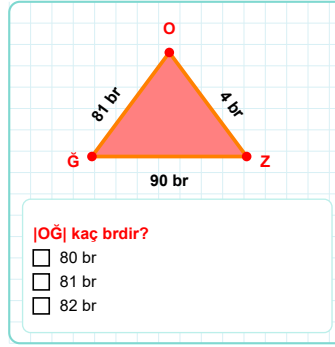
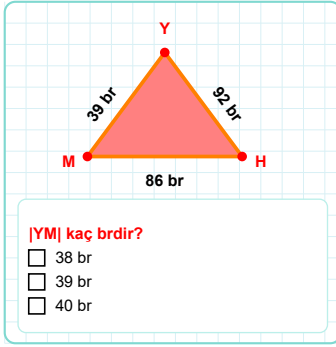
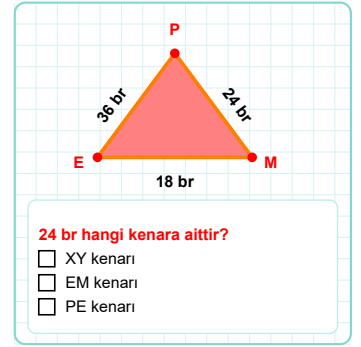
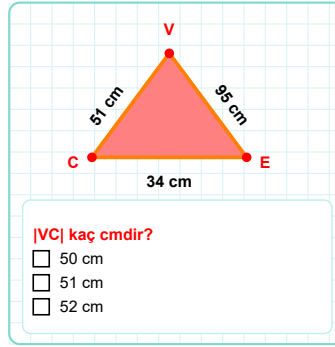
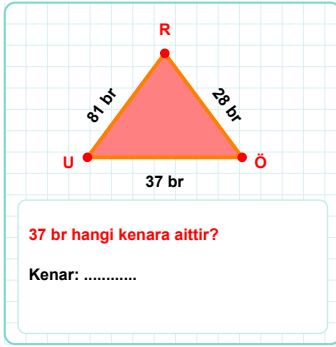
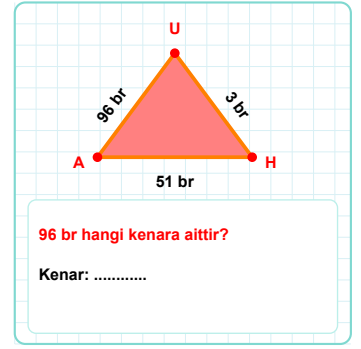
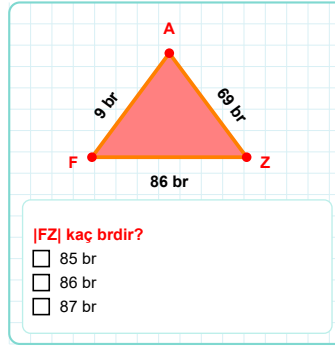
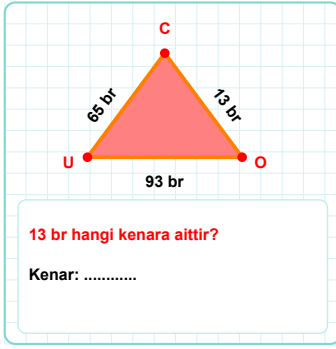
Kenar: .....

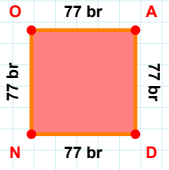
**87 cm hangi kenara aittir?**

- ☐ İL kenarı  
☐ XY kenarı  
☐ Bİ kenarı

**|ĞL| + |LÇ| = ....**

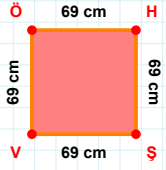
Cevap: ..... cm

**SORU:** Aşağıdaki geometrik şekillerle ilgili soruları cevaplayınız.

**SORU:** Aşağıdaki geometrik şekillerle ilgili soruları cevaplayınız.

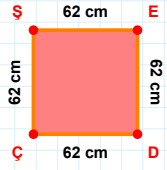
77 br hangi kenara aittir?

Kenar: .....



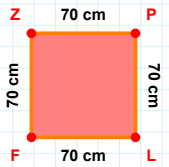
69 cm hangi kenara aittir?

Kenar: .....



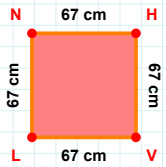
|ÇŞ| kaç cm'dir?

- ☐ 61 cm  
☐ 62 cm  
☐ 63 cm



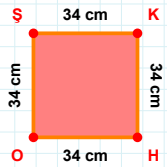
70 cm hangi kenara aittir?

Kenar: .....



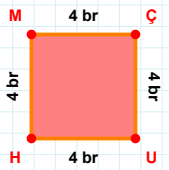
|VL| kaç cm'dir?

- ☐ 66 cm  
☐ 67 cm  
☐ 68 cm



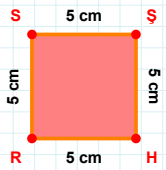
34 cm hangi kenara aittir?

- ☐ KO kenarı  
☐ KH kenarı  
☐ ŞK kenarı



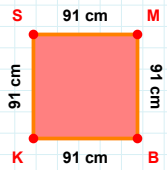
|UH| kaç br'dir?

- ☐ 3 br  
☐ 4 br  
☐ 5 br



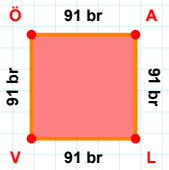
|SŞ| kaç cm'dir?

- ☐ 4 cm  
☐ 5 cm  
☐ 6 cm



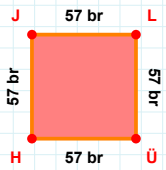
91 cm hangi kenara aittir?

- ☐ SM kenarı  
☐ KS kenarı  
☐ MK kenarı



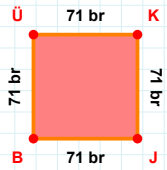
91 br hangi kenara aittir?

- ☐ LÖ kenarı  
☐ AL kenarı  
☐ LV kenarı



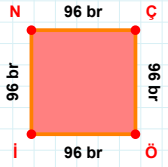
57 br hangi kenara aittir?

- ☐ HJ kenarı  
☐ JÜ kenarı  
☐ ÜH kenarı



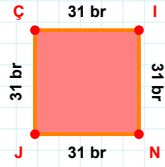
|KJ| kaç br'dir?

- ☐ 70 br  
☐ 71 br  
☐ 72 br

**SORU:** Aşağıdaki geometrik şekillerle ilgili soruları cevaplayınız.

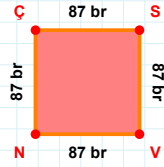
$|NÇ| + |Öİ| = \dots$

Cevap: ..... br



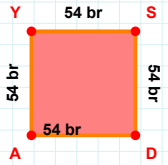
$|JN|$  kaç brdir?

- ☐ 30 br  
☐ 31 br  
☐ 32 br



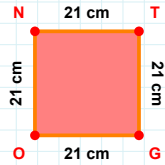
$|VN| + |NÇ| = \dots$

Cevap: ..... br



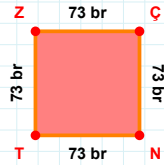
54 br hangi kenara aittir?

Kenar: .....



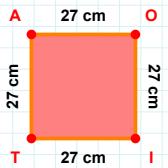
21 cm hangi kenara aittir?

- ☐ TO kenarı  
☐ NT kenarı  
☐ TG kenarı



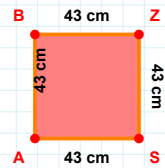
73 br hangi kenara aittir?

- ☐ ZÇ kenarı  
☐ ZN kenarı  
☐ NT kenarı



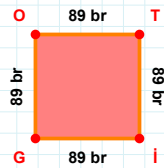
$|AO| + |TA| = \dots$

Cevap: ..... cm



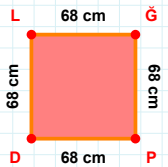
43 cm hangi kenara aittir?

- ☐ AB kenarı  
☐ BS kenarı  
☐ SA kenarı



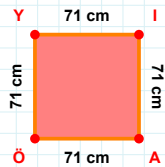
89 br hangi kenara aittir?

- ☐ OT kenarı  
☐ İG kenarı  
☐ İO kenarı



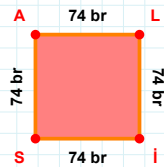
$|LĞ|$  kaç cmdir?

- ☐ 67 cm  
☐ 68 cm  
☐ 69 cm



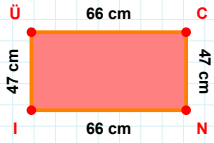
$|AÖ| + |ÖY| = \dots$

Cevap: ..... cm



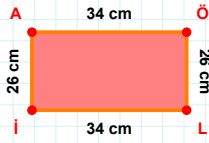
74 br hangi kenara aittir?

Kenar: .....

**SORU:** Aşağıdaki geometrik şekillerle ilgili soruları cevaplayınız.

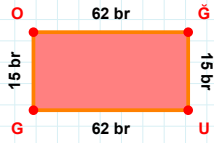
$$|İÜ| + |İN| = \dots$$

Cevap: ..... cm



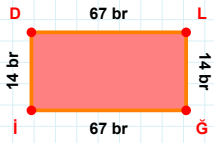
$$|ÖL| + |AÖ| = \dots$$

Cevap: ..... cm



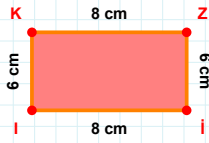
15 br hangi kenara aittir?

- ☐ UO kenarı  
☐ OĞ kenarı  
☐ UG kenarı



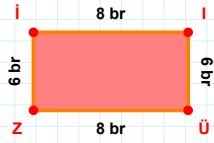
|DL| kaç brdir?

- ☐ 66 br  
☐ 67 br  
☐ 68 br



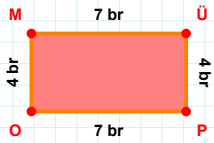
|İİ| kaç cmdir?

- ☐ 7 cm  
☐ 8 cm  
☐ 9 cm



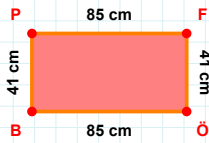
|ÜZ| kaç brdir?

- ☐ 7 br  
☐ 8 br  
☐ 9 br



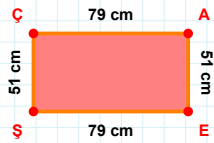
4 br hangi kenara aittir?

- ☐ MÜ kenarı  
☐ OÜ kenarı  
☐ OM kenarı



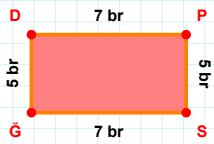
41 cm hangi kenara aittir?

Kenar: .....



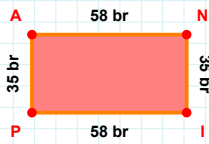
51 cm hangi kenara aittir?

- ☐ ŞÇ kenarı  
☐ ŞA kenarı  
☐ ÇA kenarı



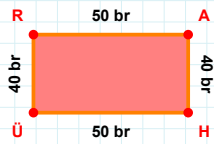
5 br hangi kenara aittir?

Kenar: .....



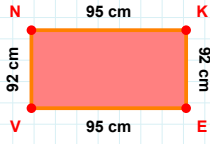
35 br hangi kenara aittir?

Kenar: .....



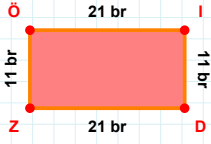
40 br hangi kenara aittir?

Kenar: .....

**SORU:** Aşağıdaki geometrik şekillerle ilgili soruları cevaplayınız.

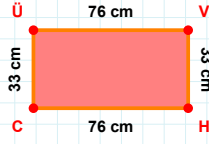
92 cm hangi kenara aittir?

- ☐ VN kenarı  
☐ KV kenarı  
☐ EV kenarı



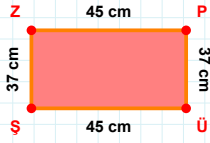
|Öİ| kaç brdir?

- ☐ 20 br  
☐ 21 br  
☐ 22 br



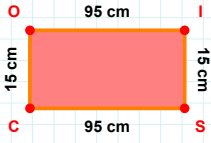
|VH| + |CÜ| = ....

Cevap: ..... cm



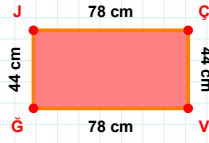
45 cm hangi kenara aittir?

Kenar: .....



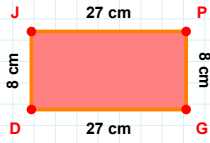
15 cm hangi kenara aittir?

- ☐ CO kenarı  
☐ Oİ kenarı  
☐ CI kenarı



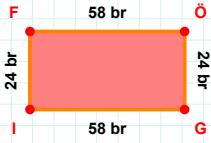
|JÇ| kaç cmdir?

- ☐ 77 cm  
☐ 78 cm  
☐ 79 cm



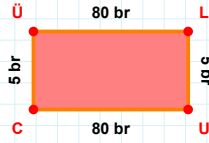
8 cm hangi kenara aittir?

- ☐ PD kenarı  
☐ GD kenarı  
☐ JP kenarı



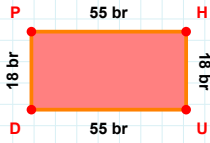
24 br hangi kenara aittir?

Kenar: .....



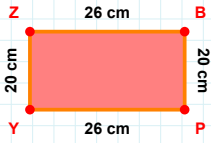
5 br hangi kenara aittir?

- ☐ LC kenarı  
☐ UC kenarı  
☐ CÜ kenarı



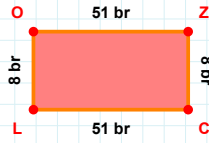
|HU| + |PH| = ....

Cevap: ..... br



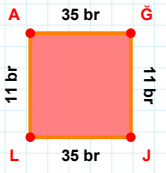
20 cm hangi kenara aittir?

- ☐ PY kenarı  
☐ PZ kenarı  
☐ YZ kenarı

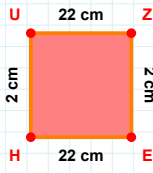


8 br hangi kenara aittir?

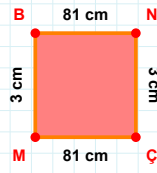
Kenar: .....

**SORU:** Aşağıdaki geometrik şekillerle ilgili soruları cevaplayınız.**|JL| kaç brdir?**

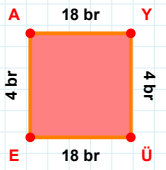
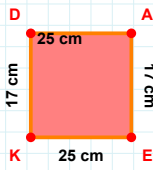
- ☐ 34 br  
☐ 35 br  
☐ 36 br

**|UZ| kaç cmdir?**

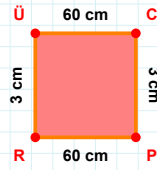
- ☐ 21 cm  
☐ 22 cm  
☐ 23 cm

**3 cm hangi kenara aittir?**

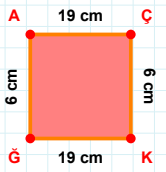
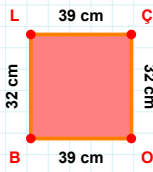
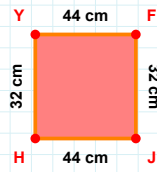
- ☐ ÇM kenarı  
☐ ÇB kenarı  
☐ MB kenarı

**18 br hangi kenara aittir?****Kenar: .....****|KD| kaç cmdir?**

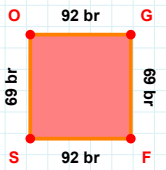
- ☐ 16 cm  
☐ 17 cm  
☐ 18 cm

**3 cm hangi kenara aittir?**

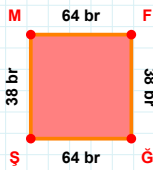
- ☐ PÜ kenarı  
☐ CP kenarı  
☐ PR kenarı

**|AÇ| + |KĞ| = ....****Cevap: ..... cm****|BL| + |LC| = ....****Cevap: ..... cm****|HY| kaç cmdir?**

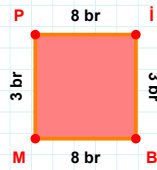
- ☐ 31 cm  
☐ 32 cm  
☐ 33 cm

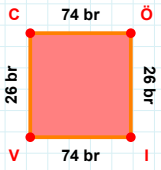
**69 br hangi kenara aittir?**

- ☐ OG kenarı  
☐ GF kenarı  
☐ GS kenarı

**|ŞM| kaç brdir?**

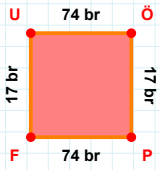
- ☐ 37 br  
☐ 38 br  
☐ 39 br

**3 br hangi kenara aittir?****Kenar: .....**

**SORU:** Aşağıdaki geometrik şekillerle ilgili soruları cevaplayınız.

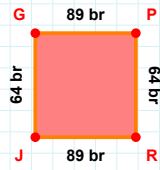
$|IV| + |VC| = \dots$

Cevap: ..... br



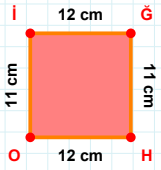
$|FU| + |PF| = \dots$

Cevap: ..... br



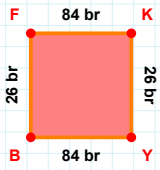
$|JG| + |GP| = \dots$

Cevap: ..... br



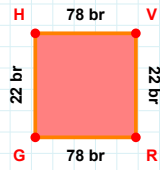
11 cm hangi kenara aittir?

- ☐ İĞ kenarı  
☐ Hİ kenarı  
☐ HO kenarı



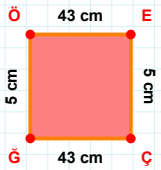
$|YB| + |KY| = \dots$

Cevap: ..... br



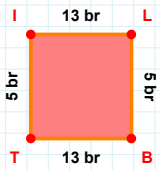
|RG| kaç brdir?

- ☐ 77 br  
☐ 78 br  
☐ 79 br



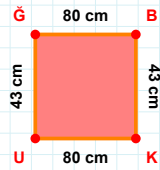
$|ÖE| + |ĞÖ| = \dots$

Cevap: ..... cm



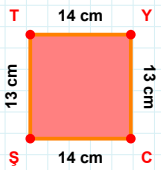
5 br hangi kenara aittir?

- ☐ IL kenarı  
☐ TI kenarı  
☐ TL kenarı



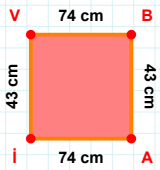
80 cm hangi kenara aittir?

Kenar: .....



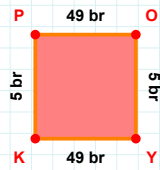
|TY| kaç cmdir?

- ☐ 13 cm  
☐ 14 cm  
☐ 15 cm



74 cm hangi kenara aittir?

Kenar: .....

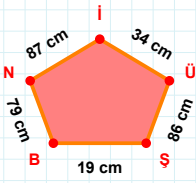


|YK| kaç brdir?

- ☐ 48 br  
☐ 49 br  
☐ 50 br

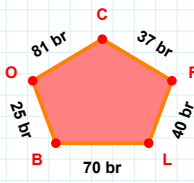


**SORU:** Aşağıdaki geometrik şekillerle ilgili soruları cevaplayınız.



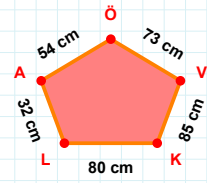
34 cm hangi kenara aittir?

- ☐ Şİ kenarı  
☐ NB kenarı  
☐ BŞ kenarı



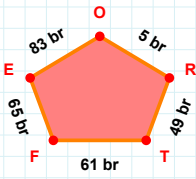
|CO| kaç brdir?

- ☐ 80 br  
☐ 81 br  
☐ 82 br



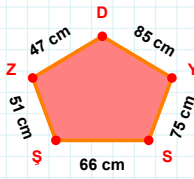
|ÖA| + |KV| = ....

Cevap: ..... cm



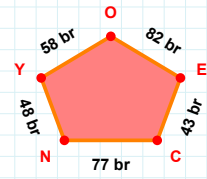
5 br hangi kenara aittir?

Kenar: .....



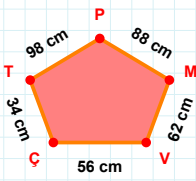
47 cm hangi kenara aittir?

Kenar: .....



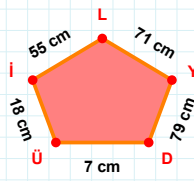
43 br hangi kenara aittir?

Kenar: .....



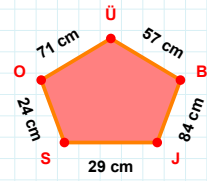
|VM| kaç cmdir?

- ☐ 61 cm  
☐ 62 cm  
☐ 63 cm



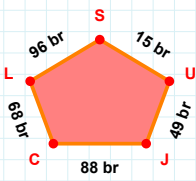
71 cm hangi kenara aittir?

- ☐ ÜD kenarı  
☐ ÜL kenarı  
☐ LI kenarı



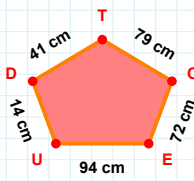
|ÜO| + |OS| = ....

Cevap: ..... cm



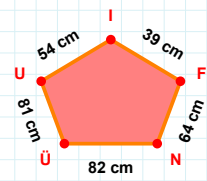
|SL| kaç brdir?

- ☐ 95 br  
☐ 96 br  
☐ 97 br



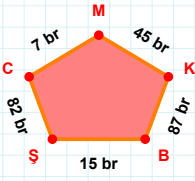
72 cm hangi kenara aittir?

Kenar: .....



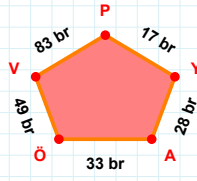
|ÜN| + |UÜ| = ....

Cevap: ..... cm

**SORU:** Aşağıdaki geometrik şekillerle ilgili soruları cevaplayınız.

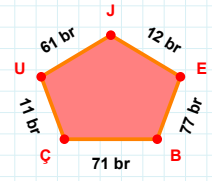
82 br hangi kenara aittir?

Kenar: .....



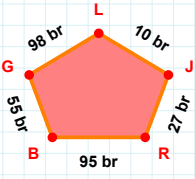
|ÖA| kaç brdir?

- ☐ 32 br  
☐ 33 br  
☐ 34 br



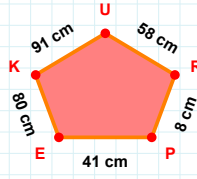
|UÇ| + |EJ| = ....

Cevap: ..... br



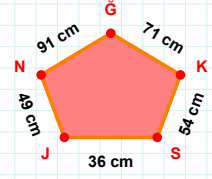
98 br hangi kenara aittir?

Kenar: .....



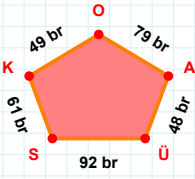
|PR| + |RU| = ....

Cevap: ..... cm



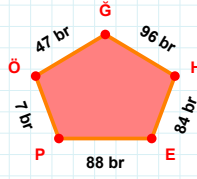
54 cm hangi kenara aittir?

Kenar: .....



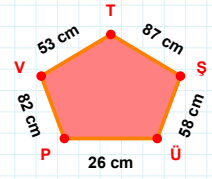
|AO| kaç brdir?

- ☐ 78 br  
☐ 79 br  
☐ 80 br



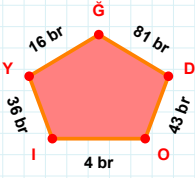
47 br hangi kenara aittir?

Kenar: .....



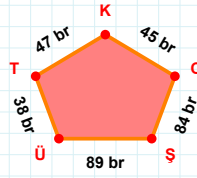
|VP| + |ŞT| = ....

Cevap: ..... cm



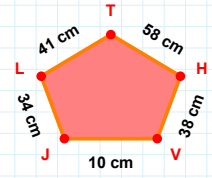
|YI| kaç brdir?

- ☐ 35 br  
☐ 36 br  
☐ 37 br



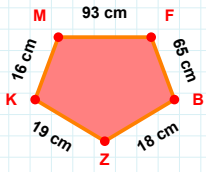
89 br hangi kenara aittir?

Kenar: .....



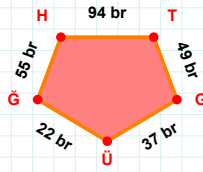
34 cm hangi kenara aittir?

Kenar: .....

**SORU:** Aşağıdaki geometrik şekillerle ilgili soruları cevaplayınız.

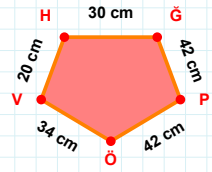
$|KM| + |MF| = \dots$

Cevap: ..... cm



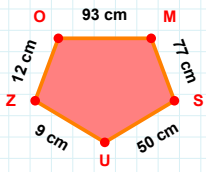
$|GÜ| + |GH| = \dots$

Cevap: ..... br



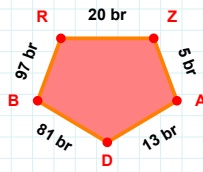
$|PÖ| + |VH| = \dots$

Cevap: ..... cm



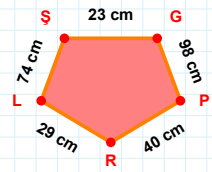
12 cm hangi kenara aittir?

- ☐ SU kenarı  
☐ MS kenarı  
☐ MZ kenarı

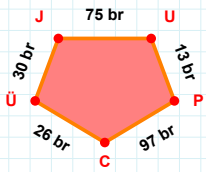


$|DB| + |AD| = \dots$

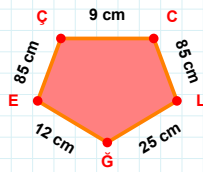
Cevap: ..... br

 $|LŞ|$  kaç cm'dir?

- ☐ 73 cm  
☐ 74 cm  
☐ 75 cm

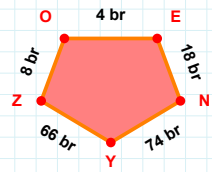
 $|PC|$  kaç br'dir?

- ☐ 96 br  
☐ 97 br  
☐ 98 br



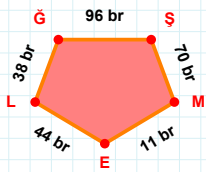
$|CL| + |EC| = \dots$

Cevap: ..... cm



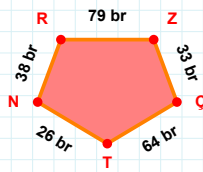
8 br hangi kenara aittir?

- ☐ YE kenarı  
☐ ZO kenarı  
☐ NY kenarı



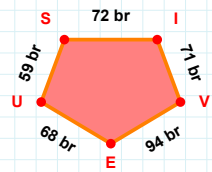
38 br hangi kenara aittir?

- ☐ EL kenarı  
☐ GE kenarı  
☐ GS kenarı



$|TN| + |ZÇ| = \dots$

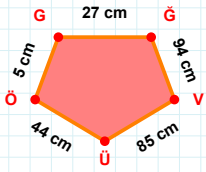
Cevap: ..... br



59 br hangi kenara aittir?

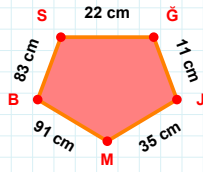
- ☐ IE kenarı  
☐ EU kenarı  
☐ US kenarı

SORU: Aşağıdaki geometrik şekillerle ilgili soruları cevaplayınız.



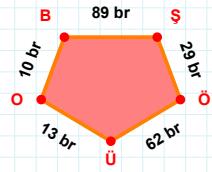
5 cm hangi kenara aittir?

- ☐ VÜ kenarı  
☐ ÖG kenarı  
☐ GÜ kenarı



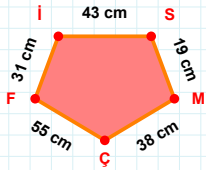
83 cm hangi kenara aittir?

- ☐ BJ kenarı  
☐ SĞ kenarı  
☐ BS kenarı



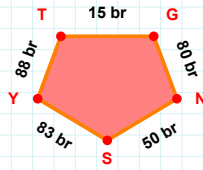
10 br hangi kenara aittir?

- ☐ ÜO kenarı  
☐ OB kenarı  
☐ ŞÜ kenarı



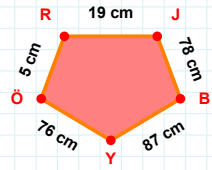
|Fİ| kaç cm'dir?

- ☐ 30 cm  
☐ 31 cm  
☐ 32 cm



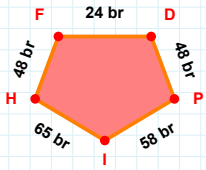
|NS| kaç br'dir?

- ☐ 49 br  
☐ 50 br  
☐ 51 br



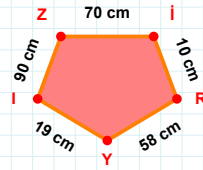
|RJ| + |ÖR| = ....

Cevap: ..... cm



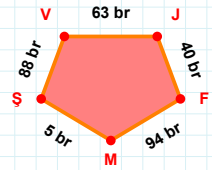
48 br hangi kenara aittir?

- ☐ DP kenarı  
☐ IH kenarı  
☐ IF kenarı



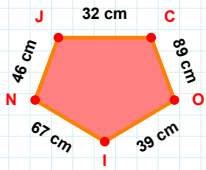
|RY| kaç cm'dir?

- ☐ 57 cm  
☐ 58 cm  
☐ 59 cm



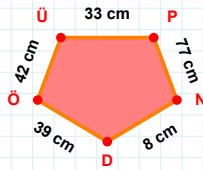
|JF| + |VJ| = ....

Cevap: ..... br



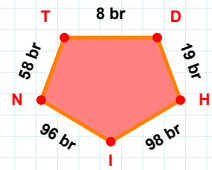
46 cm hangi kenara aittir?

- ☐ ON kenarı  
☐ CO kenarı  
☐ IN kenarı



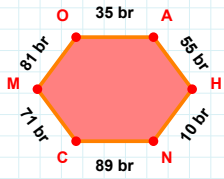
8 cm hangi kenara aittir?

Kenar: .....



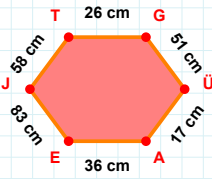
|NT| kaç br'dir?

- ☐ 57 br  
☐ 58 br  
☐ 59 br

**SORU:** Aşağıdaki geometrik şekillerle ilgili soruları cevaplayınız.

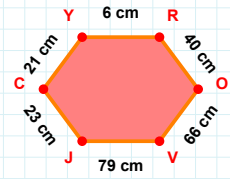
81 br hangi kenara aittir?

Kenar: .....



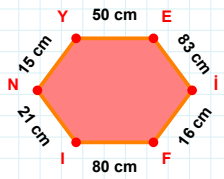
|TG| kaç cmdir?

- ☐ 25 cm  
☐ 26 cm  
☐ 27 cm



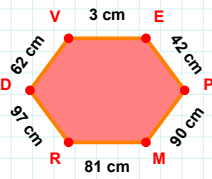
40 cm hangi kenara aittir?

Kenar: .....



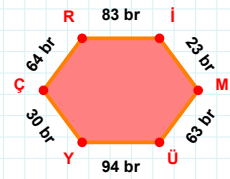
|NY| kaç cmdir?

- ☐ 14 cm  
☐ 15 cm  
☐ 16 cm



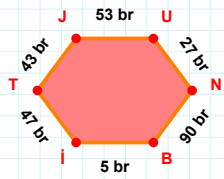
|DV| kaç cmdir?

- ☐ 61 cm  
☐ 62 cm  
☐ 63 cm



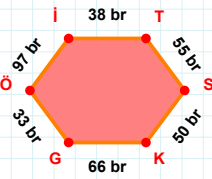
94 br hangi kenara aittir?

Kenar: .....



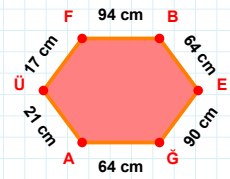
|Bİ| kaç brdir?

- ☐ 4 br  
☐ 5 br  
☐ 6 br



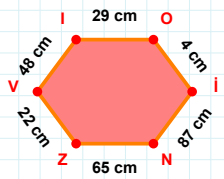
50 br hangi kenara aittir?

Kenar: .....



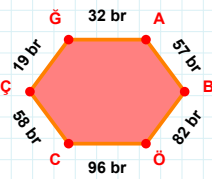
|BE| kaç cmdir?

- ☐ 63 cm  
☐ 64 cm  
☐ 65 cm



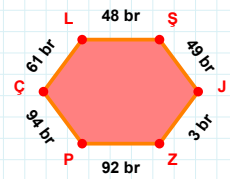
|OI| + |VI| = ....

Cevap: ..... cm



19 br hangi kenara aittir?

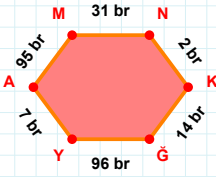
- ☐ AB kenarı  
☐ BÖ kenarı  
☐ BĞ kenarı



|ŞJ| + |LŞ| = ....

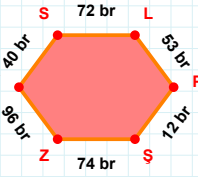
Cevap: ..... br

SORU: Aşağıdaki geometrik şekillerle ilgili soruları cevaplayınız.



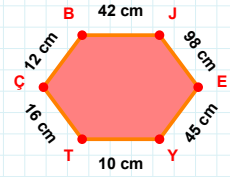
7 br hangi kenara aittir?

Kenar: .....



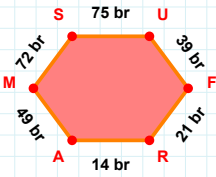
|SZ| kaç brdir?

- ☐ 73 br  
☐ 74 br  
☐ 75 br



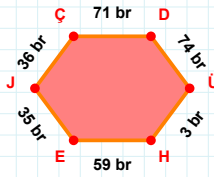
|ÇB| + |JE| = ....

Cevap: ..... cm



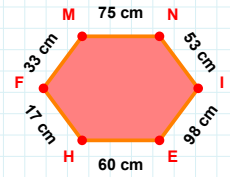
|AM| + |MS| = ....

Cevap: ..... br



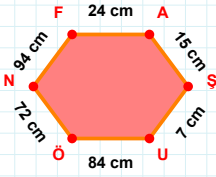
|JC| + |ÜH| = ....

Cevap: ..... br



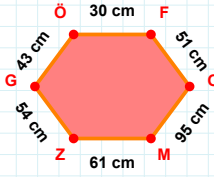
|IE| + |EH| = ....

Cevap: ..... cm



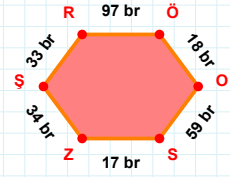
|UÖ| + |AS| = ....

Cevap: ..... cm



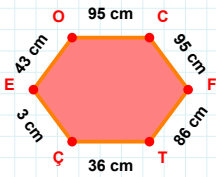
|GÖ| kaç cmdir?

- ☐ 42 cm  
☐ 43 cm  
☐ 44 cm



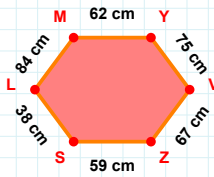
|ZS| + |SR| = ....

Cevap: ..... br



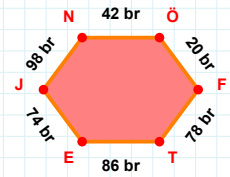
|ÇE| kaç cmdir?

- ☐ 2 cm  
☐ 3 cm  
☐ 4 cm



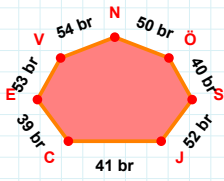
|ZS| + |YV| = ....

Cevap: ..... cm



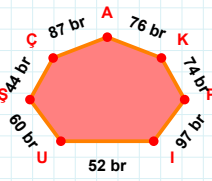
98 br hangi kenara aittir?

Kenar: .....

**SORU:** Aşağıdaki geometrik şekillerle ilgili soruları cevaplayınız.

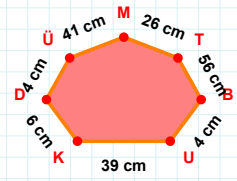
$$|CJ| + |SÖ| = \dots$$

Cevap: ..... br



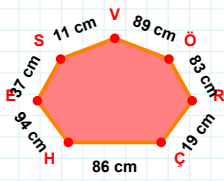
76 br hangi kenara aittir?

- ☐ ŞU kenarı  
☐ AÇ kenarı  
☐ KÇ kenarı



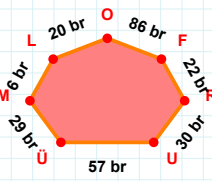
26 cm hangi kenara aittir?

- ☐ DT kenarı  
☐ DK kenarı  
☐ TM kenarı



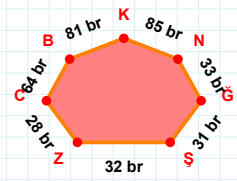
11 cm hangi kenara aittir?

Kenar: .....



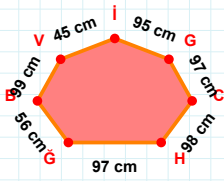
86 br hangi kenara aittir?

- ☐ FO kenarı  
☐ MÜ kenarı  
☐ LÜ kenarı



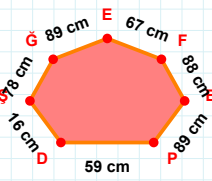
32 br hangi kenara aittir?

Kenar: .....



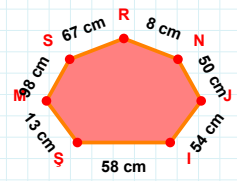
95 cm hangi kenara aittir?

- ☐ HG kenarı  
☐ İV kenarı  
☐ HC kenarı



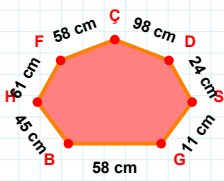
$$|GŞ| + |FE| = \dots$$

Cevap: ..... cm



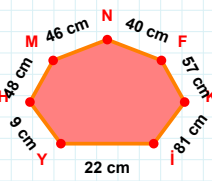
67 cm hangi kenara aittir?

Kenar: .....



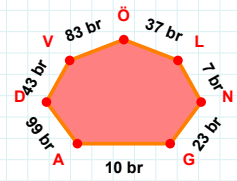
$$|GS| + |HB| = \dots$$

Cevap: ..... cm



40 cm hangi kenara aittir?

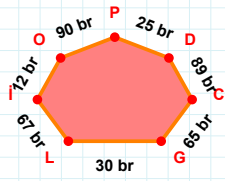
- ☐ FN kenarı  
☐ MY kenarı  
☐ HY kenarı



43 br hangi kenara aittir?

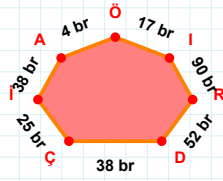
Kenar: .....

**SORU:** Aşağıdaki geometrik şekillerle ilgili soruları cevaplayınız.



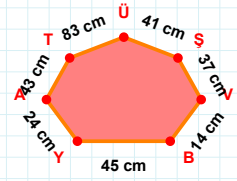
25 br hangi kenara aittir?

Kenar: .....



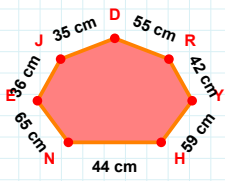
|AI| kaç brdir?

- ☐ 37 br  
☐ 38 br  
☐ 39 br



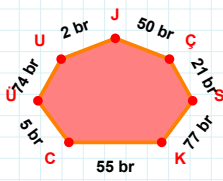
|TA| + |BV| = ....

Cevap: ..... cm



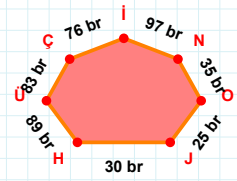
55 cm hangi kenara aittir?

- ☐ JE kenarı  
☐ RE kenarı  
☐ YR kenarı



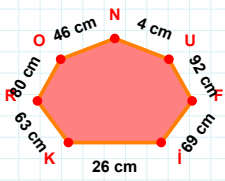
|SC| + |KS| = ....

Cevap: ..... br



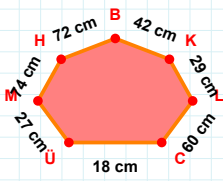
97 br hangi kenara aittir?

- ☐ Nİ kenarı  
☐ JO kenarı  
☐ İO kenarı



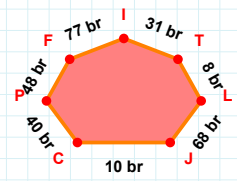
4 cm hangi kenara aittir?

- ☐ RK kenarı  
☐ KO kenarı  
☐ OR kenarı



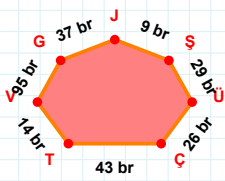
42 cm hangi kenara aittir?

- ☐ CL kenarı  
☐ ÜB kenarı  
☐ HM kenarı



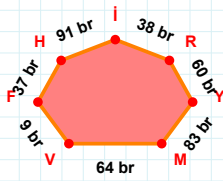
68 br hangi kenara aittir?

Kenar: .....



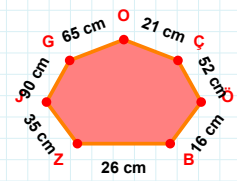
9 br hangi kenara aittir?

- ☐ TÇ kenarı  
☐ VŞ kenarı  
☐ ŞJ kenarı



|HF| kaç brdir?

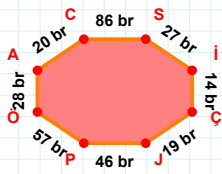
- ☐ 36 br  
☐ 37 br  
☐ 38 br



21 cm hangi kenara aittir?

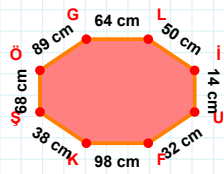
Kenar: .....



**SORU:** Aşağıdaki geometrik şekillerle ilgili soruları cevaplayınız.

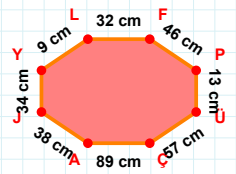
$|ÖA| + |AC| = \dots$

Cevap: ..... br



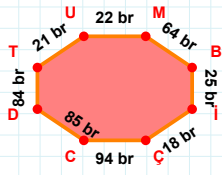
64 cm hangi kenara aittir?

Kenar: .....



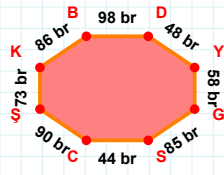
$|LF| + |ÇA| = \dots$

Cevap: ..... cm

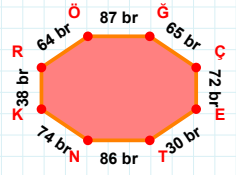


$|CD| + |MB| = \dots$

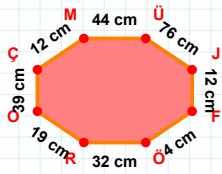
Cevap: ..... br

 $|YG|$  kaç brdir?

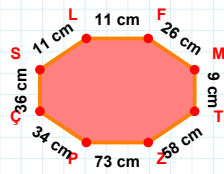
- ☐ 57 br  
☐ 58 br  
☐ 59 br

 $|ĞÇ|$  kaç brdir?

- ☐ 64 br  
☐ 65 br  
☐ 66 br

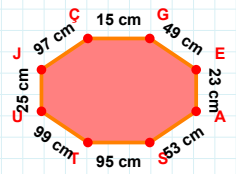
 $|ÇM|$  kaç cmdir?

- ☐ 11 cm  
☐ 12 cm  
☐ 13 cm



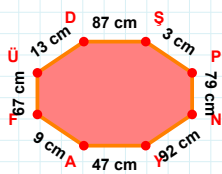
$|ZP| + |MT| = \dots$

Cevap: ..... cm

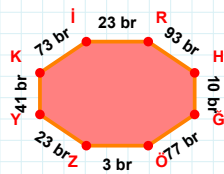


$|TU| + |AS| = \dots$

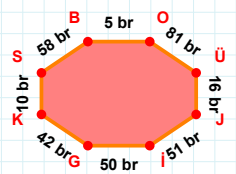
Cevap: ..... cm

 $|ÜD|$  kaç cmdir?

- ☐ 12 cm  
☐ 13 cm  
☐ 14 cm

 $|Ki|$  kaç brdir?

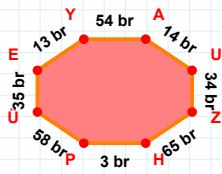
- ☐ 72 br  
☐ 73 br  
☐ 74 br



58 br hangi kenara aittir?

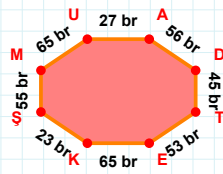
- ☐ ÜJ kenarı  
☐ İG kenarı  
☐ OG kenarı

SORU: Aşağıdaki geometrik şekillerle ilgili soruları cevaplayınız.



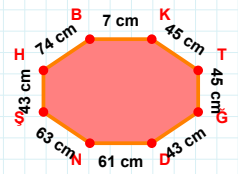
13 br hangi kenara aittir?

- ☐ HÜ kenarı  
☐ YA kenarı  
☐ ZH kenarı



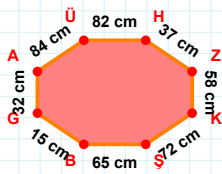
|KS| kaç brdir?

- ☐ 22 br  
☐ 23 br  
☐ 24 br



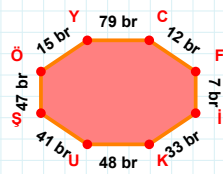
45 cm hangi kenara aittir?

Kenar: .....



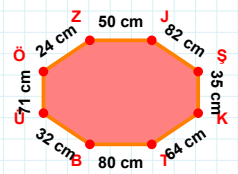
84 cm hangi kenara aittir?

- ☐ BA kenarı  
☐ KŞ kenarı  
☐ HZ kenarı



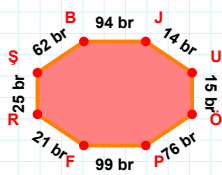
|IK| kaç brdir?

- ☐ 32 br  
☐ 33 br  
☐ 34 br



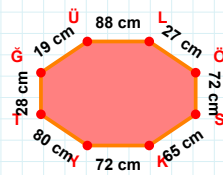
24 cm hangi kenara aittir?

- ☐ ÖŞ kenarı  
☐ JŞ kenarı  
☐ KT kenarı



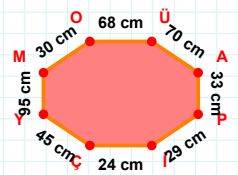
14 br hangi kenara aittir?

Kenar: .....



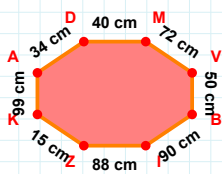
19 cm hangi kenara aittir?

- ☐ ĞS kenarı  
☐ TĞ kenarı  
☐ ÖS kenarı



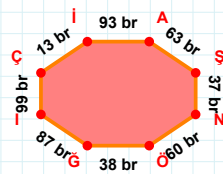
29 cm hangi kenara aittir?

Kenar: .....



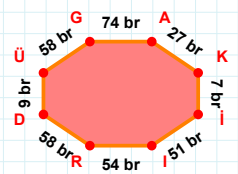
|KA| kaç cmdir?

- ☐ 98 cm  
☐ 99 cm  
☐ 100 cm



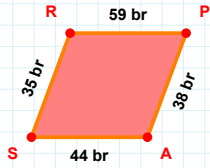
|İÇ| kaç brdir?

- ☐ 98 br  
☐ 99 br  
☐ 100 br



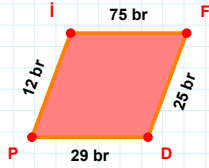
|KI| + |AK| = ....

Cevap: ..... br

**SORU:** Aşağıdaki geometrik şekillerle ilgili soruları cevaplayınız.

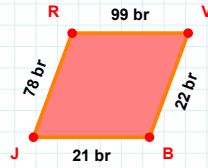
35 br hangi kenara aittir?

- ☐ PA kenarı  
☐ SR kenarı  
☐ RA kenarı



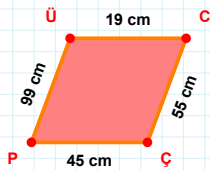
29 br hangi kenara aittir?

Kenar: .....



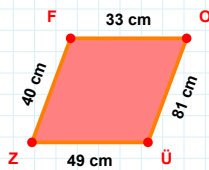
22 br hangi kenara aittir?

Kenar: .....



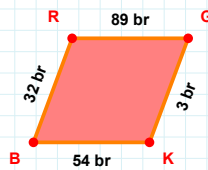
|ÜC| kaç cm'dir?

- ☐ 18 cm  
☐ 19 cm  
☐ 20 cm



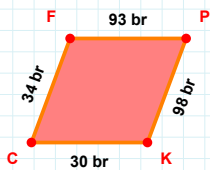
40 cm hangi kenara aittir?

- ☐ ÜF kenarı  
☐ ZF kenarı  
☐ FO kenarı



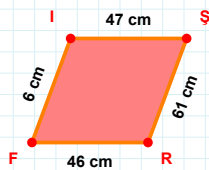
32 br hangi kenara aittir?

- ☐ RK kenarı  
☐ RG kenarı  
☐ BR kenarı



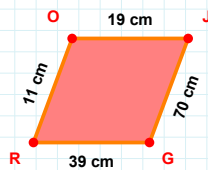
30 br hangi kenara aittir?

Kenar: .....



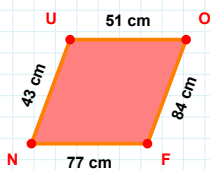
47 cm hangi kenara aittir?

Kenar: .....



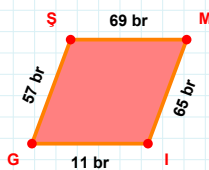
|GR| kaç cm'dir?

- ☐ 38 cm  
☐ 39 cm  
☐ 40 cm



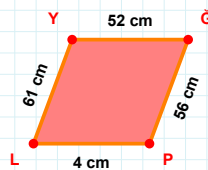
43 cm hangi kenara aittir?

Kenar: .....



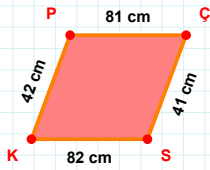
|MI| + |GS| = ....

Cevap: ..... br



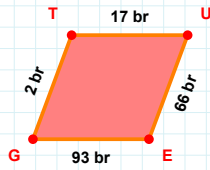
|YĞ| kaç cm'dir?

- ☐ 51 cm  
☐ 52 cm  
☐ 53 cm

**SORU:** Aşağıdaki geometrik şekillerle ilgili soruları cevaplayınız.

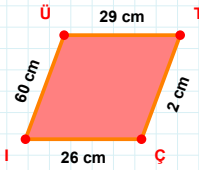
$|ÇS| + |KP| = \dots$

Cevap: ..... cm



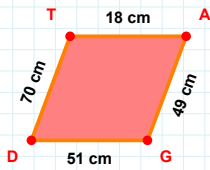
2 br hangi kenara aittir?

- ☐ TE kenarı  
☐ EG kenarı  
☐ GT kenarı



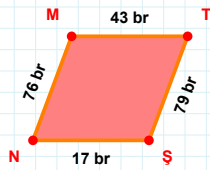
60 cm hangi kenara aittir?

Kenar: .....



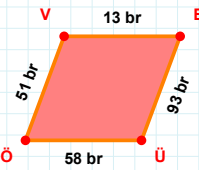
70 cm hangi kenara aittir?

- ☐ DT kenarı  
☐ DA kenarı  
☐ AG kenarı



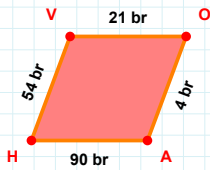
76 br hangi kenara aittir?

- ☐ TN kenarı  
☐ ŞN kenarı  
☐ MT kenarı



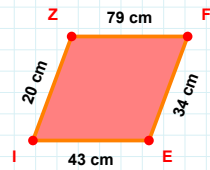
58 br hangi kenara aittir?

Kenar: .....



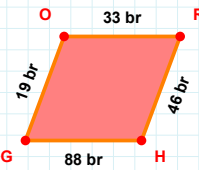
$|HV| + |VO| = \dots$

Cevap: ..... br



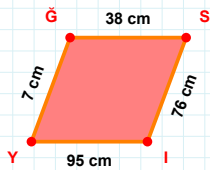
34 cm hangi kenara aittir?

Kenar: .....



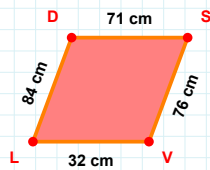
88 br hangi kenara aittir?

Kenar: .....



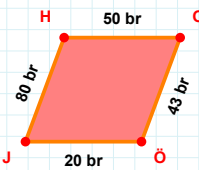
$|Yİ| + |İY| = \dots$

Cevap: ..... cm



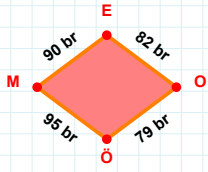
|VL| kaç cmdir?

- ☐ 31 cm  
☐ 32 cm  
☐ 33 cm



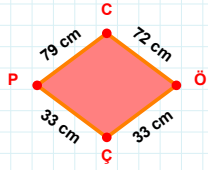
43 br hangi kenara aittir?

Kenar: .....

**SORU:** Aşağıdaki geometrik şekillerle ilgili soruları cevaplayınız.

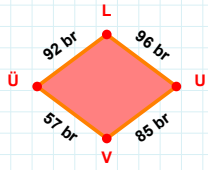
79 br hangi kenara aittir?

Kenar: .....



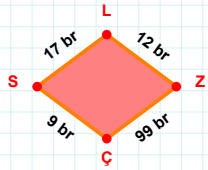
|CÖ| kaç cm'dir?

- ☐ 71 cm  
☐ 72 cm  
☐ 73 cm



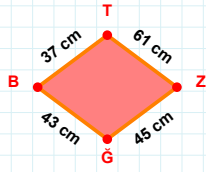
92 br hangi kenara aittir?

- ☐ UÜ kenarı  
☐ VÜ kenarı  
☐ LU kenarı



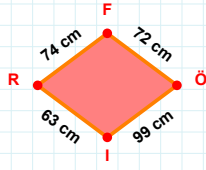
|SL| kaç br'dir?

- ☐ 16 br  
☐ 17 br  
☐ 18 br



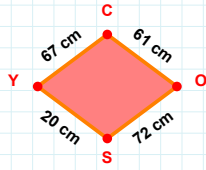
|BT| + |TZ| = ....

Cevap: ..... cm



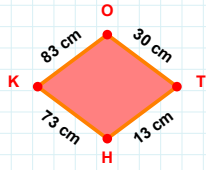
72 cm hangi kenara aittir?

Kenar: .....



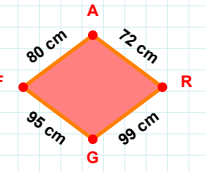
67 cm hangi kenara aittir?

- ☐ YO kenarı  
☐ YC kenarı  
☐ CO kenarı



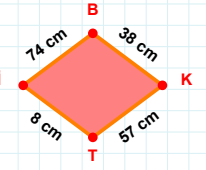
83 cm hangi kenara aittir?

- ☐ OH kenarı  
☐ KO kenarı  
☐ TH kenarı



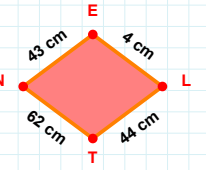
72 cm hangi kenara aittir?

Kenar: .....



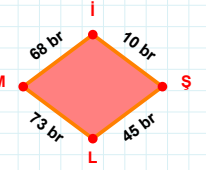
57 cm hangi kenara aittir?

Kenar: .....



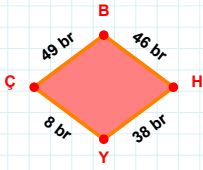
43 cm hangi kenara aittir?

- ☐ ET kenarı  
☐ TN kenarı  
☐ EL kenarı



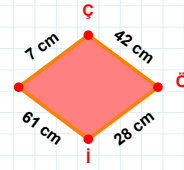
|İŞ| + |ML| = ....

Cevap: ..... br

**SORU:** Aşağıdaki geometrik şekillerle ilgili soruları cevaplayınız.

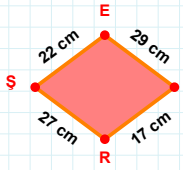
$$|HY| + |YÇ| = \dots$$

Cevap: ..... br



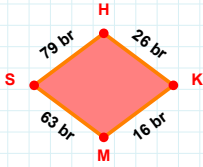
$$|İİ| + |Çİ| = \dots$$

Cevap: ..... cm



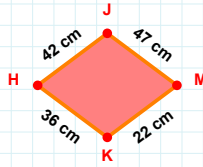
22 cm hangi kenara aittir?

- ☐ ŞE kenarı  
☐ Şİ kenarı  
☐ İR kenarı



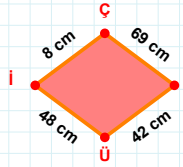
79 br hangi kenara aittir?

- ☐ HK kenarı  
☐ SK kenarı  
☐ KM kenarı



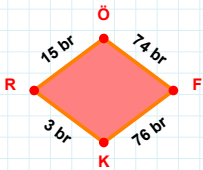
|HJ| kaç cmdir?

- ☐ 41 cm  
☐ 42 cm  
☐ 43 cm



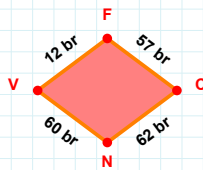
69 cm hangi kenara aittir?

Kenar: .....



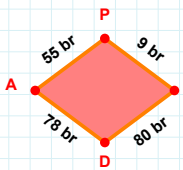
15 br hangi kenara aittir?

- ☐ RÖ kenarı  
☐ RF kenarı  
☐ FK kenarı



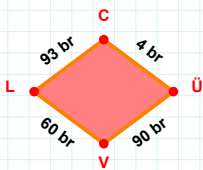
$$|CN| + |VF| = \dots$$

Cevap: ..... br



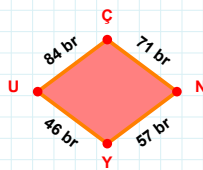
|DA| kaç brdir?

- ☐ 77 br  
☐ 78 br  
☐ 79 br



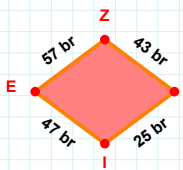
|VL| kaç brdir?

- ☐ 59 br  
☐ 60 br  
☐ 61 br



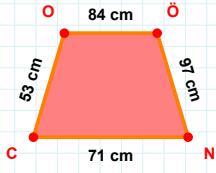
$$|YU| + |UÇ| = \dots$$

Cevap: ..... br

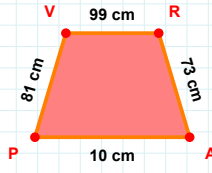


$$|ZS| + |IE| = \dots$$

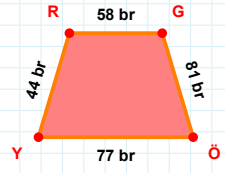
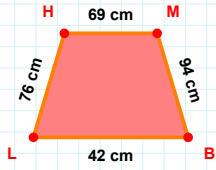
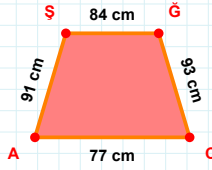
Cevap: ..... br

**SORU:** Aşağıdaki geometrik şekillerle ilgili soruları cevaplayınız.**|OÖ| kaç cm'dir?**

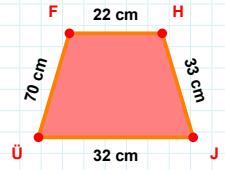
- ☐ 83 cm  
☐ 84 cm  
☐ 85 cm

**|VR| kaç cm'dir?**

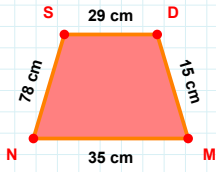
- ☐ 98 cm  
☐ 99 cm  
☐ 100 cm

**|YR| + |RG| = ....****Cevap: ..... br****|HM| + |BL| = ....****Cevap: ..... cm****91 cm hangi kenara aittir?**

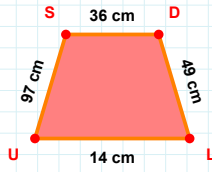
- ☐ CA kenarı  
☐ CŞ kenarı  
☐ ŞĞ kenarı

**70 cm hangi kenara aittir?**

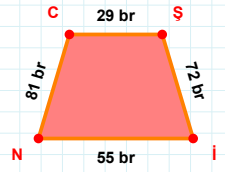
- ☐ FH kenarı  
☐ FJ kenarı  
☐ HJ kenarı

**|NS| kaç cm'dir?**

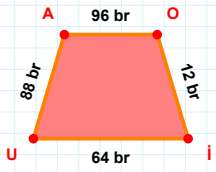
- ☐ 77 cm  
☐ 78 cm  
☐ 79 cm

**97 cm hangi kenara aittir?**

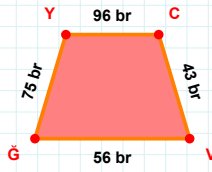
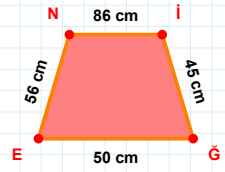
- ☐ LU kenarı  
☐ SL kenarı  
☐ DL kenarı

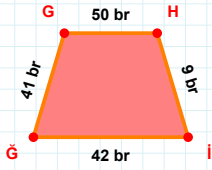
**81 br hangi kenara aittir?**

- ☐ CŞ kenarı  
☐ NC kenarı  
☐ İC kenarı

**88 br hangi kenara aittir?**

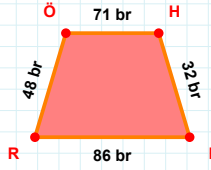
- ☐ OU kenarı  
☐ UA kenarı  
☐ AO kenarı

**96 br hangi kenara aittir?****Kenar: .....****86 cm hangi kenara aittir?****Kenar: .....**

**SORU:** Aşağıdaki geometrik şekillerle ilgili soruları cevaplayınız.

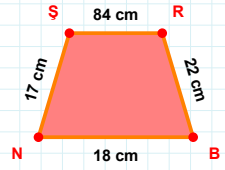
9 br hangi kenara aittir?

Kenar: .....



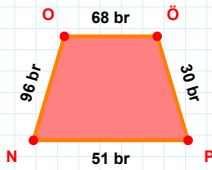
|HI| kaç brdir?

- ☐ 31 br  
☐ 32 br  
☐ 33 br



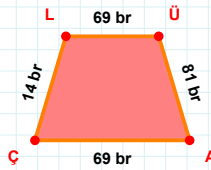
17 cm hangi kenara aittir?

- ☐ ŞB kenarı  
☐ BN kenarı  
☐ ŞR kenarı



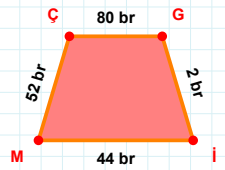
51 br hangi kenara aittir?

Kenar: .....



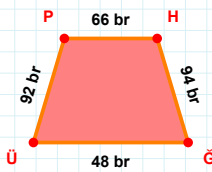
|AÇ| + |ÜA| = ....

Cevap: ..... br



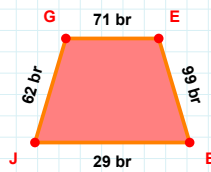
52 br hangi kenara aittir?

- ☐ ÇG kenarı  
☐ İÇ kenarı  
☐ Gİ kenarı



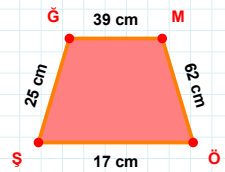
94 br hangi kenara aittir?

Kenar: .....



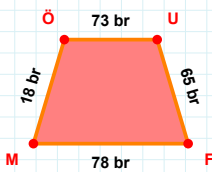
62 br hangi kenara aittir?

- ☐ EB kenarı  
☐ JG kenarı  
☐ BG kenarı



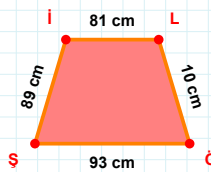
25 cm hangi kenara aittir?

- ☐ ÖŞ kenarı  
☐ ŞĞ kenarı  
☐ ÖĞ kenarı



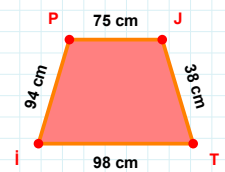
|FM| kaç brdir?

- ☐ 77 br  
☐ 78 br  
☐ 79 br



|ÖŞ| kaç cmdir?

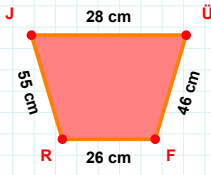
- ☐ 92 cm  
☐ 93 cm  
☐ 94 cm



|JT| kaç cmdir?

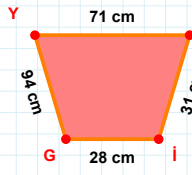
- ☐ 37 cm  
☐ 38 cm  
☐ 39 cm



**SORU:** Aşağıdaki geometrik şekillerle ilgili soruları cevaplayınız.

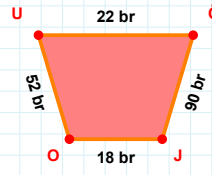
$$|JÜ| + |RJ| = \dots$$

Cevap: ..... cm



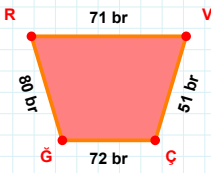
$$|GY| \text{ kaç cm'dir?}$$

- ☐ 93 cm  
☐ 94 cm  
☐ 95 cm



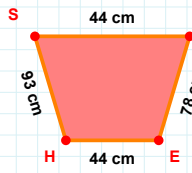
$$90 \text{ br hangi kenara aittir?}$$

Kenar: .....



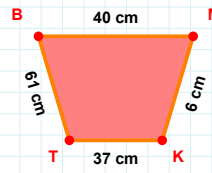
$$80 \text{ br hangi kenara aittir?}$$

- ☐ VÇ kenarı  
☐ GR kenarı  
☐ GV kenarı



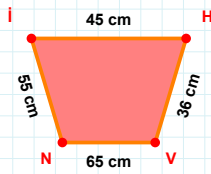
$$44 \text{ cm hangi kenara aittir?}$$

Kenar: .....



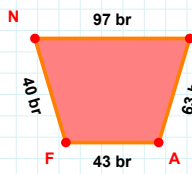
$$|MK| + |TB| = \dots$$

Cevap: ..... cm



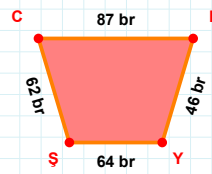
$$|VN| \text{ kaç cm'dir?}$$

- ☐ 64 cm  
☐ 65 cm  
☐ 66 cm



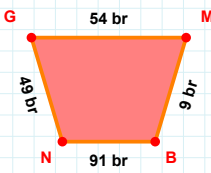
$$|AF| \text{ kaç br'dir?}$$

- ☐ 42 br  
☐ 43 br  
☐ 44 br



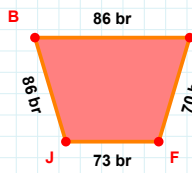
$$62 \text{ br hangi kenara aittir?}$$

- ☐ YŞ kenarı  
☐ PY kenarı  
☐ CY kenarı



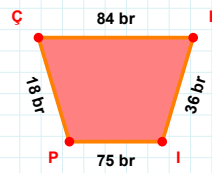
$$9 \text{ br hangi kenara aittir?}$$

Kenar: .....



$$86 \text{ br hangi kenara aittir?}$$

- ☐ JD kenarı  
☐ DF kenarı  
☐ FJ kenarı



$$|ÇK| \text{ kaç br'dir?}$$

- ☐ 83 br  
☐ 84 br  
☐ 85 br

**SORU:** Aşağıdaki geometrik şekillerle ilgili soruları cevaplayınız.

**25 cm hangi kenara aittir?**

☐ DG kenarı  
☐ JG kenarı  
☐ BD kenarı

**|GG| kaç cm'dir?**

☐ 87 cm  
☐ 88 cm  
☐ 89 cm

**80 br hangi kenara aittir?**

Kenar: .....

**56 br hangi kenara aittir?**

☐ AR kenarı  
☐ AG kenarı  
☐ RD kenarı

**54 br hangi kenara aittir?**

Kenar: .....

**|FD| kaç cm'dir?**

☐ 81 cm  
☐ 82 cm  
☐ 83 cm

**98 br hangi kenara aittir?**

Kenar: .....

**|IY| kaç cm'dir?**

☐ 38 cm  
☐ 39 cm  
☐ 40 cm

**|RG| kaç cm'dir?**

☐ 43 cm  
☐ 44 cm  
☐ 45 cm

**|IF| kaç br'dir?**

☐ 5 br  
☐ 6 br  
☐ 7 br

**73 cm hangi kenara aittir?**

Kenar: .....

**|HC| kaç cm'dir?**

☐ 91 cm  
☐ 92 cm  
☐ 93 cm

SÜREÇ ODAKLI DEĞERLENDİRME ÖLÇEĞİ			
Geliştirilmeli (0-109)	İyi (110-187)	Çok İyi (188-265)	Mükemmel (266-312)
<input type="checkbox"/>	<input type="checkbox"/>	<input type="checkbox"/>	<input type="checkbox"/>

Hazırlayan: .....

Bu bölüme sınıfınızın ilgili kazanıma yönelik genel durumuna ilişkin gözlem ve izlenimlerinizi, öğrencilerinizin bu kazanımla ilgili öğrenme eksikliklerini ve bu eksikliklerin giderilmesi amacıyla yaptığınız/yapmayı planladığınız faaliyetleri not edebilirsiniz.

No	Adı - Soyadı	Toplam Puan	Değerlendirme
1			
2			
3			
4			
5			
6			
7			
8			
9			
10			
11			
12			
13			
14			
15			
16			
17			
18			
19			
20			
21			
22			
23			
24			
25			
26			
27			
28			
29			
30			
31			
32			
33			
34			
35			

Hazırlayan: .....