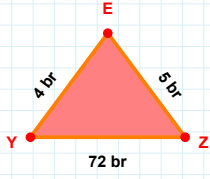
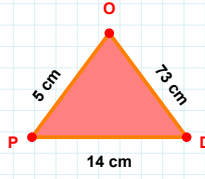


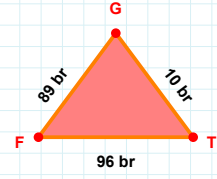
SORU: Aşağıdaki geometrik şekillerle ilgili soruları cevaplayınız.

5 br hangi kenara aittir?

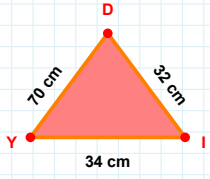
- ☐ EY kenarı
☐ XY kenarı
☐ YZ kenarı

 $|DO| + |PD| = \dots$

Cevap: cm

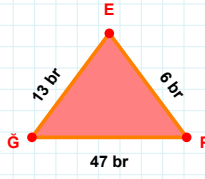
 $|GF| + |FT| = \dots$

Cevap: br



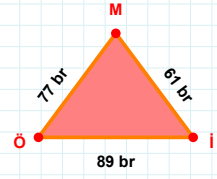
34 cm hangi kenara aittir?

Kenar:



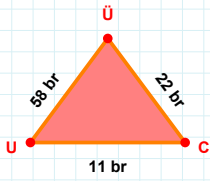
47 br hangi kenara aittir?

Kenar:



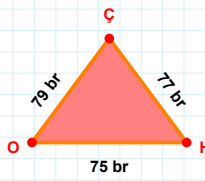
61 br hangi kenara aittir?

- ☐ İM kenarı
☐ XY kenarı
☐ MÖ kenarı

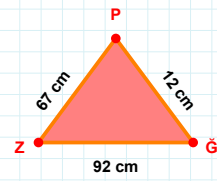


58 br hangi kenara aittir?

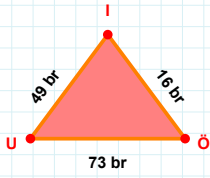
Kenar:

 $|OH| + |ÇO| = \dots$

Cevap: br

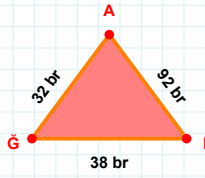
 $|ĞP|$ kaç cm'dir?

- ☐ 11 cm
☐ 12 cm
☐ 13 cm

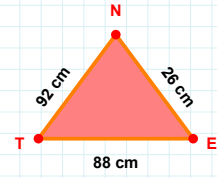


73 br hangi kenara aittir?

Kenar:

 $|Ğİ| + |IA| = \dots$

Cevap: br



26 cm hangi kenara aittir?

- ☐ TE kenarı
☐ NT kenarı
☐ XY kenarı

SORU: Aşağıdaki geometrik şekillerle ilgili soruları cevaplayınız.

86 cm hangi kenara aittir?

☐ GT kenarı
☐ BG kenarı
☐ XY kenarı

$|CS| + |SL| = \dots$

Cevap: cm

7 br hangi kenara aittir?

☐ XY kenarı
☐ NÇ kenarı
☐ ÇH kenarı

18 cm hangi kenara aittir?

☐ BY kenarı
☐ XY kenarı
☐ IB kenarı

3 br hangi kenara aittir?

☐ EB kenarı
☐ XY kenarı
☐ OE kenarı

$|IY|$ kaç brdir?

☐ 27 br
☐ 28 br
☐ 29 br

9 cm hangi kenara aittir?

☐ JI kenarı
☐ XY kenarı
☐ ID kenarı

$|GM| + |HG| = \dots$

Cevap: cm

$|MS| + |SL| = \dots$

Cevap: cm

42 cm hangi kenara aittir?

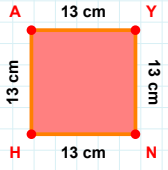
Kenar:

$|US|$ kaç brdir?

☐ 4 br
☐ 5 br
☐ 6 br

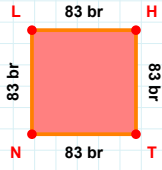
$|YC|$ kaç cmdir?

☐ 37 cm
☐ 38 cm
☐ 39 cm

SORU: Aşağıdaki geometrik şekillerle ilgili soruları cevaplayınız.

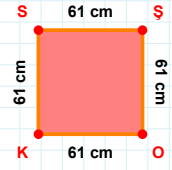
13 cm hangi kenara aittir?

Kenar:



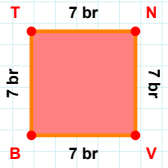
|NL| kaç brdir?

- ☐ 82 br
☐ 83 br
☐ 84 br



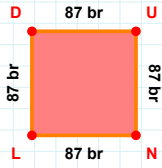
|SO| kaç cmdir?

- ☐ 60 cm
☐ 61 cm
☐ 62 cm



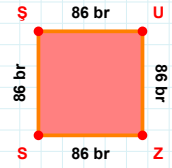
7 br hangi kenara aittir?

Kenar:



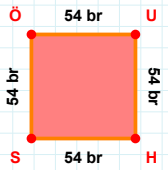
87 br hangi kenara aittir?

Kenar:



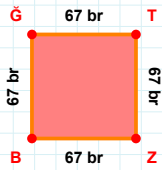
|SS| kaç brdir?

- ☐ 85 br
☐ 86 br
☐ 87 br



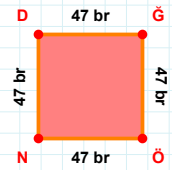
|ÖU| kaç brdir?

- ☐ 53 br
☐ 54 br
☐ 55 br



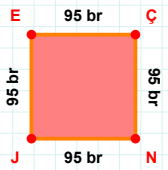
|ZB| kaç brdir?

- ☐ 66 br
☐ 67 br
☐ 68 br



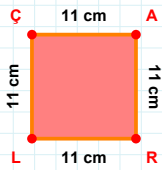
|ND| + |DĞ| =

Cevap: br



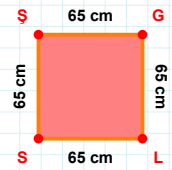
|NJ| kaç brdir?

- ☐ 94 br
☐ 95 br
☐ 96 br



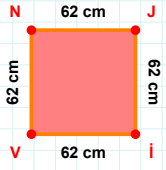
|ÇA| kaç cmdir?

- ☐ 10 cm
☐ 11 cm
☐ 12 cm

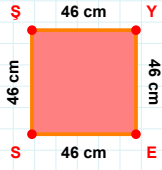


65 cm hangi kenara aittir?

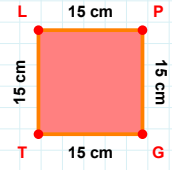
Kenar:

SORU: Aşağıdaki geometrik şekillerle ilgili soruları cevaplayınız.**62 cm hangi kenara aittir?**

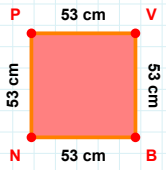
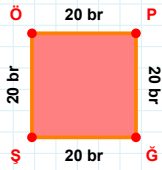
- ☐ VJ kenarı
☐ JI kenarı
☐ VN kenarı

**|SS| kaç cmdir?**

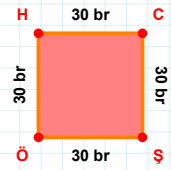
- ☐ 45 cm
☐ 46 cm
☐ 47 cm

**|TL| kaç cmdir?**

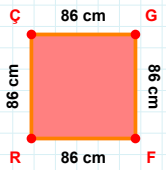
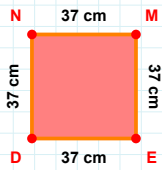
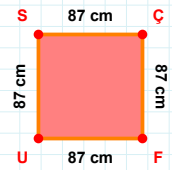
- ☐ 14 cm
☐ 15 cm
☐ 16 cm

**|VB| + |NP| =****Cevap:** cm**|ĞŞ| kaç brdir?**

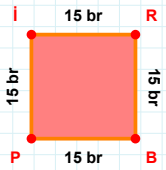
- ☐ 19 br
☐ 20 br
☐ 21 br

**30 br hangi kenara aittir?**

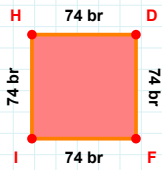
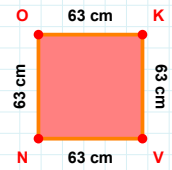
- ☐ CŞ kenarı
☐ CÖ kenarı
☐ HC kenarı

**86 cm hangi kenara aittir?****Kenar:****37 cm hangi kenara aittir?****Kenar:****87 cm hangi kenara aittir?**

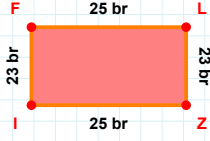
- ☐ US kenarı
☐ FU kenarı
☐ SF kenarı

**15 br hangi kenara aittir?**

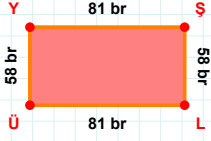
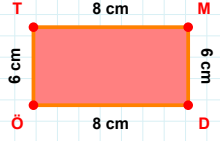
- ☐ İR kenarı
☐ Bİ kenarı
☐ Pİ kenarı

**|HD| + |DF| =****Cevap:** br**|NO| kaç cmdir?**

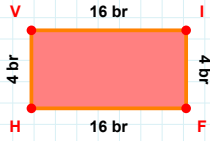
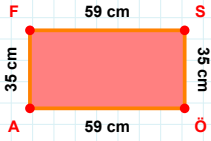
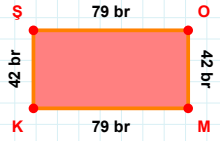
- ☐ 62 cm
☐ 63 cm
☐ 64 cm

SORU: Aşağıdaki geometrik şekillerle ilgili soruları cevaplayınız.**23 br hangi kenara aittir?**

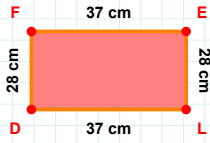
- ☐ ZI kenarı
☐ IF kenarı
☐ FZ kenarı

**|LÜ| + |YŞ| =****Cevap:** br**|MD| kaç cm'dir?**

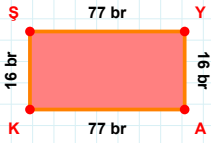
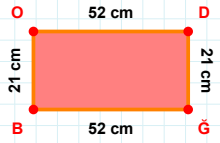
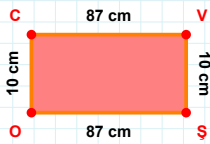
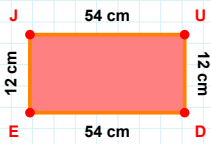
- ☐ 5 cm
☐ 6 cm
☐ 7 cm

**|FH| + |HV| =****Cevap:** br**|AF| + |ÖA| =****Cevap:** cm**42 br hangi kenara aittir?**

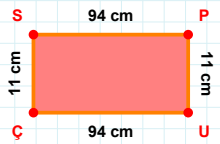
- ☐ KO kenarı
☐ ŞO kenarı
☐ OM kenarı

**28 cm hangi kenara aittir?**

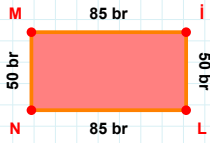
- ☐ FE kenarı
☐ ED kenarı
☐ LD kenarı

**16 br hangi kenara aittir?****Kenar:****21 cm hangi kenara aittir?****Kenar:****10 cm hangi kenara aittir?****Kenar:****12 cm hangi kenara aittir?**

- ☐ UD kenarı
☐ JU kenarı
☐ JD kenarı

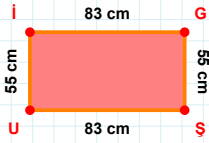
**|UÇ| kaç cm'dir?**

- ☐ 93 cm
☐ 94 cm
☐ 95 cm

SORU: Aşağıdaki geometrik şekillerle ilgili soruları cevaplayınız.

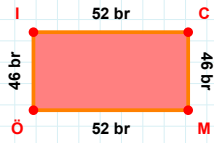
50 br hangi kenara aittir?

- ☐ NM kenarı
☐ ML kenarı
☐ İL kenarı



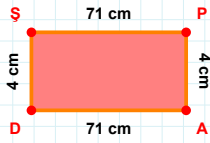
55 cm hangi kenara aittir?

- ☐ İG kenarı
☐ GŞ kenarı
☐ İŞ kenarı



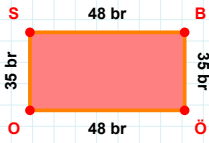
46 br hangi kenara aittir?

Kenar:



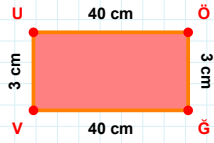
4 cm hangi kenara aittir?

- ☐ DŞ kenarı
☐ AD kenarı
☐ PD kenarı



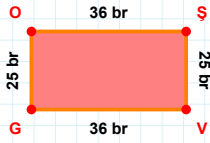
|OS| kaç brdir?

- ☐ 34 br
☐ 35 br
☐ 36 br



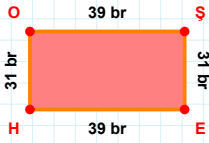
|UÖ| kaç cmdir?

- ☐ 39 cm
☐ 40 cm
☐ 41 cm



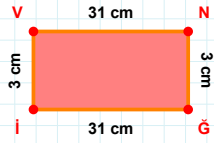
36 br hangi kenara aittir?

Kenar:



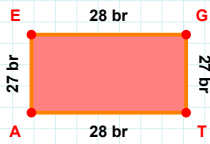
31 br hangi kenara aittir?

- ☐ HŞ kenarı
☐ HO kenarı
☐ ŞE kenarı



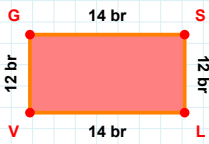
|Ğİ| kaç cmdir?

- ☐ 30 cm
☐ 31 cm
☐ 32 cm



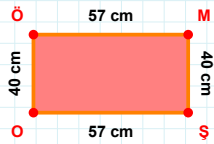
27 br hangi kenara aittir?

- ☐ GT kenarı
☐ AE kenarı
☐ GA kenarı



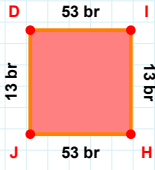
|GS| + |LV| =

Cevap: br



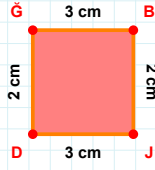
40 cm hangi kenara aittir?

- ☐ OÖ kenarı
☐ MŞ kenarı
☐ ÖŞ kenarı

SORU: Aşağıdaki geometrik şekillerle ilgili soruları cevaplayınız.

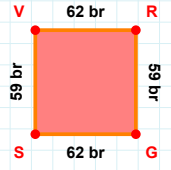
13 br hangi kenara aittir?

- ☐ IH kenarı
☐ IJ kenarı
☐ HJ kenarı

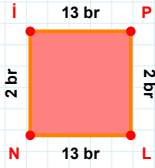


2 cm hangi kenara aittir?

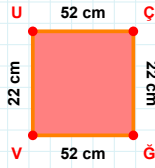
- ☐ JD kenarı
☐ JĞ kenarı
☐ BJ kenarı

 $|RG| + |SV| = \dots$

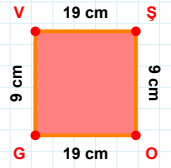
Cevap: br

 $|NI|$ kaç brdir?

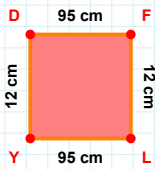
- ☐ 1 br
☐ 2 br
☐ 3 br

 $|ĞV| + |UÇ| = \dots$

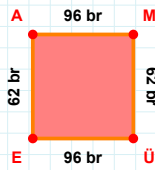
Cevap: cm

 $|GV|$ kaç cm'dir?

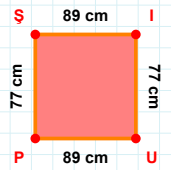
- ☐ 8 cm
☐ 9 cm
☐ 10 cm

 $|LY|$ kaç cm'dir?

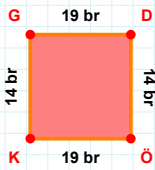
- ☐ 94 cm
☐ 95 cm
☐ 96 cm

 $|MÜ|$ kaç brdir?

- ☐ 61 br
☐ 62 br
☐ 63 br

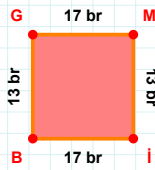
 $|PS| + |UP| = \dots$

Cevap: cm



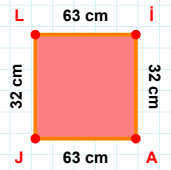
14 br hangi kenara aittir?

Kenar:



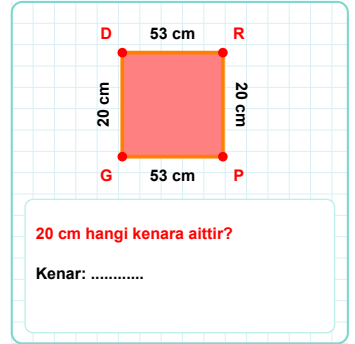
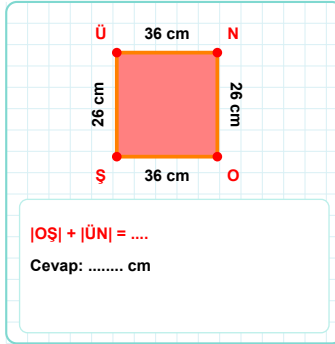
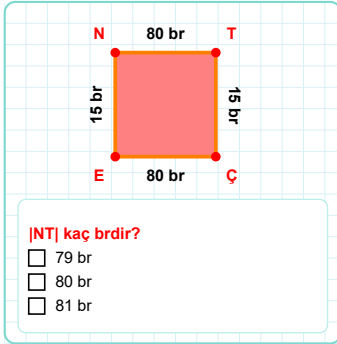
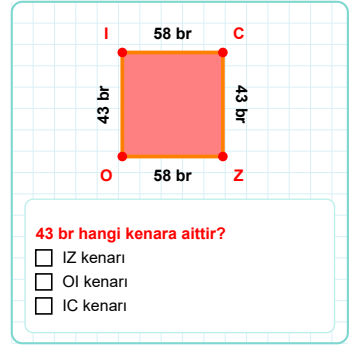
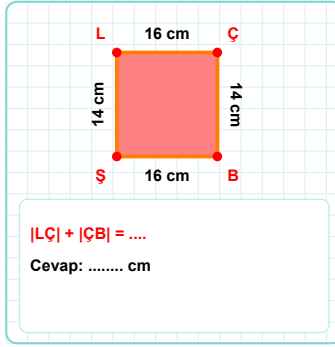
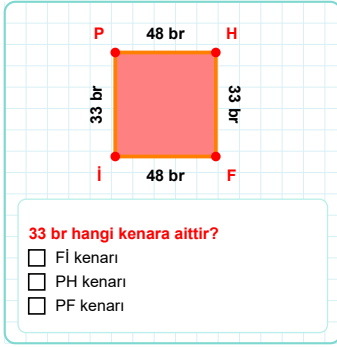
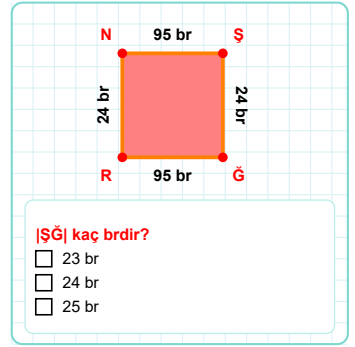
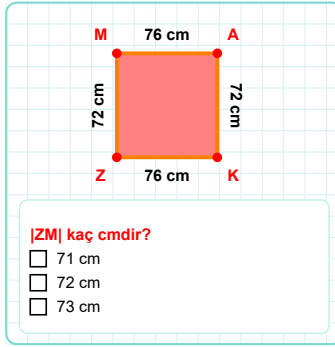
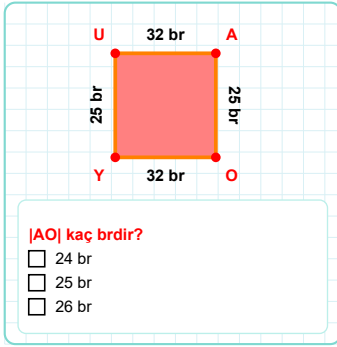
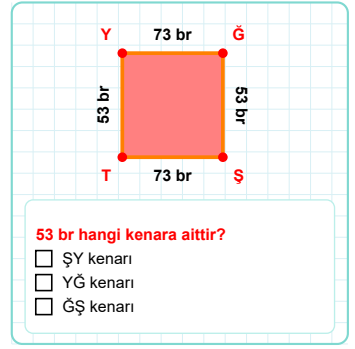
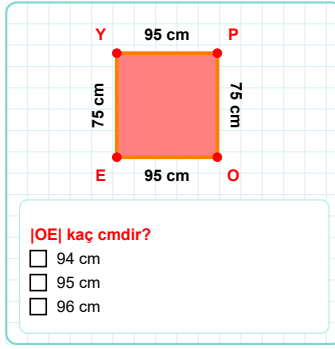
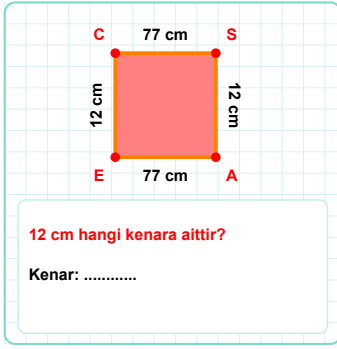
17 br hangi kenara aittir?

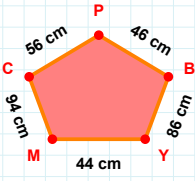
Kenar:

 $|LI| + |AJ| = \dots$

Cevap: cm

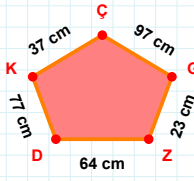
SORU: Aşağıdaki geometrik şekillerle ilgili soruları cevaplayınız.



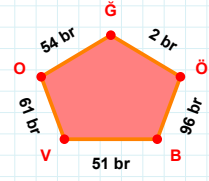
SORU: Aşağıdaki geometrik şekillerle ilgili soruları cevaplayınız.

46 cm hangi kenara aittir?

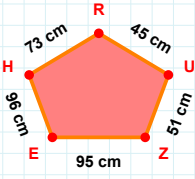
Kenar:

 $|GC| + |ZG| = \dots$

Cevap: cm

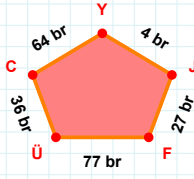
 $|OV|$ kaç brdir?

- ☐ 60 br
☐ 61 br
☐ 62 br

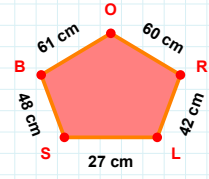


45 cm hangi kenara aittir?

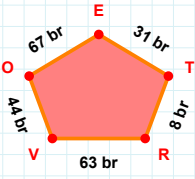
- ☐ HZ kenarı
☐ HE kenarı
☐ EZ kenarı

 $|ÜF| + |JY| = \dots$

Cevap: br

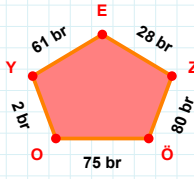
 $|SL|$ kaç cmdir?

- ☐ 26 cm
☐ 27 cm
☐ 28 cm



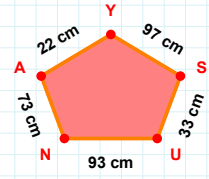
31 br hangi kenara aittir?

- ☐ RT kenarı
☐ EO kenarı
☐ VT kenarı

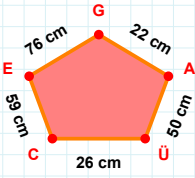


28 br hangi kenara aittir?

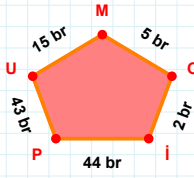
- ☐ ÖY kenarı
☐ ÖZ kenarı
☐ ZE kenarı

 $|US| + |SY| = \dots$

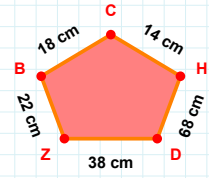
Cevap: cm

 $|GE|$ kaç cmdir?

- ☐ 75 cm
☐ 76 cm
☐ 77 cm

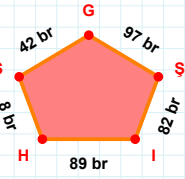
 $|Pi| + |İO| = \dots$

Cevap: br

 $|DH|$ kaç cmdir?

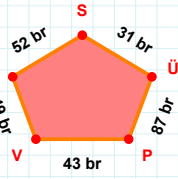
- ☐ 67 cm
☐ 68 cm
☐ 69 cm

SORU: Aşağıdaki geometrik şekillerle ilgili soruları cevaplayınız.



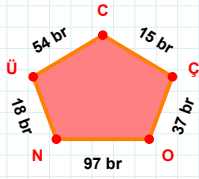
8 br hangi kenara aittir?

Kenar:



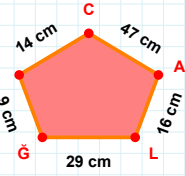
31 br hangi kenara aittir?

- ☐ ÜS kenarı
☐ Üİ kenarı
☐ PÜ kenarı



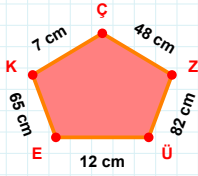
15 br hangi kenara aittir?

- ☐ OÜ kenarı
☐ ÇÇ kenarı
☐ ÜN kenarı



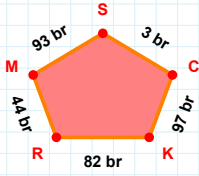
$|İL| + |CI| = \dots$

Cevap: cm



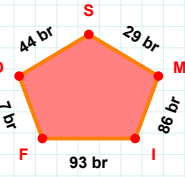
$|ÜZ|$ kaç cm'dir?

- ☐ 81 cm
☐ 82 cm
☐ 83 cm



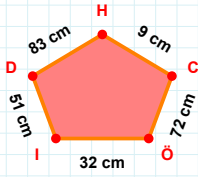
97 br hangi kenara aittir?

Kenar:



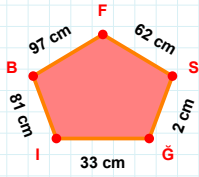
$|OF| + |SO| = \dots$

Cevap: br



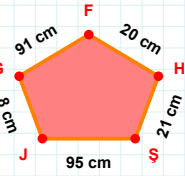
$|ÖC| + |CH| = \dots$

Cevap: cm



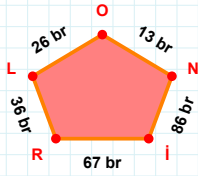
$|SF|$ kaç cm'dir?

- ☐ 61 cm
☐ 62 cm
☐ 63 cm



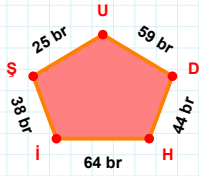
20 cm hangi kenara aittir?

- ☐ FG kenarı
☐ FŞ kenarı
☐ ŞH kenarı



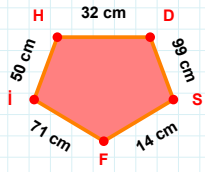
$|İN| + |OL| = \dots$

Cevap: br



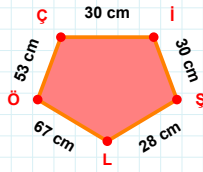
$|DU|$ kaç br'dir?

- ☐ 58 br
☐ 59 br
☐ 60 br

SORU: Aşağıdaki geometrik şekillerle ilgili soruları cevaplayınız.

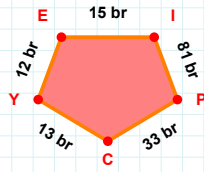
$$|IH| + |HD| = \dots$$

Cevap: cm



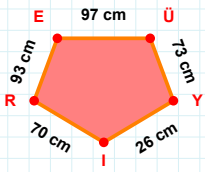
$$|İŞ| + |Çİ| = \dots$$

Cevap: cm



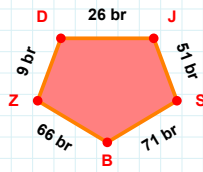
$$|YE| \text{ kaç brdir?}$$

- ☐ 11 br
☐ 12 br
☐ 13 br



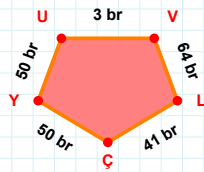
$$93 \text{ cm hangi kenara aittir?}$$

- ☐ YR kenarı
☐ ÜY kenarı
☐ EÜ kenarı



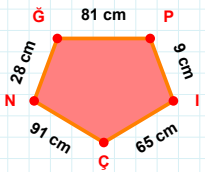
$$9 \text{ br hangi kenara aittir?}$$

- ☐ JS kenarı
☐ ZD kenarı
☐ SZ kenarı



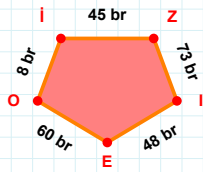
$$64 \text{ br hangi kenara aittir?}$$

Kenar:



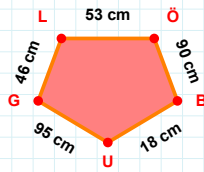
$$|İÇ| + |ÇN| = \dots$$

Cevap: cm



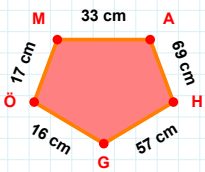
$$8 \text{ br hangi kenara aittir?}$$

- ☐ Oİ kenarı
☐ İE kenarı
☐ Zİ kenarı



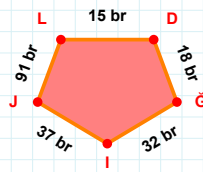
$$46 \text{ cm hangi kenara aittir?}$$

- ☐ GL kenarı
☐ UG kenarı
☐ ÖG kenarı



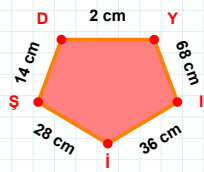
$$|HG| + |ÖM| = \dots$$

Cevap: cm



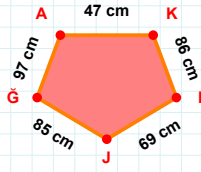
$$91 \text{ br hangi kenara aittir?}$$

- ☐ LD kenarı
☐ LĞ kenarı
☐ JL kenarı



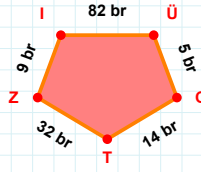
$$14 \text{ cm hangi kenara aittir?}$$

Kenar:

SORU: Aşağıdaki geometrik şekillerle ilgili soruları cevaplayınız.

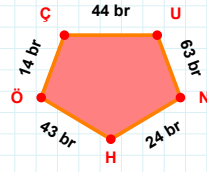
85 cm hangi kenara aittir?

Kenar:



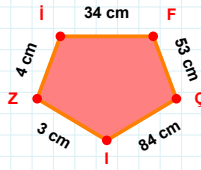
|TZ| kaç brdir?

- ☐ 31 br
☐ 32 br
☐ 33 br



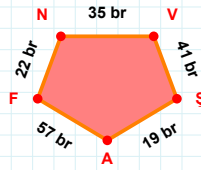
|HÖ| + |NH| =

Cevap: br



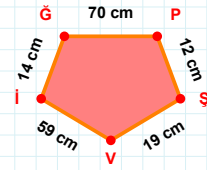
|IZ| + |FÇ| =

Cevap: cm



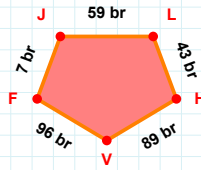
|NV| + |AF| =

Cevap: br



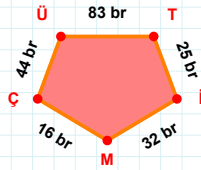
|ĞP| + |ŞV| =

Cevap: cm



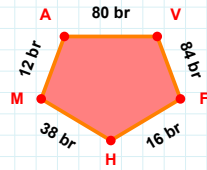
|FJ| + |LH| =

Cevap: br



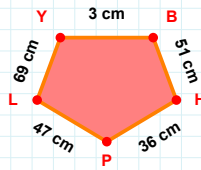
|ÜT| kaç brdir?

- ☐ 82 br
☐ 83 br
☐ 84 br



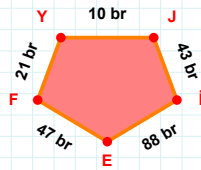
12 br hangi kenara aittir?

Kenar:



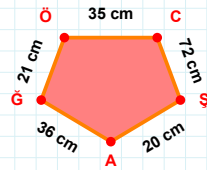
|LY| + |BH| =

Cevap: cm



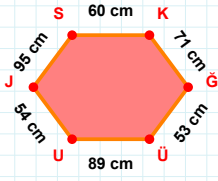
|Jİ| + |EF| =

Cevap: br



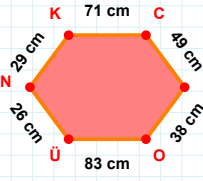
|AĞ| kaç cmdir?

- ☐ 35 cm
☐ 36 cm
☐ 37 cm

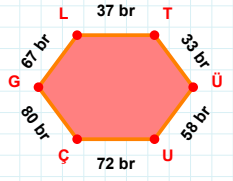
SORU: Aşağıdaki geometrik şekillerle ilgili soruları cevaplayınız.

54 cm hangi kenara aittir?

Kenar:

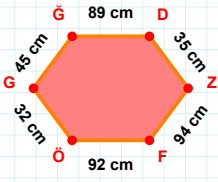
 $|KC| + |EO| = \dots$

Cevap: cm

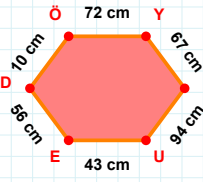


67 br hangi kenara aittir?

- ☐ GÜ kenarı
☐ LT kenarı
☐ ÜU kenarı

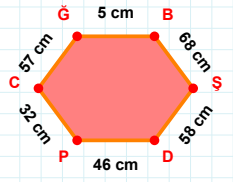
 $|FÖ|$ kaç cm'dir?

- ☐ 91 cm
☐ 92 cm
☐ 93 cm

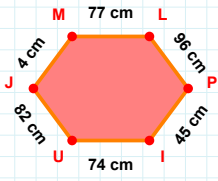


72 cm hangi kenara aittir?

Kenar:

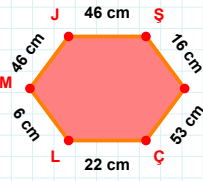
 $|GB| + |PC| = \dots$

Cevap: cm



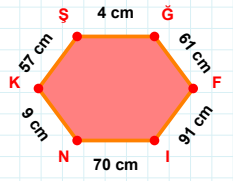
82 cm hangi kenara aittir?

Kenar:

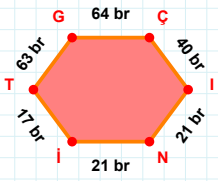


46 cm hangi kenara aittir?

- ☐ LM kenarı
☐ ÇJ kenarı
☐ ŞK kenarı

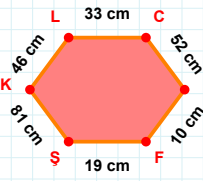
 $|IN| + |NK| = \dots$

Cevap: cm



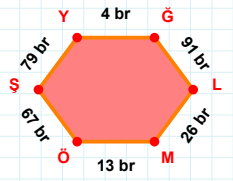
63 br hangi kenara aittir?

- ☐ İT kenarı
☐ GÇ kenarı
☐ GI kenarı



19 cm hangi kenara aittir?

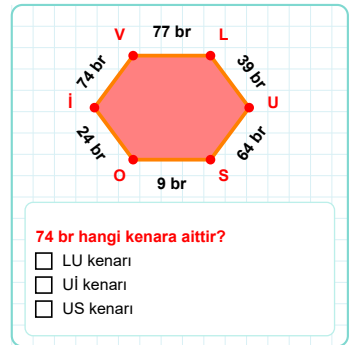
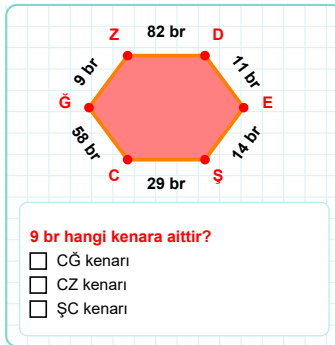
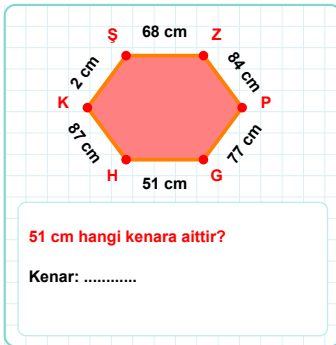
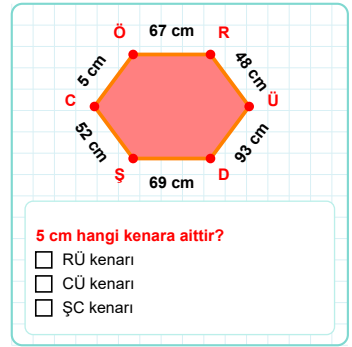
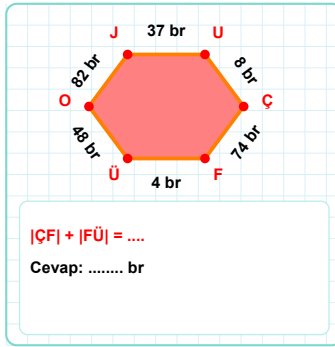
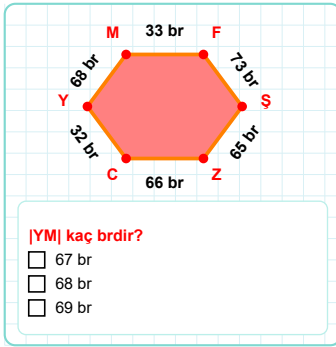
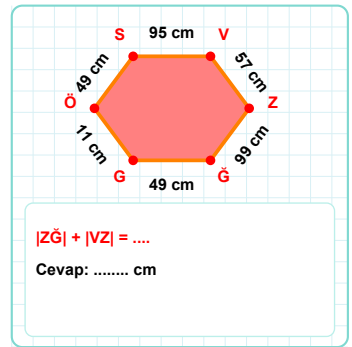
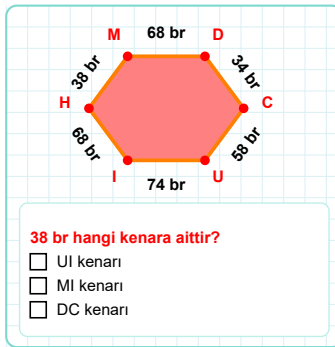
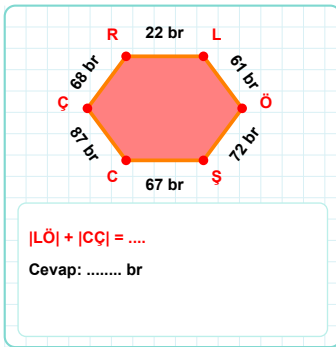
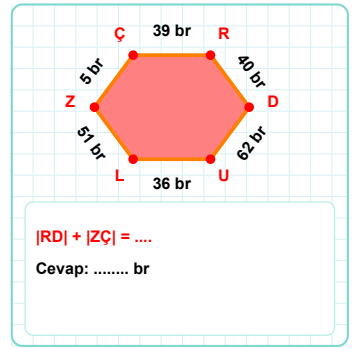
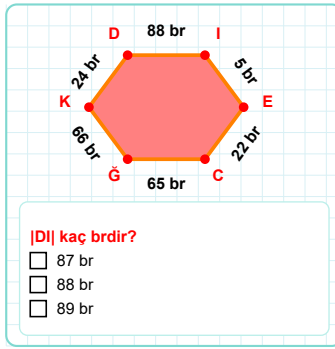
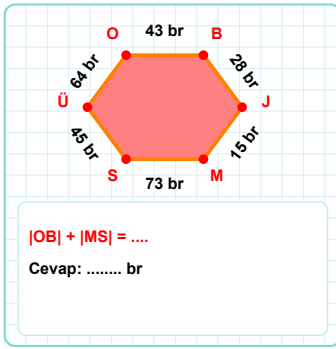
Kenar:

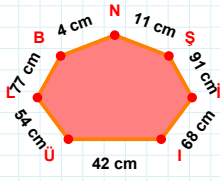


79 br hangi kenara aittir?

- ☐ MÖ kenarı
☐ MŞ kenarı
☐ GL kenarı

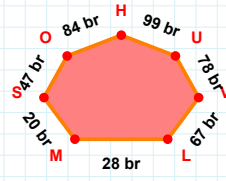
SORU: Aşağıdaki geometrik şekillerle ilgili soruları cevaplayınız.



SORU: Aşağıdaki geometrik şekillerle ilgili soruları cevaplayınız.

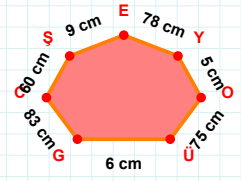
$|iS| + |BL| = \dots$

Cevap: cm



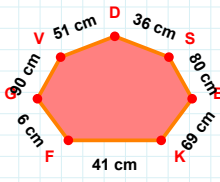
$|iU| + |HO| = \dots$

Cevap: br



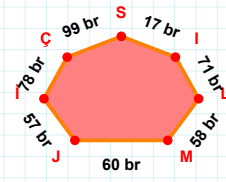
$|OY| + |EŞ| = \dots$

Cevap: cm



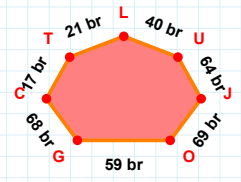
|SD| kaç cmdir?

- ☐ 35 cm
☐ 36 cm
☐ 37 cm



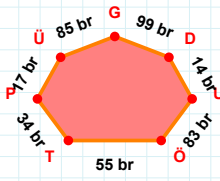
$|iJ| + |Çi| = \dots$

Cevap: br



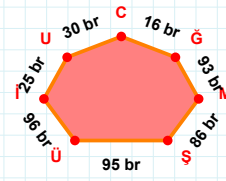
40 br hangi kenara aittir?

- ☐ OJ kenarı
☐ UO kenarı
☐ LT kenarı



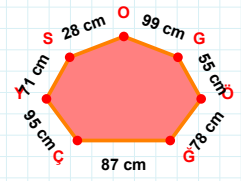
|GÜ| kaç brdir?

- ☐ 84 br
☐ 85 br
☐ 86 br



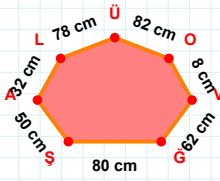
16 br hangi kenara aittir?

- ☐ ŞU kenarı
☐ ŞM kenarı
☐ CU kenarı



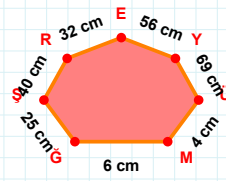
$|YC| + |SY| = \dots$

Cevap: cm



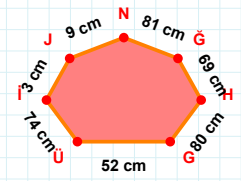
|VO| kaç cmdir?

- ☐ 7 cm
☐ 8 cm
☐ 9 cm



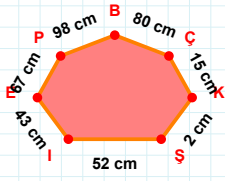
56 cm hangi kenara aittir?

- ☐ RŞ kenarı
☐ GM kenarı
☐ ŞM kenarı



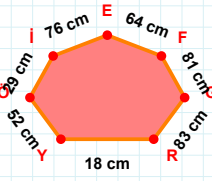
|iÜ| kaç cmdir?

- ☐ 73 cm
☐ 74 cm
☐ 75 cm

SORU: Aşağıdaki geometrik şekillerle ilgili soruları cevaplayınız.

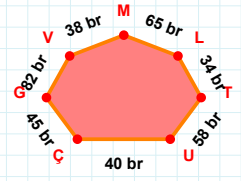
2 cm hangi kenara aittir?

Kenar:



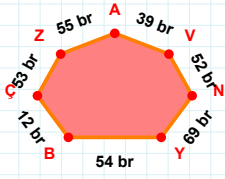
64 cm hangi kenara aittir?

Kenar:

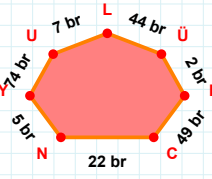


65 br hangi kenara aittir?

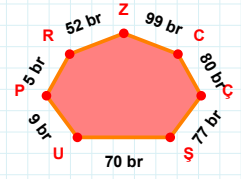
- ☐ ÇL kenarı
☐ TL kenarı
☐ ÇU kenarı

 $|NV| + |AZ| = \dots$

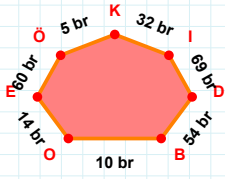
Cevap: br

 $|YN| + |UY| = \dots$

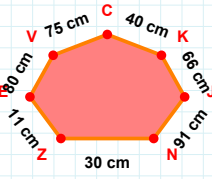
Cevap: br

 $|ŞÇ|$ kaç brdir?

- ☐ 76 br
☐ 77 br
☐ 78 br

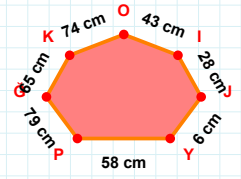
 $|OB|$ kaç brdir?

- ☐ 9 br
☐ 10 br
☐ 11 br



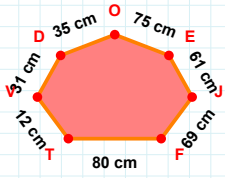
80 cm hangi kenara aittir?

Kenar:

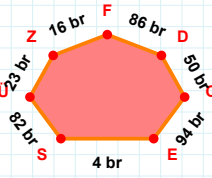


43 cm hangi kenara aittir?

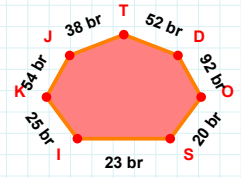
- ☐ ÖY kenarı
☐ YJ kenarı
☐ IO kenarı

 $|JE| + |OD| = \dots$

Cevap: cm

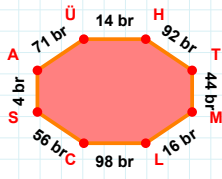
 $|SE|$ kaç brdir?

- ☐ 3 br
☐ 4 br
☐ 5 br

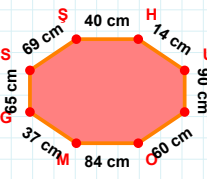


52 br hangi kenara aittir?

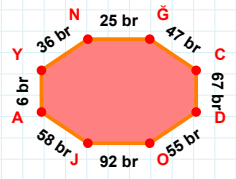
- ☐ SO kenarı
☐ KI kenarı
☐ JI kenarı

SORU: Aşağıdaki geometrik şekillerle ilgili soruları cevaplayınız.**|TM| kaç brdir?**

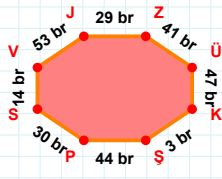
- ☐ 43 br
☐ 44 br
☐ 45 br

**37 cm hangi kenara aittir?**

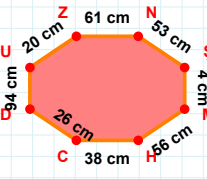
Kenar:

**|AY| + |JA| =**

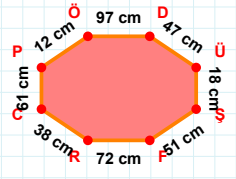
Cevap: br

**30 br hangi kenara aittir?**

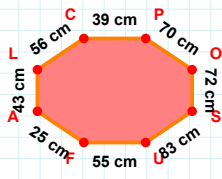
Kenar:

**20 cm hangi kenara aittir?**

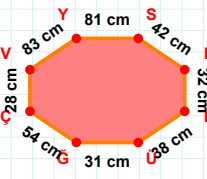
- ☐ NŞ kenarı
☐ CD kenarı
☐ UM kenarı

**12 cm hangi kenara aittir?**

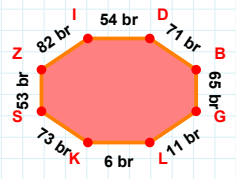
- ☐ ŞF kenarı
☐ FR kenarı
☐ RD kenarı

**|AL| + |LC| =**

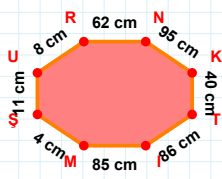
Cevap: cm

**83 cm hangi kenara aittir?**

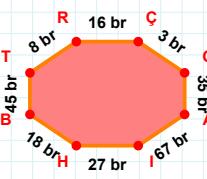
- ☐ YS kenarı
☐ VS kenarı
☐ ÜG kenarı

**|DB| kaç brdir?**

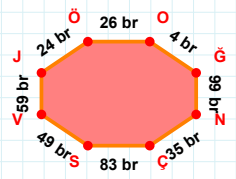
- ☐ 70 br
☐ 71 br
☐ 72 br

**95 cm hangi kenara aittir?**

Kenar:

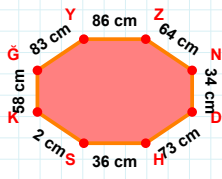
**8 br hangi kenara aittir?**

- ☐ HA kenarı
☐ AI kenarı
☐ IH kenarı

**|ÇS| + |ÖO| =**

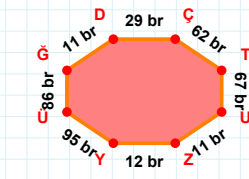
Cevap: br

SORU: Aşağıdaki geometrik şekillerle ilgili soruları cevaplayınız.



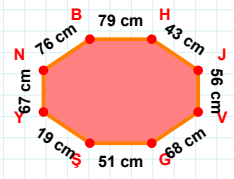
|YZ| kaç cm'dir?

- ☐ 85 cm
☐ 86 cm
☐ 87 cm



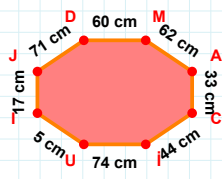
|GD| kaç br'dir?

- ☐ 10 br
☐ 11 br
☐ 12 br



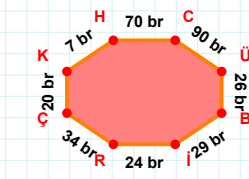
76 cm hangi kenara aittir?

Kenar:



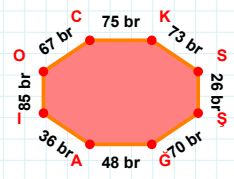
71 cm hangi kenara aittir?

- ☐ MA kenarı
☐ DM kenarı
☐ JC kenarı



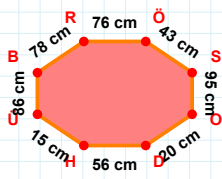
|ÇK| kaç br'dir?

- ☐ 19 br
☐ 20 br
☐ 21 br



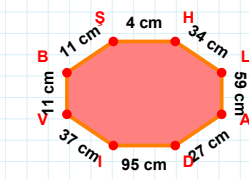
67 br hangi kenara aittir?

- ☐ IO kenarı
☐ ŞI kenarı
☐ ŞĞ kenarı



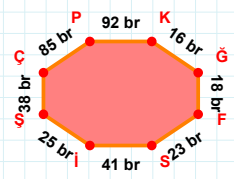
56 cm hangi kenara aittir?

Kenar:



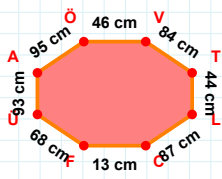
|SH| + |IV| =

Cevap: cm



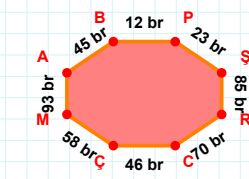
85 br hangi kenara aittir?

- ☐ FÇ kenarı
☐ ŞÇ kenarı
☐ IŞ kenarı



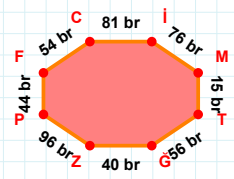
|FÜ| + |AÖ| =

Cevap: cm



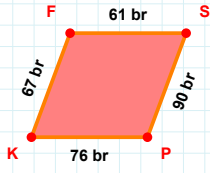
70 br hangi kenara aittir?

Kenar:



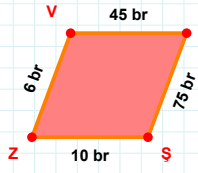
|FC| + |ZP| =

Cevap: br

SORU: Aşağıdaki geometrik şekillerle ilgili soruları cevaplayınız.

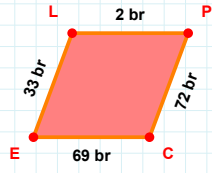
$|KF| + |FS| = \dots$

Cevap: br



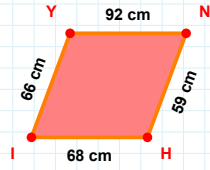
6 br hangi kenara aittir?

Kenar:



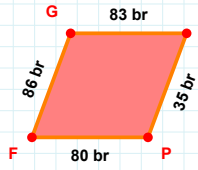
33 br hangi kenara aittir?

- ☐ PE kenarı
☐ LP kenarı
☐ PC kenarı



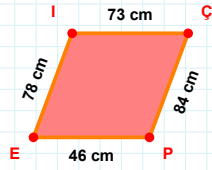
66 cm hangi kenara aittir?

- ☐ NI kenarı
☐ IY kenarı
☐ HI kenarı



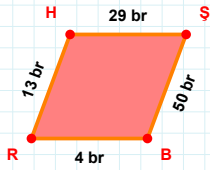
|GI| kaç brdir?

- ☐ 82 br
☐ 83 br
☐ 84 br



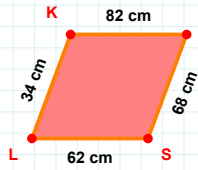
$|ÇP| + |PE| = \dots$

Cevap: cm



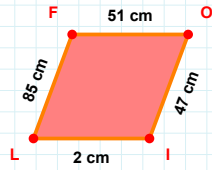
$|SB| + |HS| = \dots$

Cevap: br



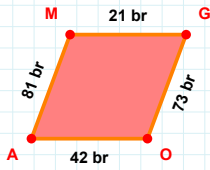
$|KE| + |ES| = \dots$

Cevap: cm



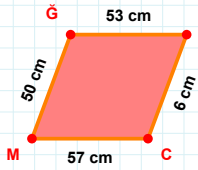
$|Oİ| + |FO| = \dots$

Cevap: cm



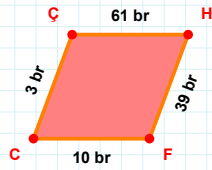
81 br hangi kenara aittir?

Kenar:



50 cm hangi kenara aittir?

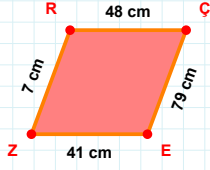
- ☐ CM kenarı
☐ EM kenarı
☐ GE kenarı



|FC| kaç brdir?

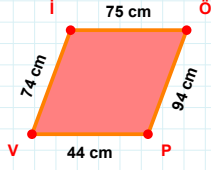
- ☐ 9 br
☐ 10 br
☐ 11 br

SORU: Aşağıdaki geometrik şekillerle ilgili soruları cevaplayınız.



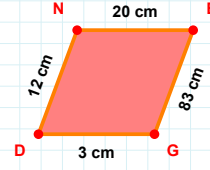
|ÇE| kaç cm'dir?

- ☐ 78 cm
☐ 79 cm
☐ 80 cm



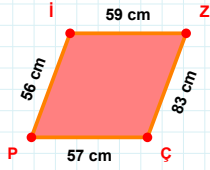
|ÖP| kaç cm'dir?

- ☐ 93 cm
☐ 94 cm
☐ 95 cm



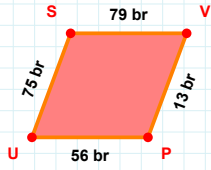
|GD| kaç cm'dir?

- ☐ 2 cm
☐ 3 cm
☐ 4 cm



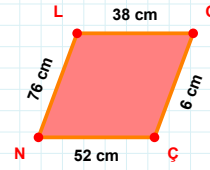
|PI| + |ZÇ| =

Cevap: cm



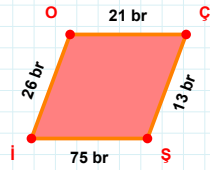
75 br hangi kenara aittir?

Kenar:



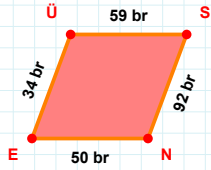
76 cm hangi kenara aittir?

- ☐ LO kenarı
☐ ON kenarı
☐ OÇ kenarı



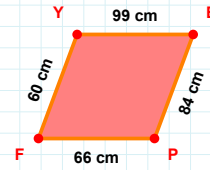
13 br hangi kenara aittir?

Kenar:



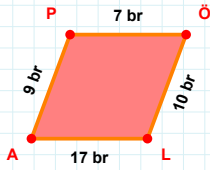
|ÜS| + |SN| =

Cevap: br



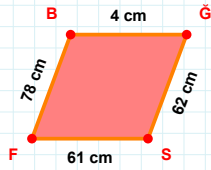
|FY| kaç cm'dir?

- ☐ 59 cm
☐ 60 cm
☐ 61 cm



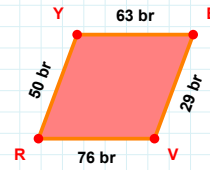
|LA| + |ÖL| =

Cevap: br



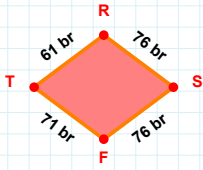
|GS| + |SF| =

Cevap: cm



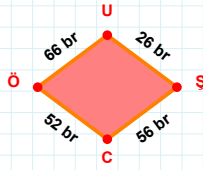
50 br hangi kenara aittir?

- ☐ RY kenarı
☐ ER kenarı
☐ EV kenarı

SORU: Aşağıdaki geometrik şekillerle ilgili soruları cevaplayınız.

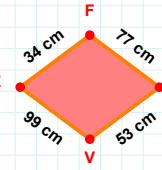
61 br hangi kenara aittir?

- ☐ RF kenarı
☐ TR kenarı
☐ FT kenarı



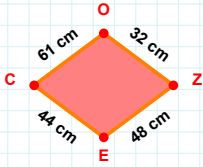
66 br hangi kenara aittir?

- ☐ ŞC kenarı
☐ UŞ kenarı
☐ ŞÖ kenarı



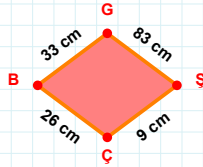
99 cm hangi kenara aittir?

Kenar:



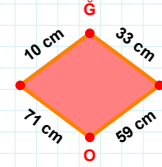
32 cm hangi kenara aittir?

Kenar:



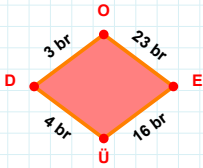
|GS| kaç cm'dir?

- ☐ 82 cm
☐ 83 cm
☐ 84 cm



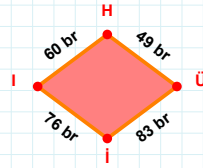
59 cm hangi kenara aittir?

Kenar:



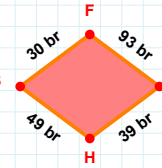
3 br hangi kenara aittir?

- ☐ EÜ kenarı
☐ DO kenarı
☐ ED kenarı



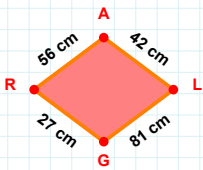
|İİ| + |HÜ| =

Cevap: br



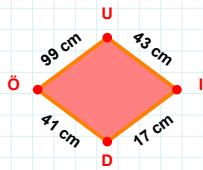
|ÖH| + |HŞ| =

Cevap: br



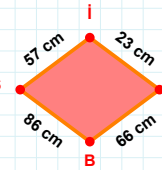
|AL| + |GR| =

Cevap: cm



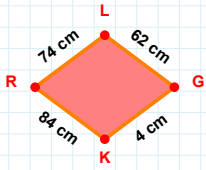
99 cm hangi kenara aittir?

- ☐ DÖ kenarı
☐ UI kenarı
☐ Öİ kenarı



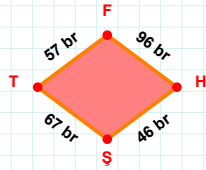
|BŞ| + |Şİ| =

Cevap: cm

SORU: Aşağıdaki geometrik şekillerle ilgili soruları cevaplayınız.

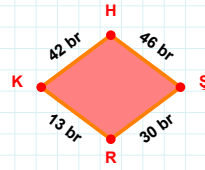
$$|KR| + |RL| = \dots$$

Cevap: cm



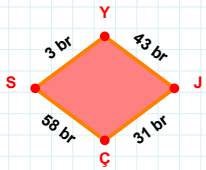
$$|TF| \text{ kaç brdir?}$$

- ☐ 56 br
☐ 57 br
☐ 58 br



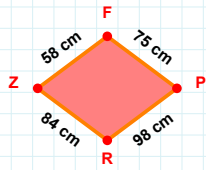
$$42 \text{ br hangi kenara aittir?}$$

- ☐ HR kenarı
☐ ŞR kenarı
☐ KH kenarı



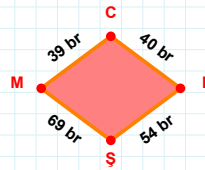
$$|YJ| \text{ kaç brdir?}$$

- ☐ 42 br
☐ 43 br
☐ 44 br



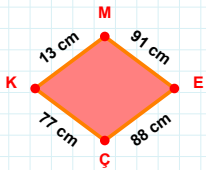
$$|ZF| \text{ kaç cmdir?}$$

- ☐ 57 cm
☐ 58 cm
☐ 59 cm



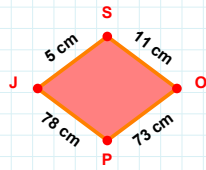
$$40 \text{ br hangi kenara aittir?}$$

Kenar:



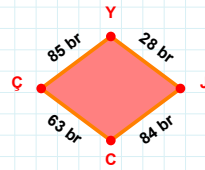
$$13 \text{ cm hangi kenara aittir?}$$

- ☐ EÇ kenarı
☐ EK kenarı
☐ ÇK kenarı



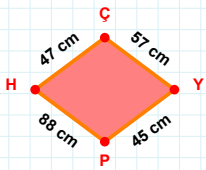
$$5 \text{ cm hangi kenara aittir?}$$

Kenar:



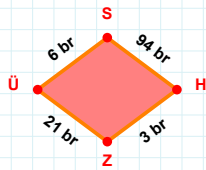
$$84 \text{ br hangi kenara aittir?}$$

Kenar:



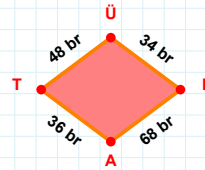
$$57 \text{ cm hangi kenara aittir?}$$

Kenar:



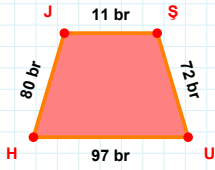
$$6 \text{ br hangi kenara aittir?}$$

- ☐ ZÜ kenarı
☐ HZ kenarı
☐ HÜ kenarı



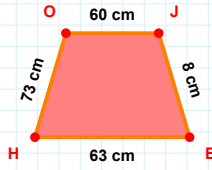
$$68 \text{ br hangi kenara aittir?}$$

Kenar:

SORU: Aşağıdaki geometrik şekillerle ilgili soruları cevaplayınız.

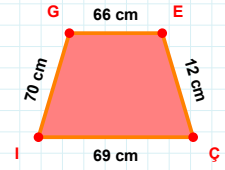
$$|JU| + |UH| = \dots$$

Cevap: br



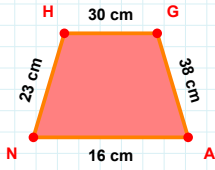
60 cm hangi kenara aittir?

Kenar:



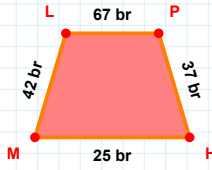
70 cm hangi kenara aittir?

Kenar:



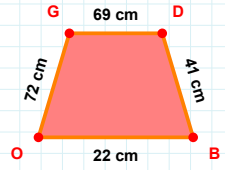
|GA| kaç cmdir?

- ☐ 37 cm
☐ 38 cm
☐ 39 cm



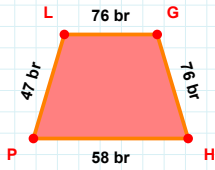
$$|LP| + |PH| = \dots$$

Cevap: br



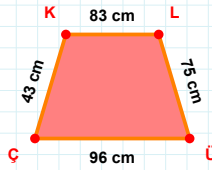
72 cm hangi kenara aittir?

- ☐ GD kenarı
☐ OG kenarı
☐ OD kenarı



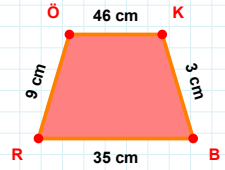
47 br hangi kenara aittir?

- ☐ HL kenarı
☐ LG kenarı
☐ GH kenarı



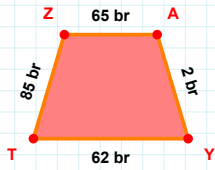
43 cm hangi kenara aittir?

- ☐ ÜÇ kenarı
☐ ÜK kenarı
☐ KL kenarı



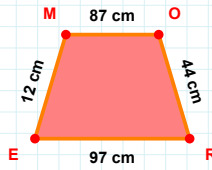
9 cm hangi kenara aittir?

- ☐ BR kenarı
☐ KR kenarı
☐ KB kenarı



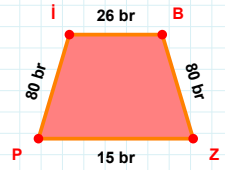
|TZ| kaç brdir?

- ☐ 84 br
☐ 85 br
☐ 86 br



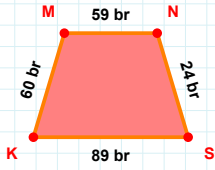
$$|OR| + |RE| = \dots$$

Cevap: cm



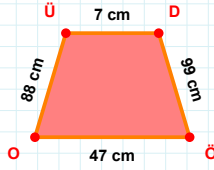
|ZP| kaç brdir?

- ☐ 14 br
☐ 15 br
☐ 16 br

SORU: Aşağıdaki geometrik şekillerle ilgili soruları cevaplayınız.

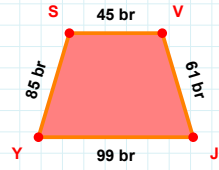
60 br hangi kenara aittir?

Kenar:



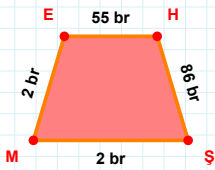
47 cm hangi kenara aittir?

Kenar:



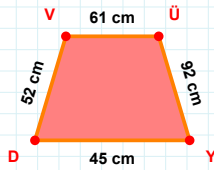
|JY| kaç brdir?

- ☐ 98 br
☐ 99 br
☐ 100 br



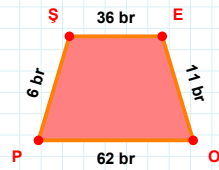
2 br hangi kenara aittir?

- ☐ HŞ kenarı
☐ ME kenarı
☐ ŞE kenarı



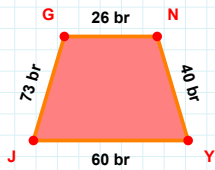
52 cm hangi kenara aittir?

- ☐ YV kenarı
☐ YD kenarı
☐ DV kenarı



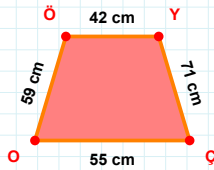
6 br hangi kenara aittir?

- ☐ ŞE kenarı
☐ OP kenarı
☐ EP kenarı



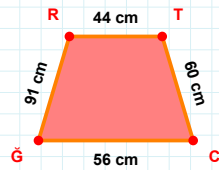
73 br hangi kenara aittir?

Kenar:



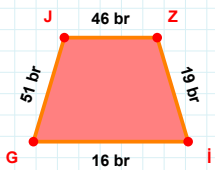
59 cm hangi kenara aittir?

- ☐ YO kenarı
☐ ÖY kenarı
☐ OÖ kenarı



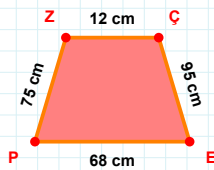
|GR| + |ÇG| =

Cevap: cm



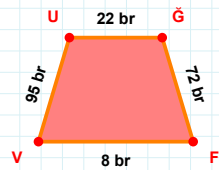
19 br hangi kenara aittir?

Kenar:



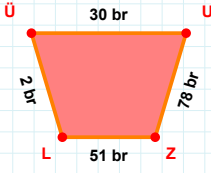
68 cm hangi kenara aittir?

Kenar:



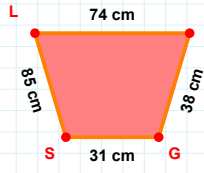
95 br hangi kenara aittir?

- ☐ GF kenarı
☐ UF kenarı
☐ FV kenarı

SORU: Aşağıdaki geometrik şekillerle ilgili soruları cevaplayınız.

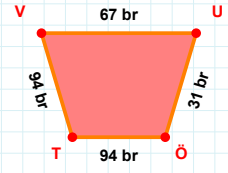
78 br hangi kenara aittir?

Kenar:



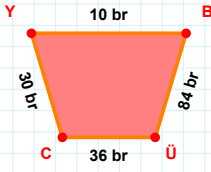
38 cm hangi kenara aittir?

Kenar:



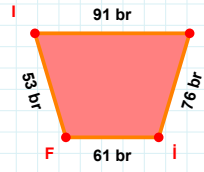
|TV| kaç brdir?

- ☐ 93 br
☐ 94 br
☐ 95 br



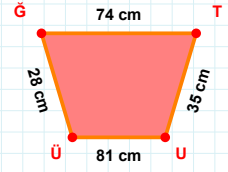
10 br hangi kenara aittir?

Kenar:



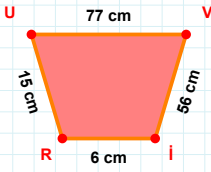
|IY| + |FI| =

Cevap: br



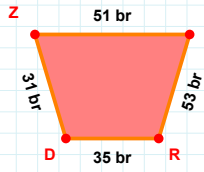
28 cm hangi kenara aittir?

- ☐ ĞU kenarı
☐ TU kenarı
☐ ÜĞ kenarı



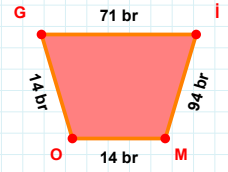
|VI| + |RU| =

Cevap: cm



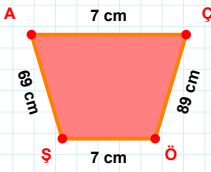
31 br hangi kenara aittir?

- ☐ UR kenarı
☐ ZR kenarı
☐ RD kenarı



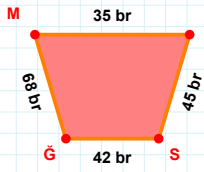
|İM| + |MO| =

Cevap: br



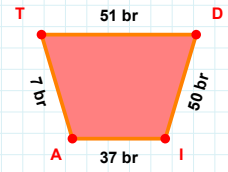
7 cm hangi kenara aittir?

Kenar:



|FS| kaç brdir?

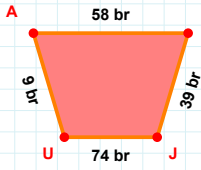
- ☐ 44 br
☐ 45 br
☐ 46 br



|IA| + |AT| =

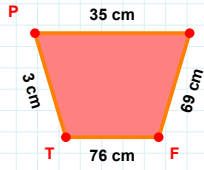
Cevap: br

SORU: Aşağıdaki geometrik şekillerle ilgili soruları cevaplayınız.



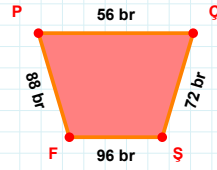
$$|UA| + |JU| = \dots$$

Cevap: br



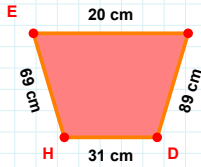
3 cm hangi kenara aittir?

- ☐ TŞ kenarı
☐ ŞF kenarı
☐ TP kenarı



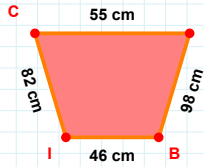
88 br hangi kenara aittir?

- ☐ PŞ kenarı
☐ ŞF kenarı
☐ FP kenarı



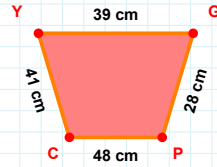
|DH| kaç cm'dir?

- ☐ 30 cm
☐ 31 cm
☐ 32 cm



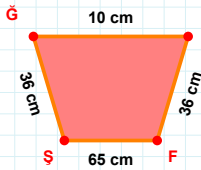
82 cm hangi kenara aittir?

- ☐ CT kenarı
☐ TI kenarı
☐ BI kenarı



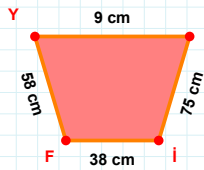
39 cm hangi kenara aittir?

Kenar:



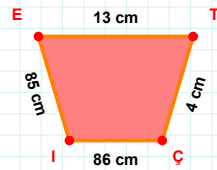
$$|GA| + |AF| = \dots$$

Cevap: cm



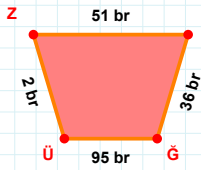
75 cm hangi kenara aittir?

Kenar:



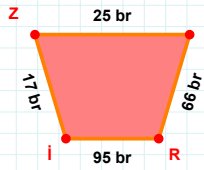
|Çİ| kaç cm'dir?

- ☐ 85 cm
☐ 86 cm
☐ 87 cm



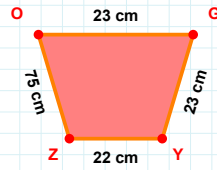
$$|ÜZ| + |ZT| = \dots$$

Cevap: br



25 br hangi kenara aittir?

Kenar:



$$|YZ| + |OG| = \dots$$

Cevap: cm

SÜREÇ ODAKLI DEĞERLENDİRME ÖLÇEĞİ

Geliştirilmeli (0-109)	İyi (110-187)	Çok İyi (188-265)	Mükemmel (266-312)
<input type="checkbox"/>	<input type="checkbox"/>	<input type="checkbox"/>	<input type="checkbox"/>

Hazırlayan:

Bu bölüme sınıfınızın ilgili kazanıma yönelik genel durumuna ilişkin gözlem ve izlenimlerinizi, öğrencilerinizin bu kazanımla ilgili öğrenme eksikliklerini ve bu eksikliklerin giderilmesi amacıyla yaptığınız/yapmayı planladığınız faaliyetleri not edebilirsiniz.

No	Adı - Soyadı	Toplam Puan	Değerlendirme
1			
2			
3			
4			
5			
6			
7			
8			
9			
10			
11			
12			
13			
14			
15			
16			
17			
18			
19			
20			
21			
22			
23			
24			
25			
26			
27			
28			
29			
30			
31			
32			
33			
34			
35			

Hazırlayan: