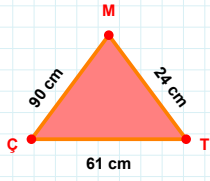
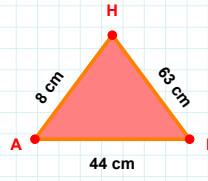
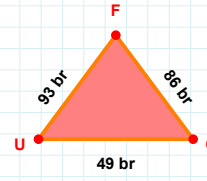
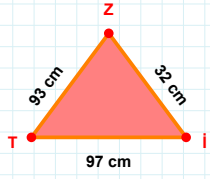


SORU: Aşağıdaki geometrik şekillerle ilgili soruları cevaplayınız.**24 cm hangi kenara aittir?**

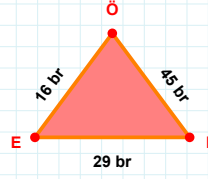
- ☐ XY kenarı
☐ TM kenarı
☐ ÇT kenarı

**|AI| + |HA| =****Cevap:** cm**|GF| kaç brdir?**

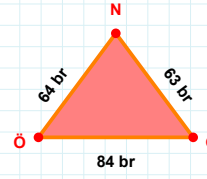
- ☐ 85 br
☐ 86 br
☐ 87 br

**32 cm hangi kenara aittir?**

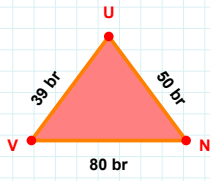
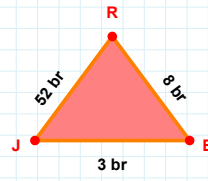
- ☐ Tİ kenarı
☐ İZ kenarı
☐ XY kenarı

**|EI| kaç brdir?**

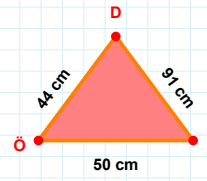
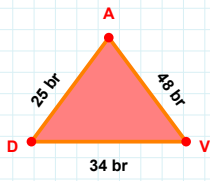
- ☐ 28 br
☐ 29 br
☐ 30 br

**63 br hangi kenara aittir?**

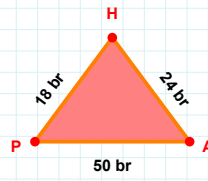
- ☐ ÖG kenarı
☐ XY kenarı
☐ NÖ kenarı

**|UV| + |VN| =****Cevap:** br**|BR| kaç brdir?**

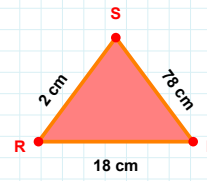
- ☐ 7 br
☐ 8 br
☐ 9 br

**50 cm hangi kenara aittir?****Kenar:****48 br hangi kenara aittir?**

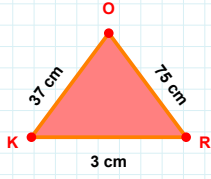
- ☐ XY kenarı
☐ DV kenarı
☐ VA kenarı

**|AH| kaç brdir?**

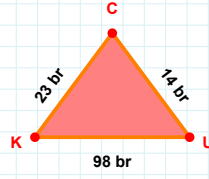
- ☐ 23 br
☐ 24 br
☐ 25 br

**78 cm hangi kenara aittir?**

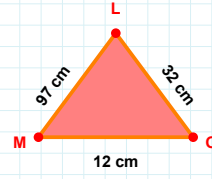
- ☐ XY kenarı
☐ NS kenarı
☐ SR kenarı

SORU: Aşağıdaki geometrik şekillerle ilgili soruları cevaplayınız.**|OK| kaç cmdir?**

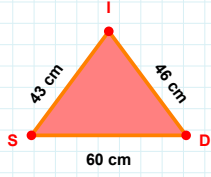
- ☐ 36 cm
☐ 37 cm
☐ 38 cm

**14 br hangi kenara aittir?**

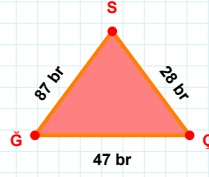
- ☐ UC kenarı
☐ XY kenarı
☐ CK kenarı

**32 cm hangi kenara aittir?**

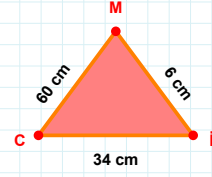
Kenar:

**|SD| kaç cmdir?**

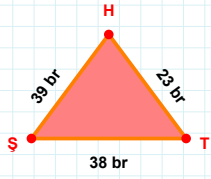
- ☐ 59 cm
☐ 60 cm
☐ 61 cm

**|ÇS| kaç brdir?**

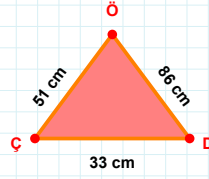
- ☐ 27 br
☐ 28 br
☐ 29 br

**|MC| + |CI| =**

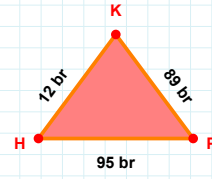
Cevap: cm

**|TH| kaç brdir?**

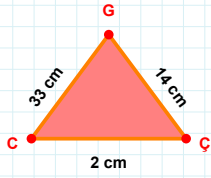
- ☐ 22 br
☐ 23 br
☐ 24 br

**86 cm hangi kenara aittir?**

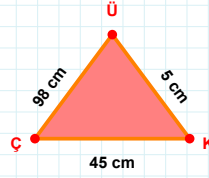
- ☐ XY kenarı
☐ ÖÇ kenarı
☐ ÇD kenarı

**|HP| + |KH| =**

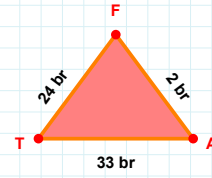
Cevap: br

**14 cm hangi kenara aittir?**

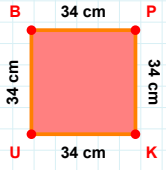
Kenar:

**5 cm hangi kenara aittir?**

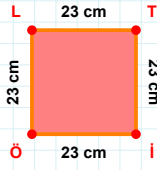
- ☐ XY kenarı
☐ ÇK kenarı
☐ ÜÇ kenarı

**33 br hangi kenara aittir?**

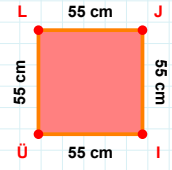
Kenar:

SORU: Aşağıdaki geometrik şekillerle ilgili soruları cevaplayınız. $|KU| + |PK| = \dots$

Cevap: cm

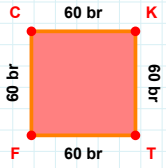
 $|İÖ|$ kaç cm'dir?

- ☐ 22 cm
☐ 23 cm
☐ 24 cm

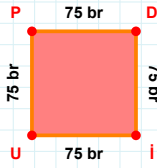


55 cm hangi kenara aittir?

- ☐ LI kenarı
☐ JI kenarı
☐ LJ kenarı

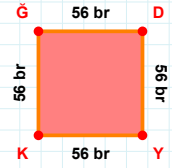
 $|TF|$ kaç br'dir?

- ☐ 59 br
☐ 60 br
☐ 61 br

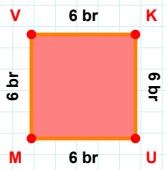


75 br hangi kenara aittir?

- ☐ Pİ kenarı
☐ İU kenarı
☐ PD kenarı

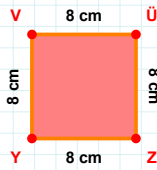
 $|KĞ|$ kaç br'dir?

- ☐ 55 br
☐ 56 br
☐ 57 br

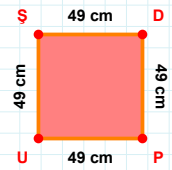


6 br hangi kenara aittir?

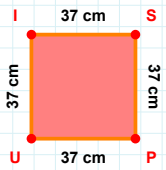
- ☐ KM kenarı
☐ MV kenarı
☐ KU kenarı

 $|ZY| + |VÜ| = \dots$

Cevap: cm

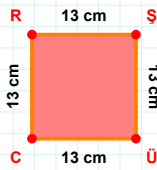
 $|PU| + |DP| = \dots$

Cevap: cm

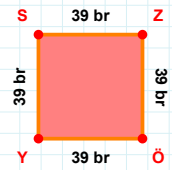


37 cm hangi kenara aittir?

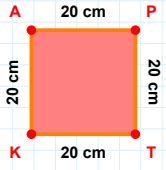
- ☐ US kenarı
☐ UI kenarı
☐ IS kenarı

 $|RŞ|$ kaç cm'dir?

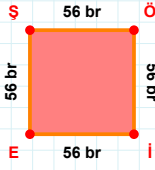
- ☐ 12 cm
☐ 13 cm
☐ 14 cm

 $|YS|$ kaç br'dir?

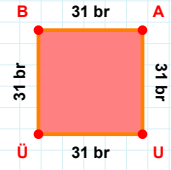
- ☐ 38 br
☐ 39 br
☐ 40 br

SORU: Aşağıdaki geometrik şekillerle ilgili soruları cevaplayınız.**|TK| kaç cm'dir?**

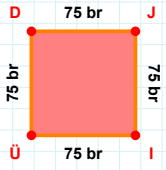
- ☐ 19 cm
☐ 20 cm
☐ 21 cm

**56 br hangi kenara aittir?**

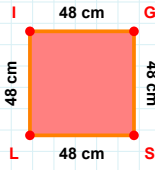
- ☐ EÖ kenarı
☐ Öİ kenarı
☐ İE kenarı

**31 br hangi kenara aittir?**

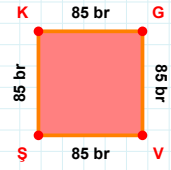
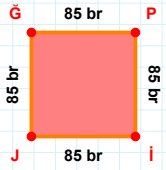
- ☐ ÜA kenarı
☐ AU kenarı
☐ BA kenarı

**|ÜD| kaç br'dir?**

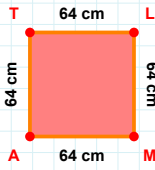
- ☐ 74 br
☐ 75 br
☐ 76 br

**48 cm hangi kenara aittir?**

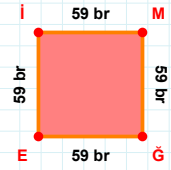
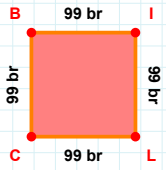
- ☐ IG kenarı
☐ SL kenarı
☐ SI kenarı

**85 br hangi kenara aittir?****Kenar:****85 br hangi kenara aittir?**

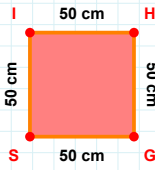
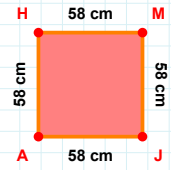
- ☐ Pİ kenarı
☐ JP kenarı
☐ ĞP kenarı

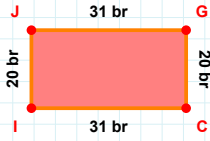
**|MA| kaç cm'dir?**

- ☐ 63 cm
☐ 64 cm
☐ 65 cm

**|EI| + |MĞ| =****Cevap: br****99 br hangi kenara aittir?**

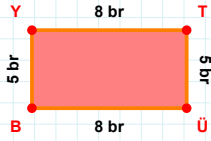
- ☐ BI kenarı
☐ LB kenarı
☐ IL kenarı

**|GS| + |SI| =****Cevap: cm****58 cm hangi kenara aittir?****Kenar:**

SORU: Aşağıdaki geometrik şekillerle ilgili soruları cevaplayınız.

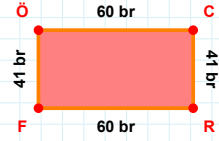
$|GC| + |JG| = \dots$

Cevap: br



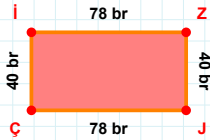
5 br hangi kenara aittir?

- ☐ BT kenarı
☐ YT kenarı
☐ TÜ kenarı



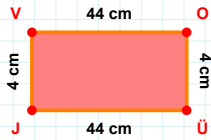
|ÖC| kaç brdir?

- ☐ 59 br
☐ 60 br
☐ 61 br



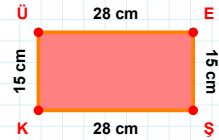
$|JÇ| + |İZ| = \dots$

Cevap: br



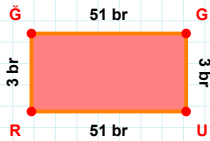
|VO| kaç cmdir?

- ☐ 43 cm
☐ 44 cm
☐ 45 cm



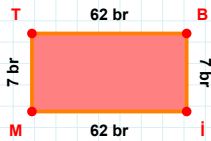
|ÜE| kaç cmdir?

- ☐ 27 cm
☐ 28 cm
☐ 29 cm



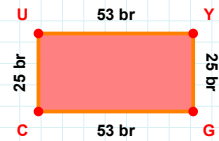
$|ĞG| + |RĞ| = \dots$

Cevap: br



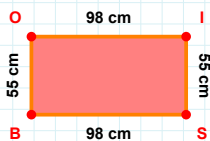
7 br hangi kenara aittir?

- ☐ İT kenarı
☐ İM kenarı
☐ Bİ kenarı



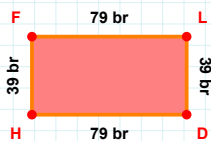
$|UY| + |CU| = \dots$

Cevap: br



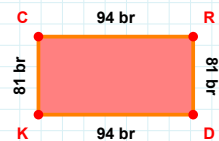
98 cm hangi kenara aittir?

Kenar:



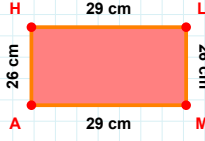
$|FL| + |LD| = \dots$

Cevap: br



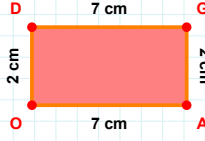
|RD| kaç brdir?

- ☐ 80 br
☐ 81 br
☐ 82 br

SORU: Aşağıdaki geometrik şekillerle ilgili soruları cevaplayınız.

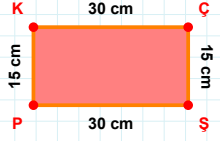
$|HL| + |LM| = \dots$

Cevap: cm



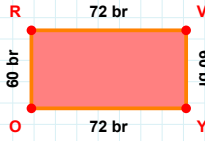
2 cm hangi kenara aittir?

- ☐ OG kenarı
☐ GA kenarı
☐ DG kenarı



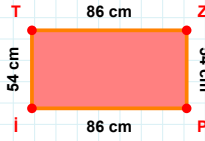
$|ÇS| + |KS| = \dots$

Cevap: cm



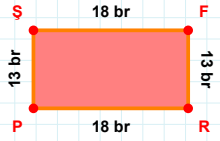
$|YO| + |VY| = \dots$

Cevap: br



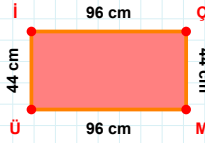
54 cm hangi kenara aittir?

- ☐ TP kenarı
☐ ZP kenarı
☐ TZ kenarı



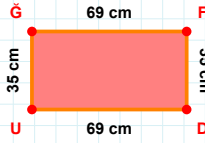
13 br hangi kenara aittir?

Kenar:



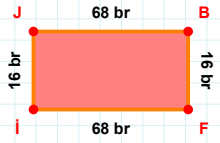
96 cm hangi kenara aittir?

Kenar:



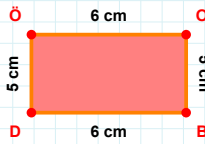
$|FD| + |DU| = \dots$

Cevap: cm



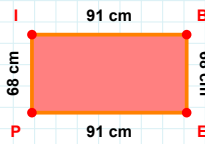
|Fİ| kaç brdir?

- ☐ 67 br
☐ 68 br
☐ 69 br



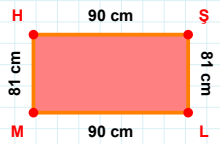
5 cm hangi kenara aittir?

- ☐ BD kenarı
☐ ÖO kenarı
☐ DO kenarı



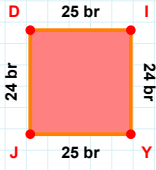
68 cm hangi kenara aittir?

- ☐ PI kenarı
☐ BP kenarı
☐ EP kenarı

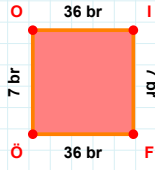
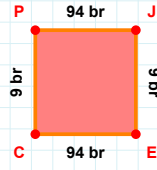


|MH| kaç cmdir?

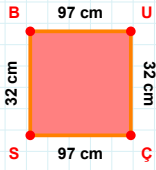
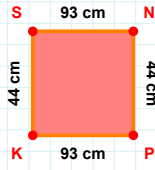
- ☐ 80 cm
☐ 81 cm
☐ 82 cm

SORU: Aşağıdaki geometrik şekillerle ilgili soruları cevaplayınız.**24 br hangi kenara aittir?**

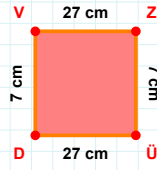
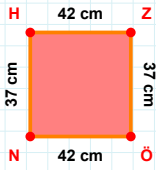
- ☐ JD kenarı
☐ YD kenarı
☐ YJ kenarı

**|OI| + |ÖO| =****Cevap:** br**9 br hangi kenara aittir?**

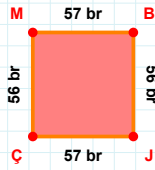
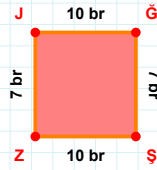
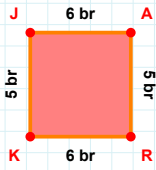
- ☐ JE kenarı
☐ JC kenarı
☐ CP kenarı

**|UC| + |ÇS| =****Cevap:** cm**44 cm hangi kenara aittir?**

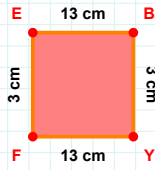
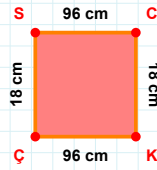
- ☐ SN kenarı
☐ PS kenarı
☐ NP kenarı

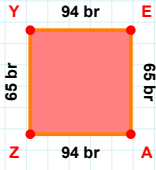
**|ÜD| + |ZÜ| =****Cevap:** cm**37 cm hangi kenara aittir?**

- ☐ HZ kenarı
☐ ZÖ kenarı
☐ ÖH kenarı

**57 br hangi kenara aittir?****Kenar:****7 br hangi kenara aittir?****Kenar:****|KJ| kaç brdir?**

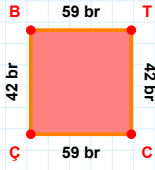
- ☐ 4 br
☐ 5 br
☐ 6 br

**3 cm hangi kenara aittir?****Kenar:****18 cm hangi kenara aittir?****Kenar:**

SORU: Aşağıdaki geometrik şekillerle ilgili soruları cevaplayınız.

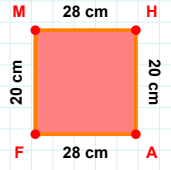
$$|AZ| + |YE| = \dots$$

Cevap: br



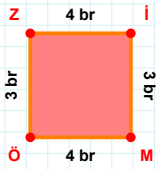
$$|TC| + |BT| = \dots$$

Cevap: br



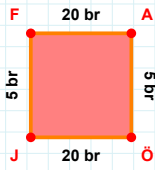
20 cm hangi kenara aittir?

- ☐ HA kenarı
☐ HF kenarı
☐ AF kenarı



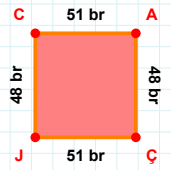
3 br hangi kenara aittir?

- ☐ MÖ kenarı
☐ ÖZ kenarı
☐ MZ kenarı



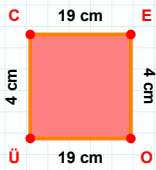
$$|AÖ| + |FA| = \dots$$

Cevap: br



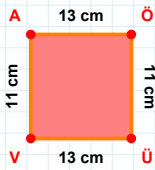
|CA| kaç brdir?

- ☐ 50 br
☐ 51 br
☐ 52 br



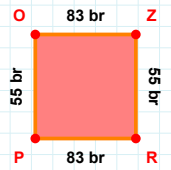
4 cm hangi kenara aittir?

- ☐ ÜC kenarı
☐ OÜ kenarı
☐ EÜ kenarı



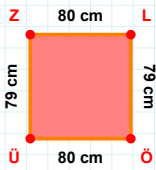
11 cm hangi kenara aittir?

- ☐ ÜV kenarı
☐ AÖ kenarı
☐ VÖ kenarı



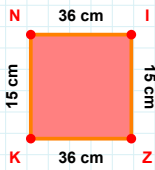
$$|PO| + |OZ| = \dots$$

Cevap: br



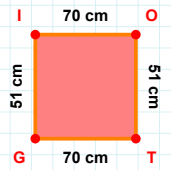
79 cm hangi kenara aittir?

- ☐ LÜ kenarı
☐ ÜZ kenarı
☐ ZL kenarı



36 cm hangi kenara aittir?

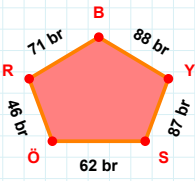
Kenar:



70 cm hangi kenara aittir?

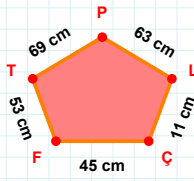
Kenar:

SORU: Aşağıdaki geometrik şekillerle ilgili soruları cevaplayınız.



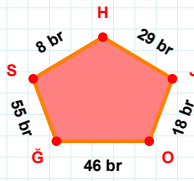
$$|RÖ| + |BR| = \dots$$

Cevap: br



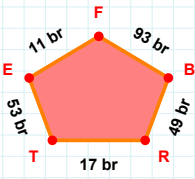
11 cm hangi kenara aittir?

Kenar:



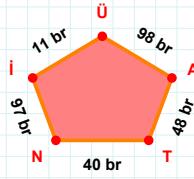
|SĞ| kaç brdir?

- ☐ 54 br
☐ 55 br
☐ 56 br



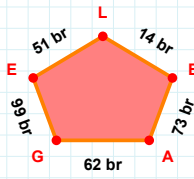
|RB| kaç brdir?

- ☐ 48 br
☐ 49 br
☐ 50 br



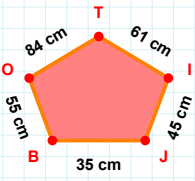
11 br hangi kenara aittir?

Kenar:



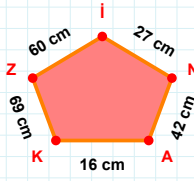
99 br hangi kenara aittir?

Kenar:



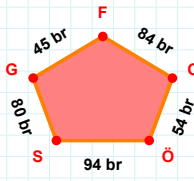
61 cm hangi kenara aittir?

Kenar:



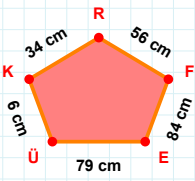
|AN| kaç cmdir?

- ☐ 41 cm
☐ 42 cm
☐ 43 cm



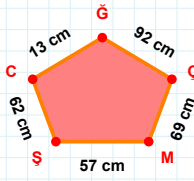
80 br hangi kenara aittir?

Kenar:



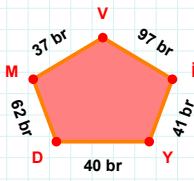
84 cm hangi kenara aittir?

Kenar:



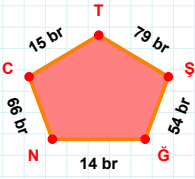
$$|ĞÇ| + |ŞM| = \dots$$

Cevap: cm



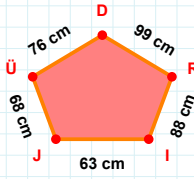
|DY| kaç brdir?

- ☐ 39 br
☐ 40 br
☐ 41 br

SORU: Aşağıdaki geometrik şekillerle ilgili soruları cevaplayınız.

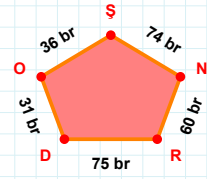
14 br hangi kenara aittir?

Kenar:

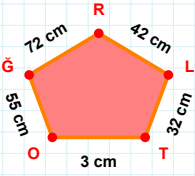


88 cm hangi kenara aittir?

Kenar:

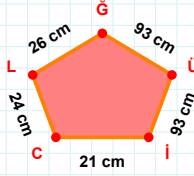
 $|OD| + |RN| = \dots$

Cevap: br

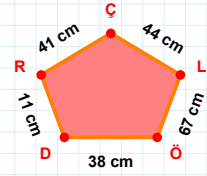


72 cm hangi kenara aittir?

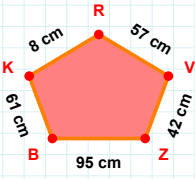
Kenar:

 $|ÜĞ|$ kaç cm'dir?

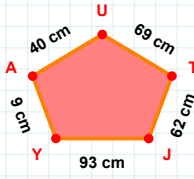
- ☐ 92 cm
☐ 93 cm
☐ 94 cm

 $|DÖ| + |ÇR| = \dots$

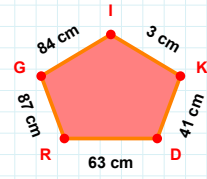
Cevap: cm

 $|KB| + |ZV| = \dots$

Cevap: cm

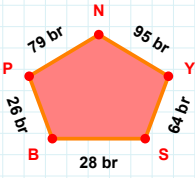
 $|UA| + |YJ| = \dots$

Cevap: cm



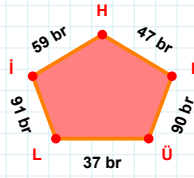
41 cm hangi kenara aittir?

Kenar:



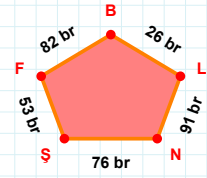
95 br hangi kenara aittir?

- ☐ NP kenarı
☐ SY kenarı
☐ BY kenarı



90 br hangi kenara aittir?

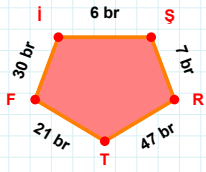
Kenar:



26 br hangi kenara aittir?

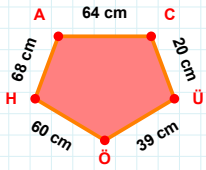
- ☐ BF kenarı
☐ ŞN kenarı
☐ FN kenarı

SORU: Aşağıdaki geometrik şekillerle ilgili soruları cevaplayınız.



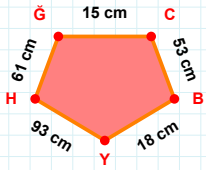
30 br hangi kenara aittir?

Kenar:

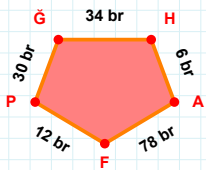


68 cm hangi kenara aittir?

- ☐ HA kenarı
☐ ÜA kenarı
☐ ÜÖ kenarı

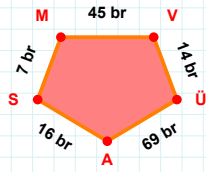
 $|YH| + |BY| = \dots$

Cevap: cm

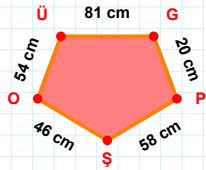


30 br hangi kenara aittir?

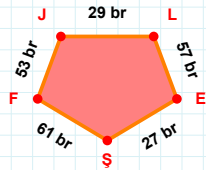
- ☐ AF kenarı
☐ FP kenarı
☐ FĞ kenarı

 $|ÜA|$ kaç brdir?

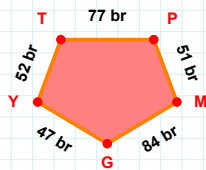
- ☐ 68 br
☐ 69 br
☐ 70 br

 $|PŞ| + |OÜ| = \dots$

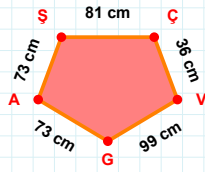
Cevap: cm

 $|LE| + |FJ| = \dots$

Cevap: br

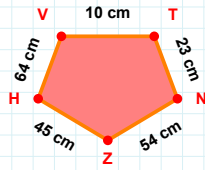
 $|GY| + |PM| = \dots$

Cevap: br

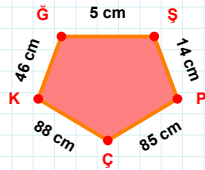


73 cm hangi kenara aittir?

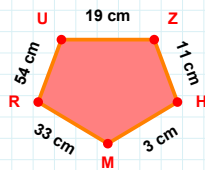
- ☐ ŞÇ kenarı
☐ AŞ kenarı
☐ GÇ kenarı

 $|VT| + |NZ| = \dots$

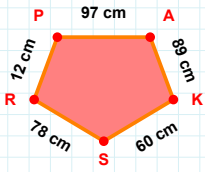
Cevap: cm

 $|ŞP|$ kaç cmdir?

- ☐ 13 cm
☐ 14 cm
☐ 15 cm

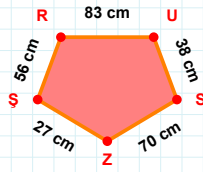
 $|UZ|$ kaç cmdir?

- ☐ 18 cm
☐ 19 cm
☐ 20 cm

SORU: Aşağıdaki geometrik şekillerle ilgili soruları cevaplayınız.

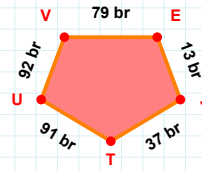
12 cm hangi kenara aittir?

- ☐ AK kenarı
☐ AR kenarı
☐ PA kenarı



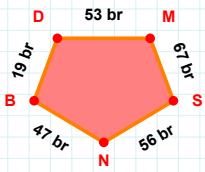
38 cm hangi kenara aittir?

Kenar:



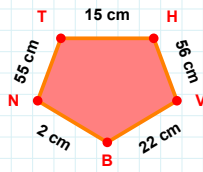
92 br hangi kenara aittir?

- ☐ EJ kenarı
☐ VJ kenarı
☐ UV kenarı



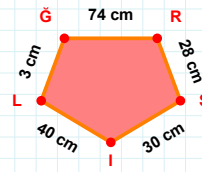
|SN| kaç brdir?

- ☐ 55 br
☐ 56 br
☐ 57 br



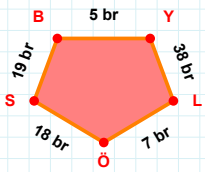
55 cm hangi kenara aittir?

- ☐ HV kenarı
☐ BN kenarı
☐ HB kenarı



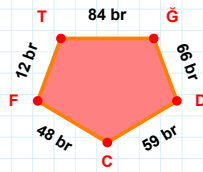
3 cm hangi kenara aittir?

- ☐ RS kenarı
☐ İG kenarı
☐ SI kenarı



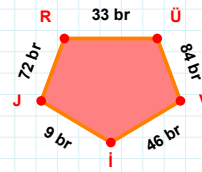
19 br hangi kenara aittir?

- ☐ BY kenarı
☐ LS kenarı
☐ LÖ kenarı



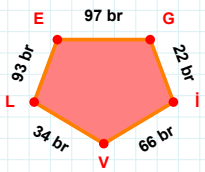
12 br hangi kenara aittir?

- ☐ GD kenarı
☐ CĞ kenarı
☐ FT kenarı



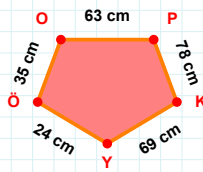
72 br hangi kenara aittir?

- ☐ İJ kenarı
☐ VR kenarı
☐ JR kenarı



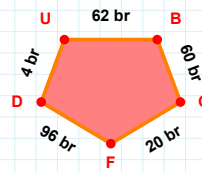
66 br hangi kenara aittir?

Kenar:



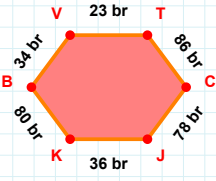
|OP| kaç cmdir?

- ☐ 62 cm
☐ 63 cm
☐ 64 cm

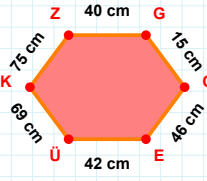
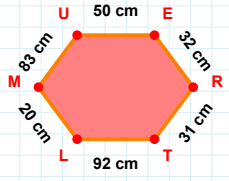
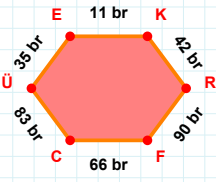
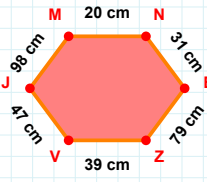
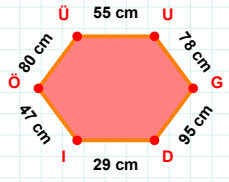


|FD| + |GF| =

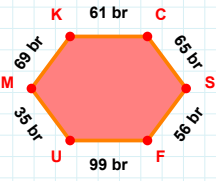
Cevap: br

SORU: Aşağıdaki geometrik şekillerle ilgili soruları cevaplayınız.**|TC| kaç brdir?**

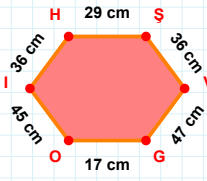
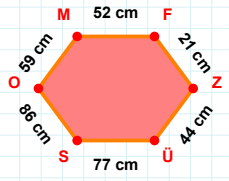
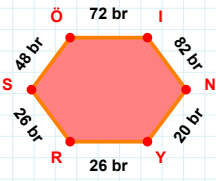
- ☐ 85 br
☐ 86 br
☐ 87 br

**|OE| + |EÜ| =****Cevap:** cm**|MU| + |TL| =****Cevap:** cm**|ÜE| + |KR| =****Cevap:** br**20 cm hangi kenara aittir?****Kenar:****80 cm hangi kenara aittir?**

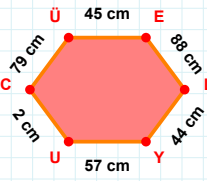
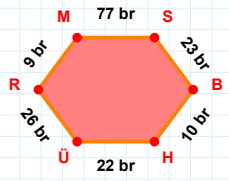
- ☐ ÖÜ kenarı
☐ GD kenarı
☐ DÜ kenarı

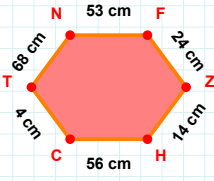
**|KC| kaç brdir?**

- ☐ 60 br
☐ 61 br
☐ 62 br

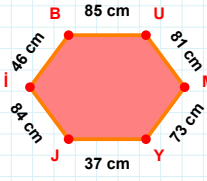
**|HS| + |SV| =****Cevap:** cm**59 cm hangi kenara aittir?****Kenar:****|NY| kaç brdir?**

- ☐ 19 br
☐ 20 br
☐ 21 br

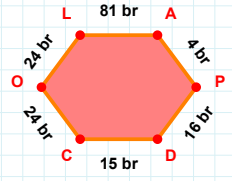
**|ÜE| + |UC| =****Cevap:** cm**|RM| + |ÜR| =****Cevap:** br

SORU: Aşağıdaki geometrik şekillerle ilgili soruları cevaplayınız.**|ZH| kaç cm'dir?**

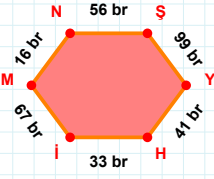
- ☐ 13 cm
☐ 14 cm
☐ 15 cm

**46 cm hangi kenara aittir?**

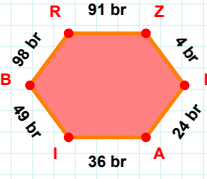
- ☐ MY kenarı
☐ BU kenarı
☐ JU kenarı

**24 br hangi kenara aittir?**

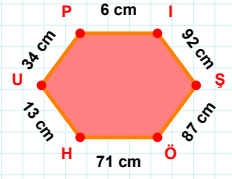
Kenar:

**33 br hangi kenara aittir?**

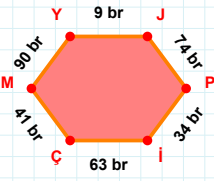
Kenar:

**|RZ| kaç br'dir?**

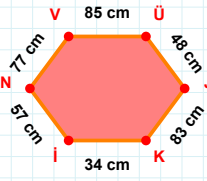
- ☐ 90 br
☐ 91 br
☐ 92 br

**92 cm hangi kenara aittir?**

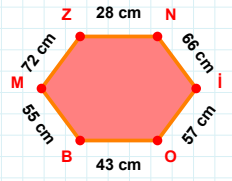
Kenar:

**|İÇ| + |MY| =**

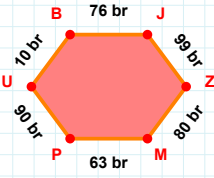
Cevap: br

**77 cm hangi kenara aittir?**

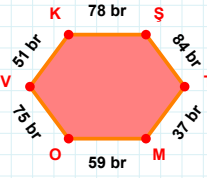
- ☐ VJ kenarı
☐ Kİ kenarı
☐ VÜ kenarı

**|ZN| + |OB| =**

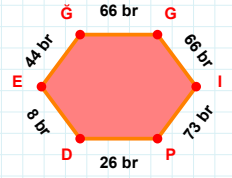
Cevap: cm

**10 br hangi kenara aittir?**

- ☐ UB kenarı
☐ ZP kenarı
☐ JZ kenarı

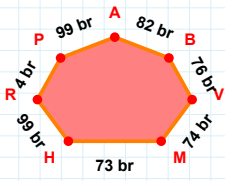
**51 br hangi kenara aittir?**

- ☐ OV kenarı
☐ TV kenarı
☐ TM kenarı

**|EĞ| kaç br'dir?**

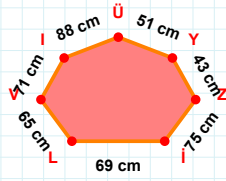
- ☐ 43 br
☐ 44 br
☐ 45 br

SORU: Aşağıdaki geometrik şekillerle ilgili soruları cevaplayınız.



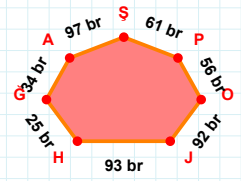
|PR| kaç brdir?

- ☐ 3 br
☐ 4 br
☐ 5 br



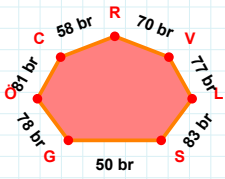
75 cm hangi kenara aittir?

Kenar:



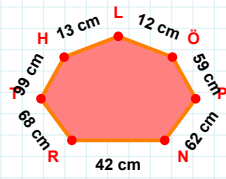
56 br hangi kenara aittir?

Kenar:



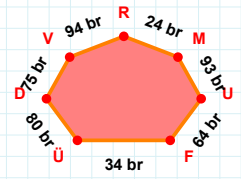
|CÖ| + |SL| =

Cevap: br



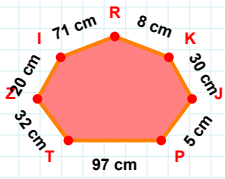
|NP| + |LH| =

Cevap: cm



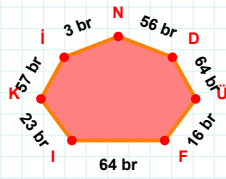
|ÜF| kaç brdir?

- ☐ 33 br
☐ 34 br
☐ 35 br



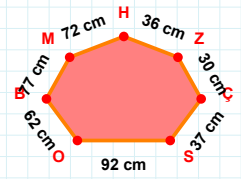
8 cm hangi kenara aittir?

- ☐ RI kenarı
☐ ZT kenarı
☐ KI kenarı



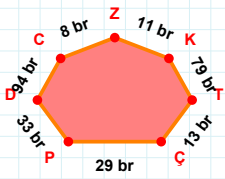
23 br hangi kenara aittir?

Kenar:



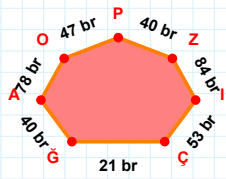
|ÇZ| kaç cmdir?

- ☐ 29 cm
☐ 30 cm
☐ 31 cm



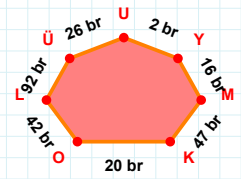
|TK| kaç brdir?

- ☐ 78 br
☐ 79 br
☐ 80 br



|OA| kaç brdir?

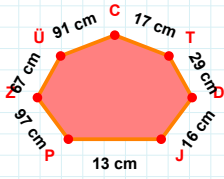
- ☐ 77 br
☐ 78 br
☐ 79 br



|LO| kaç brdir?

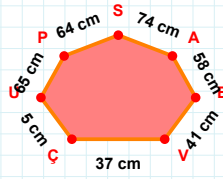
- ☐ 41 br
☐ 42 br
☐ 43 br

SORU: Aşağıdaki geometrik şekillerle ilgili soruları cevaplayınız.



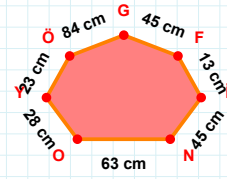
17 cm hangi kenara aittir?

- ☐ DZ kenarı
☐ ZP kenarı
☐ PJ kenarı



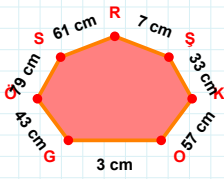
|PU| kaç cm'dir?

- ☐ 64 cm
☐ 65 cm
☐ 66 cm



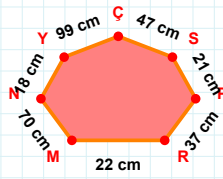
|N| kaç cm'dir?

- ☐ 44 cm
☐ 45 cm
☐ 46 cm



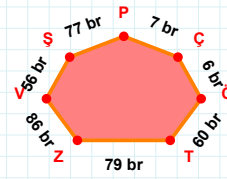
|KŞ| + |SÖ| =

Cevap: cm



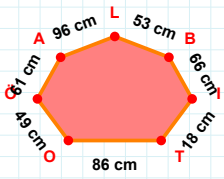
47 cm hangi kenara aittir?

Kenar:



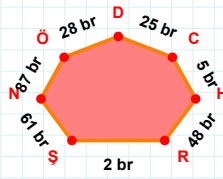
7 br hangi kenara aittir?

- ☐ TÖ kenarı
☐ ÇP kenarı
☐ ÇZ kenarı



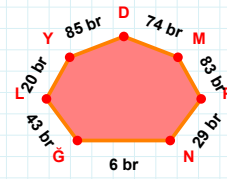
86 cm hangi kenara aittir?

Kenar:



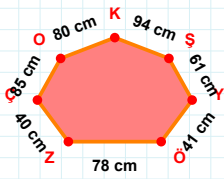
|RH| + |SR| =

Cevap: br



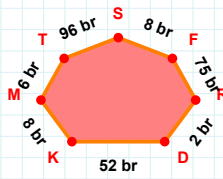
29 br hangi kenara aittir?

Kenar:



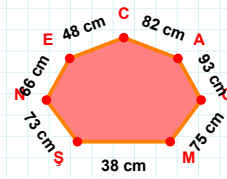
|SK| + |ÖY| =

Cevap: cm



|DR| kaç br'dir?

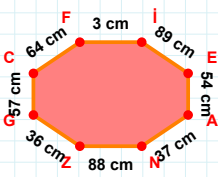
- ☐ 1 br
☐ 2 br
☐ 3 br



66 cm hangi kenara aittir?

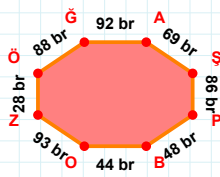
Kenar:

SORU: Aşağıdaki geometrik şekillerle ilgili soruları cevaplayınız.



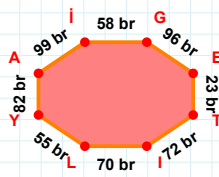
64 cm hangi kenara aittir?

- ☐ CF kenarı
☐ İE kenarı
☐ İG kenarı



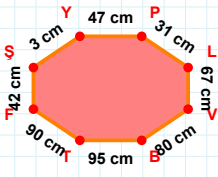
$|ÖĞ| + |AS| = \dots$

Cevap: br



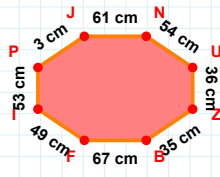
99 br hangi kenara aittir?

Kenar:



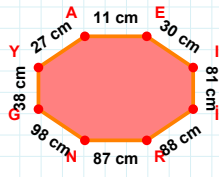
$|LV| + |TF| = \dots$

Cevap: cm



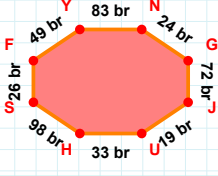
$|NU|$ kaç cm'dir?

- ☐ 53 cm
☐ 54 cm
☐ 55 cm



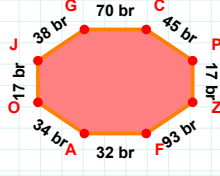
$|EI| + |IR| = \dots$

Cevap: cm



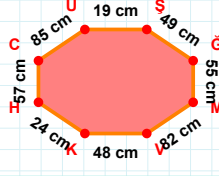
$|SF| + |JU| = \dots$

Cevap: br



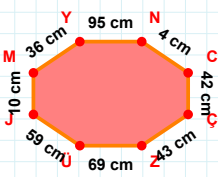
$|PZ|$ kaç br'dir?

- ☐ 16 br
☐ 17 br
☐ 18 br



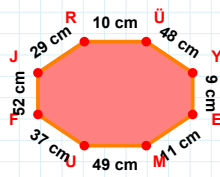
$|GM|$ kaç cm'dir?

- ☐ 54 cm
☐ 55 cm
☐ 56 cm



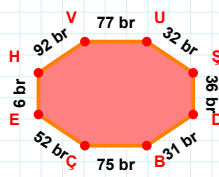
$|CÇ| + |YN| = \dots$

Cevap: cm



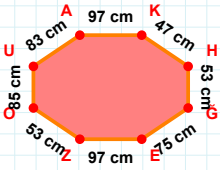
37 cm hangi kenara aittir?

Kenar:



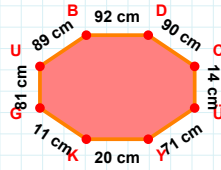
$|DB|$ kaç br'dir?

- ☐ 30 br
☐ 31 br
☐ 32 br

SORU: Aşağıdaki geometrik şekillerle ilgili soruları cevaplayınız.

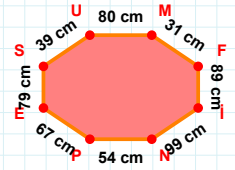
83 cm hangi kenara aittir?

- ☐ HĞ kenarı
☐ OĞ kenarı
☐ OU kenarı



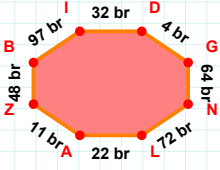
89 cm hangi kenara aittir?

- ☐ UB kenarı
☐ CÜ kenarı
☐ UÜ kenarı



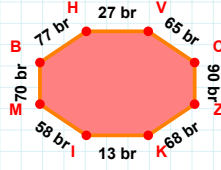
31 cm hangi kenara aittir?

Kenar:



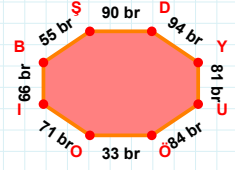
|DG| kaç brdir?

- ☐ 3 br
☐ 4 br
☐ 5 br



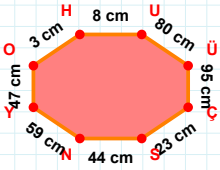
|HV| + |IM| =

Cevap: br



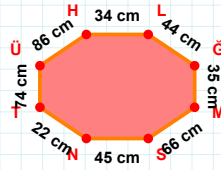
|ÖO| + |YU| =

Cevap: br



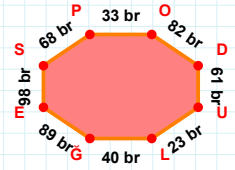
|UÜ| + |YO| =

Cevap: cm



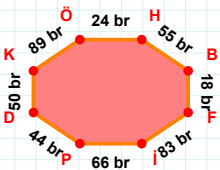
86 cm hangi kenara aittir?

- ☐ TÜ kenarı
☐ LĞ kenarı
☐ GH kenarı



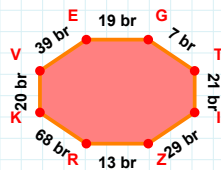
98 br hangi kenara aittir?

Kenar:



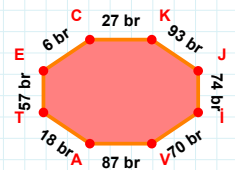
89 br hangi kenara aittir?

Kenar:



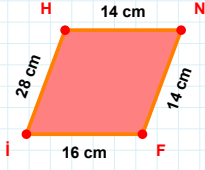
39 br hangi kenara aittir?

Kenar:



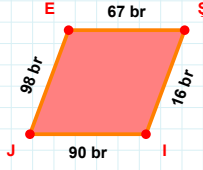
6 br hangi kenara aittir?

- ☐ KJ kenarı
☐ VJ kenarı
☐ İV kenarı

SORU: Aşağıdaki geometrik şekillerle ilgili soruları cevaplayınız.

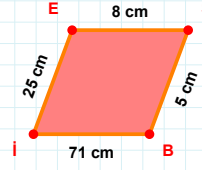
14 cm hangi kenara aittir?

Kenar:



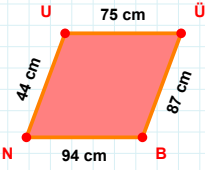
|JE| kaç brdir?

- ☐ 97 br
☐ 98 br
☐ 99 br



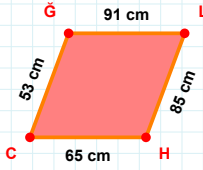
25 cm hangi kenara aittir?

- ☐ EB kenarı
☐ IE kenarı
☐ ES kenarı



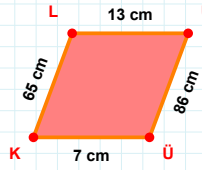
44 cm hangi kenara aittir?

Kenar:



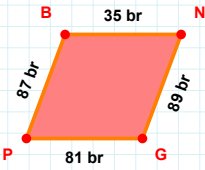
|CĞ| kaç cmdir?

- ☐ 52 cm
☐ 53 cm
☐ 54 cm



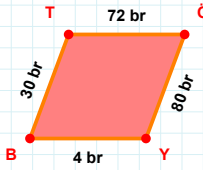
13 cm hangi kenara aittir?

Kenar:



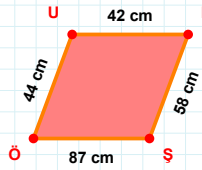
87 br hangi kenara aittir?

- ☐ NG kenarı
☐ GP kenarı
☐ GB kenarı



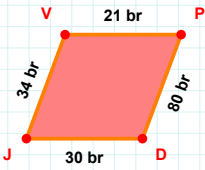
30 br hangi kenara aittir?

- ☐ TÖ kenarı
☐ YB kenarı
☐ ÖB kenarı



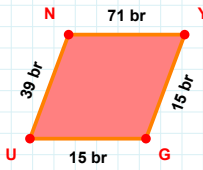
44 cm hangi kenara aittir?

- ☐ ÖU kenarı
☐ ÖN kenarı
☐ UN kenarı



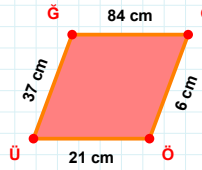
34 br hangi kenara aittir?

Kenar:



|GU| kaç brdir?

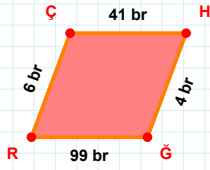
- ☐ 14 br
☐ 15 br
☐ 16 br



|ÜĞ| + |GÜ| =

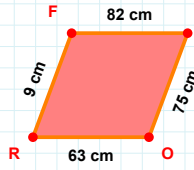
Cevap: cm

SORU: Aşağıdaki geometrik şekillerle ilgili soruları cevaplayınız.



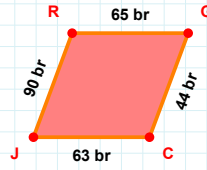
|GR| kaç brdir?

- ☐ 98 br
☐ 99 br
☐ 100 br



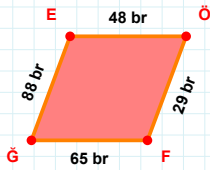
9 cm hangi kenara aittir?

- ☐ RF kenarı
☐ ZR kenarı
☐ FZ kenarı



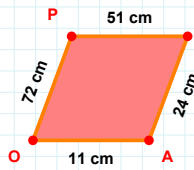
|GC| kaç brdir?

- ☐ 43 br
☐ 44 br
☐ 45 br



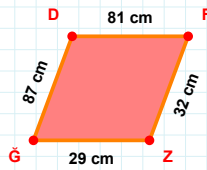
88 br hangi kenara aittir?

Kenar:



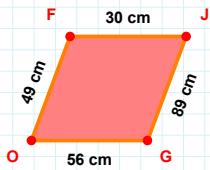
11 cm hangi kenara aittir?

Kenar:



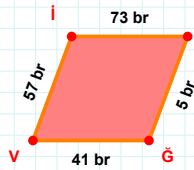
|GD| + |DF| =

Cevap: cm



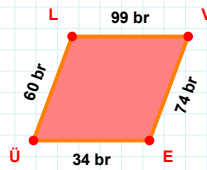
|JG| + |OF| =

Cevap: cm



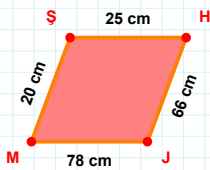
|GV| + |Vİ| =

Cevap: br



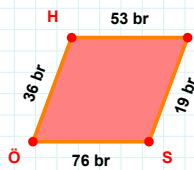
34 br hangi kenara aittir?

Kenar:



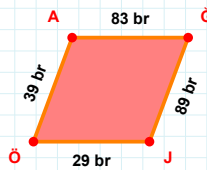
|MS| kaç cmdir?

- ☐ 19 cm
☐ 20 cm
☐ 21 cm



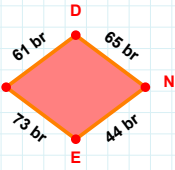
|HM| kaç brdir?

- ☐ 52 br
☐ 53 br
☐ 54 br



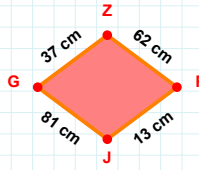
|ÖA| kaç brdir?

- ☐ 38 br
☐ 39 br
☐ 40 br

SORU: Aşağıdaki geometrik şekillerle ilgili soruları cevaplayınız.

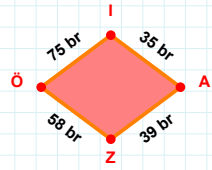
44 br hangi kenara aittir?

Kenar:

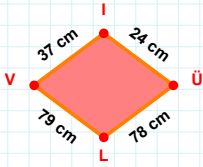


37 cm hangi kenara aittir?

- ☐ PG kenarı
☐ GZ kenarı
☐ ZP kenarı

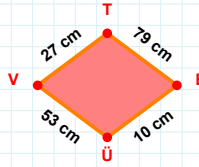
 $|AZ| + |IA| = \dots$

Cevap: br



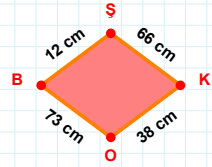
37 cm hangi kenara aittir?

- ☐ LI kenarı
☐ VI kenarı
☐ IÜ kenarı

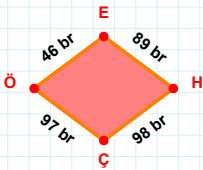


27 cm hangi kenara aittir?

- ☐ ÜV kenarı
☐ EV kenarı
☐ VT kenarı

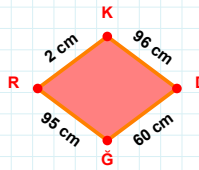
 $|KO|$ kaç cm'dir?

- ☐ 37 cm
☐ 38 cm
☐ 39 cm



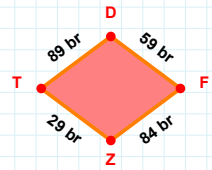
46 br hangi kenara aittir?

- ☐ HÇ kenarı
☐ ÇÖ kenarı
☐ EÇ kenarı

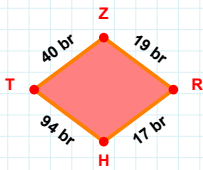


2 cm hangi kenara aittir?

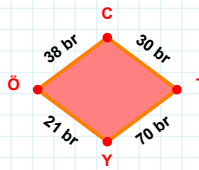
Kenar:

 $|DF|$ kaç br'dir?

- ☐ 58 br
☐ 59 br
☐ 60 br

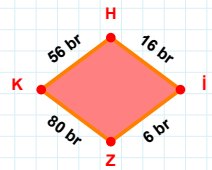
 $|TZ| + |ZR| = \dots$

Cevap: br

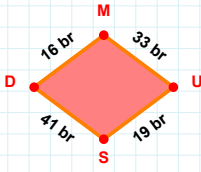


30 br hangi kenara aittir?

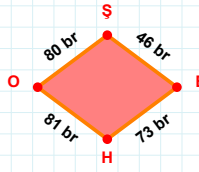
Kenar:

 $|İZ|$ kaç br'dir?

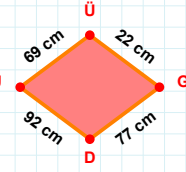
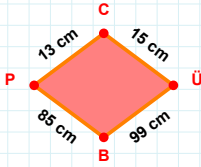
- ☐ 5 br
☐ 6 br
☐ 7 br

SORU: Aşağıdaki geometrik şekillerle ilgili soruları cevaplayınız.**|US| kaç brdir?**

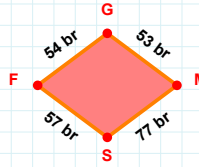
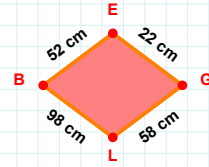
- ☐ 18 br
☐ 19 br
☐ 20 br

**80 br hangi kenara aittir?**

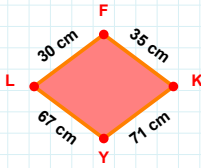
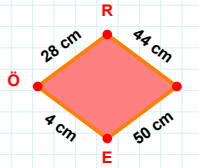
- ☐ OŞ kenarı
☐ EO kenarı
☐ ŞE kenarı

**77 cm hangi kenara aittir?****Kenar:****13 cm hangi kenara aittir?**

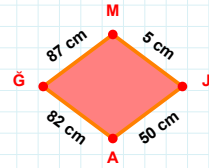
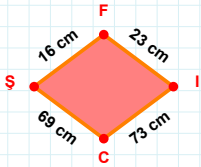
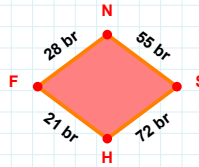
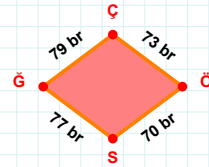
- ☐ ÜB kenarı
☐ BP kenarı
☐ CB kenarı

**54 br hangi kenara aittir?****Kenar:****|EG| kaç cmdir?**

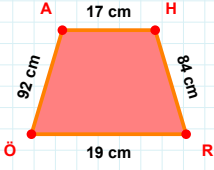
- ☐ 21 cm
☐ 22 cm
☐ 23 cm

**|KY| + |FK| =****Cevap: cm****|ÖR| kaç cmdir?**

- ☐ 27 cm
☐ 28 cm
☐ 29 cm

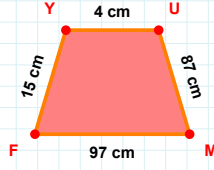
**|MJ| + |JA| =****Cevap: cm****23 cm hangi kenara aittir?****Kenar:****21 br hangi kenara aittir?****Kenar:****|ÖS| kaç brdir?**

- ☐ 69 br
☐ 70 br
☐ 71 br

SORU: Aşağıdaki geometrik şekillerle ilgili soruları cevaplayınız.

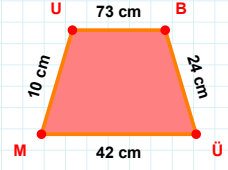
84 cm hangi kenara aittir?

Kenar:



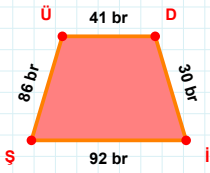
87 cm hangi kenara aittir?

Kenar:



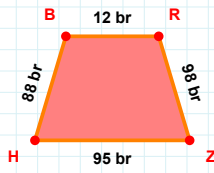
24 cm hangi kenara aittir?

Kenar:



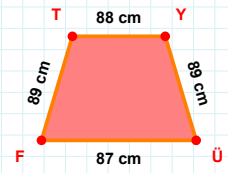
|ÜD| kaç brdir?

- ☐ 40 br
☐ 41 br
☐ 42 br



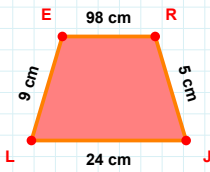
88 br hangi kenara aittir?

- ☐ HB kenarı
☐ HR kenarı
☐ RZ kenarı



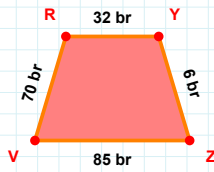
88 cm hangi kenara aittir?

Kenar:



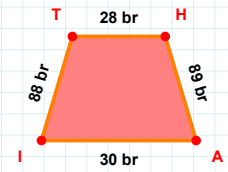
|ER| kaç cmdir?

- ☐ 97 cm
☐ 98 cm
☐ 99 cm



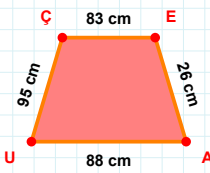
70 br hangi kenara aittir?

Kenar:



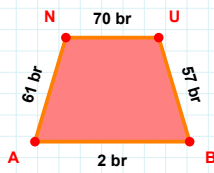
|TI| + |AI| =

Cevap: br



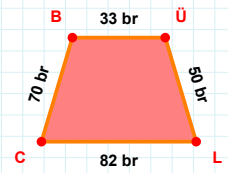
95 cm hangi kenara aittir?

- ☐ EA kenarı
☐ AU kenarı
☐ AÇ kenarı



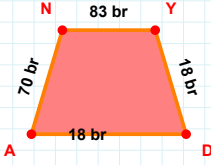
|UB| + |BA| =

Cevap: br



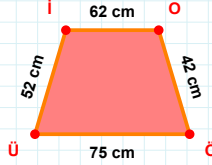
33 br hangi kenara aittir?

Kenar:

SORU: Aşağıdaki geometrik şekillerle ilgili soruları cevaplayınız.

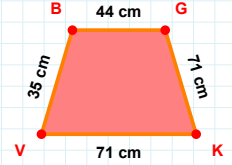
$|NY| + |DA| = \dots$

Cevap: br



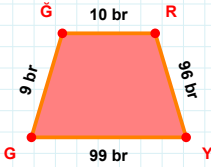
$|İO| + |Üİ| = \dots$

Cevap: cm



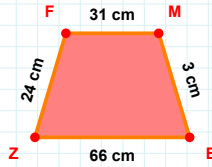
44 cm hangi kenara aittir?

Kenar:



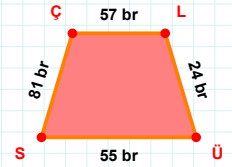
$|RY| + |ĞĞ| = \dots$

Cevap: br



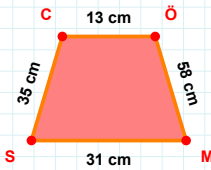
|ZF| kaç cmdir?

- ☐ 23 cm
☐ 24 cm
☐ 25 cm



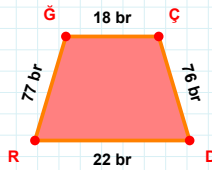
24 br hangi kenara aittir?

Kenar:



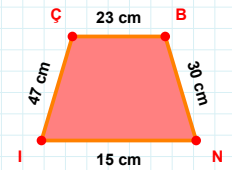
35 cm hangi kenara aittir?

- ☐ CÖ kenarı
☐ SC kenarı
☐ CM kenarı



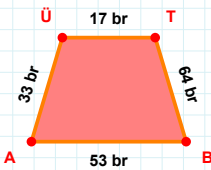
|ÇD| kaç brdir?

- ☐ 75 br
☐ 76 br
☐ 77 br



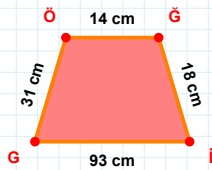
47 cm hangi kenara aittir?

- ☐ İÇ kenarı
☐ BN kenarı
☐ ÇN kenarı



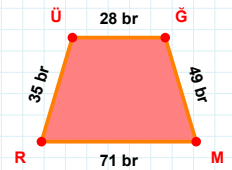
|AÜ| kaç brdir?

- ☐ 32 br
☐ 33 br
☐ 34 br



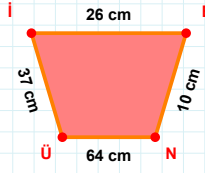
18 cm hangi kenara aittir?

Kenar:



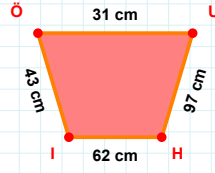
|ÜĞ| kaç brdir?

- ☐ 27 br
☐ 28 br
☐ 29 br

SORU: Aşağıdaki geometrik şekillerle ilgili soruları cevaplayınız.

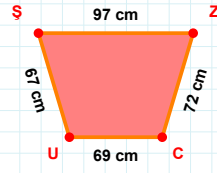
$$|NÜ| + |BN| = \dots$$

Cevap: cm



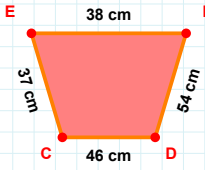
$$|HI| + |UH| = \dots$$

Cevap: cm



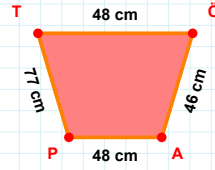
97 cm hangi kenara aittir?

Kenar:



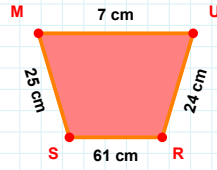
46 cm hangi kenara aittir?

Kenar:



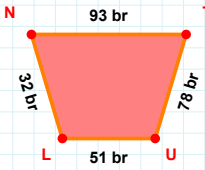
|PT| kaç cm'dir?

- ☐ 76 cm
☐ 77 cm
☐ 78 cm



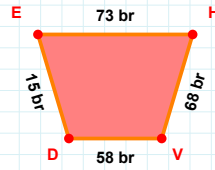
24 cm hangi kenara aittir?

Kenar:



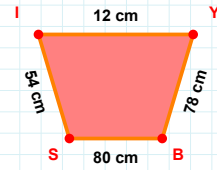
$$|UL| + |LN| = \dots$$

Cevap: br



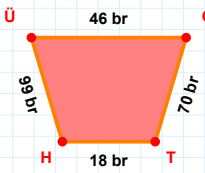
$$|EH| + |VD| = \dots$$

Cevap: br



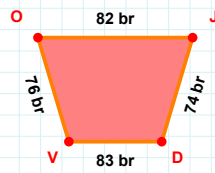
$$|BS| + |SI| = \dots$$

Cevap: cm



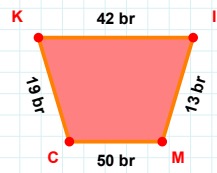
70 br hangi kenara aittir?

Kenar:



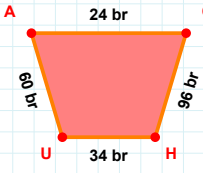
|JD| kaç br'dir?

- ☐ 73 br
☐ 74 br
☐ 75 br



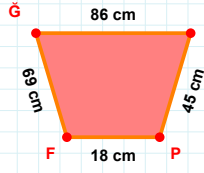
|MC| kaç br'dir?

- ☐ 49 br
☐ 50 br
☐ 51 br

SORU: Aşağıdaki geometrik şekillerle ilgili soruları cevaplayınız.

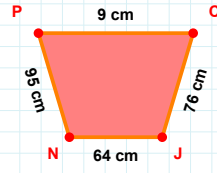
60 br hangi kenara aittir?

- ☐ AC kenarı
☐ HA kenarı
☐ HU kenarı



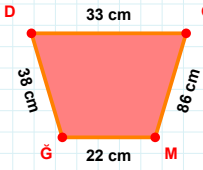
|FG| kaç cmdir?

- ☐ 68 cm
☐ 69 cm
☐ 70 cm



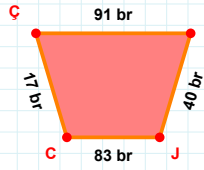
|NP| kaç cmdir?

- ☐ 94 cm
☐ 95 cm
☐ 96 cm



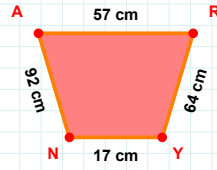
|DG| + |GM| =

Cevap: cm



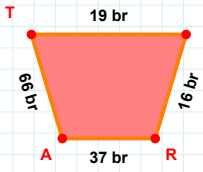
91 br hangi kenara aittir?

Kenar:



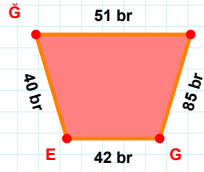
|NA| kaç cmdir?

- ☐ 91 cm
☐ 92 cm
☐ 93 cm



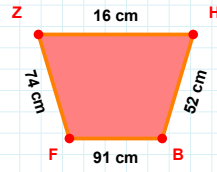
66 br hangi kenara aittir?

- ☐ RT kenarı
☐ TI kenarı
☐ RA kenarı



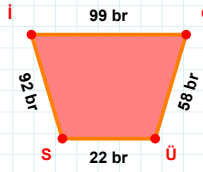
|YG| + |GY| =

Cevap: br



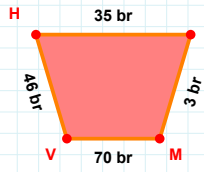
|BF| + |FZ| =

Cevap: cm



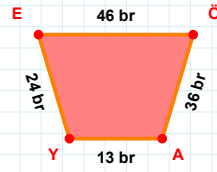
|IG| kaç brdir?

- ☐ 98 br
☐ 99 br
☐ 100 br



|HG| kaç brdir?

- ☐ 34 br
☐ 35 br
☐ 36 br



24 br hangi kenara aittir?

- ☐ AY kenarı
☐ YÖ kenarı
☐ EÖ kenarı

SÜREÇ ODAKLI DEĞERLENDİRME ÖLÇEĞİ

Geliştirilmeli (0-109)	İyi (110-187)	Çok İyi (188-265)	Mükemmel (266-312)
<input type="checkbox"/>	<input type="checkbox"/>	<input type="checkbox"/>	<input type="checkbox"/>

Hazırlayan:

Bu bölüme sınıfınızın ilgili kazanıma yönelik genel durumuna ilişkin gözlem ve izlenimlerinizi, öğrencilerinizin bu kazanımla ilgili öğrenme eksikliklerini ve bu eksikliklerin giderilmesi amacıyla yaptığınız/yapmayı planladığınız faaliyetleri not edebilirsiniz.

No	Adı - Soyadı	Toplam Puan	Değerlendirme
1			
2			
3			
4			
5			
6			
7			
8			
9			
10			
11			
12			
13			
14			
15			
16			
17			
18			
19			
20			
21			
22			
23			
24			
25			
26			
27			
28			
29			
30			
31			
32			
33			
34			
35			

Hazırlayan: